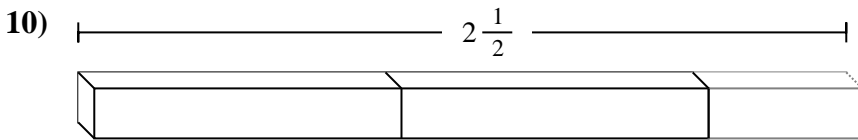
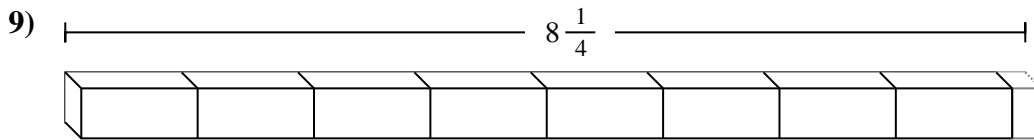
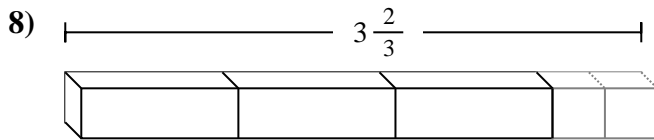
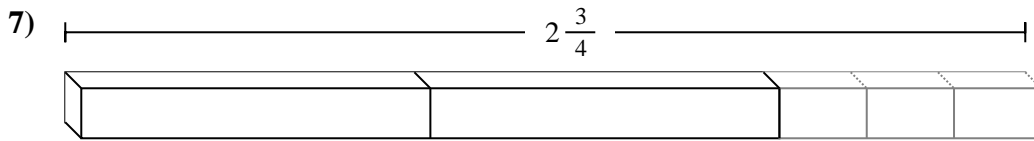
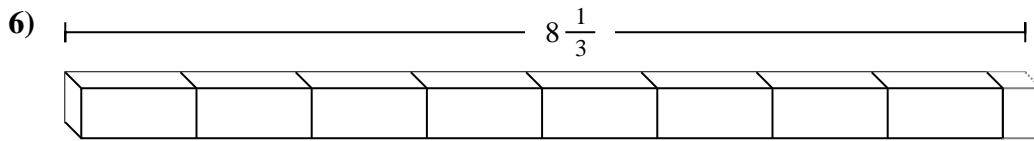
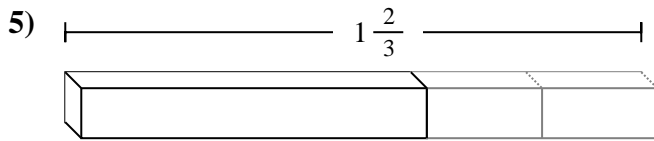
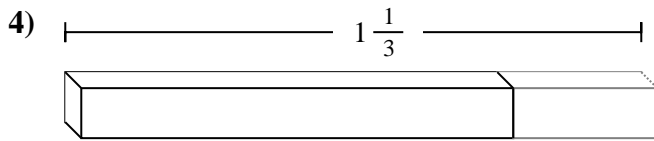
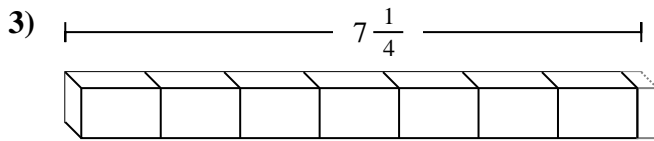
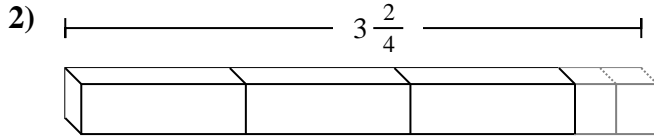
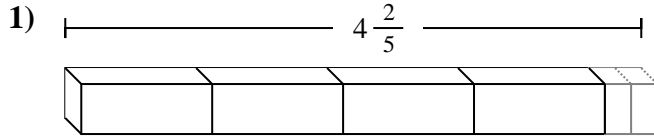
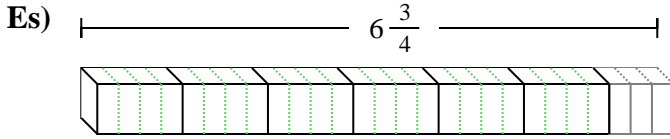




Indica il numero di piccole unità o parti frazionate che si possono ricavare dai pezzi più grandi.



Risposte

Es. 27

1. _____

2. _____

3. _____

4. _____

5. _____

6. _____

7. _____

8. _____

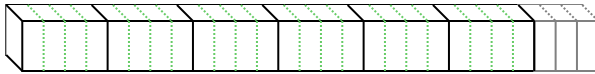
9. _____

10. _____

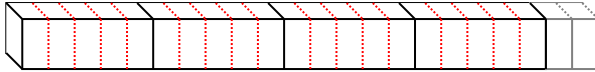


Indica il numero di piccole unità o parti frazionate che si possono ricavare dai pezzi più grandi.

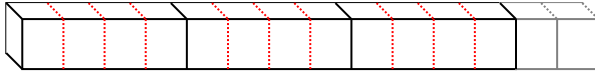
Es) $6 \frac{3}{4}$



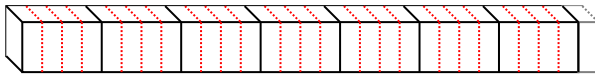
1) $4 \frac{2}{5}$



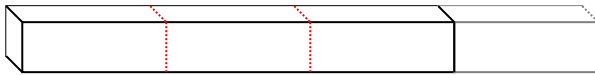
2) $3 \frac{2}{4}$




3) $7 \frac{1}{4}$



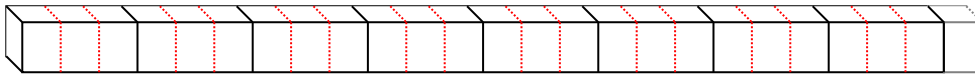
4) $1 \frac{1}{3}$



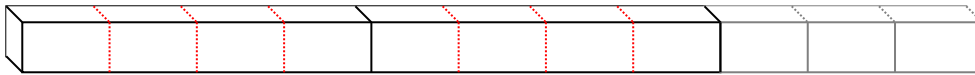
5) $1 \frac{2}{3}$



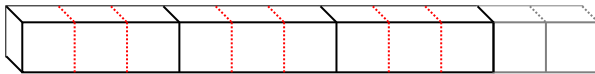
6) $8 \frac{1}{3}$



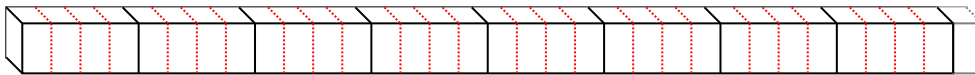
7) $2 \frac{3}{4}$




8) $3 \frac{2}{3}$



9) $8 \frac{1}{4}$



10) $2 \frac{1}{2}$



Risposte

Es. 27

1. 22

2. 14

3. 29

4. 4

5. 5

6. 25

7. 11

8. 11

9. 33

10. 5