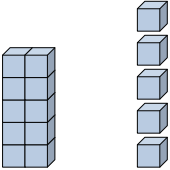





Riempi gli spazi per trovare la quantità.

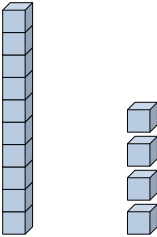
Risposte

Es) 

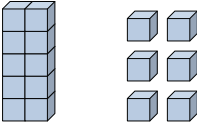
 Decine Unità

Es) 


 Decine Unità

1) 

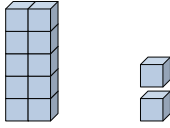
 Decine Unità

2) 

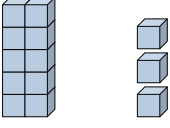
 Decine Unità

3) 

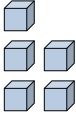
 Decine Unità

4) 

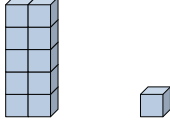
 Decine Unità

5) 

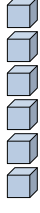
 Decine Unità

6) 


 Decine Unità

7) 

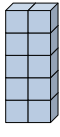
 Decine Unità

8) 

 Decine Unità

9) 

 Decine Unità

10) 

 Decine Unità

Es. 15

Es. 4

1. _____

2. _____

3. _____

4. _____

5. _____

6. _____

7. _____

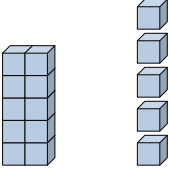
8. _____


9. _____

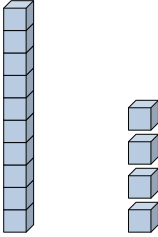
10. _____

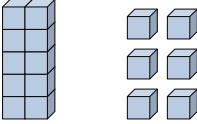


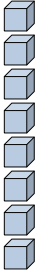
Riempi gli spazi per trovare la quantità.

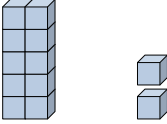
Es) 
 $\frac{1}{\text{Decine}} \quad \frac{5}{\text{Unità}}$

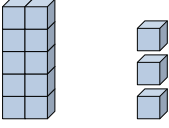
Es) 
 $\frac{0}{\text{Decine}} \quad \frac{4}{\text{Unità}}$

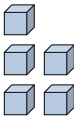
1) 
 $\frac{1}{\text{Decine}} \quad \frac{4}{\text{Unità}}$

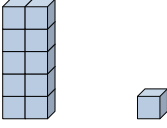
2) 
 $\frac{1}{\text{Decine}} \quad \frac{6}{\text{Unità}}$

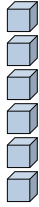
3) 
 $\frac{0}{\text{Decine}} \quad \frac{8}{\text{Unità}}$


4) 
 $\frac{1}{\text{Decine}} \quad \frac{2}{\text{Unità}}$


5) 
 $\frac{1}{\text{Decine}} \quad \frac{3}{\text{Unità}}$

6) 
 $\frac{0}{\text{Decine}} \quad \frac{5}{\text{Unità}}$

7) 
 $\frac{1}{\text{Decine}} \quad \frac{1}{\text{Unità}}$

8) 
 $\frac{0}{\text{Decine}} \quad \frac{6}{\text{Unità}}$

9) 
 $\frac{0}{\text{Decine}} \quad \frac{1}{\text{Unità}}$

10) 
 $\frac{1}{\text{Decine}} \quad \frac{0}{\text{Unità}}$

Risposte

Es. 15

Es. 4

1. 14

2. 16

3. 8

4. 12

5. 13

6. 5

7. 11

8. 6

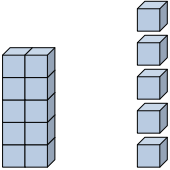
9. 1

10. 10

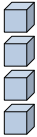


Riempi gli spazi per trovare la quantità.

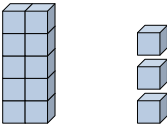
Risposte

Es) 

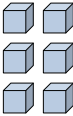
 Decine Unità

Es) 


 Decine Unità

1) 

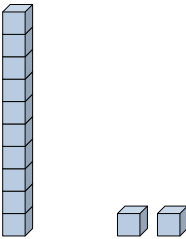
 Decine Unità

2) 


 Decine Unità

3) 

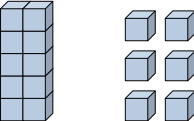
 Decine Unità

4) 

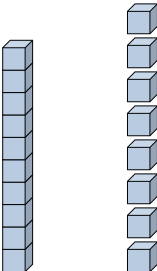
 Decine Unità

5) 

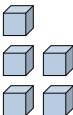
 Decine Unità

6) 

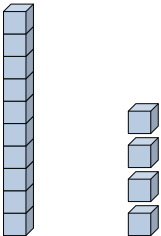
 Decine Unità

7) 


 Decine Unità

8) 

 Decine Unità

9) 

 Decine Unità

10) 

 Decine Unità

Es. 15

Es. 4

1. _____

2. _____

3. _____

4. _____

5. _____

6. _____

7. _____

8. _____

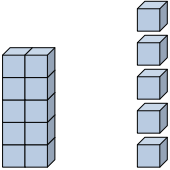
9. _____

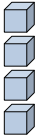
10. _____

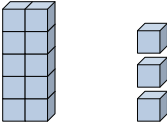


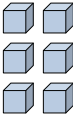
Riempi gli spazi per trovare la quantità.


Risposte

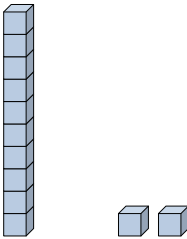
Es) 
 $\frac{1}{\text{Decine}} \quad \frac{5}{\text{Unità}}$


Es) 
 $\frac{0}{\text{Decine}} \quad \frac{4}{\text{Unità}}$

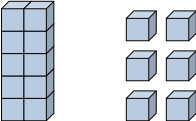
1) 
 $\frac{1}{\text{Decine}} \quad \frac{3}{\text{Unità}}$

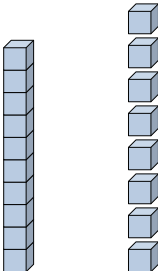
2) 
 $\frac{0}{\text{Decine}} \quad \frac{6}{\text{Unità}}$

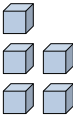
3) 
 $\frac{1}{\text{Decine}} \quad \frac{0}{\text{Unità}}$

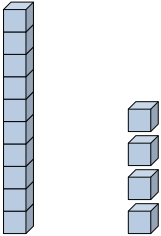
4) 
 $\frac{1}{\text{Decine}} \quad \frac{2}{\text{Unità}}$


5) 
 $\frac{0}{\text{Decine}} \quad \frac{7}{\text{Unità}}$

6) 
 $\frac{1}{\text{Decine}} \quad \frac{6}{\text{Unità}}$

7) 
 $\frac{1}{\text{Decine}} \quad \frac{8}{\text{Unità}}$

8) 
 $\frac{0}{\text{Decine}} \quad \frac{5}{\text{Unità}}$

9) 
 $\frac{1}{\text{Decine}} \quad \frac{4}{\text{Unità}}$

10) 
 $\frac{0}{\text{Decine}} \quad \frac{9}{\text{Unità}}$

Es. 15

Es. 4

1. 13

2. 6

3. 10

4. 12

5. 7

6. 16

7. 18

8. 5

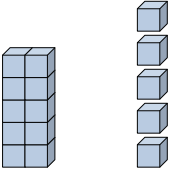
9. 14

10. 9




Riempi gli spazi per trovare la quantità.


Risposte

Es) 


 Decine Unità

Es) 

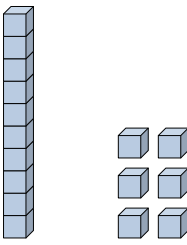
 Decine Unità

1) 

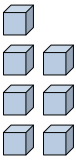
 Decine Unità

2) 

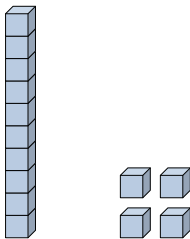
 Decine Unità

3) 


 Decine Unità

4) 

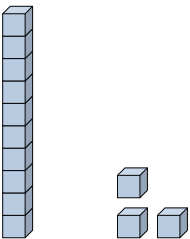
 Decine Unità

5) 

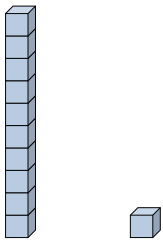
 Decine Unità

6) 

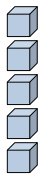
 Decine Unità

7) 

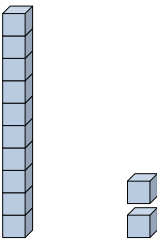
 Decine Unità

8) 

 Decine Unità

9) 

 Decine Unità

10) 

 Decine Unità

Es. 15

Es. 4

1. _____

2. _____

3. _____

4. _____

5. _____

6. _____

7. _____

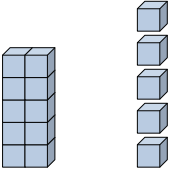
8. _____


9. _____

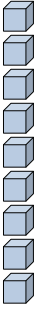
10. _____

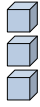


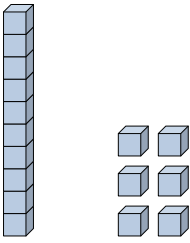
Riempi gli spazi per trovare la quantità.

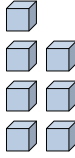
Es)  $\frac{1}{\text{Decine}} \quad \frac{5}{\text{Unità}}$

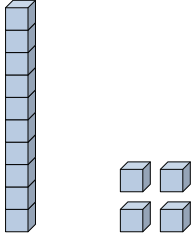
Es) $\frac{0}{\text{Decine}} \quad \frac{4}{\text{Unità}}$ 


1) $\frac{0}{\text{Decine}} \quad \frac{9}{\text{Unità}}$ 

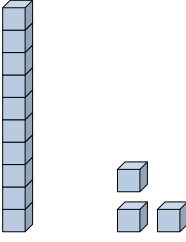
2) $\frac{0}{\text{Decine}} \quad \frac{3}{\text{Unità}}$ 

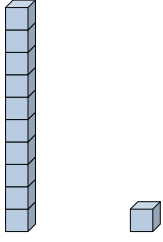
3) $\frac{1}{\text{Decine}} \quad \frac{6}{\text{Unità}}$ 

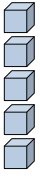
4) $\frac{0}{\text{Decine}} \quad \frac{7}{\text{Unità}}$ 

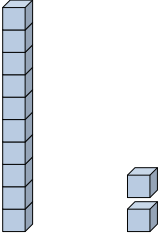
5) $\frac{1}{\text{Decine}} \quad \frac{4}{\text{Unità}}$ 

6) $\frac{0}{\text{Decine}} \quad \frac{1}{\text{Unità}}$ 

7) $\frac{1}{\text{Decine}} \quad \frac{3}{\text{Unità}}$ 

8) $\frac{1}{\text{Decine}} \quad \frac{1}{\text{Unità}}$ 

9) $\frac{0}{\text{Decine}} \quad \frac{5}{\text{Unità}}$ 

10) $\frac{1}{\text{Decine}} \quad \frac{2}{\text{Unità}}$ 

Risposte

Es. 15

Es. 4

1. 9

2. 3

3. 16

4. 7

5. 14

6. 1

7. 13

8. 11

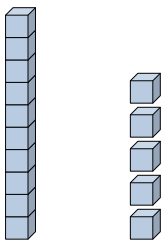
9. 5

10. 12




Riempi gli spazi per trovare la quantità.

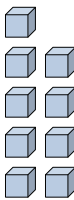
Risposte

Es) 

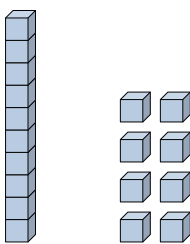
 Decine Unità

Es) 

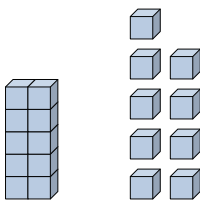
 Decine Unità

1) 

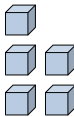
 Decine Unità

2) 

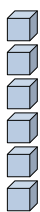
 Decine Unità

3) 

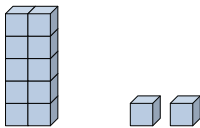
 Decine Unità

4) 

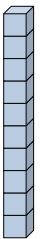
 Decine Unità

5) 


 Decine Unità

6) 

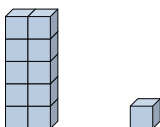
 Decine Unità

7) 

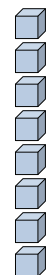
 Decine Unità

8) 

 Decine Unità

9) 

 Decine Unità

10) 

 Decine Unità

Es. 15

Es. 4

1. _____

2. _____

3. _____

4. _____

5. _____

6. _____

7. _____

8. _____

9. _____

10. _____



Riempi gli spazi per trovare la quantità.

Es) $\frac{1}{\text{Decine}}$ $\frac{5}{\text{Unità}}$

Es) $\frac{0}{\text{Decine}}$ $\frac{4}{\text{Unità}}$

1) $\frac{0}{\text{Decine}}$ $\frac{9}{\text{Unità}}$

2) $\frac{1}{\text{Decine}}$ $\frac{8}{\text{Unità}}$

3) $\frac{1}{\text{Decine}}$ $\frac{9}{\text{Unità}}$

4) $\frac{0}{\text{Decine}}$ $\frac{5}{\text{Unità}}$

5) $\frac{0}{\text{Decine}}$ $\frac{6}{\text{Unità}}$

6) $\frac{1}{\text{Decine}}$ $\frac{2}{\text{Unità}}$

7) $\frac{1}{\text{Decine}}$ $\frac{0}{\text{Unità}}$

8) $\frac{0}{\text{Decine}}$ $\frac{1}{\text{Unità}}$

9) $\frac{1}{\text{Decine}}$ $\frac{1}{\text{Unità}}$

10) $\frac{0}{\text{Decine}}$ $\frac{8}{\text{Unità}}$

Risposte

Es. 15

Es. 4

1. 9

2. 18

3. 19

4. 5

5. 6

6. 12

7. 10

8. 1

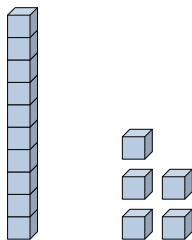
9. 11

10. 8




Riempi gli spazi per trovare la quantità.


Risposte

Es) 

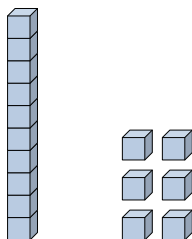
 Decine Unità

Es) 


 Decine Unità

1) 

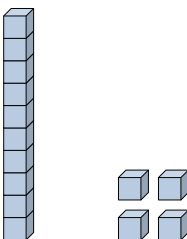
 Decine Unità

2) 

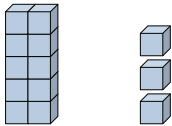
 Decine Unità

3) 


 Decine Unità

4) 

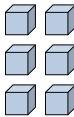
 Decine Unità

5) 

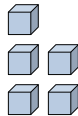
 Decine Unità

6) 


 Decine Unità

7) 

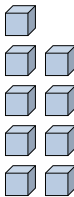
 Decine Unità

8) 

 Decine Unità

9) 

 Decine Unità

10) 

 Decine Unità

Es. 15

Es. 4

1. _____

2. _____

3. _____

4. _____

5. _____

6. _____

7. _____

8. _____

9. _____

10. _____



Riempi gli spazi per trovare la quantità.

Es) $\frac{1}{\text{Decine}}$ $\frac{5}{\text{Unità}}$

Es) $\frac{0}{\text{Decine}}$ $\frac{4}{\text{Unità}}$

1) $\frac{0}{\text{Decine}}$ $\frac{2}{\text{Unità}}$

2) $\frac{1}{\text{Decine}}$ $\frac{6}{\text{Unità}}$

3) $\frac{1}{\text{Decine}}$ $\frac{0}{\text{Unità}}$

4) $\frac{1}{\text{Decine}}$ $\frac{4}{\text{Unità}}$

5) $\frac{1}{\text{Decine}}$ $\frac{3}{\text{Unità}}$

6) $\frac{0}{\text{Decine}}$ $\frac{1}{\text{Unità}}$

7) $\frac{0}{\text{Decine}}$ $\frac{6}{\text{Unità}}$

8) $\frac{0}{\text{Decine}}$ $\frac{5}{\text{Unità}}$

9) $\frac{0}{\text{Decine}}$ $\frac{7}{\text{Unità}}$

10) $\frac{0}{\text{Decine}}$ $\frac{9}{\text{Unità}}$

Risposte

Es. 15

Es. 4

1. 2

2. 16

3. 10

4. 14

5. 13

6. 1

7. 6

8. 5

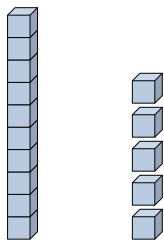
9. 7

10. 9

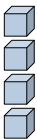


Riempi gli spazi per trovare la quantità.

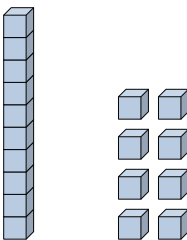
Risposte

Es) 

 Decine Unità

Es) 

 Decine Unità

1) 

 Decine Unità

Es. 15

Es. 4

1. _____

2. _____

3. _____

4. _____

5. _____

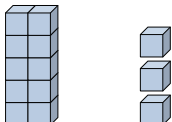
6. _____

7. _____


8. _____

9. _____

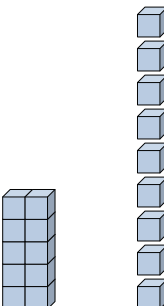
10. _____

2) 

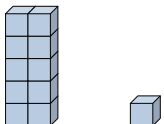
 Decine Unità

3) 

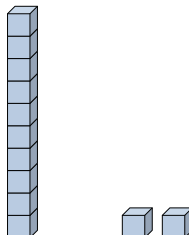
 Decine Unità

4) 

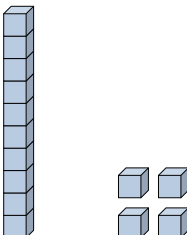
 Decine Unità

5) 

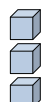
 Decine Unità

6) 

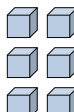
 Decine Unità

7) 

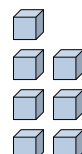
 Decine Unità

8) 

 Decine Unità

9) 

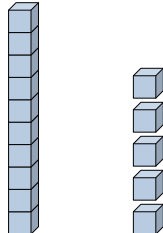
 Decine Unità


10) 

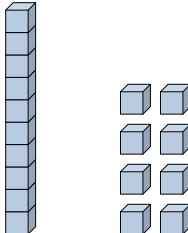
 Decine Unità

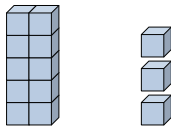



Riempi gli spazi per trovare la quantità.

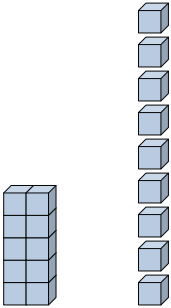
Es) 
 $\begin{array}{r} 1 \\ \hline \text{Decine} \end{array}$ $\begin{array}{r} 5 \\ \hline \text{Unità} \end{array}$

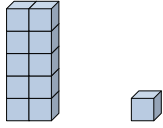
Es) 
 $\begin{array}{r} 0 \\ \hline \text{Decine} \end{array}$ $\begin{array}{r} 4 \\ \hline \text{Unità} \end{array}$

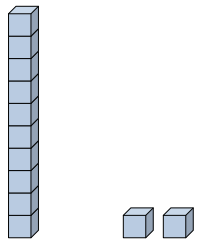
1) 
 $\begin{array}{r} 1 \\ \hline \text{Decine} \end{array}$ $\begin{array}{r} 8 \\ \hline \text{Unità} \end{array}$

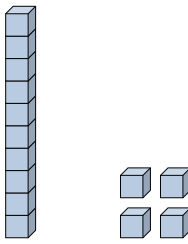
2) 
 $\begin{array}{r} 1 \\ \hline \text{Decine} \end{array}$ $\begin{array}{r} 3 \\ \hline \text{Unità} \end{array}$


3) 
 $\begin{array}{r} 1 \\ \hline \text{Decine} \end{array}$ $\begin{array}{r} 0 \\ \hline \text{Unità} \end{array}$

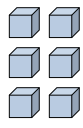
4) 
 $\begin{array}{r} 1 \\ \hline \text{Decine} \end{array}$ $\begin{array}{r} 9 \\ \hline \text{Unità} \end{array}$

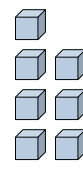
5) 
 $\begin{array}{r} 1 \\ \hline \text{Decine} \end{array}$ $\begin{array}{r} 1 \\ \hline \text{Unità} \end{array}$

6) 
 $\begin{array}{r} 1 \\ \hline \text{Decine} \end{array}$ $\begin{array}{r} 2 \\ \hline \text{Unità} \end{array}$

7) 
 $\begin{array}{r} 1 \\ \hline \text{Decine} \end{array}$ $\begin{array}{r} 4 \\ \hline \text{Unità} \end{array}$

8) 
 $\begin{array}{r} 0 \\ \hline \text{Decine} \end{array}$ $\begin{array}{r} 3 \\ \hline \text{Unità} \end{array}$

9) 
 $\begin{array}{r} 0 \\ \hline \text{Decine} \end{array}$ $\begin{array}{r} 6 \\ \hline \text{Unità} \end{array}$

10) 
 $\begin{array}{r} 0 \\ \hline \text{Decine} \end{array}$ $\begin{array}{r} 7 \\ \hline \text{Unità} \end{array}$

Risposte

Es. 15

Es. 4

1. 18

2. 13

3. 10

4. 19

5. 11

6. 12

7. 14

8. 3

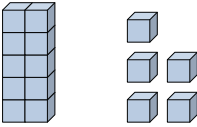
9. 6

10. 7

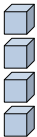


Riempi gli spazi per trovare la quantità.

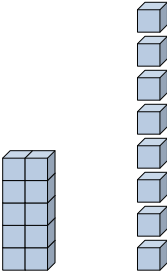
Risposte

Es) 

 Decine Unità

Es) 


 Decine Unità

1) 


 Decine Unità

Es. 15

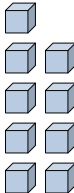
Es. 4

2) 

 Decine Unità

3) 

 Decine Unità

4) 

 Decine Unità

1. _____

2. _____

3. _____

4. _____

5. _____

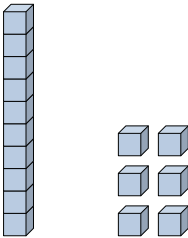
6. _____

7. _____

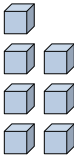
8. _____

9. _____

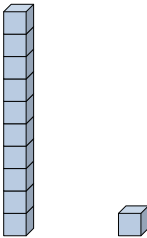
10. _____

5) 

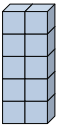
 Decine Unità

6) 

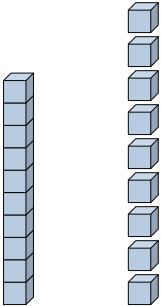
 Decine Unità

7) 


 Decine Unità

8) 

 Decine Unità

9) 

 Decine Unità

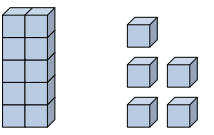
10) 

 Decine Unità

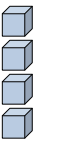


Riempi gli spazi per trovare la quantità.

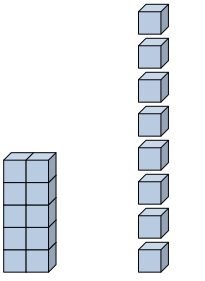
Risposte

Es) 

$$\begin{array}{r} 1 \\ \hline \text{Decine} \end{array} \quad \begin{array}{r} 5 \\ \hline \text{Unità} \end{array}$$

Es) 

$$\begin{array}{r} 0 \\ \hline \text{Decine} \end{array} \quad \begin{array}{r} 4 \\ \hline \text{Unità} \end{array}$$

1) 

$$\begin{array}{r} 1 \\ \hline \text{Decine} \end{array} \quad \begin{array}{r} 8 \\ \hline \text{Unità} \end{array}$$

Es. 15

Es. 4

1. 18

2. 8

3. 1

4. 9

5. 16

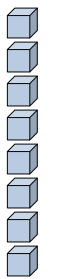
6. 7

7. 11


8. 10

9. 19

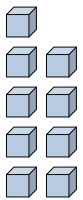
10. 3

2) 

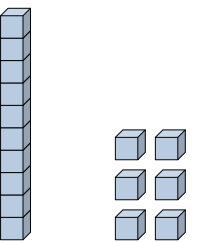
$$\begin{array}{r} 0 \\ \hline \text{Decine} \end{array} \quad \begin{array}{r} 8 \\ \hline \text{Unità} \end{array}$$

3) 

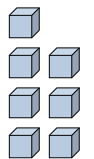
$$\begin{array}{r} 0 \\ \hline \text{Decine} \end{array} \quad \begin{array}{r} 1 \\ \hline \text{Unità} \end{array}$$

4) 

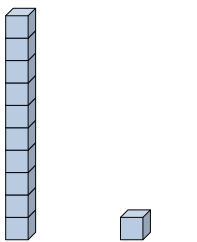
$$\begin{array}{r} 0 \\ \hline \text{Decine} \end{array} \quad \begin{array}{r} 9 \\ \hline \text{Unità} \end{array}$$

5) 

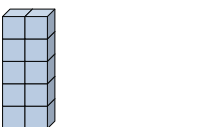
$$\begin{array}{r} 1 \\ \hline \text{Decine} \end{array} \quad \begin{array}{r} 6 \\ \hline \text{Unità} \end{array}$$

6) 

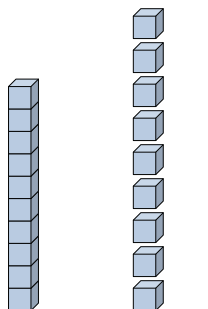
$$\begin{array}{r} 0 \\ \hline \text{Decine} \end{array} \quad \begin{array}{r} 7 \\ \hline \text{Unità} \end{array}$$

7) 

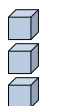
$$\begin{array}{r} 1 \\ \hline \text{Decine} \end{array} \quad \begin{array}{r} 1 \\ \hline \text{Unità} \end{array}$$

8) 

$$\begin{array}{r} 1 \\ \hline \text{Decine} \end{array} \quad \begin{array}{r} 0 \\ \hline \text{Unità} \end{array}$$

9) 

$$\begin{array}{r} 1 \\ \hline \text{Decine} \end{array} \quad \begin{array}{r} 9 \\ \hline \text{Unità} \end{array}$$

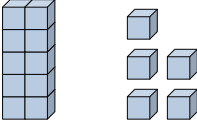
10) 

$$\begin{array}{r} 0 \\ \hline \text{Decine} \end{array} \quad \begin{array}{r} 3 \\ \hline \text{Unità} \end{array}$$




Riempi gli spazi per trovare la quantità.


Risposte

Es) 

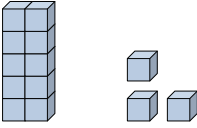
 Decine Unità

Es) 

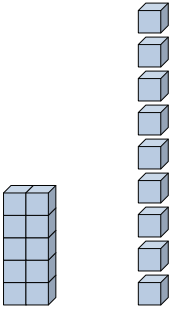
 Decine Unità

1) 

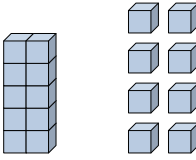
 Decine Unità

2) 

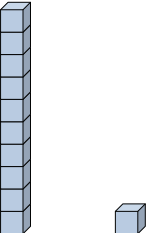
 Decine Unità

3) 


 Decine Unità

4) 

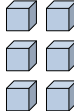
 Decine Unità

5) 


 Decine Unità

6) 

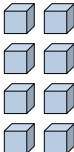
 Decine Unità

7) 

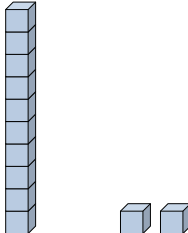
 Decine Unità

8) 

 Decine Unità

9) 

 Decine Unità

10) 

 Decine Unità

Es. 15

Es. 4

1. _____

2. _____

3. _____

4. _____

5. _____

6. _____

7. _____

8. _____

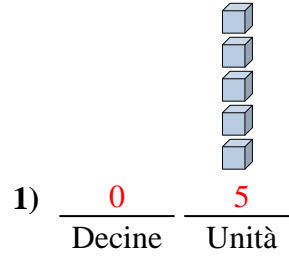
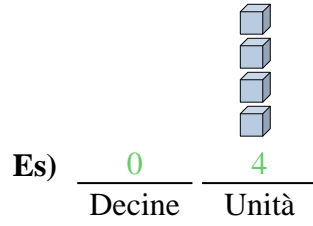
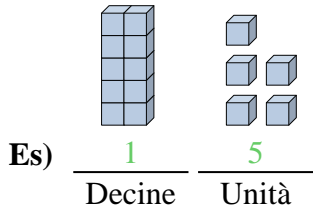
9. _____

10. _____



Riempi gli spazi per trovare la quantità.

Risposte



Es. 15

Es. 4

1. 5

2. 13

3. 19

4. 18

5. 11

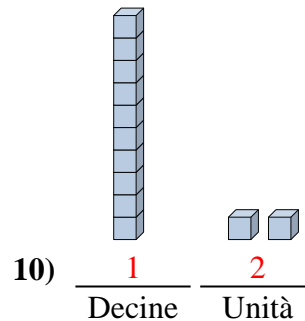
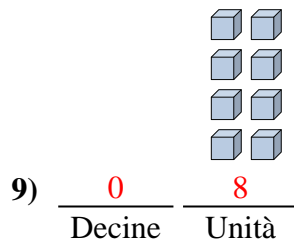
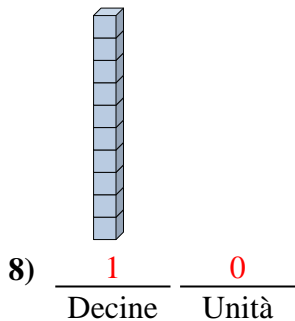
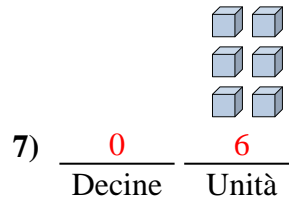
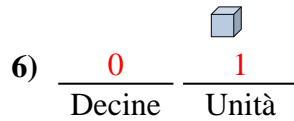
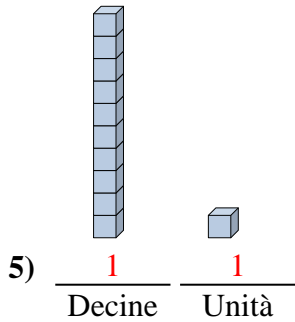
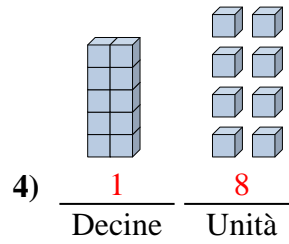
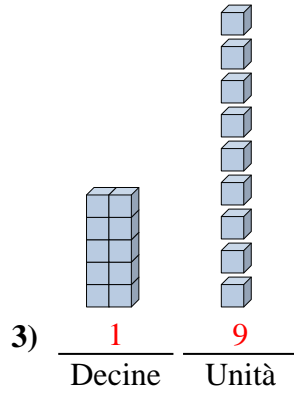
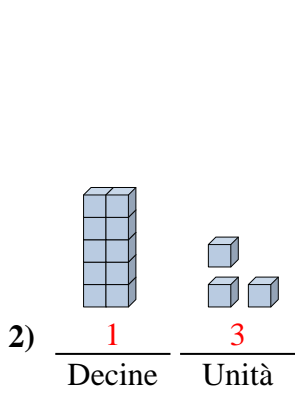
6. 1

7. 6

8. 10

9. 8

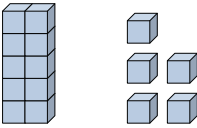
10. 12



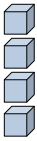


Riempi gli spazi per trovare la quantità.

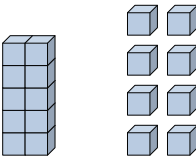
Risposte

Es) 

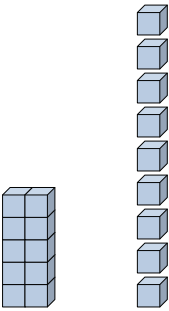
 Decine Unità

Es) 

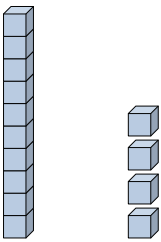
 Decine Unità

1) 


 Decine Unità

2) 


 Decine Unità

3) 


 Decine Unità

4) 

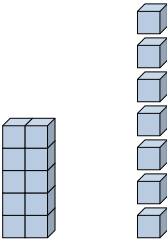
 Decine Unità

5) 

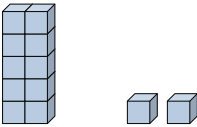
 Decine Unità

6) 

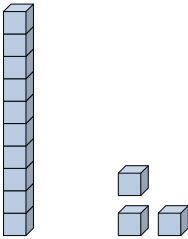
 Decine Unità

7) 

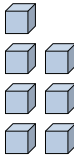
 Decine Unità

8) 

 Decine Unità

9) 

 Decine Unità

10) 

 Decine Unità

Es. 15

Es. 4

1. _____

2. _____

3. _____

4. _____

5. _____

6. _____

7. _____

8. _____

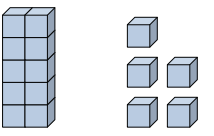
9. _____


10. _____

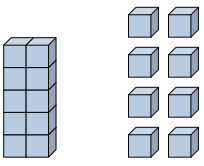


Riempi gli spazi per trovare la quantità.

Risposte

Es) 
 $\frac{1}{\text{Decine}} \quad \frac{5}{\text{Unità}}$

Es) 
 $\frac{0}{\text{Decine}} \quad \frac{4}{\text{Unità}}$

1) 
 $\frac{1}{\text{Decine}} \quad \frac{8}{\text{Unità}}$

Es. 15

Es. 4

1. 18

2. 19

3. 14

4. 6

5. 5

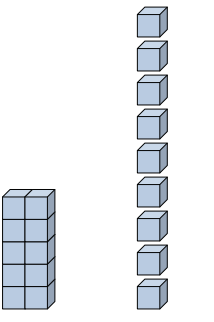
6. 3

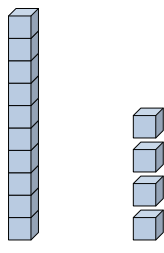
7. 17

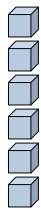
8. 12


9. 13


10. 7

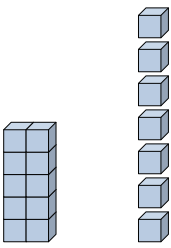
2) 
 $\frac{1}{\text{Decine}} \quad \frac{9}{\text{Unità}}$

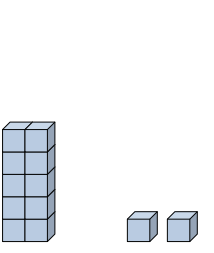
3) 
 $\frac{1}{\text{Decine}} \quad \frac{4}{\text{Unità}}$

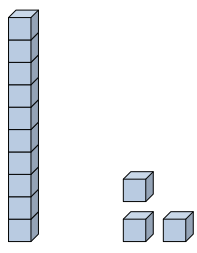
4) 
 $\frac{0}{\text{Decine}} \quad \frac{6}{\text{Unità}}$

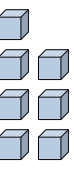
5) 
 $\frac{0}{\text{Decine}} \quad \frac{5}{\text{Unità}}$

6) 
 $\frac{0}{\text{Decine}} \quad \frac{3}{\text{Unità}}$

7) 
 $\frac{1}{\text{Decine}} \quad \frac{7}{\text{Unità}}$

8) 
 $\frac{1}{\text{Decine}} \quad \frac{2}{\text{Unità}}$


9) 
 $\frac{1}{\text{Decine}} \quad \frac{3}{\text{Unità}}$

10) 
 $\frac{0}{\text{Decine}} \quad \frac{7}{\text{Unità}}$




Riempi gli spazi per trovare la quantità.


Risposte

Es) 

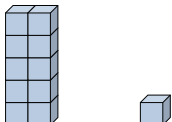
 Decine Unità

Es) 


 Decine Unità

1) 

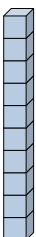
 Decine Unità

2) 


 Decine Unità

3) 

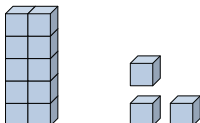
 Decine Unità

4) 


 Decine Unità

5) 

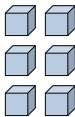
 Decine Unità

6) 


 Decine Unità

7) 

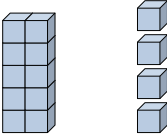
 Decine Unità

8) 

 Decine Unità

9) 

 Decine Unità

10) 

 Decine Unità

Es. 15

Es. 4

1. _____

2. _____

3. _____

4. _____

5. _____

6. _____

7. _____

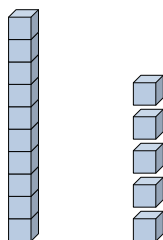
8. _____

9. _____


10. _____




Riempi gli spazi per trovare la quantità.

Es) 

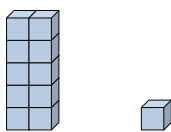
<u>1</u>	<u>5</u>
Decine	Unità

Es) 


<u>0</u>	<u>4</u>
Decine	Unità

1) 

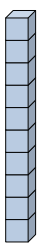
<u>0</u>	<u>5</u>
Decine	Unità

2) 


<u>1</u>	<u>1</u>
Decine	Unità

3) 

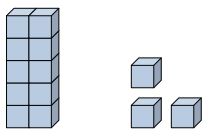
<u>0</u>	<u>1</u>
Decine	Unità

4) 


<u>1</u>	<u>0</u>
Decine	Unità

5) 

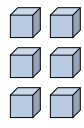
<u>0</u>	<u>3</u>
Decine	Unità

6) 


<u>1</u>	<u>3</u>
Decine	Unità

7) 

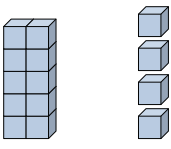
<u>0</u>	<u>2</u>
Decine	Unità

8) 

<u>0</u>	<u>6</u>
Decine	Unità

9) 

<u>0</u>	<u>7</u>
Decine	Unità

10) 

<u>1</u>	<u>4</u>
Decine	Unità

Risposte

Es. 15

Es. 4

1. 5

2. 11

3. 1

4. 10

5. 3

6. 13

7. 2

8. 6

9. 7

10. 14