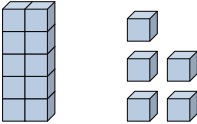
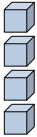





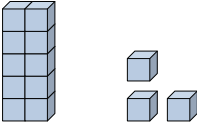
Riempi gli spazi per trovare la quantità.

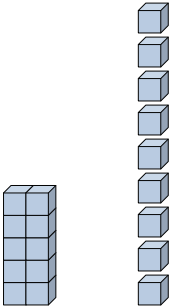
**Risposte**

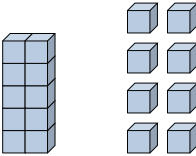
Es)    
 \_\_\_\_\_   
 Decine      Unità

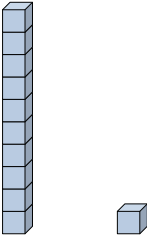
Es)    
 \_\_\_\_\_   
 Decine      Unità


1)    
 \_\_\_\_\_   
 Decine      Unità

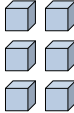
2)    
 \_\_\_\_\_   
 Decine      Unità

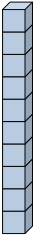
3)    
 \_\_\_\_\_   
 Decine      Unità

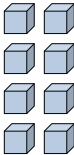
4)    
 \_\_\_\_\_   
 Decine      Unità

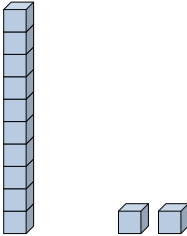
5)    
 \_\_\_\_\_   
 Decine      Unità

6)    
 \_\_\_\_\_   
 Decine      Unità

7)    
 \_\_\_\_\_   
 Decine      Unità

8)    
 \_\_\_\_\_   
 Decine      Unità

9)    
 \_\_\_\_\_   
 Decine      Unità

10)    
 \_\_\_\_\_   
 Decine      Unità

Es. 15

Es. 4

1. \_\_\_\_\_

2. \_\_\_\_\_

3. \_\_\_\_\_

4. \_\_\_\_\_

5. \_\_\_\_\_

6. \_\_\_\_\_

7. \_\_\_\_\_

8. \_\_\_\_\_

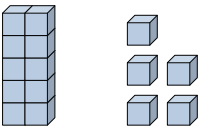
9. \_\_\_\_\_

10. \_\_\_\_\_




Riempi gli spazi per trovare la quantità.

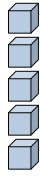
**Risposte**

Es)   

$$\begin{array}{r} 1 \\ \hline \text{Decine} \end{array} \quad \begin{array}{r} 5 \\ \hline \text{Unità} \end{array}$$

Es)   

$$\begin{array}{r} 0 \\ \hline \text{Decine} \end{array} \quad \begin{array}{r} 4 \\ \hline \text{Unità} \end{array}$$

1)   

$$\begin{array}{r} 0 \\ \hline \text{Decine} \end{array} \quad \begin{array}{r} 5 \\ \hline \text{Unità} \end{array}$$

Es. 15

Es. 4

1. 5

2. 13

3. 19

4. 18

5. 11

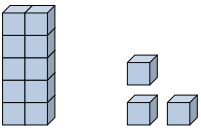
6. 1

7. 6

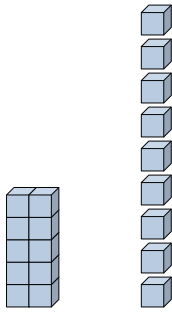
8. 10

9. 8

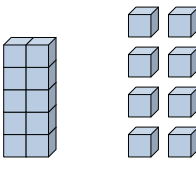
10. 12

2)   

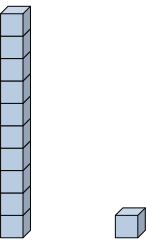
$$\begin{array}{r} 1 \\ \hline \text{Decine} \end{array} \quad \begin{array}{r} 3 \\ \hline \text{Unità} \end{array}$$

3)   


$$\begin{array}{r} 1 \\ \hline \text{Decine} \end{array} \quad \begin{array}{r} 9 \\ \hline \text{Unità} \end{array}$$

4)   

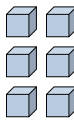
$$\begin{array}{r} 1 \\ \hline \text{Decine} \end{array} \quad \begin{array}{r} 8 \\ \hline \text{Unità} \end{array}$$

5)   


$$\begin{array}{r} 1 \\ \hline \text{Decine} \end{array} \quad \begin{array}{r} 1 \\ \hline \text{Unità} \end{array}$$

6)   

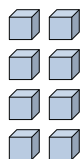
$$\begin{array}{r} 0 \\ \hline \text{Decine} \end{array} \quad \begin{array}{r} 1 \\ \hline \text{Unità} \end{array}$$

7)   

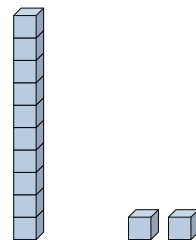
$$\begin{array}{r} 0 \\ \hline \text{Decine} \end{array} \quad \begin{array}{r} 6 \\ \hline \text{Unità} \end{array}$$

8)   

$$\begin{array}{r} 1 \\ \hline \text{Decine} \end{array} \quad \begin{array}{r} 0 \\ \hline \text{Unità} \end{array}$$

9)   

$$\begin{array}{r} 0 \\ \hline \text{Decine} \end{array} \quad \begin{array}{r} 8 \\ \hline \text{Unità} \end{array}$$

10)   

$$\begin{array}{r} 1 \\ \hline \text{Decine} \end{array} \quad \begin{array}{r} 2 \\ \hline \text{Unità} \end{array}$$