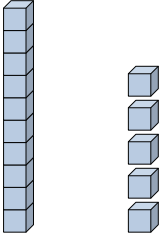


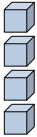


Riempi gli spazi per trovare la quantità.

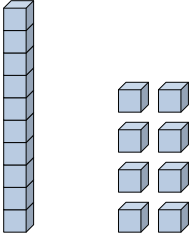
Risposte

Es) 

 Decine Unità

Es) 

 Decine Unità

1) 

 Decine Unità

Es. 15

Es. 4

1. _____

2. _____

3. _____

4. _____

5. _____

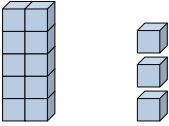
6. _____

7. _____

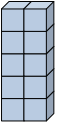
8. _____

9. _____

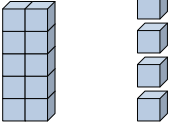
10. _____

2) 

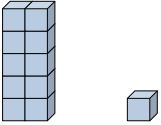
 Decine Unità

3) 

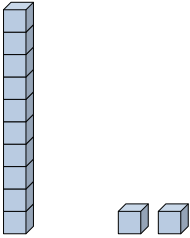
 Decine Unità

4) 

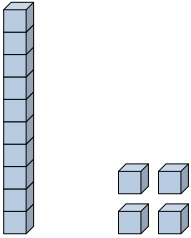
 Decine Unità

5) 


 Decine Unità

6) 

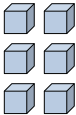
 Decine Unità

7) 

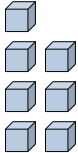
 Decine Unità

8) 

 Decine Unità

9) 

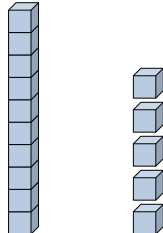
 Decine Unità


10) 

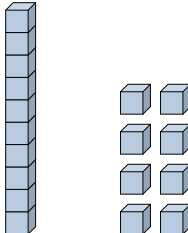
 Decine Unità

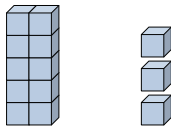



Riempi gli spazi per trovare la quantità.

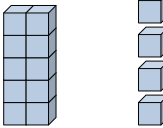
Es) 
 $\begin{array}{r} 1 \\ \hline \text{Decine} \end{array}$ $\begin{array}{r} 5 \\ \hline \text{Unità} \end{array}$

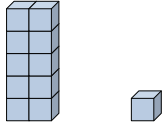
Es) 
 $\begin{array}{r} 0 \\ \hline \text{Decine} \end{array}$ $\begin{array}{r} 4 \\ \hline \text{Unità} \end{array}$

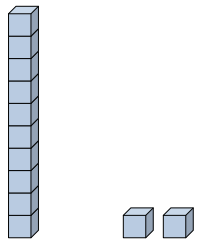
1) 
 $\begin{array}{r} 1 \\ \hline \text{Decine} \end{array}$ $\begin{array}{r} 8 \\ \hline \text{Unità} \end{array}$

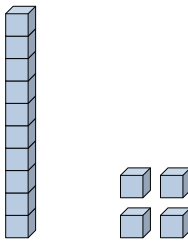
2) 
 $\begin{array}{r} 1 \\ \hline \text{Decine} \end{array}$ $\begin{array}{r} 3 \\ \hline \text{Unità} \end{array}$


3) 
 $\begin{array}{r} 1 \\ \hline \text{Decine} \end{array}$ $\begin{array}{r} 0 \\ \hline \text{Unità} \end{array}$

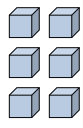
4) 
 $\begin{array}{r} 1 \\ \hline \text{Decine} \end{array}$ $\begin{array}{r} 9 \\ \hline \text{Unità} \end{array}$

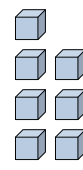
5) 
 $\begin{array}{r} 1 \\ \hline \text{Decine} \end{array}$ $\begin{array}{r} 1 \\ \hline \text{Unità} \end{array}$

6) 
 $\begin{array}{r} 1 \\ \hline \text{Decine} \end{array}$ $\begin{array}{r} 2 \\ \hline \text{Unità} \end{array}$

7) 
 $\begin{array}{r} 1 \\ \hline \text{Decine} \end{array}$ $\begin{array}{r} 4 \\ \hline \text{Unità} \end{array}$

8) 
 $\begin{array}{r} 0 \\ \hline \text{Decine} \end{array}$ $\begin{array}{r} 3 \\ \hline \text{Unità} \end{array}$

9) 
 $\begin{array}{r} 0 \\ \hline \text{Decine} \end{array}$ $\begin{array}{r} 6 \\ \hline \text{Unità} \end{array}$

10) 
 $\begin{array}{r} 0 \\ \hline \text{Decine} \end{array}$ $\begin{array}{r} 7 \\ \hline \text{Unità} \end{array}$

Risposte

Es. 15

Es. 4

1. 18

2. 13

3. 10

4. 19

5. 11

6. 12

7. 14

8. 3

9. 6

10. 7