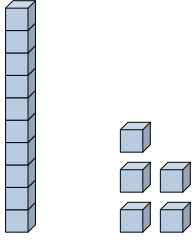





Riempi gli spazi per trovare la quantità.


Risposte

Es) 

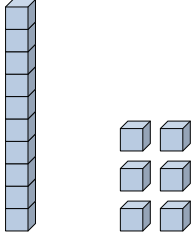
 Decine Unità

Es) 

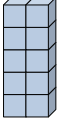
 Decine Unità

1) 

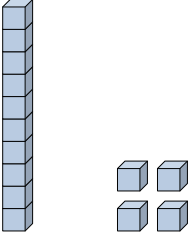
 Decine Unità

2) 

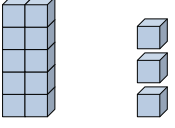
 Decine Unità

3) 


 Decine Unità

4) 

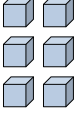
 Decine Unità

5) 

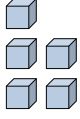
 Decine Unità

6) 


 Decine Unità

7) 

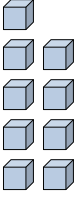
 Decine Unità

8) 

 Decine Unità

9) 

 Decine Unità

10) 

 Decine Unità

Es. 15

Es. 4

1. _____

2. _____

3. _____

4. _____

5. _____

6. _____

7. _____

8. _____

9. _____

10. _____



Riempi gli spazi per trovare la quantità.

Es) $\frac{1}{\text{Decine}}$ $\frac{5}{\text{Unità}}$

Es) $\frac{0}{\text{Decine}}$ $\frac{4}{\text{Unità}}$

1) $\frac{0}{\text{Decine}}$ $\frac{2}{\text{Unità}}$

2) $\frac{1}{\text{Decine}}$ $\frac{6}{\text{Unità}}$

3) $\frac{1}{\text{Decine}}$ $\frac{0}{\text{Unità}}$

4) $\frac{1}{\text{Decine}}$ $\frac{4}{\text{Unità}}$

5) $\frac{1}{\text{Decine}}$ $\frac{3}{\text{Unità}}$

6) $\frac{0}{\text{Decine}}$ $\frac{1}{\text{Unità}}$

7) $\frac{0}{\text{Decine}}$ $\frac{6}{\text{Unità}}$

8) $\frac{0}{\text{Decine}}$ $\frac{5}{\text{Unità}}$

9) $\frac{0}{\text{Decine}}$ $\frac{7}{\text{Unità}}$

10) $\frac{0}{\text{Decine}}$ $\frac{9}{\text{Unità}}$

Risposte

Es. 15

Es. 4

1. 2

2. 16

3. 10

4. 14

5. 13

6. 1

7. 6

8. 5

9. 7

10. 9