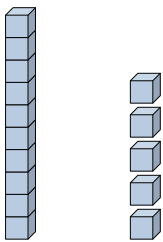



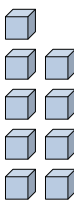


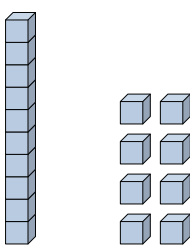
Riempi gli spazi per trovare la quantità.

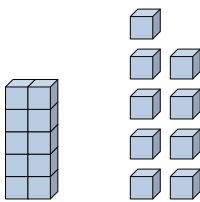
**Risposte**

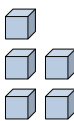
Es)   
 \_\_\_\_\_  
 Decine      Unità

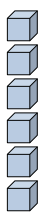
Es)   
 \_\_\_\_\_  
 Decine      Unità

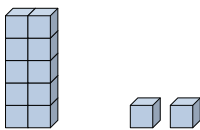
1)   
 \_\_\_\_\_  
 Decine      Unità

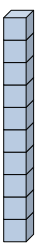
2)   
 \_\_\_\_\_  
 Decine      Unità


3)   
 \_\_\_\_\_  
 Decine      Unità

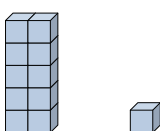
4)   
 \_\_\_\_\_  
 Decine      Unità


5)   
 \_\_\_\_\_  
 Decine      Unità

6)   
 \_\_\_\_\_  
 Decine      Unità

7)   
 \_\_\_\_\_  
 Decine      Unità

8)   
 \_\_\_\_\_  
 Decine      Unità

9)   
 \_\_\_\_\_  
 Decine      Unità

10)   
 \_\_\_\_\_  
 Decine      Unità

Es. 15

Es. 4

1. \_\_\_\_\_

2. \_\_\_\_\_

3. \_\_\_\_\_

4. \_\_\_\_\_

5. \_\_\_\_\_

6. \_\_\_\_\_

7. \_\_\_\_\_

8. \_\_\_\_\_

9. \_\_\_\_\_

10. \_\_\_\_\_



Riempi gli spazi per trovare la quantità.

Es)  $\frac{1}{\text{Decine}}$   $\frac{5}{\text{Unità}}$

Es)  $\frac{0}{\text{Decine}}$   $\frac{4}{\text{Unità}}$

1)  $\frac{0}{\text{Decine}}$   $\frac{9}{\text{Unità}}$

2)  $\frac{1}{\text{Decine}}$   $\frac{8}{\text{Unità}}$

3)  $\frac{1}{\text{Decine}}$   $\frac{9}{\text{Unità}}$

4)  $\frac{0}{\text{Decine}}$   $\frac{5}{\text{Unità}}$

5)  $\frac{0}{\text{Decine}}$   $\frac{6}{\text{Unità}}$

6)  $\frac{1}{\text{Decine}}$   $\frac{2}{\text{Unità}}$

7)  $\frac{1}{\text{Decine}}$   $\frac{0}{\text{Unità}}$

8)  $\frac{0}{\text{Decine}}$   $\frac{1}{\text{Unità}}$

9)  $\frac{1}{\text{Decine}}$   $\frac{1}{\text{Unità}}$

10)  $\frac{0}{\text{Decine}}$   $\frac{8}{\text{Unità}}$

Risposte

Es. 15

Es. 4

1. 9

2. 18

3. 19

4. 5

5. 6

6. 12

7. 10

8. 1

9. 11

10. 8