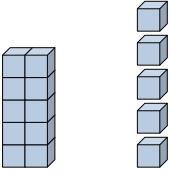


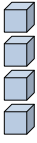


Riempi gli spazi per trovare la quantità.

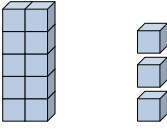
Risposte

Es) 

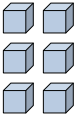
 Decine Unità

Es) 


 Decine Unità

1) 

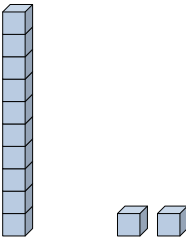
 Decine Unità

2) 


 Decine Unità

3) 

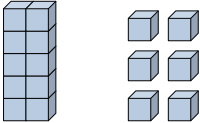
 Decine Unità

4) 

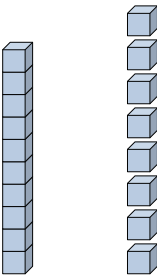
 Decine Unità

5) 

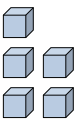
 Decine Unità

6) 

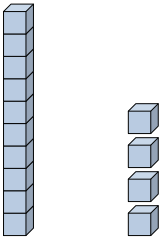
 Decine Unità

7) 


 Decine Unità

8) 

 Decine Unità

9) 

 Decine Unità

10) 

 Decine Unità

Es. 15

Es. 4

1. _____

2. _____

3. _____

4. _____

5. _____

6. _____

7. _____

8. _____

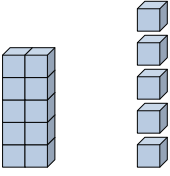
9. _____


10. _____

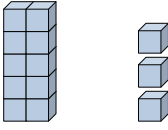


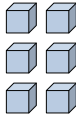
Riempi gli spazi per trovare la quantità.


Risposte

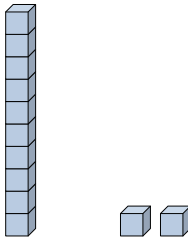
Es) 
 $\frac{1}{\text{Decine}} \quad \frac{5}{\text{Unità}}$


Es) 
 $\frac{0}{\text{Decine}} \quad \frac{4}{\text{Unità}}$

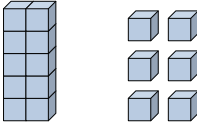
1) 
 $\frac{1}{\text{Decine}} \quad \frac{3}{\text{Unità}}$

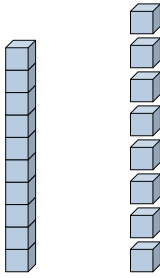
2) 
 $\frac{0}{\text{Decine}} \quad \frac{6}{\text{Unità}}$

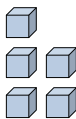
3) 
 $\frac{1}{\text{Decine}} \quad \frac{0}{\text{Unità}}$

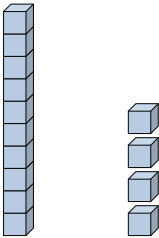
4) 
 $\frac{1}{\text{Decine}} \quad \frac{2}{\text{Unità}}$


5) 
 $\frac{0}{\text{Decine}} \quad \frac{7}{\text{Unità}}$

6) 
 $\frac{1}{\text{Decine}} \quad \frac{6}{\text{Unità}}$

7) 
 $\frac{1}{\text{Decine}} \quad \frac{8}{\text{Unità}}$

8) 
 $\frac{0}{\text{Decine}} \quad \frac{5}{\text{Unità}}$

9) 
 $\frac{1}{\text{Decine}} \quad \frac{4}{\text{Unità}}$

10) 
 $\frac{0}{\text{Decine}} \quad \frac{9}{\text{Unità}}$

Es. 15

Es. 4

1. 13

2. 6

3. 10

4. 12

5. 7

6. 16

7. 18

8. 5

9. 14

10. 9