





**Confronta il numero delle forme.**



Ci sono più o più ?

A.

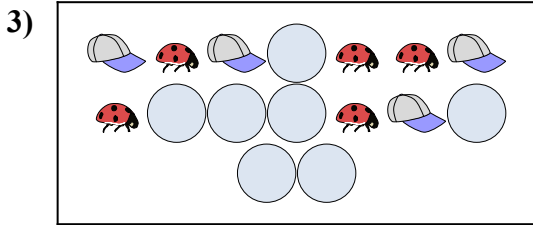
B.



Ci sono meno o meno ?

A.


B.



Ci sono meno o meno ?

A.

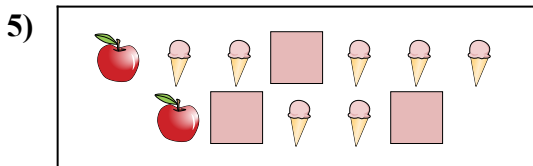
B.



Ci sono più o più ?

A.

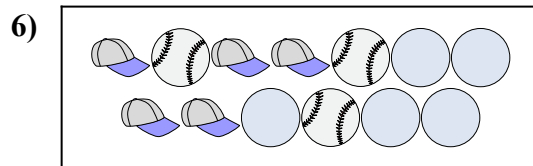
B.



Ci sono meno o meno ?

A.

B.



Ci sono più o più ?

A.

B.

**Risposte**

1. \_\_\_\_\_

2. \_\_\_\_\_

3. \_\_\_\_\_


4. \_\_\_\_\_

5. \_\_\_\_\_

6. \_\_\_\_\_




**Confronta il numero delle forme.**



Ci sono più o più ?

A.

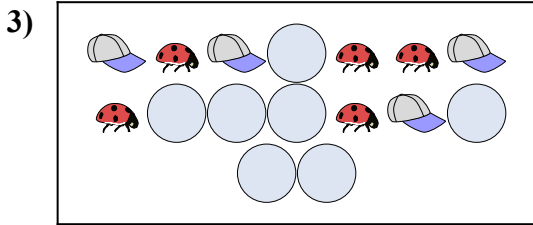
B.



Ci sono meno o meno ?

A.


B.



Ci sono meno o meno ?

A.

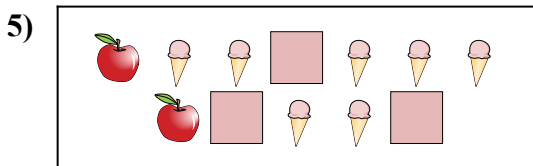
B.



Ci sono più o più ?

A.

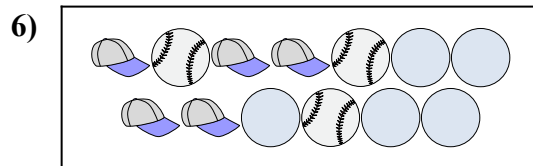
B.



Ci sono meno o meno ?

A.

B.



Ci sono più o più ?

A.

B.

**Risposte**

1.     **B**    

2.     **A**    

3.     **A**    

4.     **A**    

5.     **B**    

6.     **B**