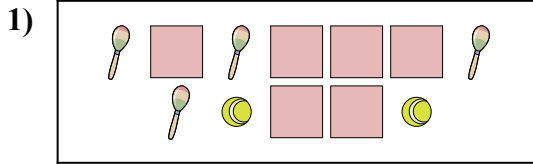





Confronta il numero delle forme.



Ci sono meno o meno ?

A.


B.



Ci sono più o più ?

A.


B.



Ci sono meno o meno ?

A.

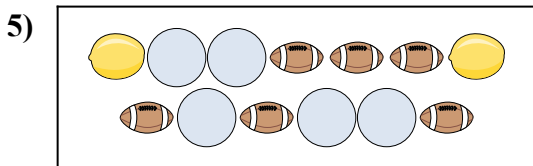
B.



Ci sono meno o meno ?

A.

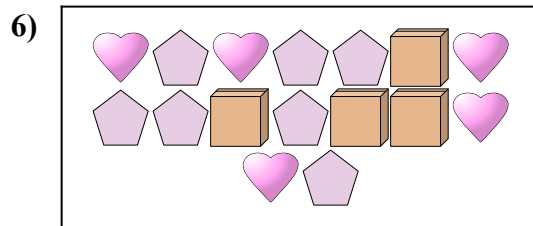
B.



Ci sono meno o meno ?

A.

B.



Ci sono meno o meno ?

A.

B.

Risposte

1. _____

2. _____

3. _____

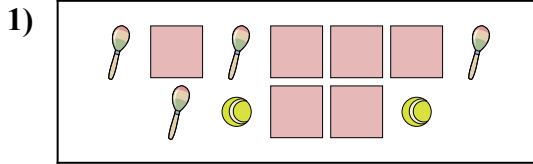
4. _____

5. _____

6. _____




Confronta il numero delle forme.



Ci sono meno o meno ?

A.


B.



Ci sono più o più ?

A.


B.



Ci sono meno o meno ?

A.

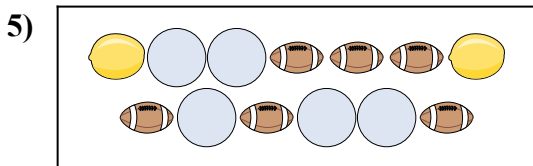
B.



Ci sono meno o meno ?

A.

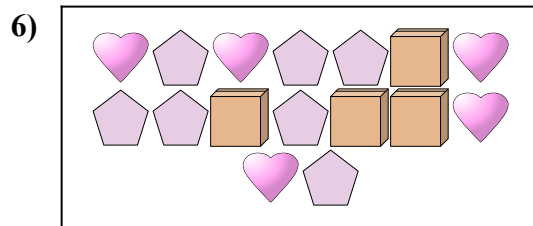
B.



Ci sono meno o meno ?

A.

B.



Ci sono meno o meno ?

A.

B.

Risposte

1. **A**
2. **B**
3. **A**
4. **B**
5. **B**
6. **A**