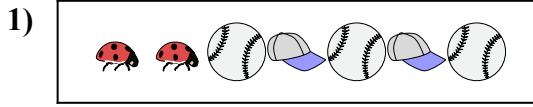





Confronta il numero delle forme.



Ci sono più o più ?

A.

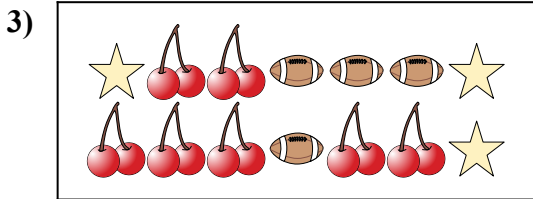
B.



Ci sono meno o meno ?

A.


B.



Ci sono meno o meno ?

A.


B.



Ci sono più o più ?

A.


B.



Ci sono meno o meno ?

A.

B.



Ci sono meno o meno ?

A.

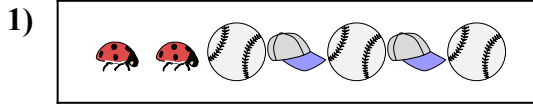
B.

Risposte

1. _____
2. _____
3. _____
4. _____
5. _____
6. _____




Confronta il numero delle forme.



Ci sono più o più ?

A.

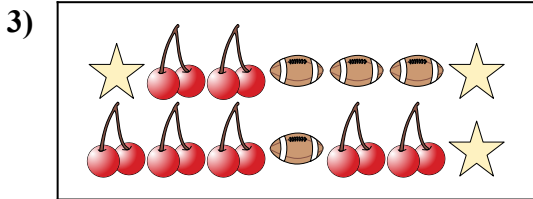
B.



Ci sono meno o meno ?

A.


B.



Ci sono meno o meno ?

A.


B.



Ci sono più o più ?

A.


B.



Ci sono meno o meno ?

A.

B.



Ci sono meno o meno ?

A.

B.

Risposte

1. **A**

2. **A**

3. **A**

4. **B**

5. **A**

6. **B**