




Riempi gli spazi nella scala numerata. Ogni linea incrementa di uno.

1) 60



2)

31




3)

65



4) 33




5)

11



6) 17



7)

51



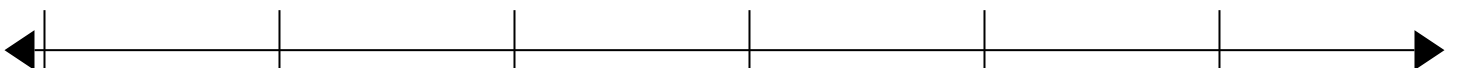
8)

41




9)

69



10)

80





Riempi gli spazi nella scala numerata. Ogni linea incrementa di uno.

