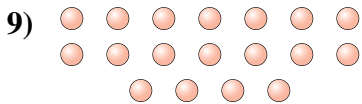
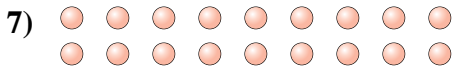
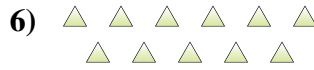
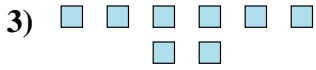
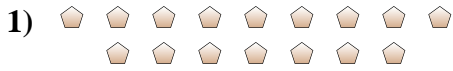




Determina se il numero delle figure all'interno di ogni rettangolo è pari o dispari.

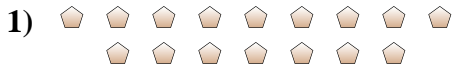


Risposte

- 1. _____
- 2. _____
- 3. _____
- 4. _____
- 5. _____
- 6. _____
- 7. _____
- 8. _____
- 9. _____
- 10. _____



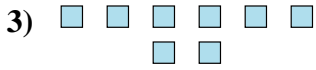
Determina se il numero delle figure all'interno di ogni rettangolo è pari o dispari.



16



17



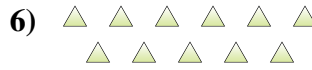
8



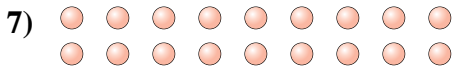
10



12



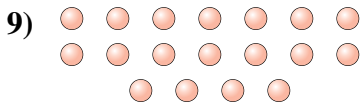
11



18



11



18



9

Risposte

1. Pari

2. Dispari

3. Pari

4. Pari

5. Pari

6. Dispari

7. Pari

8. Dispari

9. Pari

10. Dispari