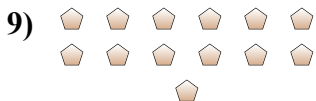
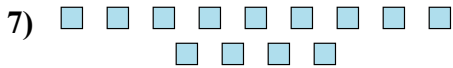
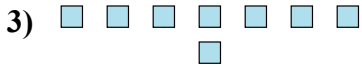
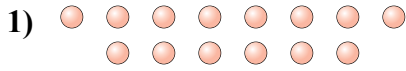




Determina se il numero delle figure all'interno di ogni rettangolo è pari o dispari.

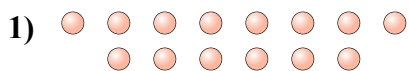


Risposte

1. _____
2. _____
3. _____
4. _____
5. _____
6. _____
7. _____
8. _____
9. _____
10. _____



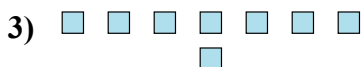
Determina se il numero delle figure all'interno di ogni rettangolo è pari o dispari.



14



8



8



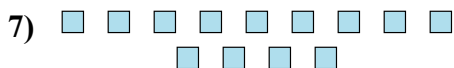
10



18



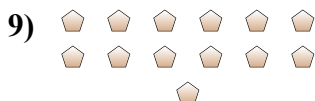
5



13



14



13



10

Risposte

1. Pari

2. Pari

3. Pari

4. Pari

5. Pari

6. Dispari

7. Dispari

8. Pari

9. Dispari

10. Pari