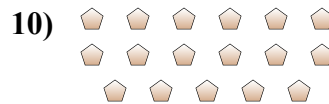
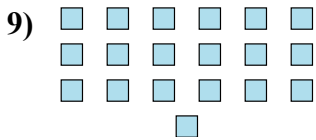
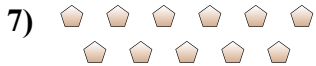




Determina se il numero delle figure all'interno di ogni rettangolo è pari o dispari.



Risposte

1. _____

2. _____

3. _____

4. _____

5. _____

6. _____

7. _____

8. _____

9. _____

10. _____



Determina se il numero delle figure all'interno di ogni rettangolo è pari o dispari.



5



16



17



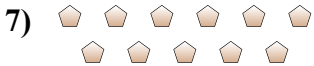
19



7



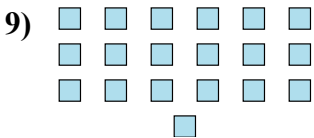
6



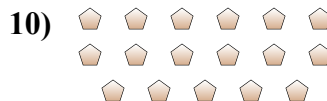
11



5



19



17

Risposte

1. **Dispari**

2. **Pari**

3. **Dispari**

4. **Dispari**

5. **Dispari**

6. **Pari**

7. **Dispari**

8. **Dispari**

9. **Dispari**

10. **Dispari**