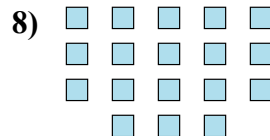
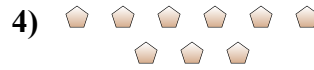
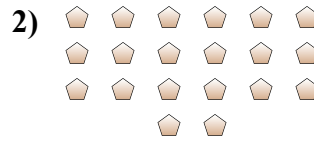




Determina se il numero delle figure all'interno di ogni rettangolo è pari o dispari.



Risposte

1. _____

2. _____

3. _____

4. _____

5. _____

6. _____

7. _____

8. _____

9. _____

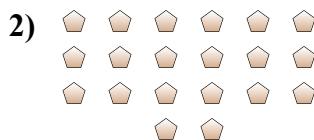
10. _____



Determina se il numero delle figure all'interno di ogni rettangolo è pari o dispari.



7



20



17



9



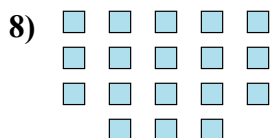
10



11



20



18



8



7

Risposte

1. **Dispari**

2. **Pari**

3. **Dispari**

4. **Dispari**

5. **Pari**

6. **Dispari**

7. **Pari**

8. **Pari**

9. **Pari**

10. **Dispari**