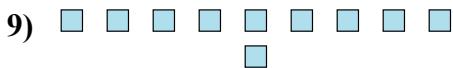
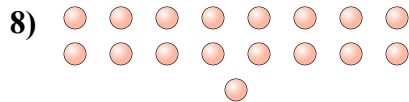
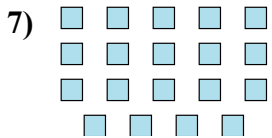

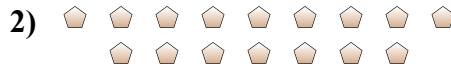




Determina se il numero delle figure all'interno di ogni rettangolo è pari o dispari.



**Risposte**

1. \_\_\_\_\_
2. \_\_\_\_\_
3. \_\_\_\_\_
4. \_\_\_\_\_
5. \_\_\_\_\_
6. \_\_\_\_\_
7. \_\_\_\_\_
8. \_\_\_\_\_
9. \_\_\_\_\_
10. \_\_\_\_\_



Determina se il numero delle figure all'interno di ogni rettangolo è pari o dispari.



17



16



7



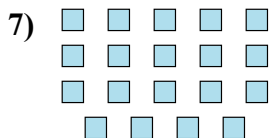
8



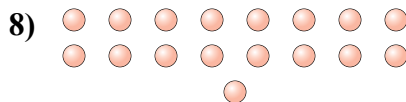
6



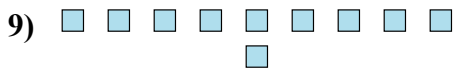
18



19



17



10



9

**Risposte**

1. **Dispari**

2. **Pari**

3. **Dispari**

4. **Pari**

5. **Pari**

6. **Pari**

7. **Dispari**

8. **Dispari**

9. **Pari**

10. **Dispari**