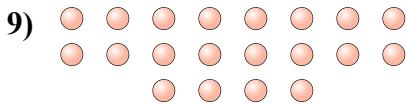
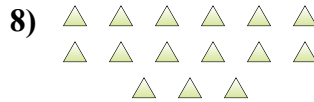
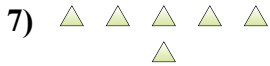
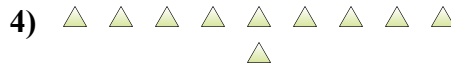
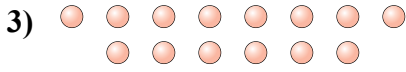
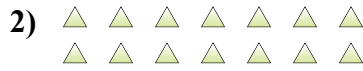
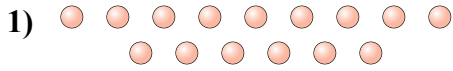




Determina se il numero delle figure all'interno di ogni rettangolo è pari o dispari.

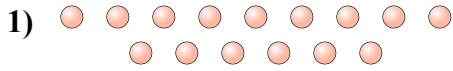


Risposte

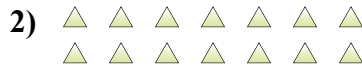
1. _____
2. _____
3. _____
4. _____
5. _____
6. _____
7. _____
8. _____
9. _____
10. _____



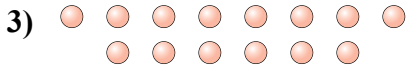
Determina se il numero delle figure all'interno di ogni rettangolo è pari o dispari.



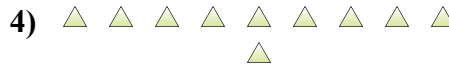
15



14



14



10



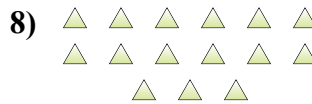
8



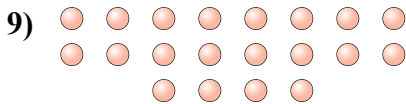
6



6



15



20



18

Risposte

1. **Dispari**

2. **Pari**

3. **Pari**

4. **Pari**

5. **Pari**

6. **Pari**

7. **Pari**

8. **Dispari**

9. **Pari**

10. **Pari**