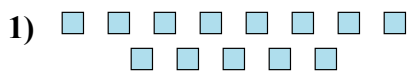




Determina se il numero delle figure all'interno di ogni rettangolo è pari o dispari.



Risposte

1. _____

2. _____

3. _____

4. _____

5. _____

6. _____

7. _____

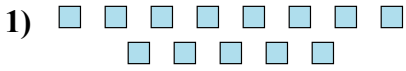
8. _____

9. _____

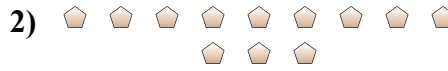
10. _____



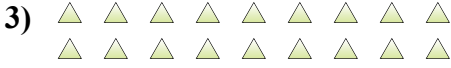
Determina se il numero delle figure all'interno di ogni rettangolo è pari o dispari.



13



12



18



13



12



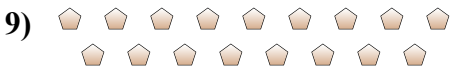
20



7



7



17



14

Risposte

1. **Dispari**

2. **Pari**

3. **Pari**

4. **Dispari**

5. **Pari**

6. **Pari**

7. **Dispari**

8. **Dispari**

9. **Dispari**

10. **Pari**