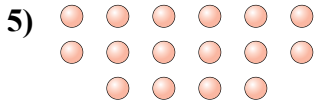
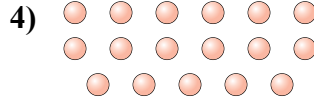
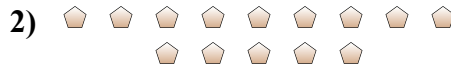




Determina se il numero delle figure all'interno di ogni rettangolo è pari o dispari.



Risposte

1. _____
2. _____
3. _____
4. _____
5. _____
6. _____
7. _____
8. _____
9. _____
10. _____



Determina se il numero delle figure all'interno di ogni rettangolo è pari o dispari.



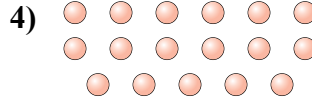
8



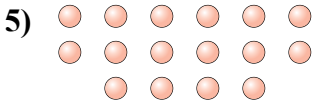
14



13



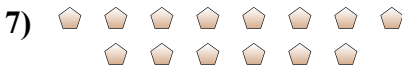
17



16



15



14



18



11



7

Risposte

1. Pari

2. Pari

3. Dispari

4. Dispari

5. Pari

6. Dispari

7. Pari

8. Pari

9. Dispari

10. Dispari