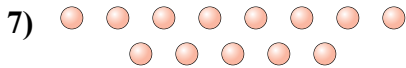


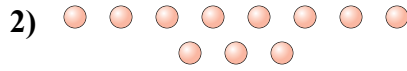




Determina se il numero delle figure all'interno di ogni rettangolo è pari o dispari.



Risposte

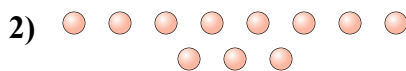
1. _____
2. _____
3. _____
4. _____
5. _____
6. _____
7. _____
8. _____
9. _____
10. _____




Determina se il numero delle figure all'interno di ogni rettangolo è pari o dispari.



13



11



18



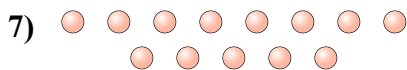
17



12



13



13



6



9



15

Risposte

1. **Dispari**

2. **Dispari**

3. **Pari**

4. **Dispari**

5. **Pari**

6. **Dispari**

7. **Dispari**

8. **Pari**

9. **Dispari**

10. **Dispari**