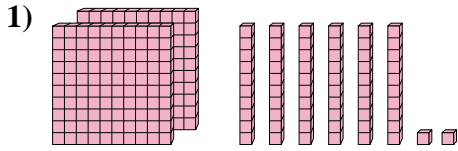


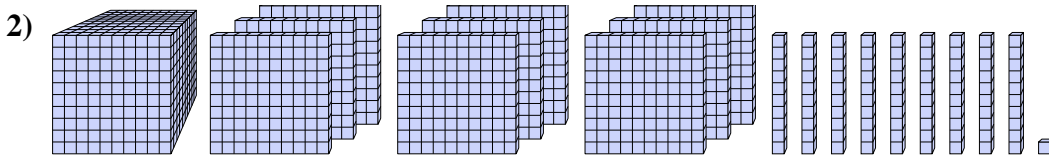


Trova il valore rappresentato da ogni set di blocchi.

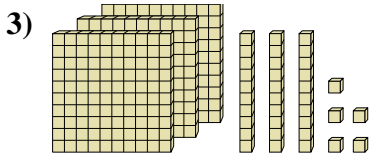
**Risposte**



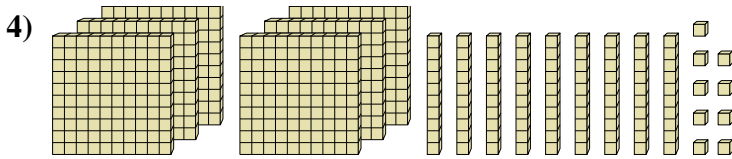
1. \_\_\_\_\_



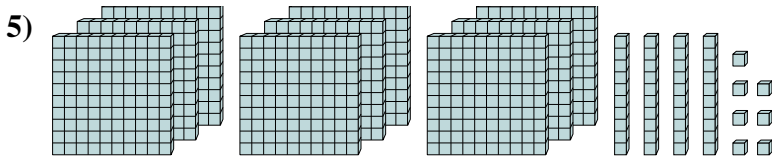
2. \_\_\_\_\_



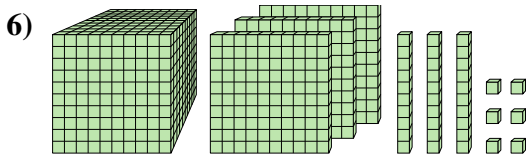
3. \_\_\_\_\_



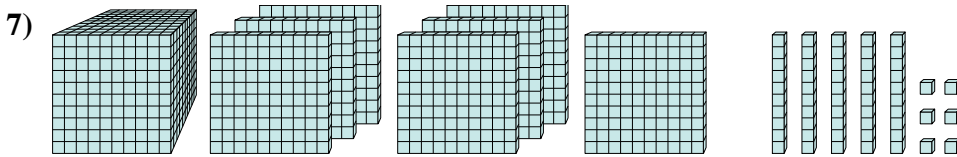
4. \_\_\_\_\_



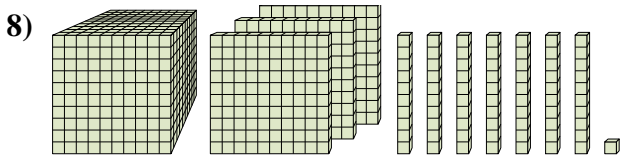
5. \_\_\_\_\_



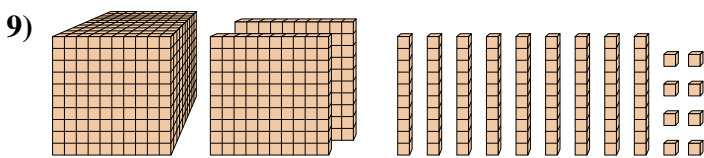
6. \_\_\_\_\_



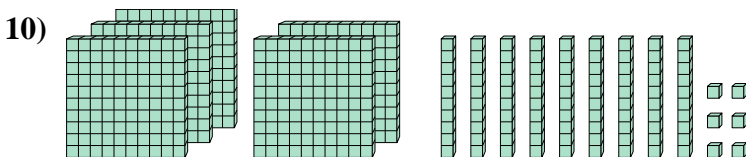
7. \_\_\_\_\_



8. \_\_\_\_\_



9. \_\_\_\_\_



10. \_\_\_\_\_



Trova il valore rappresentato da ogni set di blocchi.

1)

2)

3)

4)

5)

6)

7)

8)

9)

10)

Risposte

1. 262
2. 1,991
3. 335
4. 699
5. 947
6. 1,336
7. 1,756
8. 1,371
9. 1,298
10. 596