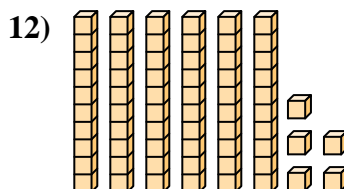
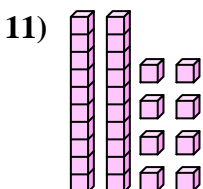
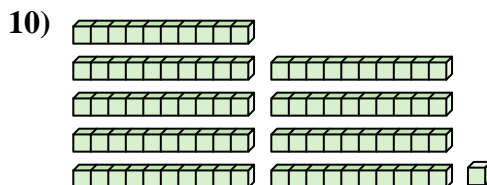
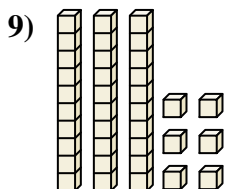
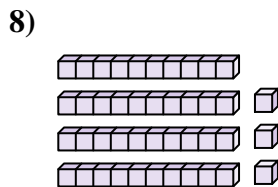
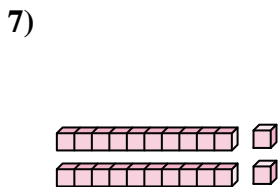
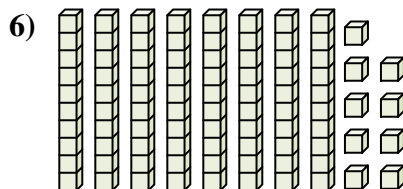
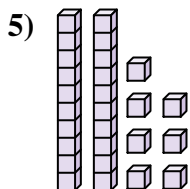
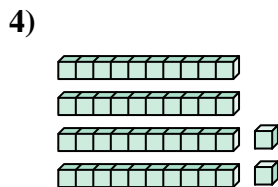
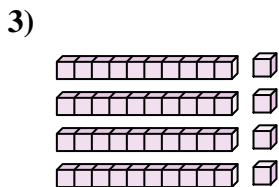
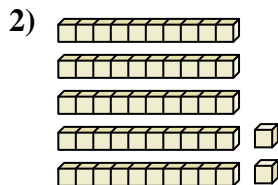
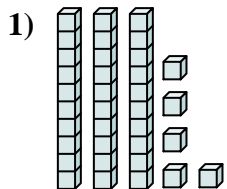




Conta il numero totale dei blocchi.



Risposte

1. _____

2. _____

3. _____

4. _____

5. _____

6. _____

7. _____

8. _____

9. _____

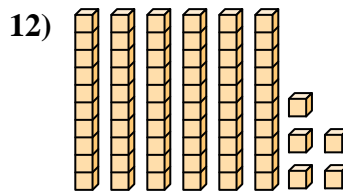
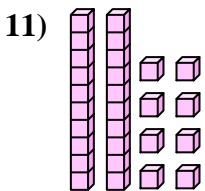
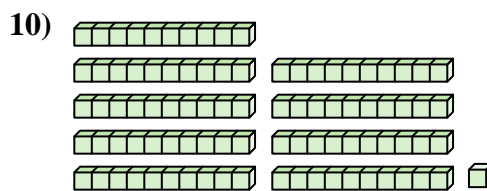
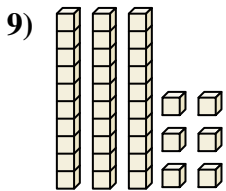
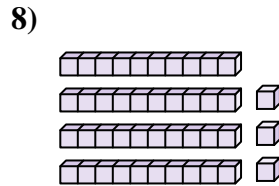
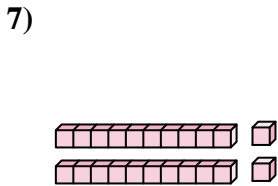
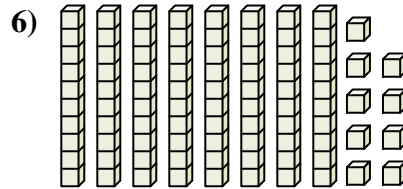
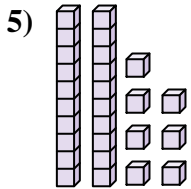
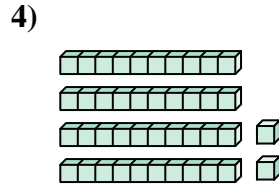
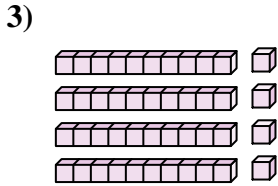
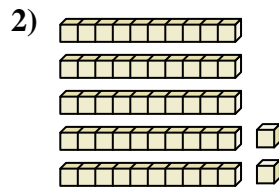
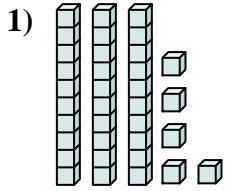
10. _____

11. _____

12. _____



Conta il numero totale dei blocchi.



Risposte

1. 35

2. 52

3. 44

4. 42

5. 27

6. 89

7. 22

8. 43

9. 36

10. 91

11. 28

12. 65



Conta il numero totale dei blocchi.

89	42	35	36	22
44	91	52	27	43

Risposte

1. _____
2. _____
3. _____
4. _____
5. _____
6. _____
7. _____
8. _____
9. _____
10. _____

