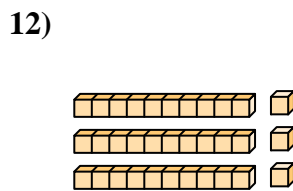
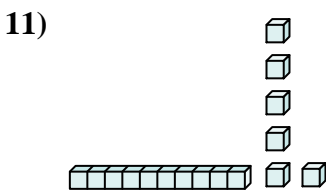
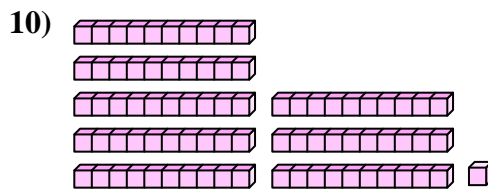
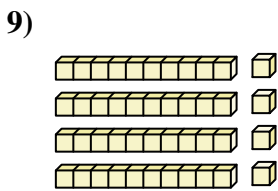
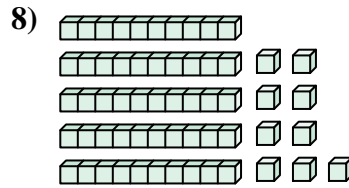
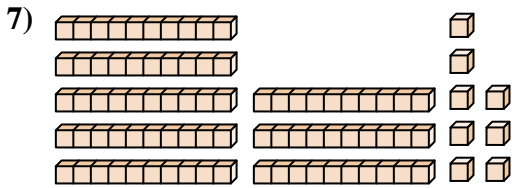
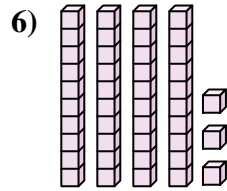
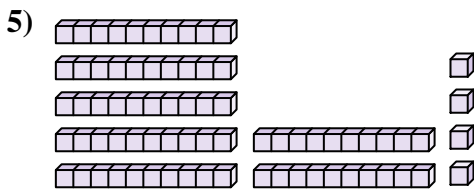
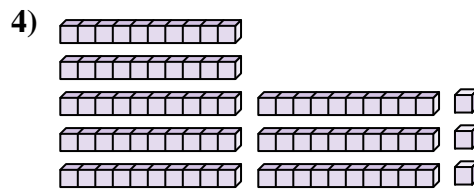
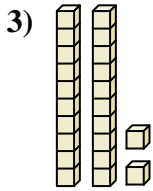
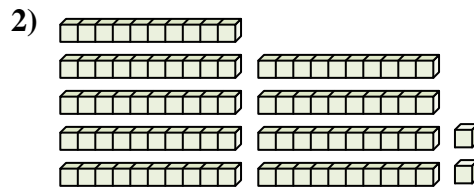
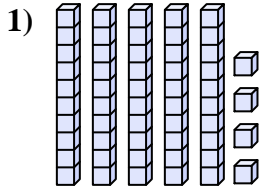




Conta il numero totale dei blocchi.



**Risposte**

1. \_\_\_\_\_

2. \_\_\_\_\_

3. \_\_\_\_\_

4. \_\_\_\_\_

5. \_\_\_\_\_

6. \_\_\_\_\_

7. \_\_\_\_\_

8. \_\_\_\_\_

9. \_\_\_\_\_

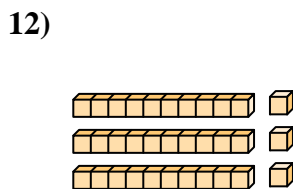
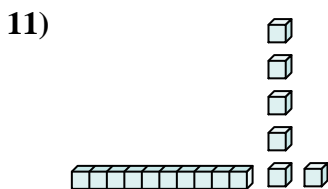
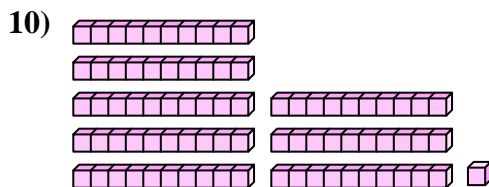
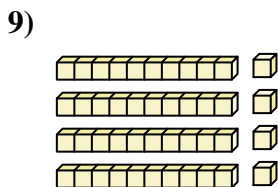
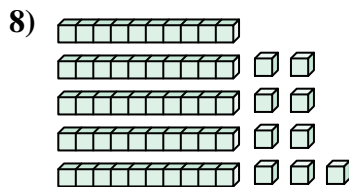
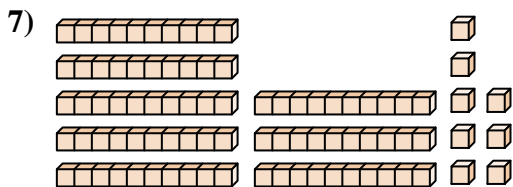
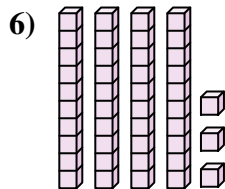
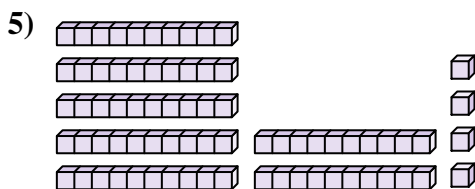
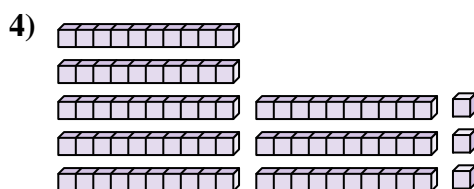
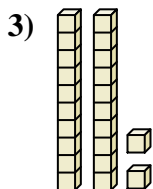
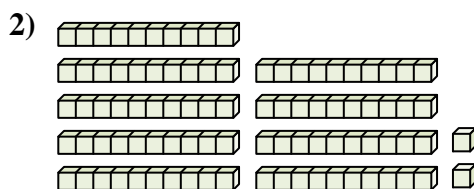
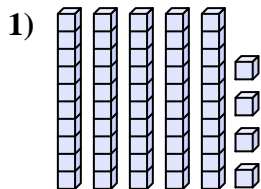
10. \_\_\_\_\_

11. \_\_\_\_\_

12. \_\_\_\_\_



Conta il numero totale dei blocchi.



Risposte

1. 54

2. 92

3. 22

4. 83

5. 74

6. 43

7. 88

8. 59

9. 44

10. 81

11. 16

12. 33



Conta il numero totale dei blocchi.

54	22	59	83	88
92	81	44	74	43

**Risposte**

1. \_\_\_\_\_
2. \_\_\_\_\_
3. \_\_\_\_\_
4. \_\_\_\_\_
5. \_\_\_\_\_
6. \_\_\_\_\_
7. \_\_\_\_\_
8. \_\_\_\_\_
9. \_\_\_\_\_
10. \_\_\_\_\_

