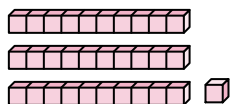


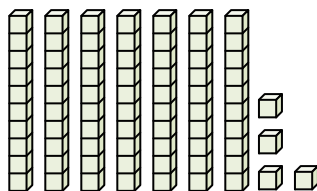


Conta il numero totale dei blocchi.

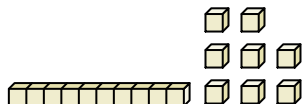
1)



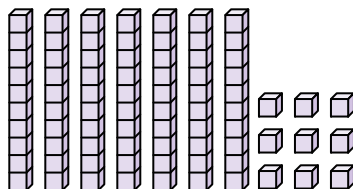
2)



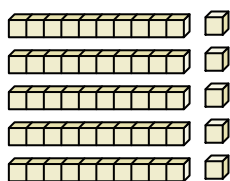
3)



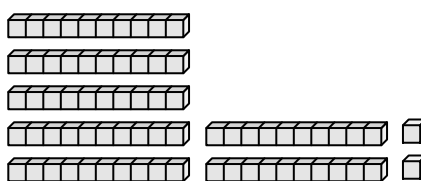
4)



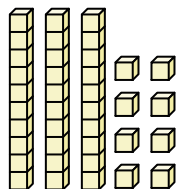
5)



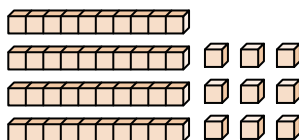
6)



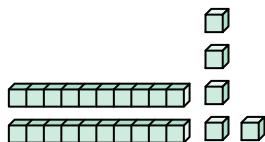
7)



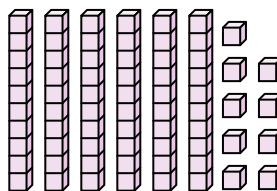
8)



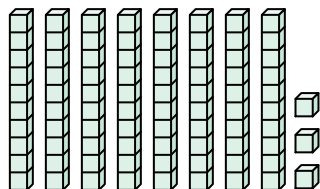
9)



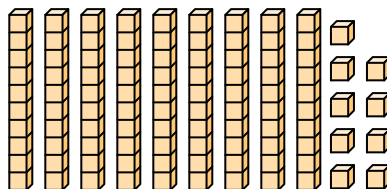
10)



11)



12)



Risposte

1. _____

2. _____

3. _____

4. _____

5. _____

6. _____

7. _____

8. _____

9. _____

10. _____

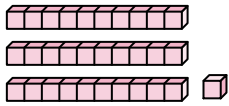
11. _____

12. _____

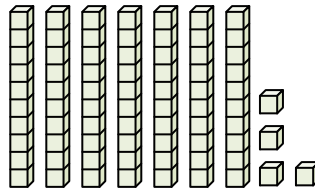


Conta il numero totale dei blocchi.

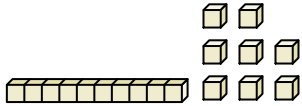
1)



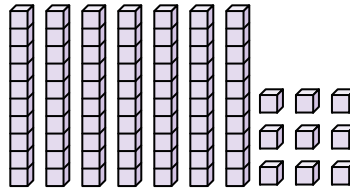
2)



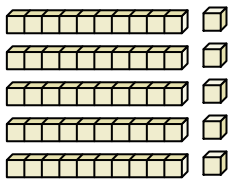
3)



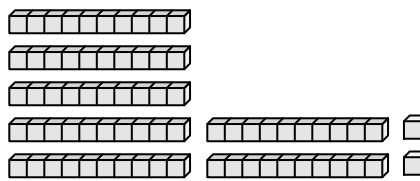
4)



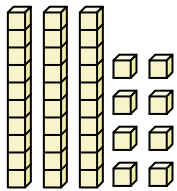
5)



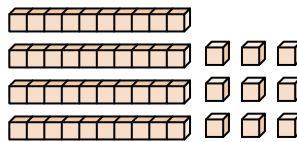
6)



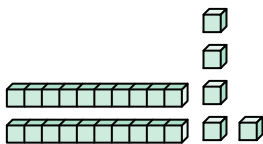
7)



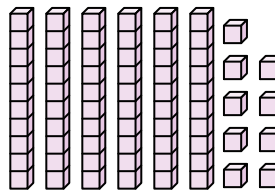
8)



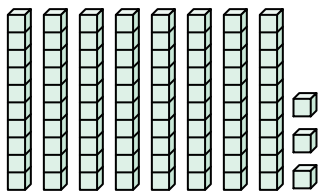
9)



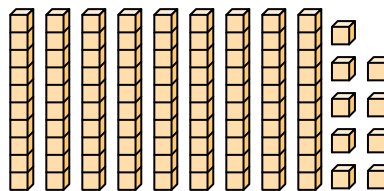
10)



11)



12)



Risposte

1. 31

2. 74

3. 18

4. 79

5. 55

6. 72

7. 38

8. 49

9. 25

10. 69

11. 83

12. 99



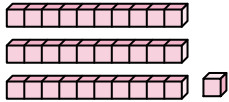
Conta il numero totale dei blocchi.

49	72	38	55	79
74	18	69	25	31

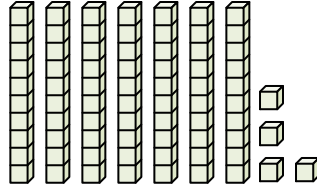
Risposte

1. _____
2. _____
3. _____
4. _____
5. _____
6. _____
7. _____
8. _____
9. _____
10. _____

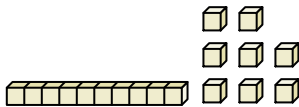
1)



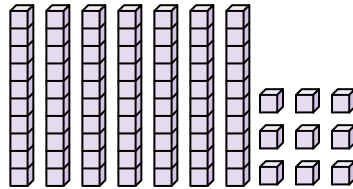
2)



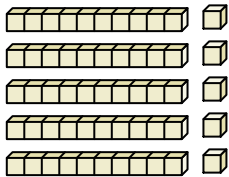
3)



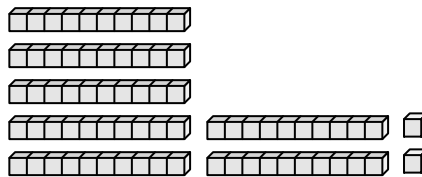
4)



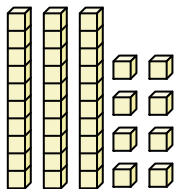
5)



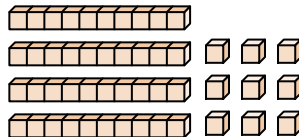
6)



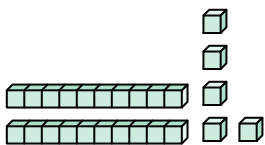
7)



8)



9)



10)

