

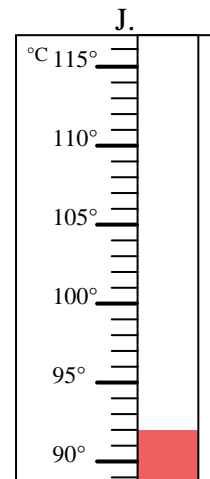
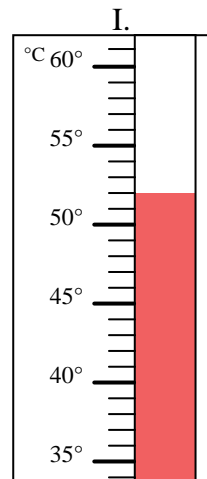
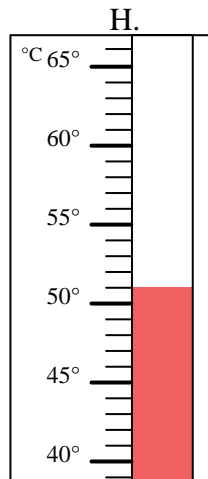
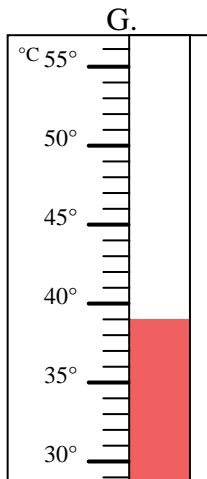
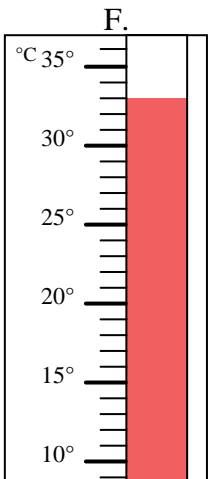
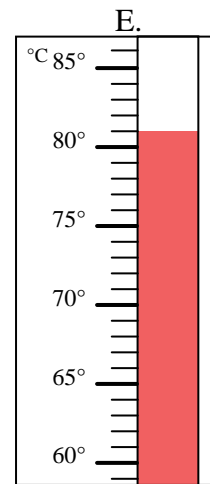
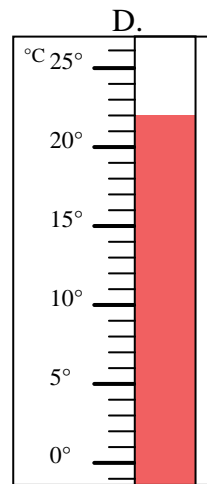
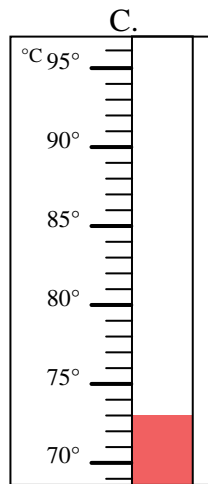
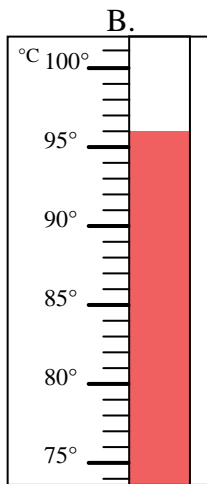
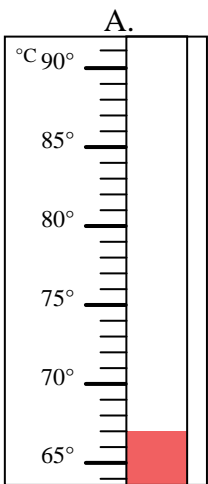


Indica quale lettera risponde correttamente ad ogni domanda.

- 1) Quale termometro rappresenta correttamente una temperatura di  $67^\circ$ ? \_\_\_\_\_
- 2) Quale termometro rappresenta correttamente una temperatura di  $73^\circ$ ? \_\_\_\_\_
- 3) Quale termometro rappresenta correttamente una temperatura di  $39^\circ$ ? \_\_\_\_\_
- 4) Quale termometro rappresenta correttamente una temperatura di  $52^\circ$ ? \_\_\_\_\_
- 5) Quale termometro rappresenta correttamente una temperatura di  $33^\circ$ ? \_\_\_\_\_
- 6) Quale termometro rappresenta correttamente una temperatura di  $81^\circ$ ? \_\_\_\_\_
- 7) Quale termometro rappresenta correttamente una temperatura di  $51^\circ$ ? \_\_\_\_\_
- 8) Quale termometro rappresenta correttamente una temperatura di  $92^\circ$ ? \_\_\_\_\_
- 9) Quale termometro rappresenta correttamente una temperatura di  $96^\circ$ ? \_\_\_\_\_
- 10) Quale termometro rappresenta correttamente una temperatura di  $22^\circ$ ? \_\_\_\_\_

**Risposte**

1. \_\_\_\_\_
2. \_\_\_\_\_
3. \_\_\_\_\_
4. \_\_\_\_\_
5. \_\_\_\_\_
6. \_\_\_\_\_
7. \_\_\_\_\_
8. \_\_\_\_\_
9. \_\_\_\_\_
10. \_\_\_\_\_



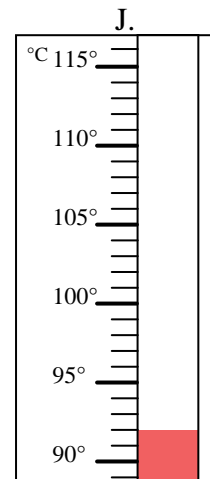
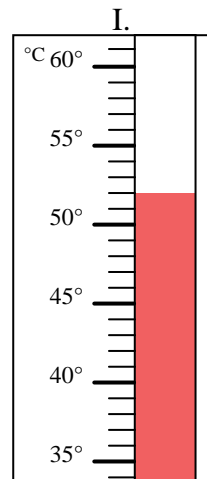
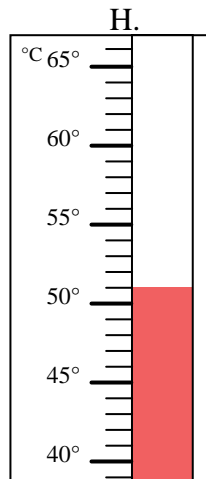
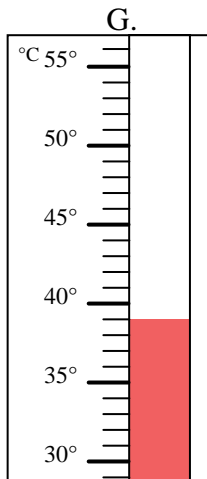
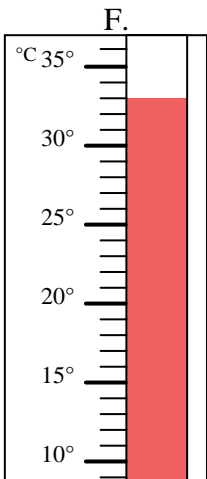
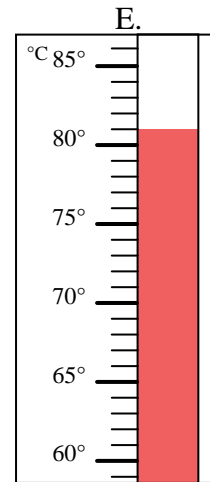
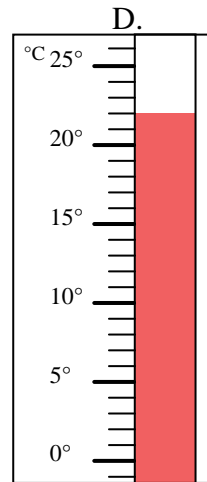
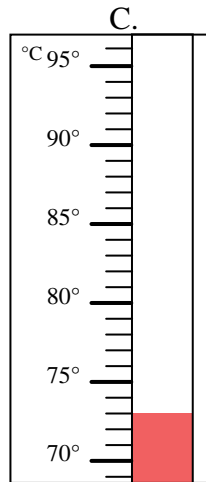
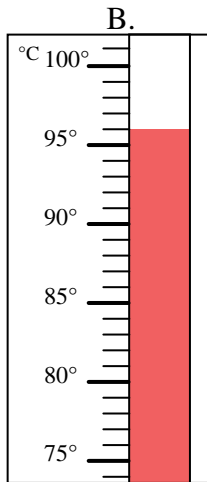
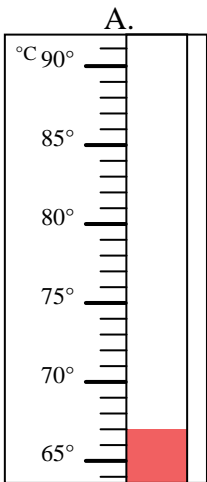


Indica quale lettera risponde correttamente ad ogni domanda.

- 1) Quale termometro rappresenta correttamente una temperatura di 67°? A
- 2) Quale termometro rappresenta correttamente una temperatura di 73°? C
- 3) Quale termometro rappresenta correttamente una temperatura di 39°? G
- 4) Quale termometro rappresenta correttamente una temperatura di 52°? I
- 5) Quale termometro rappresenta correttamente una temperatura di 33°? F
- 6) Quale termometro rappresenta correttamente una temperatura di 81°? E
- 7) Quale termometro rappresenta correttamente una temperatura di 51°? H
- 8) Quale termometro rappresenta correttamente una temperatura di 92°? J
- 9) Quale termometro rappresenta correttamente una temperatura di 96°? B
- 10) Quale termometro rappresenta correttamente una temperatura di 22°? D

**Risposte**

1. A
2. C
3. G
4. I
5. F
6. E
7. H
8. J
9. B
10. D



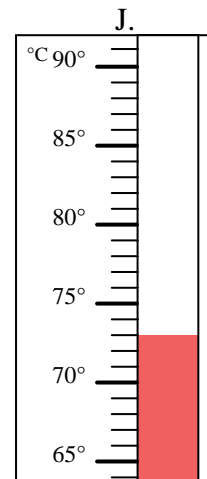
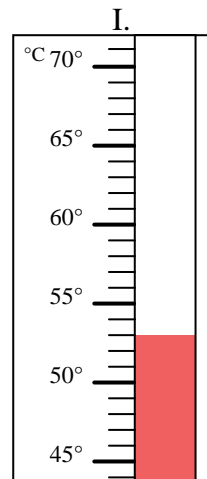
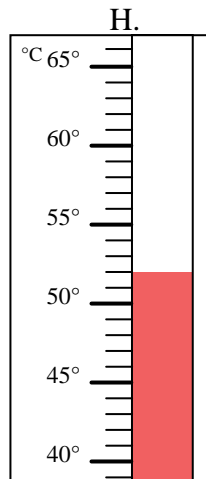
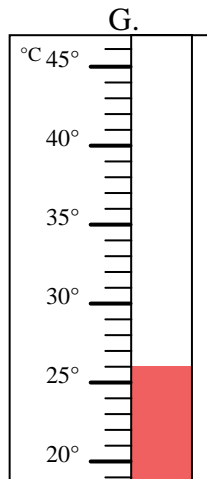
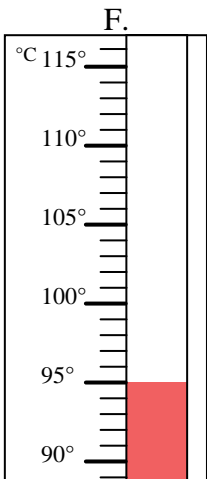
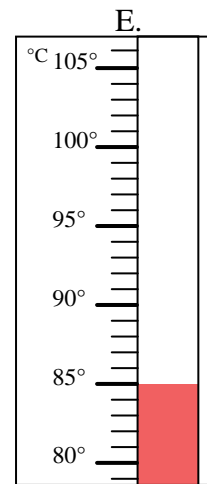
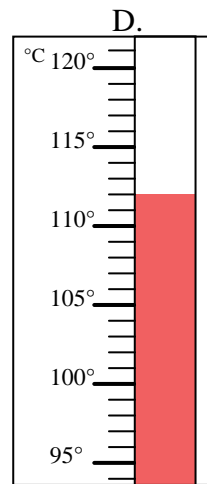
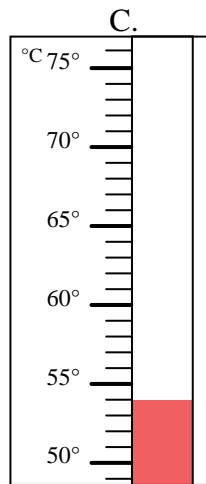
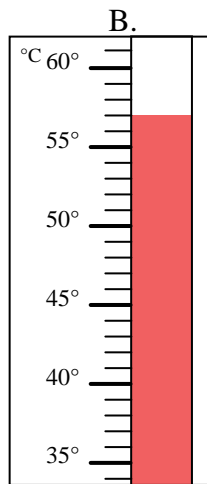
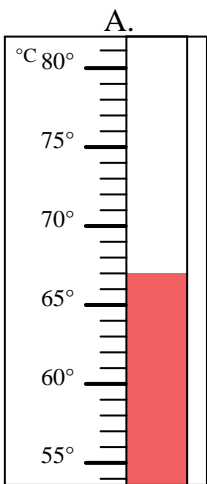


Indica quale lettera risponde correttamente ad ogni domanda.

- 1) Quale termometro rappresenta correttamente una temperatura di  $73^{\circ}$ ? \_\_\_\_\_
- 2) Quale termometro rappresenta correttamente una temperatura di  $26^{\circ}$ ? \_\_\_\_\_
- 3) Quale termometro rappresenta correttamente una temperatura di  $53^{\circ}$ ? \_\_\_\_\_
- 4) Quale termometro rappresenta correttamente una temperatura di  $52^{\circ}$ ? \_\_\_\_\_
- 5) Quale termometro rappresenta correttamente una temperatura di  $95^{\circ}$ ? \_\_\_\_\_
- 6) Quale termometro rappresenta correttamente una temperatura di  $112^{\circ}$ ? \_\_\_\_\_
- 7) Quale termometro rappresenta correttamente una temperatura di  $67^{\circ}$ ? \_\_\_\_\_
- 8) Quale termometro rappresenta correttamente una temperatura di  $57^{\circ}$ ? \_\_\_\_\_
- 9) Quale termometro rappresenta correttamente una temperatura di  $54^{\circ}$ ? \_\_\_\_\_
- 10) Quale termometro rappresenta correttamente una temperatura di  $85^{\circ}$ ? \_\_\_\_\_

**Risposte**

1. \_\_\_\_\_
2. \_\_\_\_\_
3. \_\_\_\_\_
4. \_\_\_\_\_
5. \_\_\_\_\_
6. \_\_\_\_\_
7. \_\_\_\_\_
8. \_\_\_\_\_
9. \_\_\_\_\_
10. \_\_\_\_\_



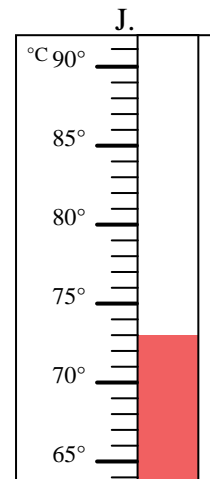
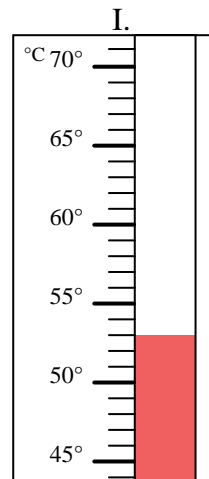
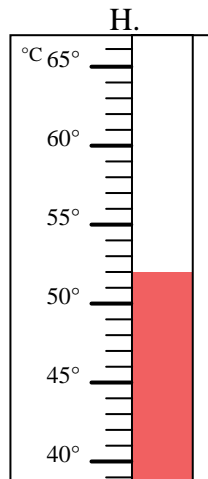
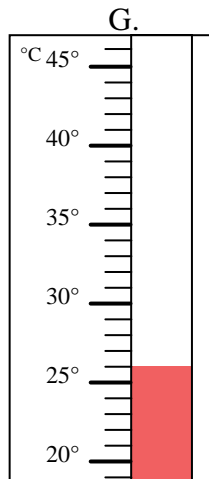
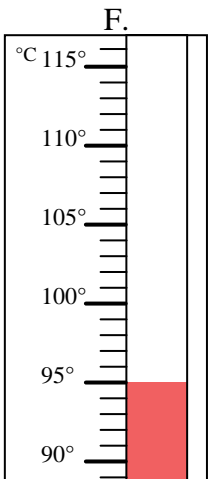
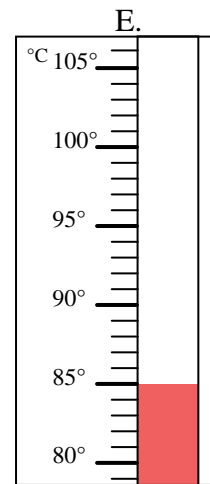
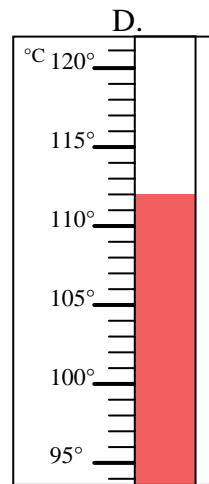
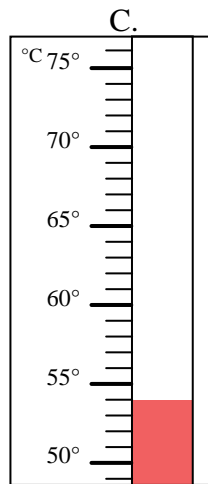
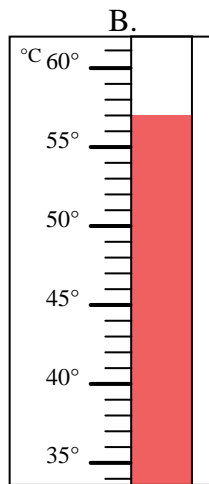
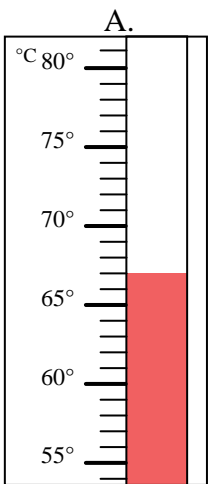


Indica quale lettera risponde correttamente ad ogni domanda.

- 1) Quale termometro rappresenta correttamente una temperatura di  $73^{\circ}$ ? J
- 2) Quale termometro rappresenta correttamente una temperatura di  $26^{\circ}$ ? G
- 3) Quale termometro rappresenta correttamente una temperatura di  $53^{\circ}$ ? I
- 4) Quale termometro rappresenta correttamente una temperatura di  $52^{\circ}$ ? H
- 5) Quale termometro rappresenta correttamente una temperatura di  $95^{\circ}$ ? F
- 6) Quale termometro rappresenta correttamente una temperatura di  $112^{\circ}$ ? D
- 7) Quale termometro rappresenta correttamente una temperatura di  $67^{\circ}$ ? A
- 8) Quale termometro rappresenta correttamente una temperatura di  $57^{\circ}$ ? B
- 9) Quale termometro rappresenta correttamente una temperatura di  $54^{\circ}$ ? C
- 10) Quale termometro rappresenta correttamente una temperatura di  $85^{\circ}$ ? E

**Risposte**

1. J
2. G
3. I
4. H
5. F
6. D
7. A
8. B
9. C
10. E



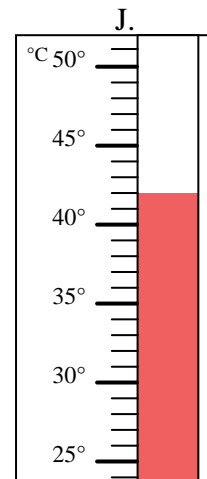
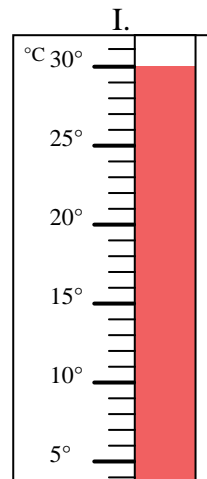
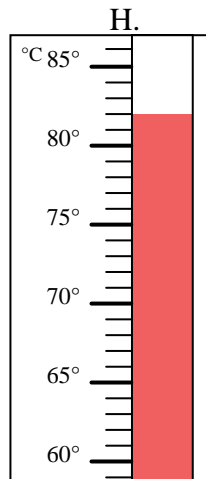
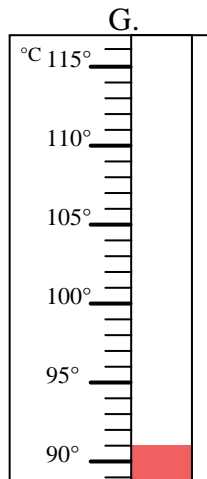
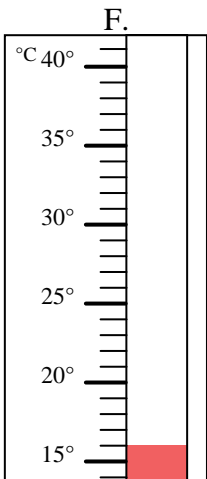
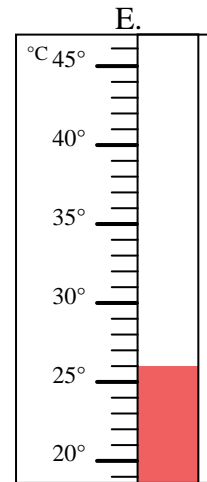
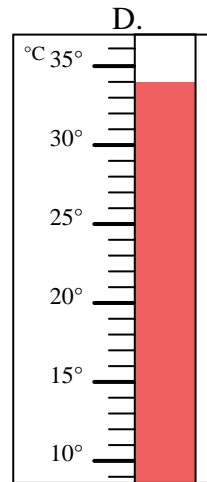
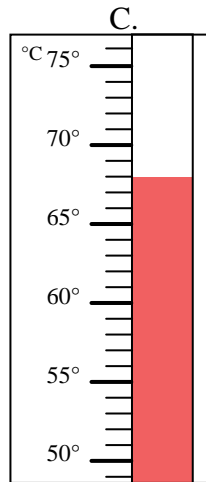
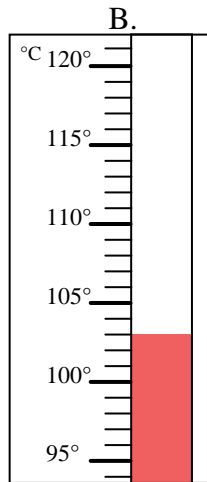
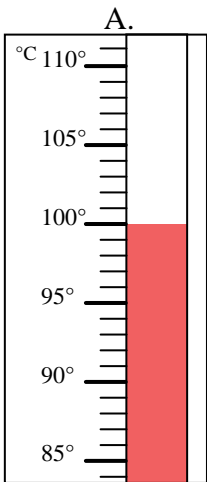


Indica quale lettera risponde correttamente ad ogni domanda.

- 1) Quale termometro rappresenta correttamente una temperatura di 100°? \_\_\_\_\_
- 2) Quale termometro rappresenta correttamente una temperatura di 103°? \_\_\_\_\_
- 3) Quale termometro rappresenta correttamente una temperatura di 26°? \_\_\_\_\_
- 4) Quale termometro rappresenta correttamente una temperatura di 91°? \_\_\_\_\_
- 5) Quale termometro rappresenta correttamente una temperatura di 34°? \_\_\_\_\_
- 6) Quale termometro rappresenta correttamente una temperatura di 16°? \_\_\_\_\_
- 7) Quale termometro rappresenta correttamente una temperatura di 68°? \_\_\_\_\_
- 8) Quale termometro rappresenta correttamente una temperatura di 42°? \_\_\_\_\_
- 9) Quale termometro rappresenta correttamente una temperatura di 82°? \_\_\_\_\_
- 10) Quale termometro rappresenta correttamente una temperatura di 30°? \_\_\_\_\_

**Risposte**

1. \_\_\_\_\_
2. \_\_\_\_\_
3. \_\_\_\_\_
4. \_\_\_\_\_
5. \_\_\_\_\_
6. \_\_\_\_\_
7. \_\_\_\_\_
8. \_\_\_\_\_
9. \_\_\_\_\_
10. \_\_\_\_\_



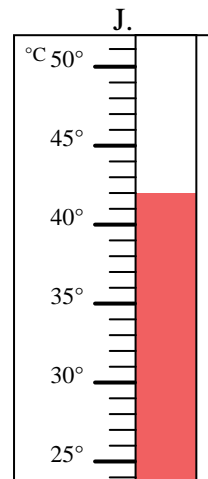
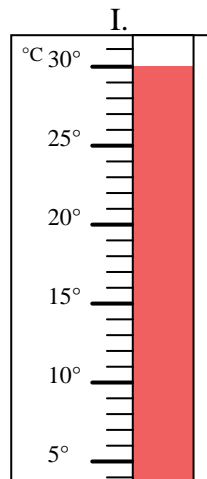
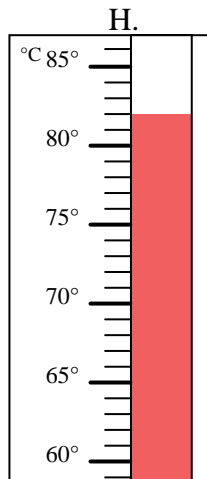
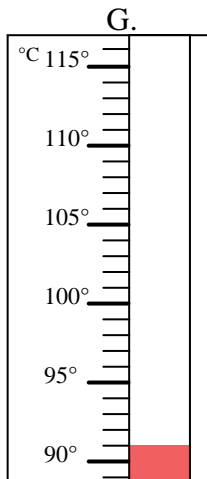
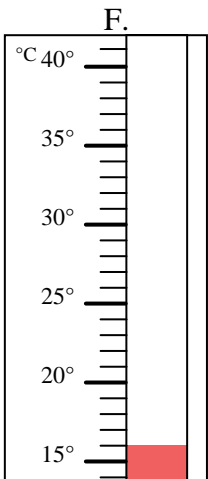
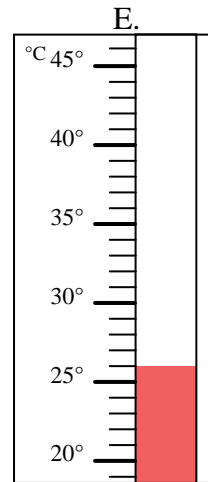
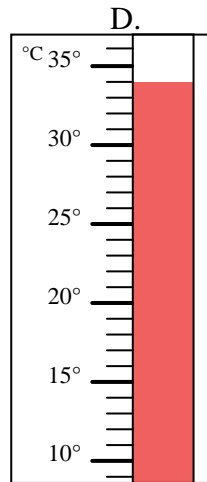
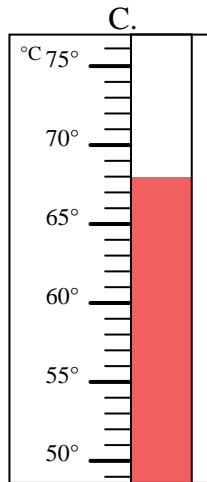
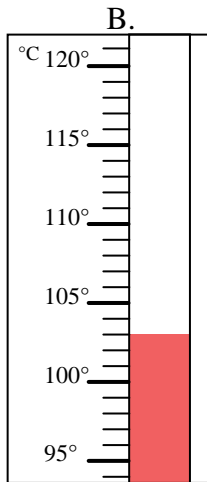
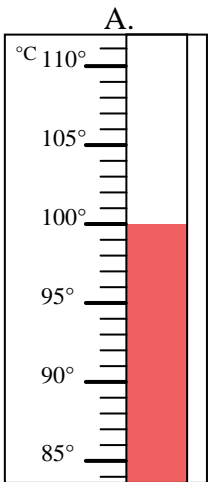


Indica quale lettera risponde correttamente ad ogni domanda.

- 1) Quale termometro rappresenta correttamente una temperatura di 100°? A
- 2) Quale termometro rappresenta correttamente una temperatura di 103°? B
- 3) Quale termometro rappresenta correttamente una temperatura di 26°? E
- 4) Quale termometro rappresenta correttamente una temperatura di 91°? G
- 5) Quale termometro rappresenta correttamente una temperatura di 34°? D
- 6) Quale termometro rappresenta correttamente una temperatura di 16°? F
- 7) Quale termometro rappresenta correttamente una temperatura di 68°? C
- 8) Quale termometro rappresenta correttamente una temperatura di 42°? J
- 9) Quale termometro rappresenta correttamente una temperatura di 82°? H
- 10) Quale termometro rappresenta correttamente una temperatura di 30°? I

**Risposte**

1. A
2. B
3. E
4. G
5. D
6. F
7. C
8. J
9. H
10. I



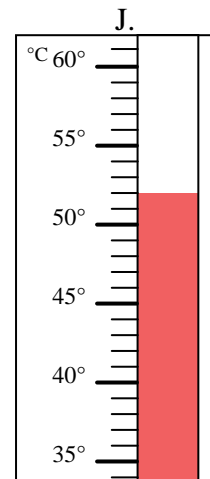
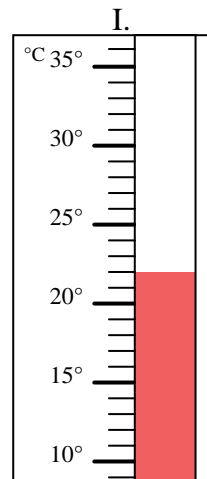
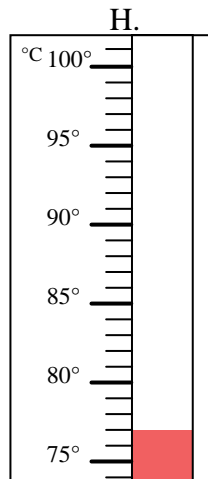
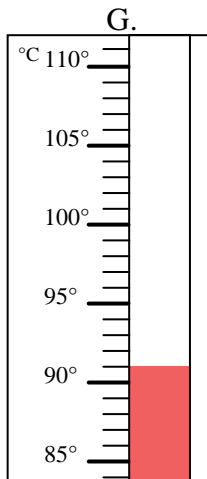
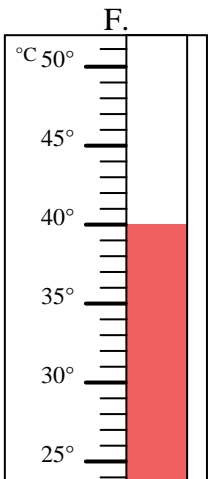
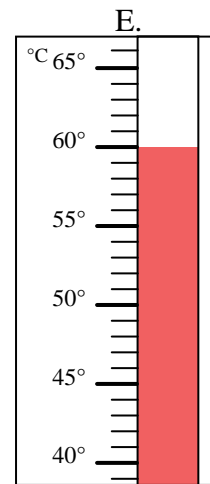
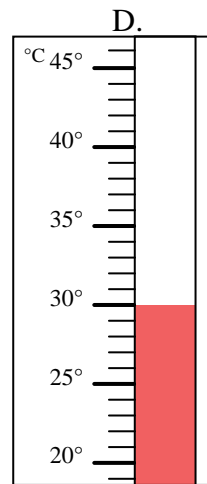
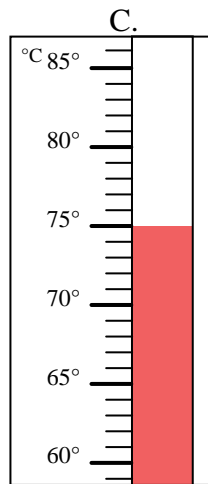
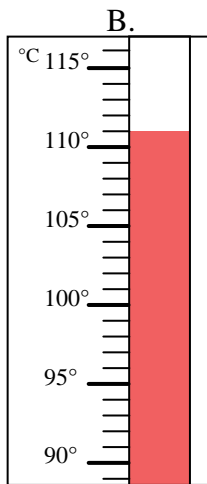
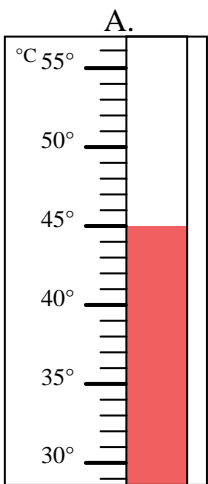


Indica quale lettera risponde correttamente ad ogni domanda.

- 1) Quale termometro rappresenta correttamente una temperatura di 60°? \_\_\_\_\_
- 2) Quale termometro rappresenta correttamente una temperatura di 91°? \_\_\_\_\_
- 3) Quale termometro rappresenta correttamente una temperatura di 52°? \_\_\_\_\_
- 4) Quale termometro rappresenta correttamente una temperatura di 75°? \_\_\_\_\_
- 5) Quale termometro rappresenta correttamente una temperatura di 40°? \_\_\_\_\_
- 6) Quale termometro rappresenta correttamente una temperatura di 30°? \_\_\_\_\_
- 7) Quale termometro rappresenta correttamente una temperatura di 77°? \_\_\_\_\_
- 8) Quale termometro rappresenta correttamente una temperatura di 45°? \_\_\_\_\_
- 9) Quale termometro rappresenta correttamente una temperatura di 22°? \_\_\_\_\_
- 10) Quale termometro rappresenta correttamente una temperatura di 111°? \_\_\_\_\_

**Risposte**

1. \_\_\_\_\_
2. \_\_\_\_\_
3. \_\_\_\_\_
4. \_\_\_\_\_
5. \_\_\_\_\_
6. \_\_\_\_\_
7. \_\_\_\_\_
8. \_\_\_\_\_
9. \_\_\_\_\_
10. \_\_\_\_\_



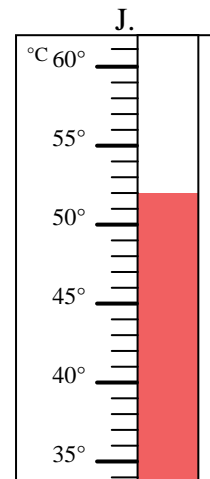
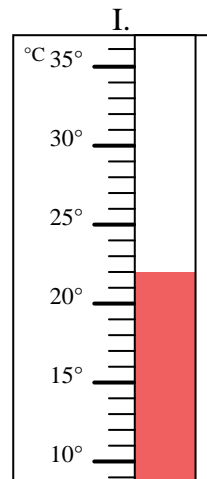
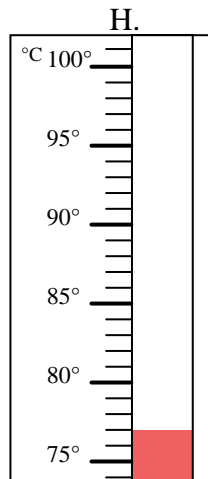
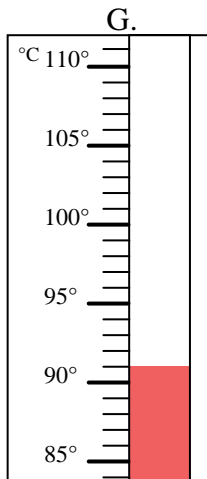
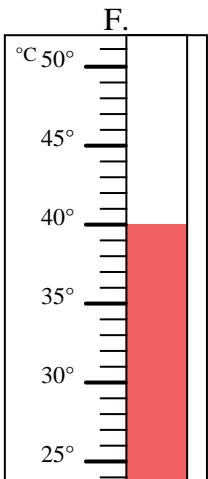
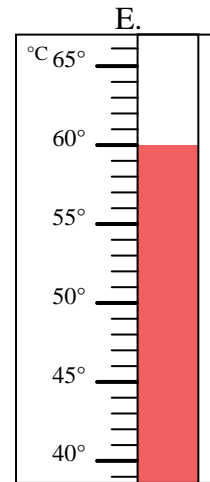
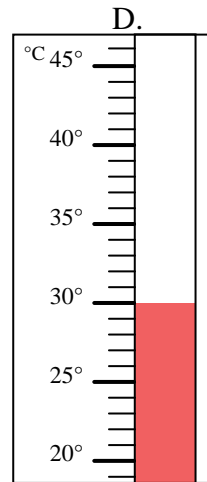
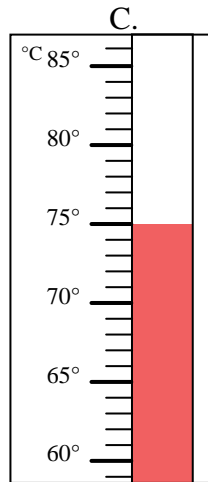
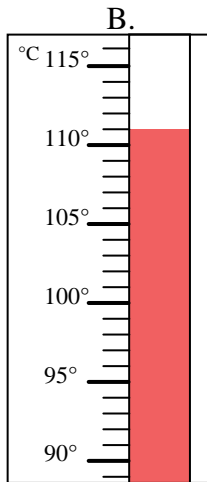
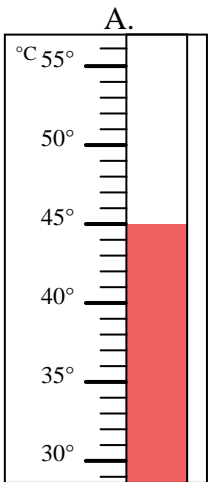


Indica quale lettera risponde correttamente ad ogni domanda.

- 1) Quale termometro rappresenta correttamente una temperatura di 60°? E
- 2) Quale termometro rappresenta correttamente una temperatura di 91°? G
- 3) Quale termometro rappresenta correttamente una temperatura di 52°? J
- 4) Quale termometro rappresenta correttamente una temperatura di 75°? C
- 5) Quale termometro rappresenta correttamente una temperatura di 40°? F
- 6) Quale termometro rappresenta correttamente una temperatura di 30°? D
- 7) Quale termometro rappresenta correttamente una temperatura di 77°? H
- 8) Quale termometro rappresenta correttamente una temperatura di 45°? A
- 9) Quale termometro rappresenta correttamente una temperatura di 22°? I
- 10) Quale termometro rappresenta correttamente una temperatura di 111°? B

**Risposte**

1. E
2. G
3. J
4. C
5. F
6. D
7. H
8. A
9. I
10. B





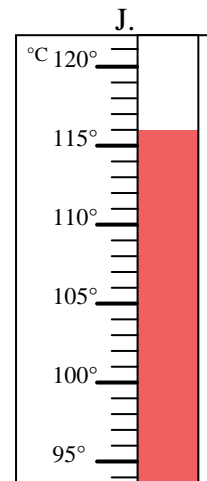
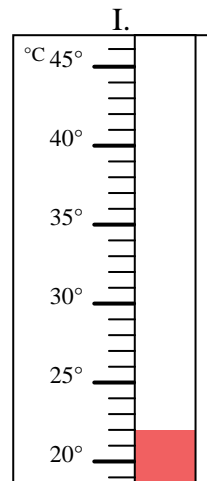
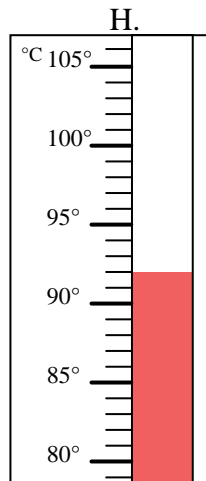
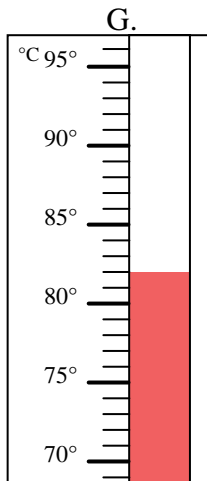
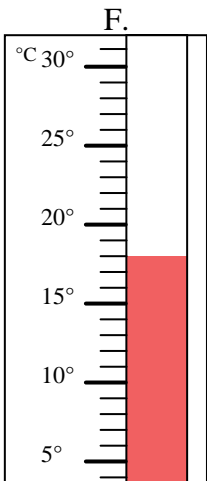
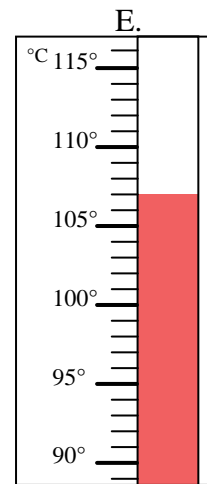
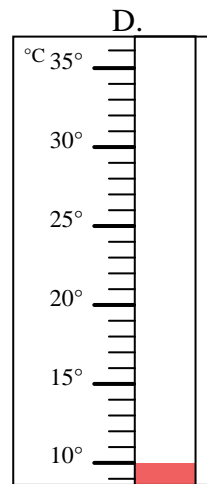
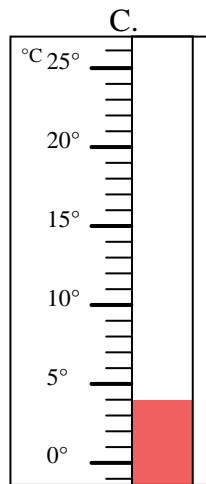
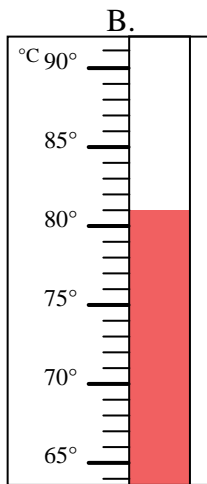
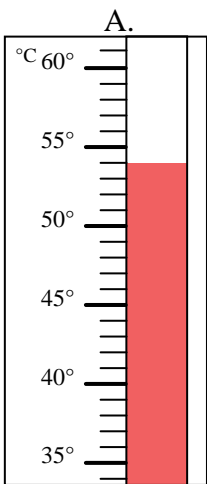


Indica quale lettera risponde correttamente ad ogni domanda.

**Risposte**

- 1) Quale termometro rappresenta correttamente una temperatura di 107°? \_\_\_\_\_
- 2) Quale termometro rappresenta correttamente una temperatura di 92°? \_\_\_\_\_
- 3) Quale termometro rappresenta correttamente una temperatura di 82°? \_\_\_\_\_
- 4) Quale termometro rappresenta correttamente una temperatura di 81°? \_\_\_\_\_
- 5) Quale termometro rappresenta correttamente una temperatura di 22°? \_\_\_\_\_
- 6) Quale termometro rappresenta correttamente una temperatura di 10°? \_\_\_\_\_
- 7) Quale termometro rappresenta correttamente una temperatura di 54°? \_\_\_\_\_
- 8) Quale termometro rappresenta correttamente una temperatura di 116°? \_\_\_\_\_
- 9) Quale termometro rappresenta correttamente una temperatura di 18°? \_\_\_\_\_
- 10) Quale termometro rappresenta correttamente una temperatura di 4°? \_\_\_\_\_

1. \_\_\_\_\_
2. \_\_\_\_\_
3. \_\_\_\_\_
4. \_\_\_\_\_
5. \_\_\_\_\_
6. \_\_\_\_\_
7. \_\_\_\_\_
8. \_\_\_\_\_
9. \_\_\_\_\_
10. \_\_\_\_\_



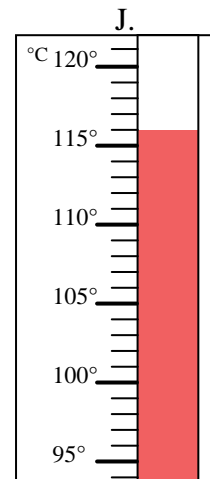
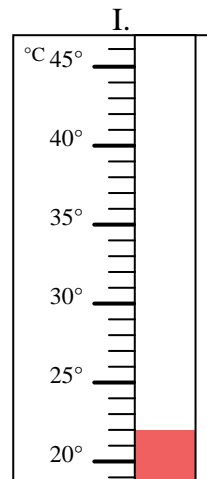
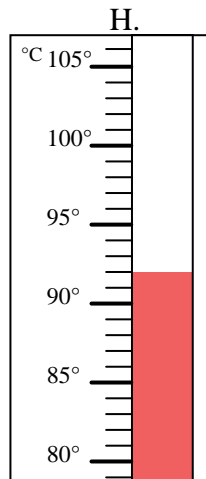
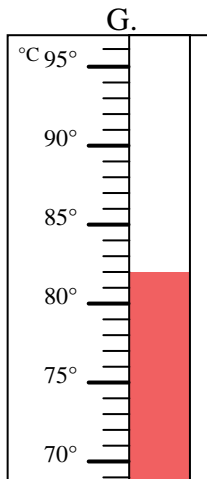
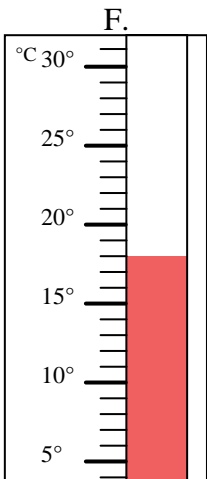
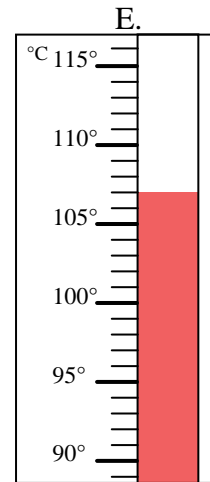
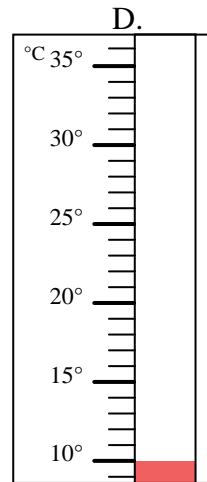
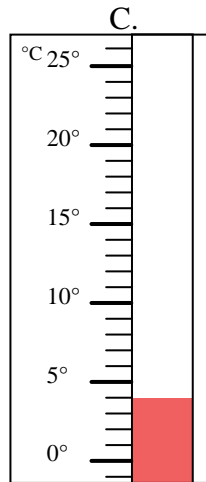
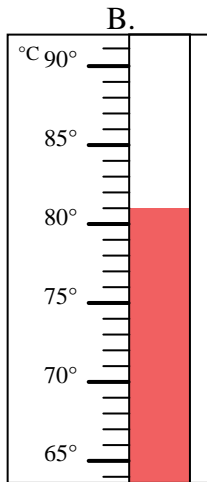
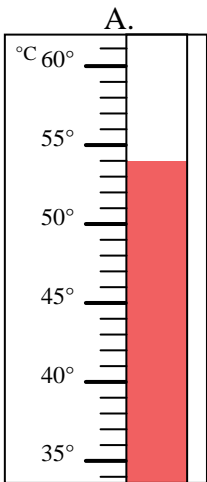


Indica quale lettera risponde correttamente ad ogni domanda.

- 1) Quale termometro rappresenta correttamente una temperatura di 107°? E
- 2) Quale termometro rappresenta correttamente una temperatura di 92°? H
- 3) Quale termometro rappresenta correttamente una temperatura di 82°? G
- 4) Quale termometro rappresenta correttamente una temperatura di 81°? B
- 5) Quale termometro rappresenta correttamente una temperatura di 22°? I
- 6) Quale termometro rappresenta correttamente una temperatura di 10°? D
- 7) Quale termometro rappresenta correttamente una temperatura di 54°? A
- 8) Quale termometro rappresenta correttamente una temperatura di 116°? J
- 9) Quale termometro rappresenta correttamente una temperatura di 18°? F
- 10) Quale termometro rappresenta correttamente una temperatura di 4°? C

**Risposte**

1. E
2. H
3. G
4. B
5. I
6. D
7. A
8. J
9. F
10. C



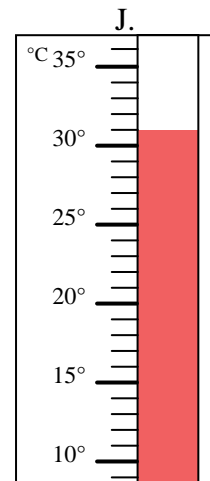
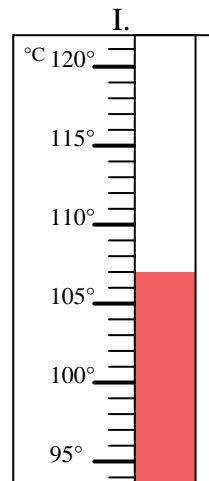
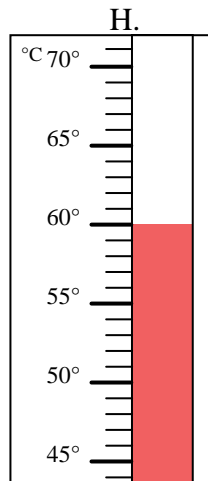
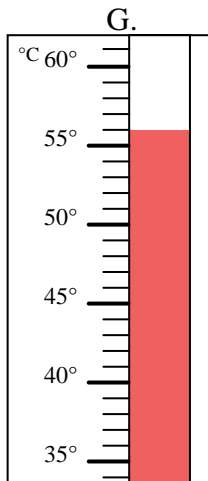
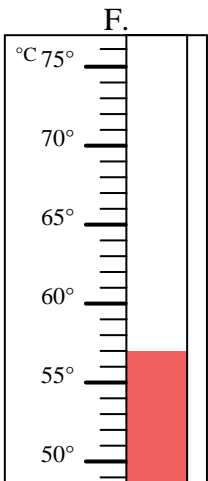
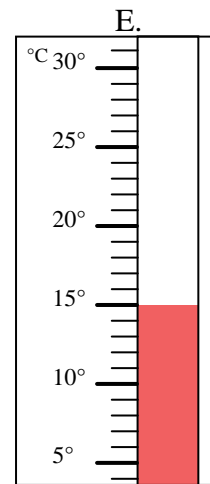
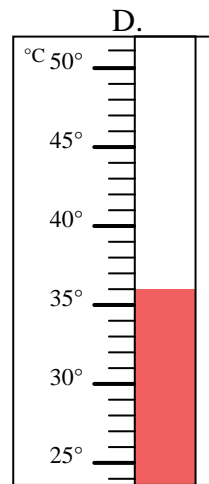
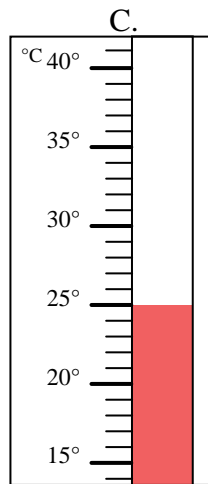
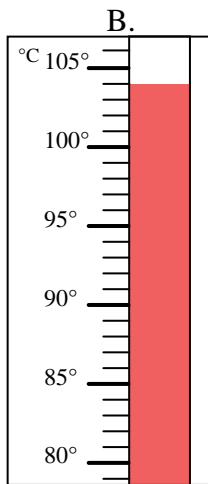
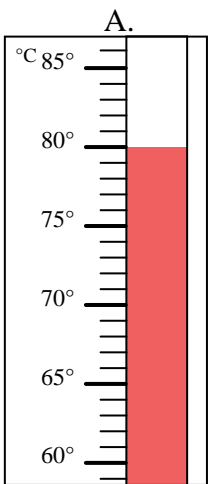


Indica quale lettera risponde correttamente ad ogni domanda.

- 1) Quale termometro rappresenta correttamente una temperatura di 25°? \_\_\_\_\_
- 2) Quale termometro rappresenta correttamente una temperatura di 107°? \_\_\_\_\_
- 3) Quale termometro rappresenta correttamente una temperatura di 15°? \_\_\_\_\_
- 4) Quale termometro rappresenta correttamente una temperatura di 57°? \_\_\_\_\_
- 5) Quale termometro rappresenta correttamente una temperatura di 80°? \_\_\_\_\_
- 6) Quale termometro rappresenta correttamente una temperatura di 104°? \_\_\_\_\_
- 7) Quale termometro rappresenta correttamente una temperatura di 60°? \_\_\_\_\_
- 8) Quale termometro rappresenta correttamente una temperatura di 31°? \_\_\_\_\_
- 9) Quale termometro rappresenta correttamente una temperatura di 36°? \_\_\_\_\_
- 10) Quale termometro rappresenta correttamente una temperatura di 56°? \_\_\_\_\_

**Risposte**

1. \_\_\_\_\_
2. \_\_\_\_\_
3. \_\_\_\_\_
4. \_\_\_\_\_
5. \_\_\_\_\_
6. \_\_\_\_\_
7. \_\_\_\_\_
8. \_\_\_\_\_
9. \_\_\_\_\_
10. \_\_\_\_\_



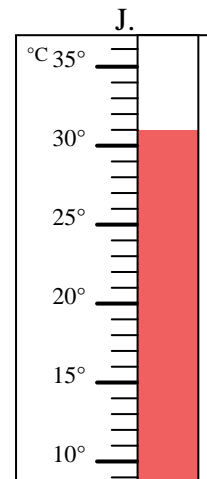
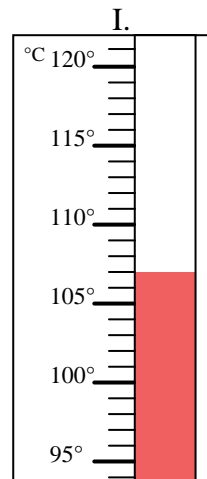
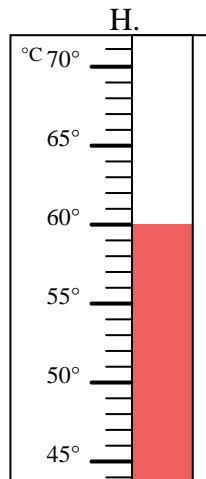
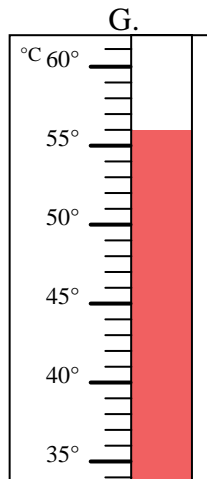
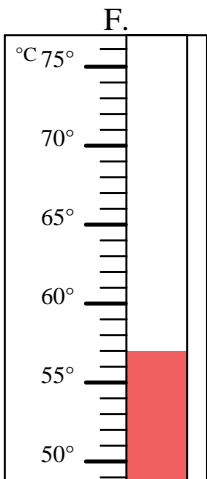
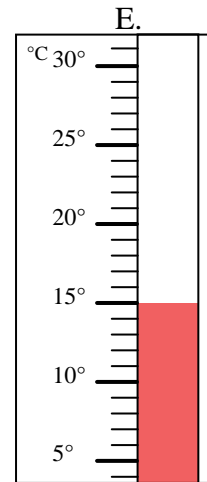
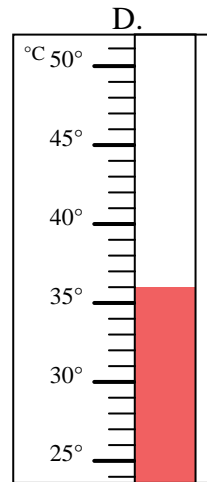
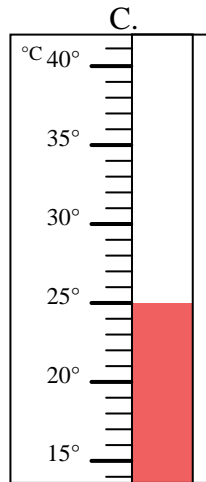
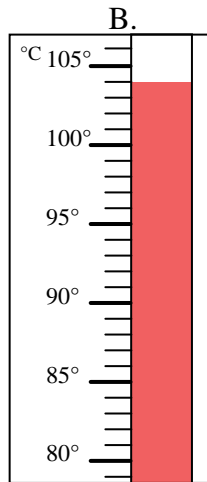
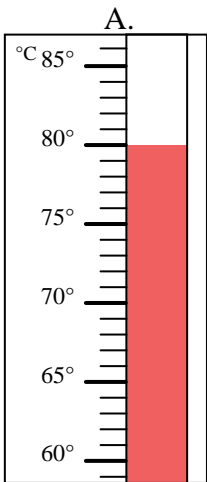


Indica quale lettera risponde correttamente ad ogni domanda.

- 1) Quale termometro rappresenta correttamente una temperatura di 25°? C
- 2) Quale termometro rappresenta correttamente una temperatura di 107°? I
- 3) Quale termometro rappresenta correttamente una temperatura di 15°? E
- 4) Quale termometro rappresenta correttamente una temperatura di 57°? F
- 5) Quale termometro rappresenta correttamente una temperatura di 80°? A
- 6) Quale termometro rappresenta correttamente una temperatura di 104°? B
- 7) Quale termometro rappresenta correttamente una temperatura di 60°? H
- 8) Quale termometro rappresenta correttamente una temperatura di 31°? J
- 9) Quale termometro rappresenta correttamente una temperatura di 36°? D
- 10) Quale termometro rappresenta correttamente una temperatura di 56°? G

**Risposte**

1. C
2. I
3. E
4. F
5. A
6. B
7. H
8. J
9. D
10. G



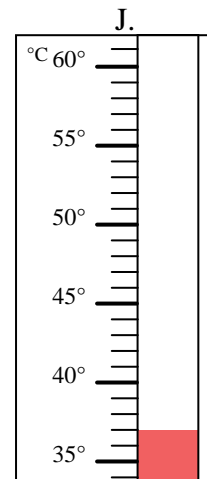
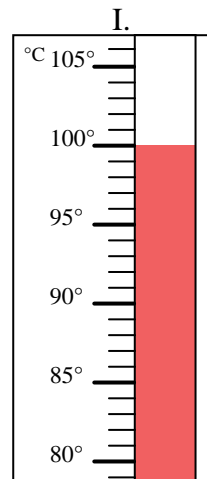
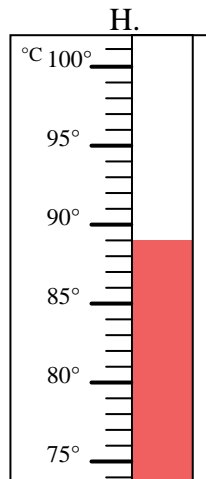
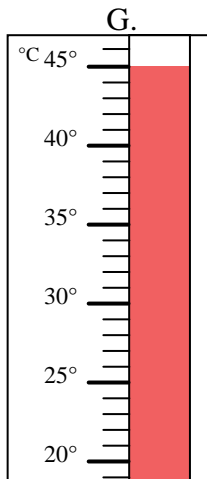
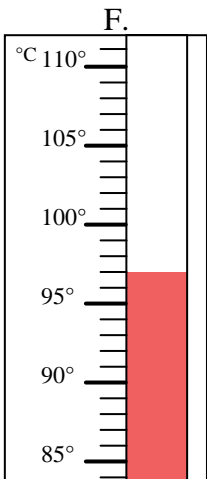
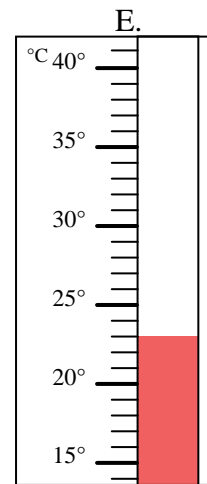
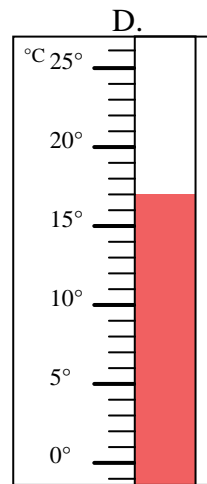
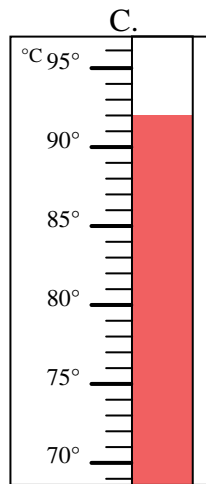
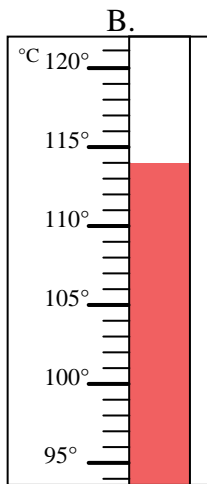
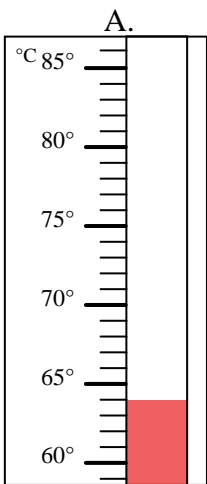


Indica quale lettera risponde correttamente ad ogni domanda.

**Risposte**

- 1) Quale termometro rappresenta correttamente una temperatura di 100°? \_\_\_\_\_
- 2) Quale termometro rappresenta correttamente una temperatura di 89°? \_\_\_\_\_
- 3) Quale termometro rappresenta correttamente una temperatura di 23°? \_\_\_\_\_
- 4) Quale termometro rappresenta correttamente una temperatura di 97°? \_\_\_\_\_
- 5) Quale termometro rappresenta correttamente una temperatura di 17°? \_\_\_\_\_
- 6) Quale termometro rappresenta correttamente una temperatura di 114°? \_\_\_\_\_
- 7) Quale termometro rappresenta correttamente una temperatura di 92°? \_\_\_\_\_
- 8) Quale termometro rappresenta correttamente una temperatura di 64°? \_\_\_\_\_
- 9) Quale termometro rappresenta correttamente una temperatura di 45°? \_\_\_\_\_
- 10) Quale termometro rappresenta correttamente una temperatura di 37°? \_\_\_\_\_

1. \_\_\_\_\_
2. \_\_\_\_\_
3. \_\_\_\_\_
4. \_\_\_\_\_
5. \_\_\_\_\_
6. \_\_\_\_\_
7. \_\_\_\_\_
8. \_\_\_\_\_
9. \_\_\_\_\_
10. \_\_\_\_\_



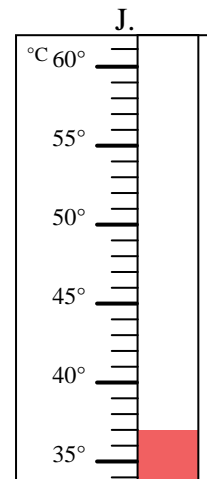
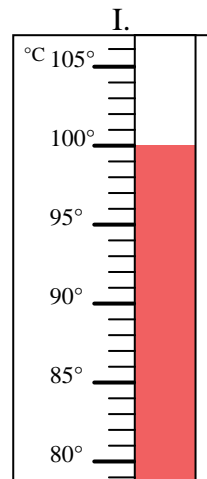
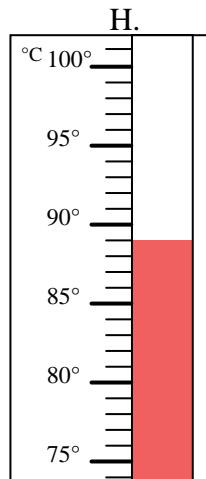
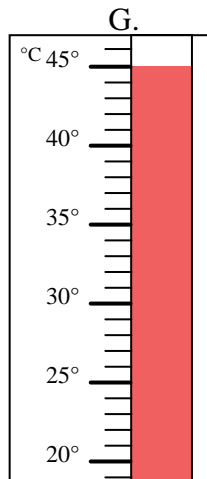
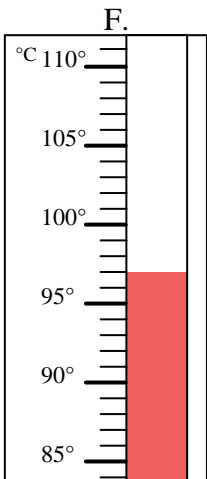
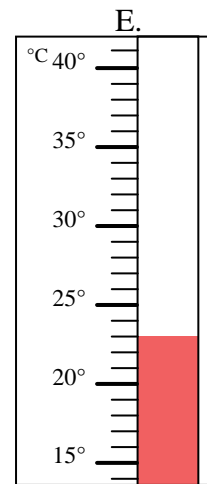
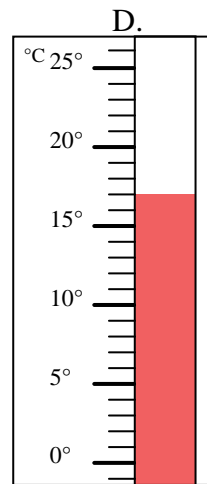
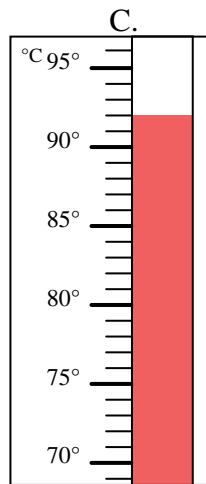
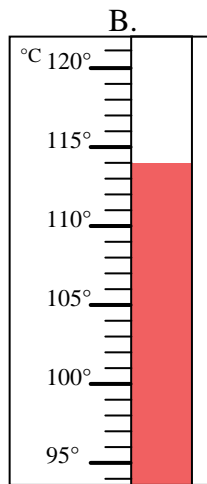
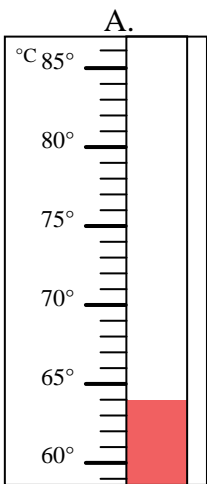


Indica quale lettera risponde correttamente ad ogni domanda.

- 1) Quale termometro rappresenta correttamente una temperatura di  $100^{\circ}$ ? I
- 2) Quale termometro rappresenta correttamente una temperatura di  $89^{\circ}$ ? H
- 3) Quale termometro rappresenta correttamente una temperatura di  $23^{\circ}$ ? E
- 4) Quale termometro rappresenta correttamente una temperatura di  $97^{\circ}$ ? F
- 5) Quale termometro rappresenta correttamente una temperatura di  $17^{\circ}$ ? D
- 6) Quale termometro rappresenta correttamente una temperatura di  $114^{\circ}$ ? B
- 7) Quale termometro rappresenta correttamente una temperatura di  $92^{\circ}$ ? C
- 8) Quale termometro rappresenta correttamente una temperatura di  $64^{\circ}$ ? A
- 9) Quale termometro rappresenta correttamente una temperatura di  $45^{\circ}$ ? G
- 10) Quale termometro rappresenta correttamente una temperatura di  $37^{\circ}$ ? J

**Risposte**

1. I
2. H
3. E
4. F
5. D
6. B
7. C
8. A
9. G
10. J



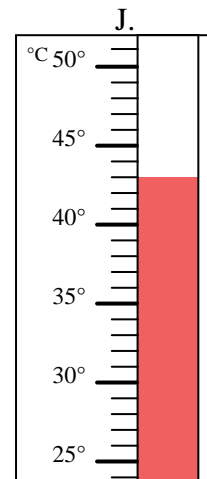
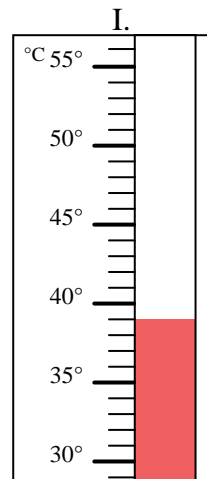
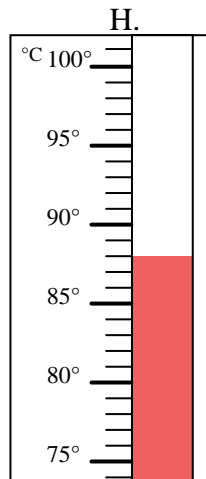
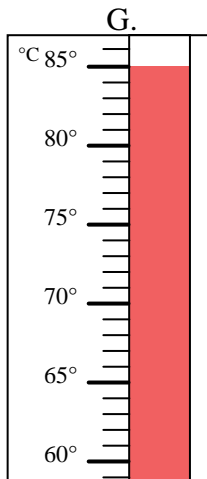
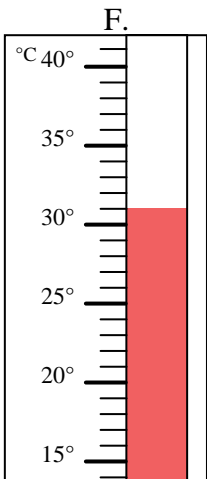
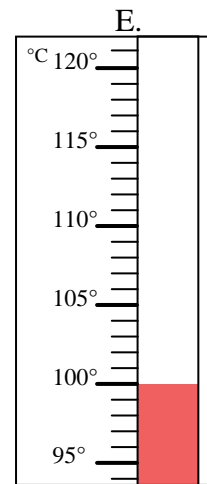
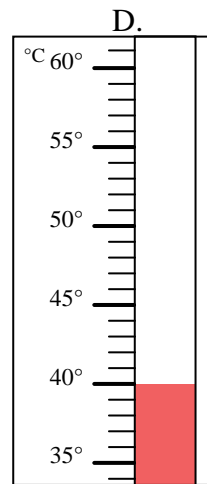
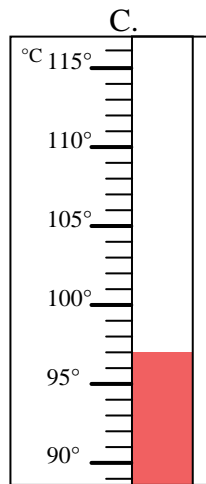
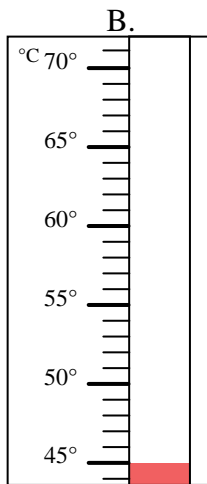
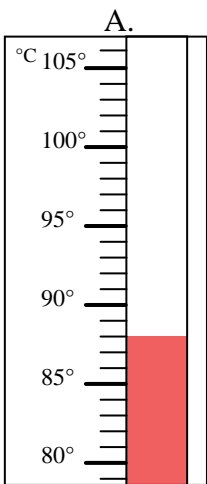


Indica quale lettera risponde correttamente ad ogni domanda.

**Risposte**

- 1) Quale termometro rappresenta correttamente una temperatura di 45°? \_\_\_\_\_
- 2) Quale termometro rappresenta correttamente una temperatura di 97°? \_\_\_\_\_
- 3) Quale termometro rappresenta correttamente una temperatura di 100°? \_\_\_\_\_
- 4) Quale termometro rappresenta correttamente una temperatura di 39°? \_\_\_\_\_
- 5) Quale termometro rappresenta correttamente una temperatura di 88°? \_\_\_\_\_
- 6) Quale termometro rappresenta correttamente una temperatura di 88°? \_\_\_\_\_
- 7) Quale termometro rappresenta correttamente una temperatura di 31°? \_\_\_\_\_
- 8) Quale termometro rappresenta correttamente una temperatura di 85°? \_\_\_\_\_
- 9) Quale termometro rappresenta correttamente una temperatura di 40°? \_\_\_\_\_
- 10) Quale termometro rappresenta correttamente una temperatura di 43°? \_\_\_\_\_

1. \_\_\_\_\_
2. \_\_\_\_\_
3. \_\_\_\_\_
4. \_\_\_\_\_
5. \_\_\_\_\_
6. \_\_\_\_\_
7. \_\_\_\_\_
8. \_\_\_\_\_
9. \_\_\_\_\_
10. \_\_\_\_\_



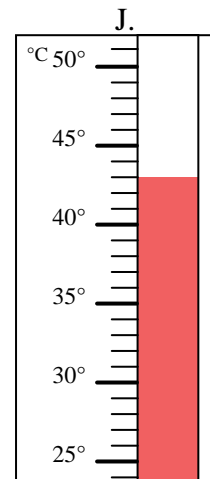
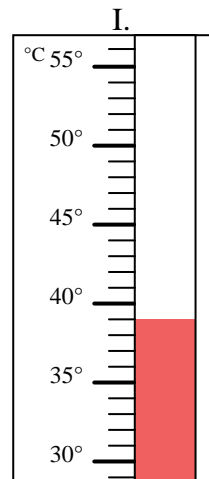
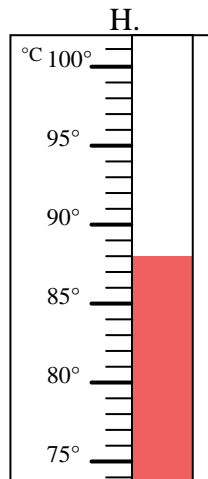
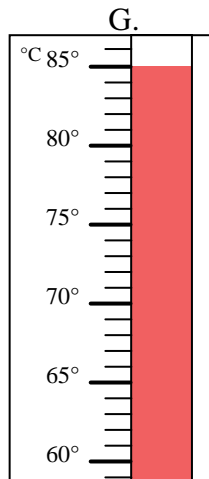
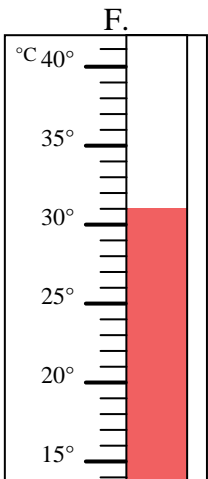
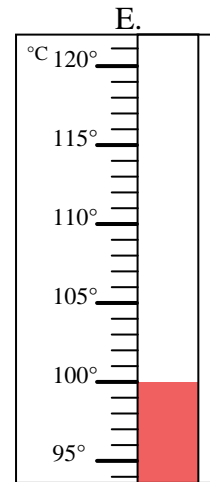
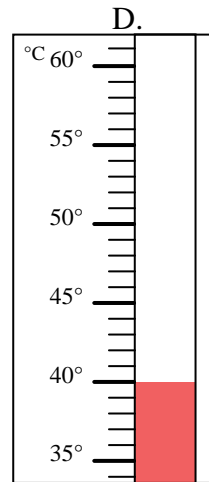
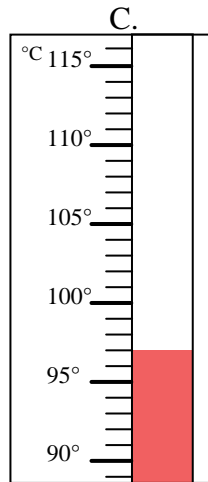
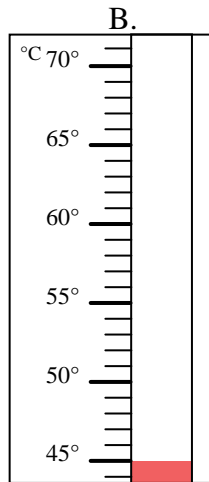
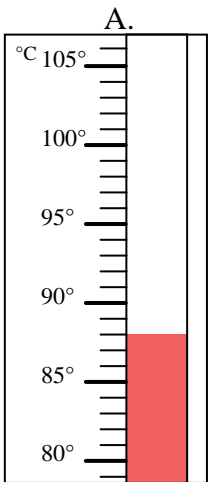


Indica quale lettera risponde correttamente ad ogni domanda.

- 1) Quale termometro rappresenta correttamente una temperatura di 45°? B
- 2) Quale termometro rappresenta correttamente una temperatura di 97°? C
- 3) Quale termometro rappresenta correttamente una temperatura di 100°? E
- 4) Quale termometro rappresenta correttamente una temperatura di 39°? I
- 5) Quale termometro rappresenta correttamente una temperatura di 88°? H
- 6) Quale termometro rappresenta correttamente una temperatura di 88°? A
- 7) Quale termometro rappresenta correttamente una temperatura di 31°? F
- 8) Quale termometro rappresenta correttamente una temperatura di 85°? G
- 9) Quale termometro rappresenta correttamente una temperatura di 40°? D
- 10) Quale termometro rappresenta correttamente una temperatura di 43°? J

**Risposte**

1. B
2. C
3. E
4. I
5. H
6. A
7. F
8. G
9. D
10. J





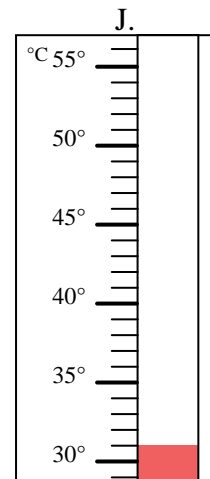
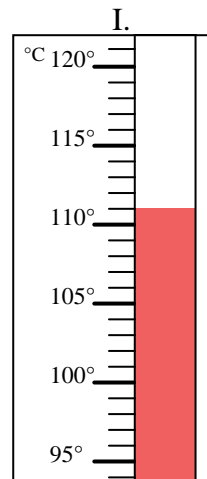
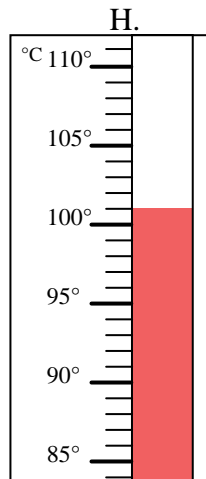
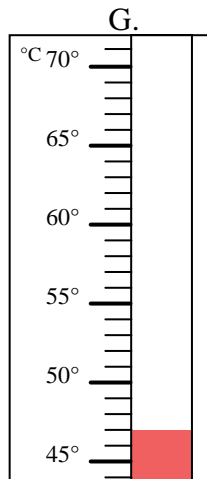
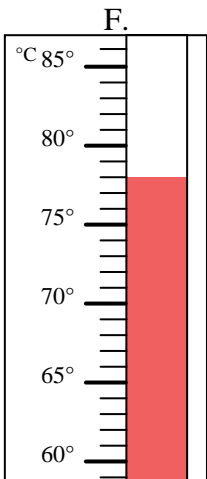
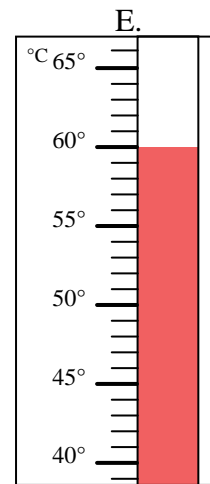
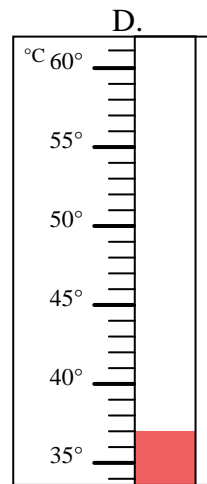
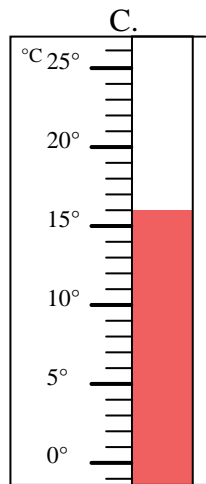
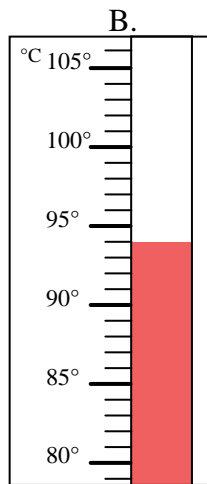
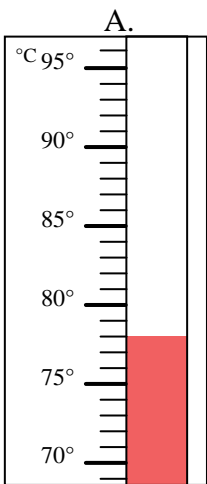


Indica quale lettera risponde correttamente ad ogni domanda.

- 1) Quale termometro rappresenta correttamente una temperatura di  $47^{\circ}$ ? \_\_\_\_\_
- 2) Quale termometro rappresenta correttamente una temperatura di  $78^{\circ}$ ? \_\_\_\_\_
- 3) Quale termometro rappresenta correttamente una temperatura di  $101^{\circ}$ ? \_\_\_\_\_
- 4) Quale termometro rappresenta correttamente una temperatura di  $31^{\circ}$ ? \_\_\_\_\_
- 5) Quale termometro rappresenta correttamente una temperatura di  $37^{\circ}$ ? \_\_\_\_\_
- 6) Quale termometro rappresenta correttamente una temperatura di  $16^{\circ}$ ? \_\_\_\_\_
- 7) Quale termometro rappresenta correttamente una temperatura di  $60^{\circ}$ ? \_\_\_\_\_
- 8) Quale termometro rappresenta correttamente una temperatura di  $78^{\circ}$ ? \_\_\_\_\_
- 9) Quale termometro rappresenta correttamente una temperatura di  $111^{\circ}$ ? \_\_\_\_\_
- 10) Quale termometro rappresenta correttamente una temperatura di  $94^{\circ}$ ? \_\_\_\_\_

**Risposte**

1. \_\_\_\_\_
2. \_\_\_\_\_
3. \_\_\_\_\_
4. \_\_\_\_\_
5. \_\_\_\_\_
6. \_\_\_\_\_
7. \_\_\_\_\_
8. \_\_\_\_\_
9. \_\_\_\_\_
10. \_\_\_\_\_



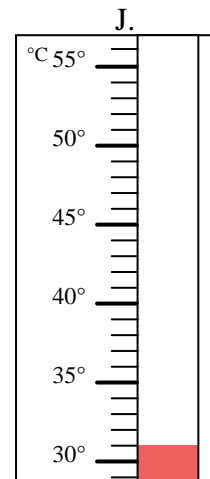
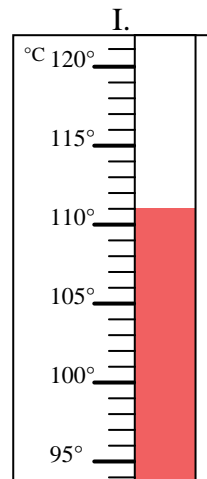
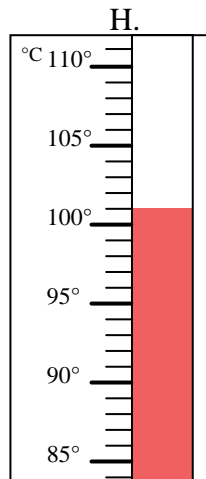
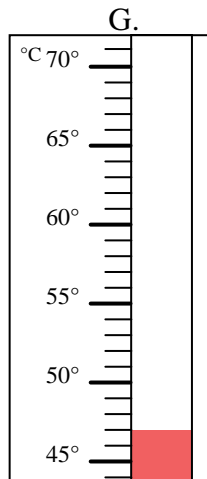
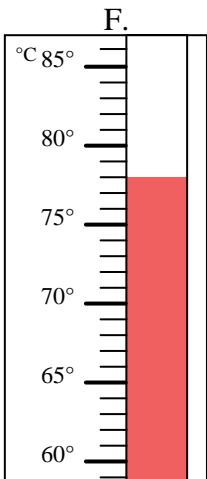
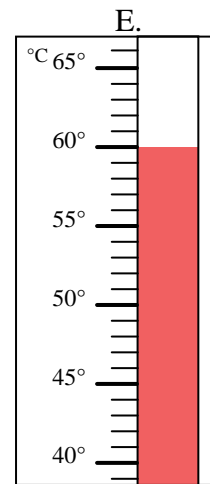
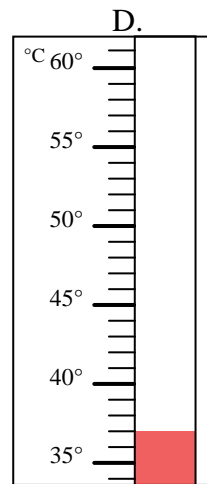
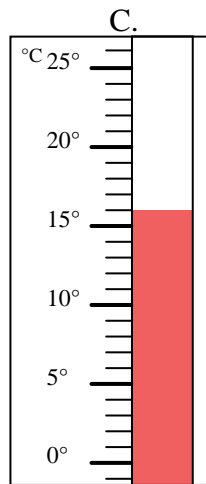
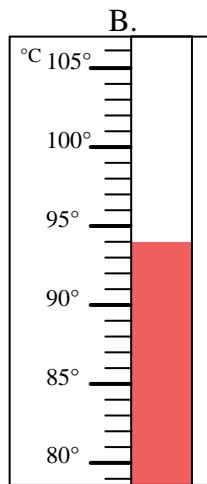
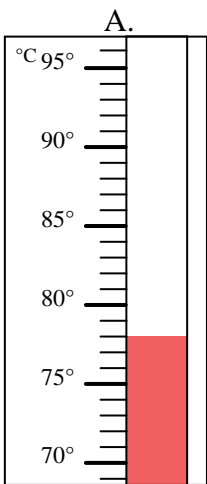


Indica quale lettera risponde correttamente ad ogni domanda.

- 1) Quale termometro rappresenta correttamente una temperatura di 47°?  G
- 2) Quale termometro rappresenta correttamente una temperatura di 78°?  A
- 3) Quale termometro rappresenta correttamente una temperatura di 101°?  H
- 4) Quale termometro rappresenta correttamente una temperatura di 31°?  J
- 5) Quale termometro rappresenta correttamente una temperatura di 37°?  D
- 6) Quale termometro rappresenta correttamente una temperatura di 16°?  C
- 7) Quale termometro rappresenta correttamente una temperatura di 60°?  E
- 8) Quale termometro rappresenta correttamente una temperatura di 78°?  F
- 9) Quale termometro rappresenta correttamente una temperatura di 111°?  I
- 10) Quale termometro rappresenta correttamente una temperatura di 94°?  B

**Risposte**

1.  G
2.  A
3.  H
4.  J
5.  D
6.  C
7.  E
8.  F
9.  I
10.  B



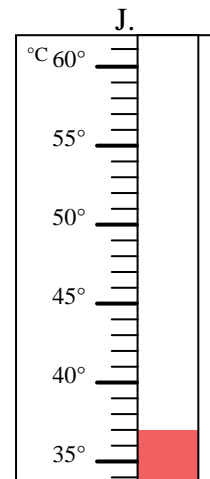
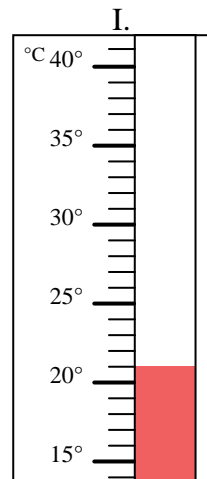
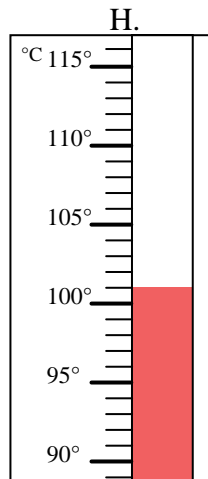
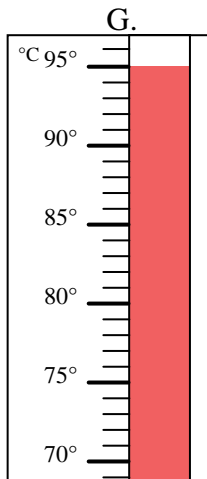
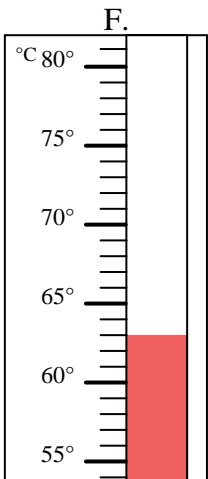
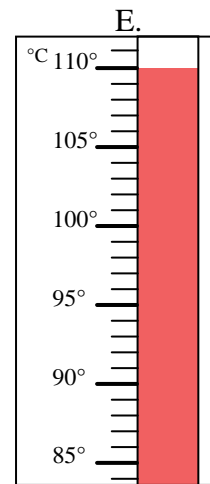
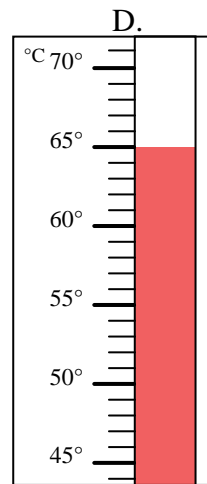
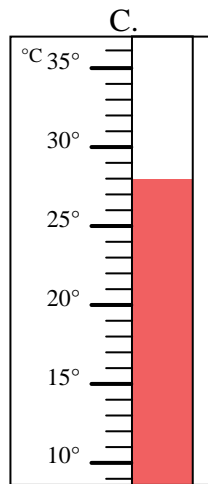
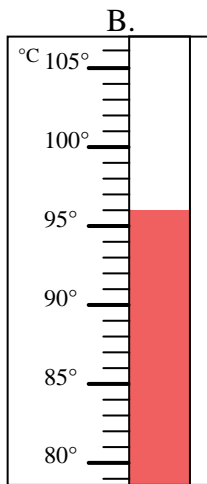
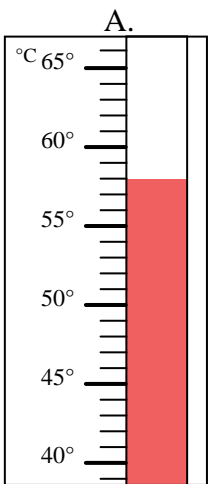


Indica quale lettera risponde correttamente ad ogni domanda.

- 1) Quale termometro rappresenta correttamente una temperatura di  $96^\circ$ ? \_\_\_\_\_
- 2) Quale termometro rappresenta correttamente una temperatura di  $110^\circ$ ? \_\_\_\_\_
- 3) Quale termometro rappresenta correttamente una temperatura di  $28^\circ$ ? \_\_\_\_\_
- 4) Quale termometro rappresenta correttamente una temperatura di  $58^\circ$ ? \_\_\_\_\_
- 5) Quale termometro rappresenta correttamente una temperatura di  $37^\circ$ ? \_\_\_\_\_
- 6) Quale termometro rappresenta correttamente una temperatura di  $95^\circ$ ? \_\_\_\_\_
- 7) Quale termometro rappresenta correttamente una temperatura di  $101^\circ$ ? \_\_\_\_\_
- 8) Quale termometro rappresenta correttamente una temperatura di  $63^\circ$ ? \_\_\_\_\_
- 9) Quale termometro rappresenta correttamente una temperatura di  $21^\circ$ ? \_\_\_\_\_
- 10) Quale termometro rappresenta correttamente una temperatura di  $65^\circ$ ? \_\_\_\_\_

**Risposte**

1. \_\_\_\_\_
2. \_\_\_\_\_
3. \_\_\_\_\_
4. \_\_\_\_\_
5. \_\_\_\_\_
6. \_\_\_\_\_
7. \_\_\_\_\_
8. \_\_\_\_\_
9. \_\_\_\_\_
10. \_\_\_\_\_





Indica quale lettera risponde correttamente ad ogni domanda.

- 1) Quale termometro rappresenta correttamente una temperatura di 96°? B
- 2) Quale termometro rappresenta correttamente una temperatura di 110°? E
- 3) Quale termometro rappresenta correttamente una temperatura di 28°? C
- 4) Quale termometro rappresenta correttamente una temperatura di 58°? A
- 5) Quale termometro rappresenta correttamente una temperatura di 37°? J
- 6) Quale termometro rappresenta correttamente una temperatura di 95°? G
- 7) Quale termometro rappresenta correttamente una temperatura di 101°? H
- 8) Quale termometro rappresenta correttamente una temperatura di 63°? F
- 9) Quale termometro rappresenta correttamente una temperatura di 21°? I
- 10) Quale termometro rappresenta correttamente una temperatura di 65°? D

**Risposte**

1. B
2. E
3. C
4. A
5. J
6. G
7. H
8. F
9. I
10. D

