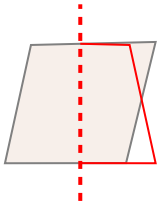




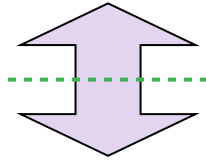


Determina se la linea che attraversa ogni figura è un linea di simmetria.

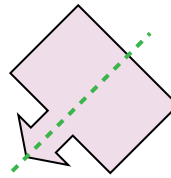
Es)



1)



2)



Risposte

Es. no

1. si

2. si

3. no

4. no

5. si

6. si

7. no

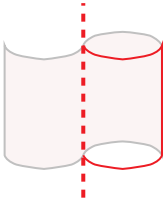
8. no

9. si

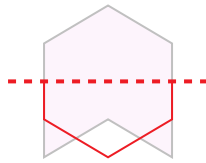
10. si

11. si

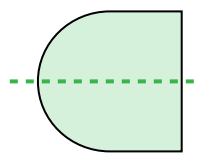
3)



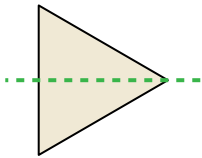
4)



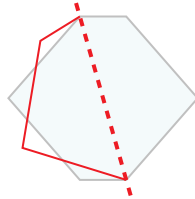
5)



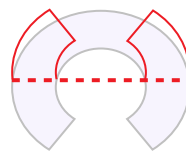
6)



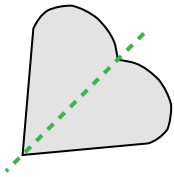
7)




8)



9)



10)



11)

