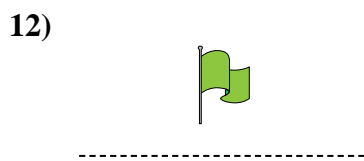
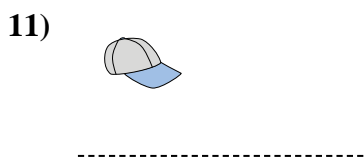
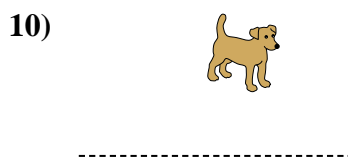
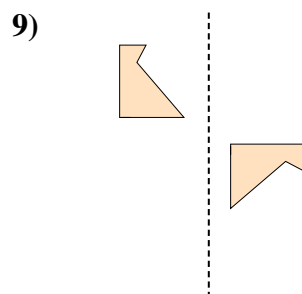
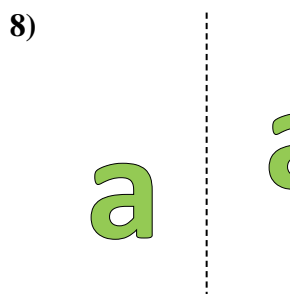
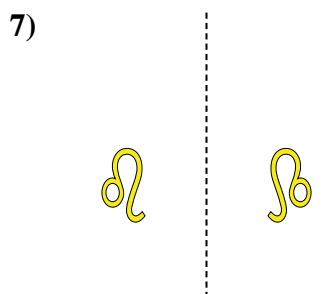
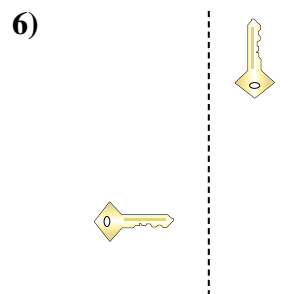
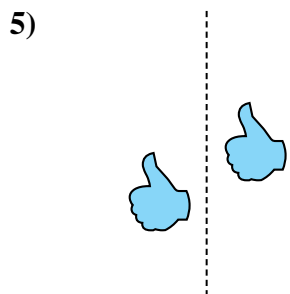
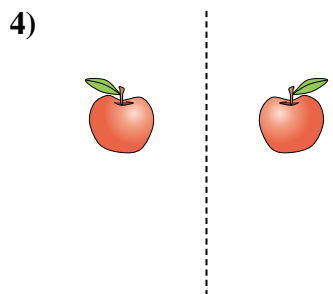
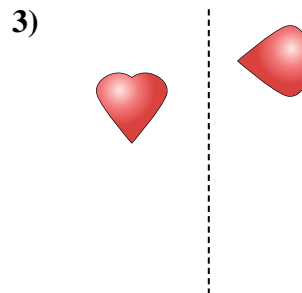
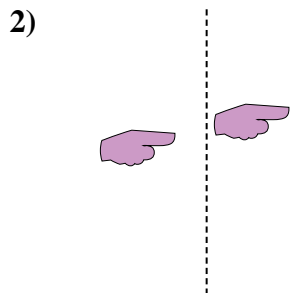
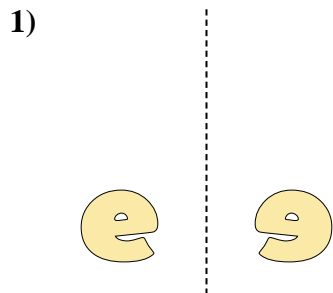




Indica se la forma è stata traslata (traslazione), ruotata (rotazione) o specchiata (inversione).

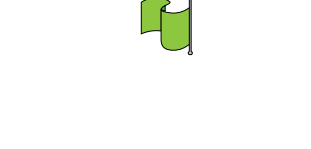
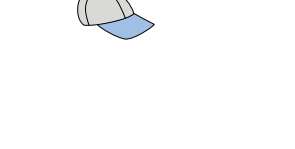
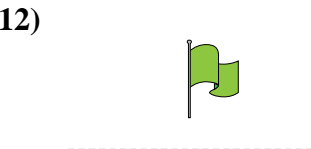
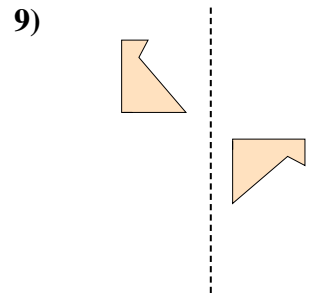
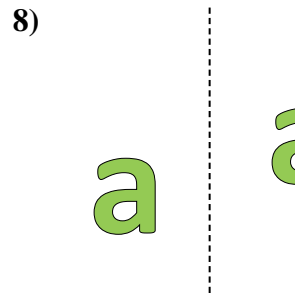
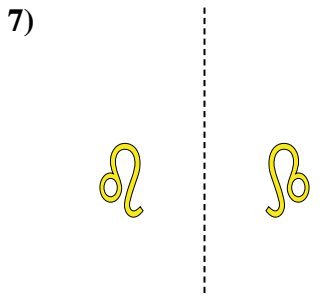
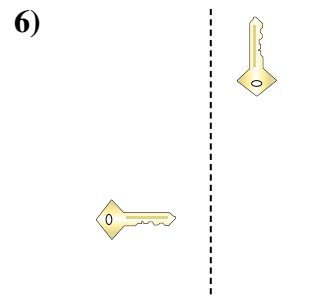
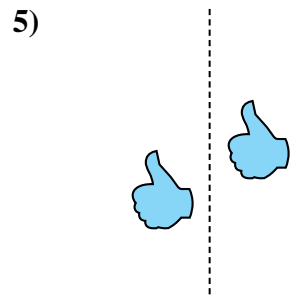
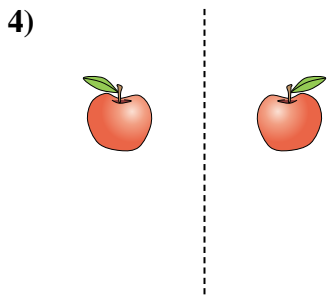
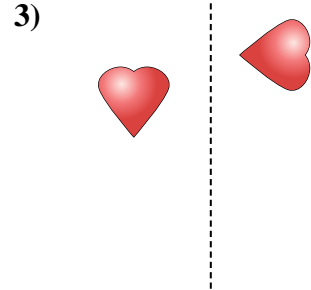
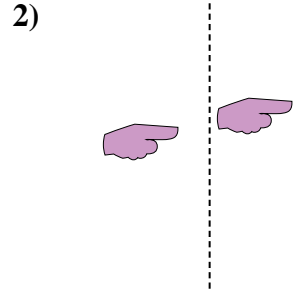
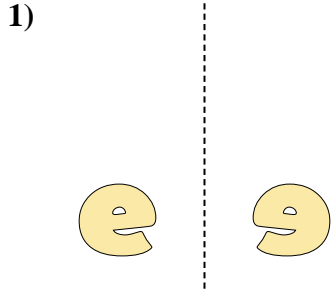


**Risposte**

1. \_\_\_\_\_
2. \_\_\_\_\_
3. \_\_\_\_\_
4. \_\_\_\_\_
5. \_\_\_\_\_
6. \_\_\_\_\_
7. \_\_\_\_\_
8. \_\_\_\_\_
9. \_\_\_\_\_
10. \_\_\_\_\_
11. \_\_\_\_\_
12. \_\_\_\_\_
13. \_\_\_\_\_
14. \_\_\_\_\_
15. \_\_\_\_\_



Indica se la forma è stata traslata (traslazione), ruotata (rotazione) o specchiata (inversione).



Risposte

1. inversione

2. traslazione

3. rotazione

4. inversione

5. traslazione

6. rotazione

7. inversione

8. traslazione

9. rotazione

10. inversione

11. traslazione

12. rotazione

13. inversione

14. traslazione

15. rotazione

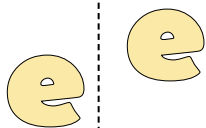


Indica se la forma è stata traslata (traslazione), ruotata (rotazione) o specchiata (inversione).

1)



2)



3)




1. \_\_\_\_\_

2. \_\_\_\_\_

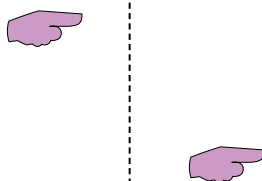
3. \_\_\_\_\_

4. \_\_\_\_\_

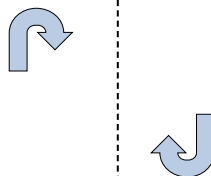
4)



5)



6)




5. \_\_\_\_\_

6. \_\_\_\_\_

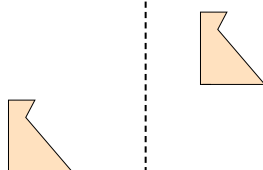
7. \_\_\_\_\_

8. \_\_\_\_\_

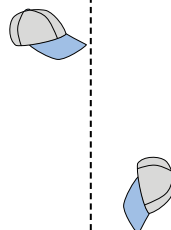
7)



8)



9)



9. \_\_\_\_\_

10. \_\_\_\_\_

11. \_\_\_\_\_

12. \_\_\_\_\_

10)



11)



12)



13. \_\_\_\_\_

14. \_\_\_\_\_

15. \_\_\_\_\_



13)



14)




15)



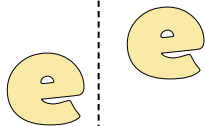


Indica se la forma è stata traslata (traslazione), ruotata (rotazione) o specchiata (inversione).

1)



2)



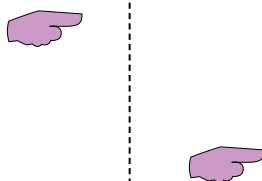
3)



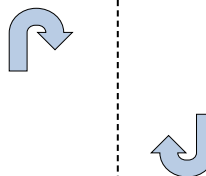
4)



5)



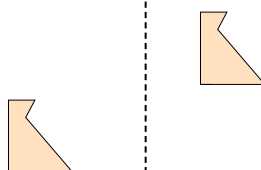
6)



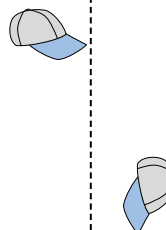
7)



8)



9)



10)



11)



12)



13)



14)



15)



Risposte

1. inversione

2. traslazione

3. rotazione

4. inversione

5. traslazione

6. rotazione

7. inversione

8. traslazione

9. rotazione

10. inversione

11. traslazione

12. rotazione

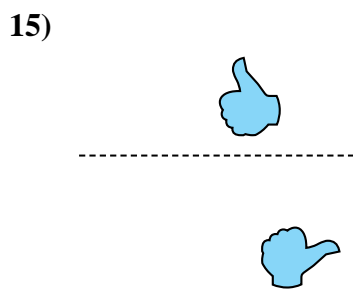
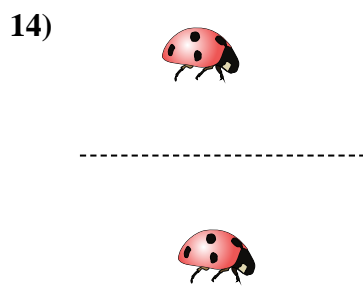
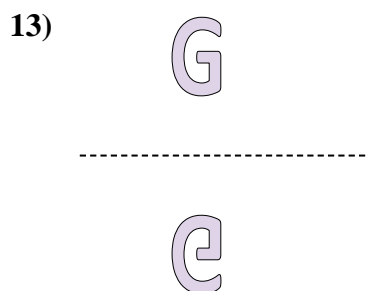

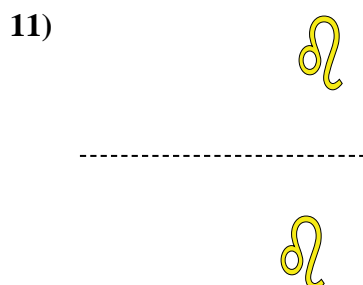
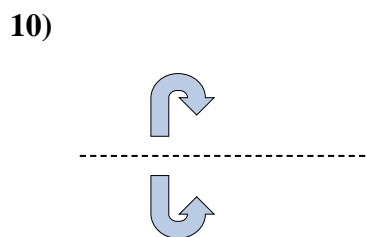
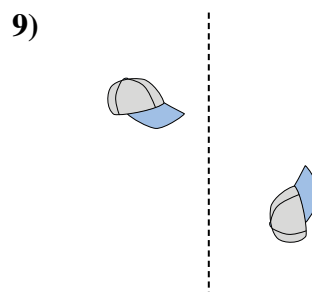
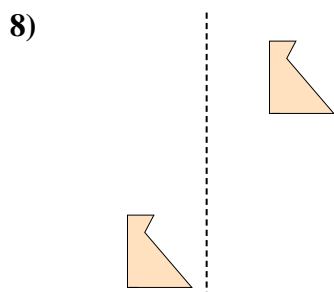
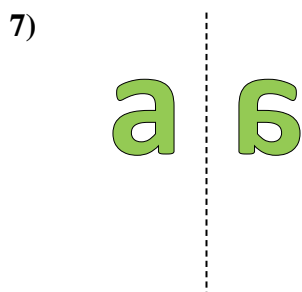
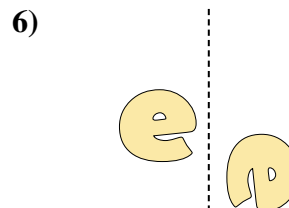
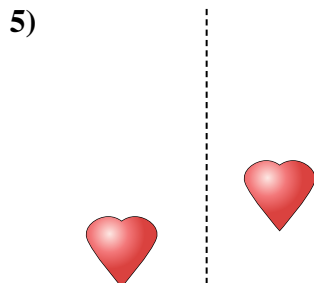
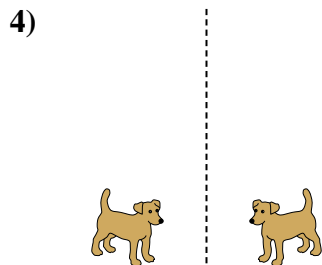
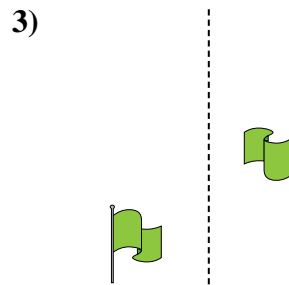
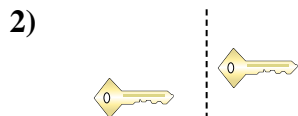
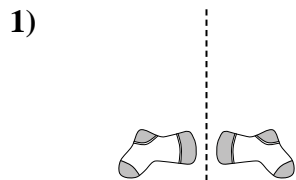
13. inversione

14. traslazione

15. rotazione



Indica se la forma è stata traslata (traslazione), ruotata (rotazione) o specchiata (inversione).

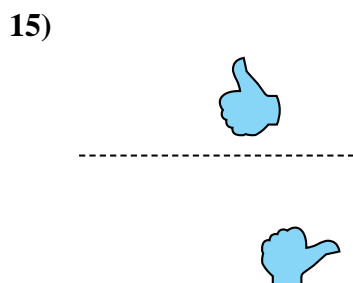
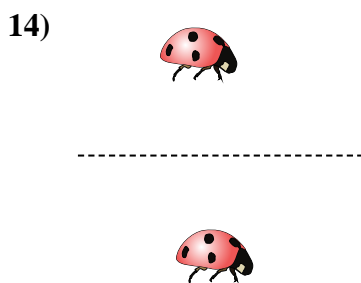
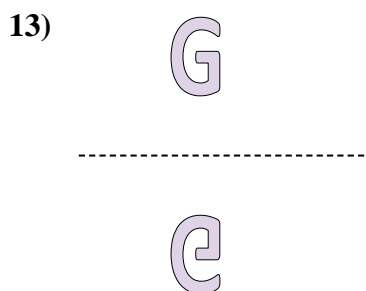

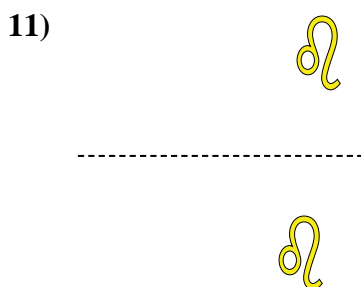
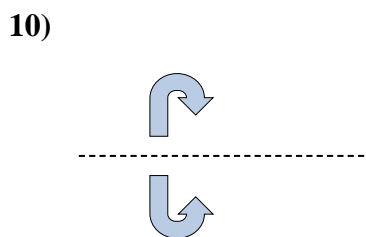
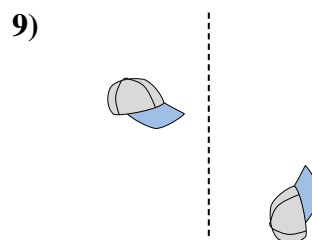
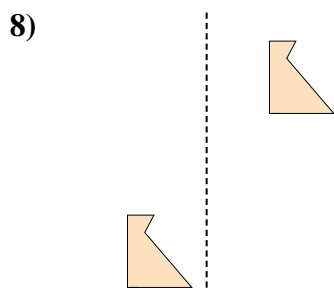
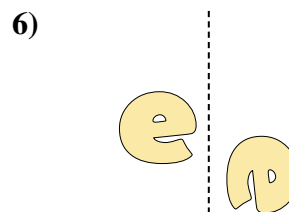
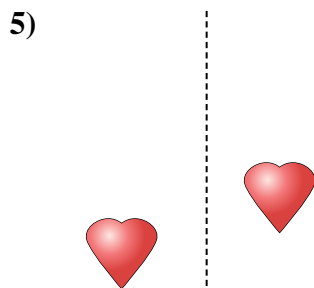
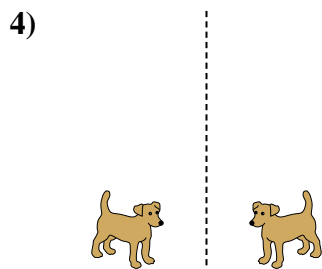
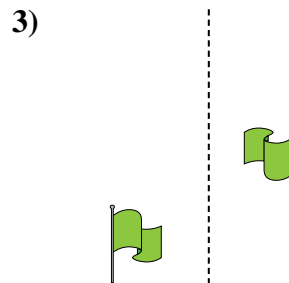
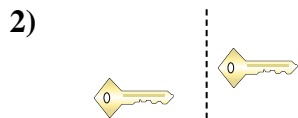
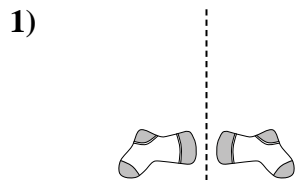


**Risposte**

1. \_\_\_\_\_
2. \_\_\_\_\_
3. \_\_\_\_\_
4. \_\_\_\_\_
5. \_\_\_\_\_
6. \_\_\_\_\_
7. \_\_\_\_\_
8. \_\_\_\_\_
9. \_\_\_\_\_
10. \_\_\_\_\_
11. \_\_\_\_\_
12. \_\_\_\_\_
13. \_\_\_\_\_
14. \_\_\_\_\_
15. \_\_\_\_\_



Indica se la forma è stata traslata (traslazione), ruotata (rotazione) o specchiata (inversione).

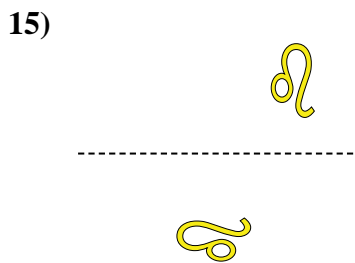

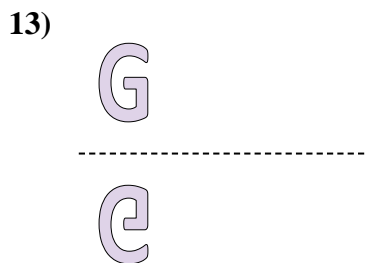
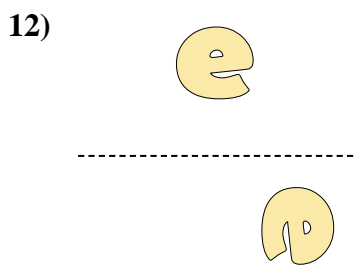
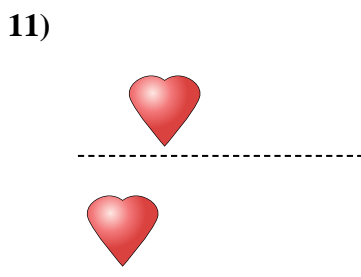
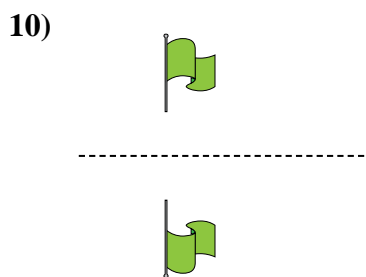
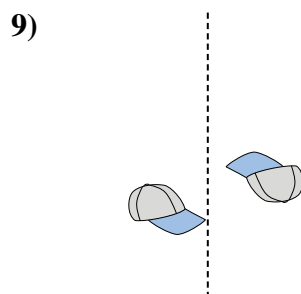
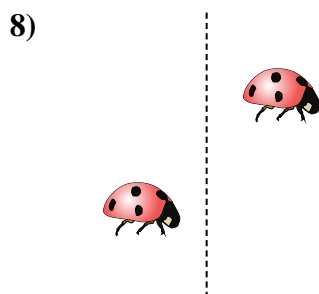
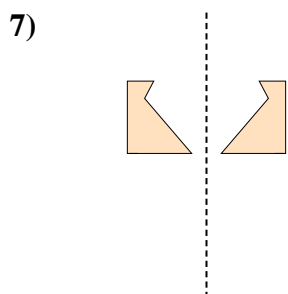
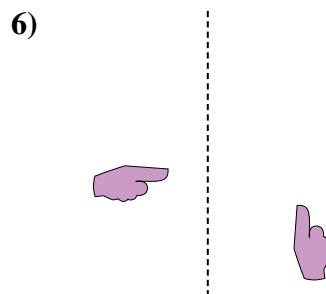
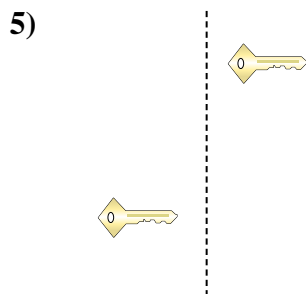
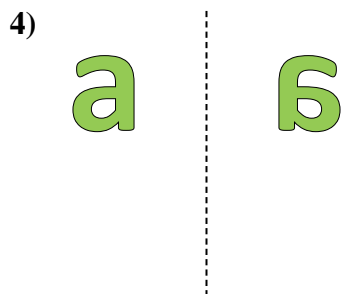
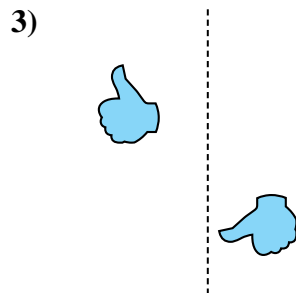
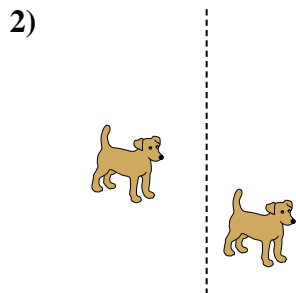
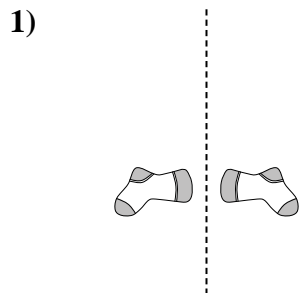


Risposte

1. inversione
2. traslazione
3. rotazione
4. inversione
5. traslazione
6. rotazione
7. inversione
8. traslazione
9. rotazione
10. inversione
11. traslazione
12. rotazione
13. inversione
14. traslazione
15. rotazione



Indica se la forma è stata traslata (traslazione), ruotata (rotazione) o specchiata (inversione).

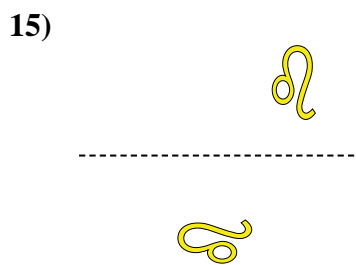
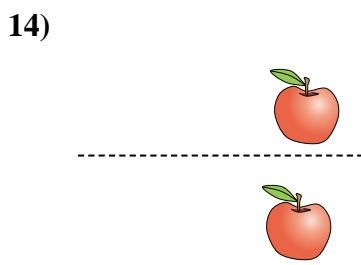
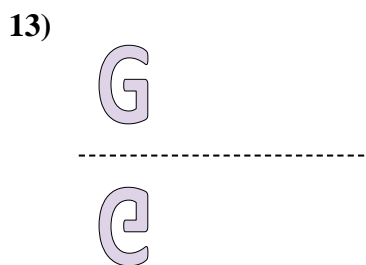
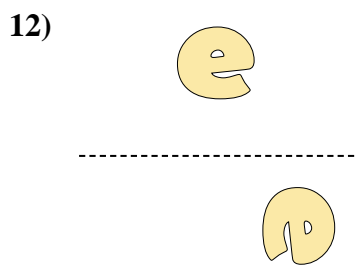
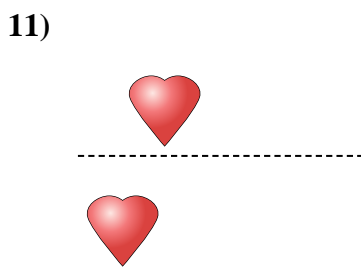
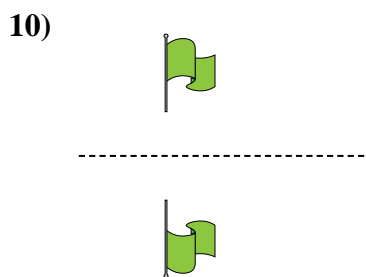
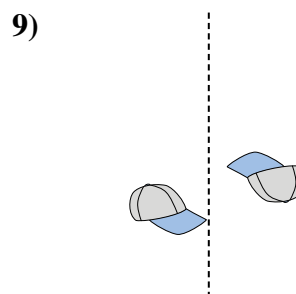
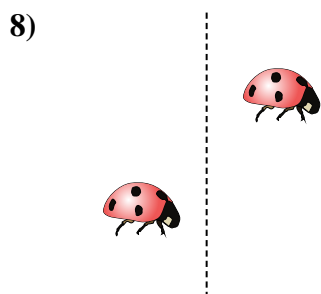
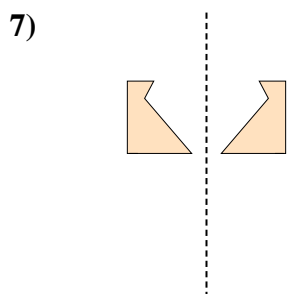
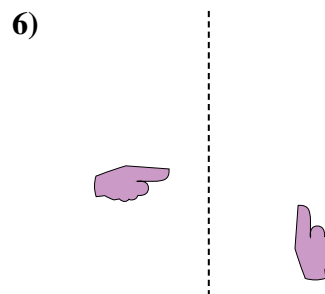
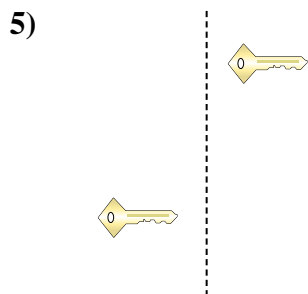
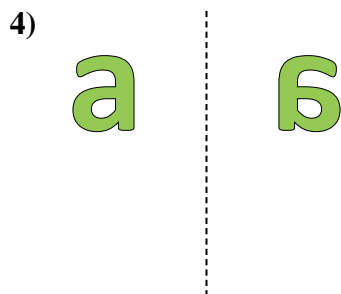
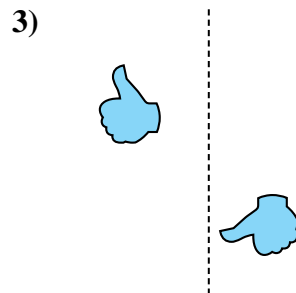
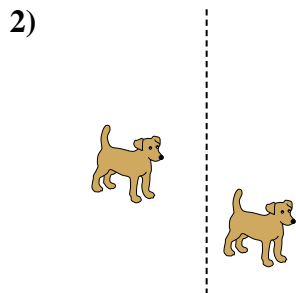
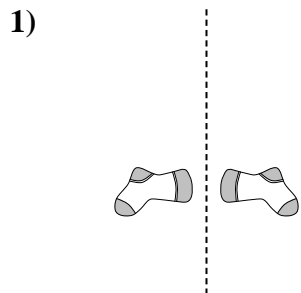


**Risposte**

1. \_\_\_\_\_
2. \_\_\_\_\_
3. \_\_\_\_\_
4. \_\_\_\_\_
5. \_\_\_\_\_
6. \_\_\_\_\_
7. \_\_\_\_\_
8. \_\_\_\_\_
9. \_\_\_\_\_
10. \_\_\_\_\_
11. \_\_\_\_\_
12. \_\_\_\_\_
13. \_\_\_\_\_
14. \_\_\_\_\_
15. \_\_\_\_\_



Indica se la forma è stata traslata (traslazione), ruotata (rotazione) o specchiata (inversione).



Risposte


1. inversione
2. traslazione
3. rotazione
4. inversione
5. traslazione
6. rotazione
7. inversione
8. traslazione
9. rotazione
10. inversione
11. traslazione
12. rotazione
13. inversione
14. traslazione
15. rotazione





Indica se la forma è stata traslata (traslazione), ruotata (rotazione) o specchiata (inversione).

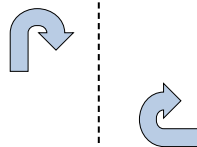
1)



2)



3)




4)



5)



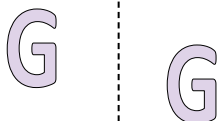
6)



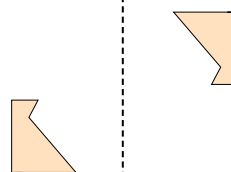
7)



8)



9)



10)



11)



12)



13)



14)



15)



**Risposte**

1. \_\_\_\_\_

2. \_\_\_\_\_

3. \_\_\_\_\_

4. \_\_\_\_\_

5. \_\_\_\_\_

6. \_\_\_\_\_

7. \_\_\_\_\_

8. \_\_\_\_\_

9. \_\_\_\_\_

10. \_\_\_\_\_

11. \_\_\_\_\_

12. \_\_\_\_\_

13. \_\_\_\_\_

14. \_\_\_\_\_

15. \_\_\_\_\_



Indica se la forma è stata traslata (traslazione), ruotata (rotazione) o specchiata (inversione).

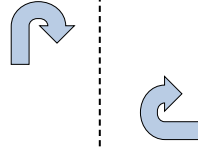
1)




2)



3)




4)



5)



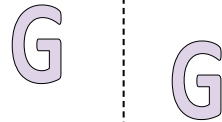
6)



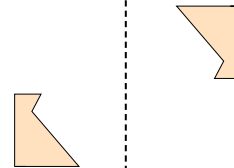
7)



8)



9)



10)



11)



12)



13)



14)



15)



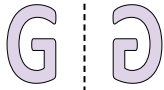
Risposte

- 1. inversione
- 2. traslazione
- 3. rotazione
- 4. inversione
- 5. traslazione
- 6. rotazione
- 7. inversione
- 8. traslazione
- 9. rotazione
- 10. inversione
- 11. traslazione
- 12. rotazione
- 13. inversione
- 14. traslazione
- 15. rotazione



Indica se la forma è stata traslata (traslazione), ruotata (rotazione) o specchiata (inversione).

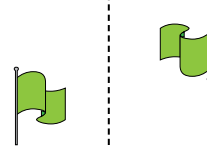
1)



2)




3)



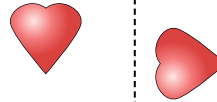
4)




5)



6)



7)



8)



9)



10)



11)



12)



13)



14)



15)



**Risposte**

1. \_\_\_\_\_

2. \_\_\_\_\_

3. \_\_\_\_\_

4. \_\_\_\_\_

5. \_\_\_\_\_

6. \_\_\_\_\_

7. \_\_\_\_\_

8. \_\_\_\_\_

9. \_\_\_\_\_

10. \_\_\_\_\_

11. \_\_\_\_\_

12. \_\_\_\_\_

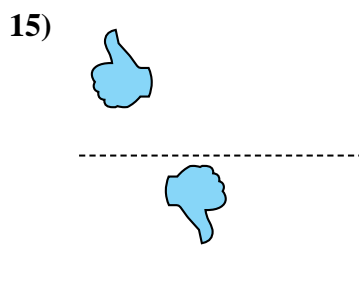
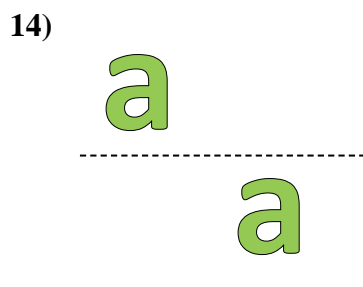
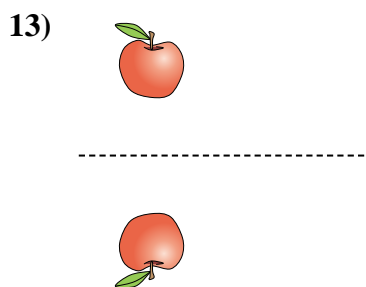
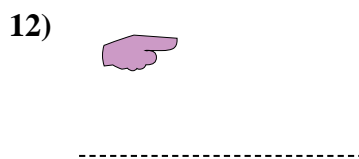
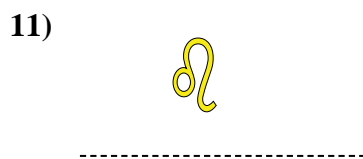
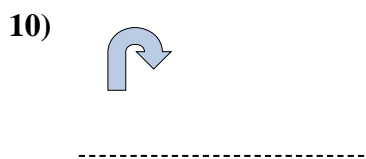
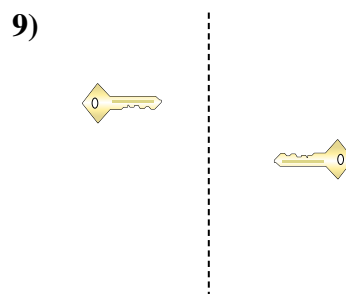
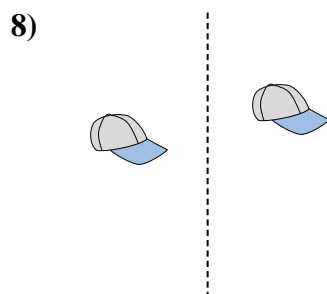
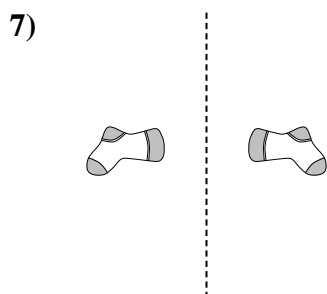
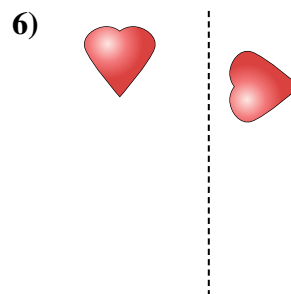
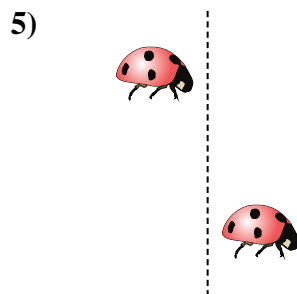
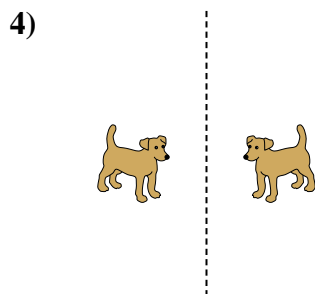
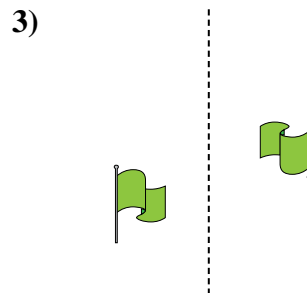
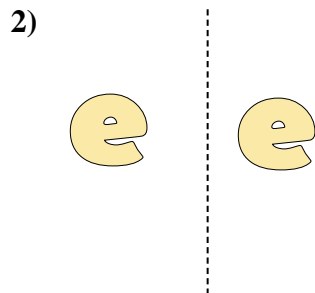
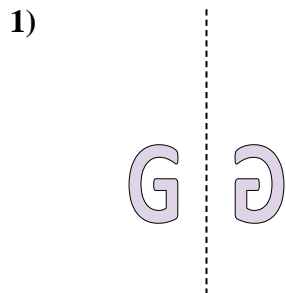
13. \_\_\_\_\_

14. \_\_\_\_\_

15. \_\_\_\_\_



Indica se la forma è stata traslata (traslazione), ruotata (rotazione) o specchiata (inversione).




Risposte

1. inversione
2. traslazione
3. rotazione
4. inversione
5. traslazione
6. rotazione
7. inversione
8. traslazione
9. rotazione
10. inversione
11. traslazione
12. rotazione
13. inversione
14. traslazione
15. rotazione

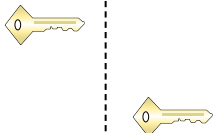


Indica se la forma è stata traslata (traslazione), ruotata (rotazione) o specchiata (inversione).

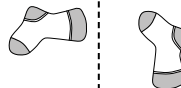
1)



2)



3)



1. \_\_\_\_\_

2. \_\_\_\_\_

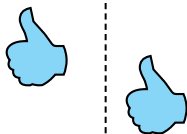
3. \_\_\_\_\_

4. \_\_\_\_\_


4)



5)



6)




5. \_\_\_\_\_

6. \_\_\_\_\_

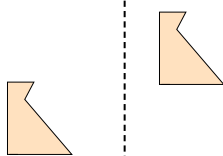
7. \_\_\_\_\_

8. \_\_\_\_\_

7)



8)



9)



9. \_\_\_\_\_

10. \_\_\_\_\_

11. \_\_\_\_\_

12. \_\_\_\_\_

10)



11)



12)



13. \_\_\_\_\_

14. \_\_\_\_\_

15. \_\_\_\_\_



13)



14)



15)



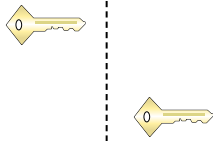


Indica se la forma è stata traslata (traslazione), ruotata (rotazione) o specchiata (inversione).

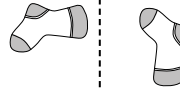
1)



2)



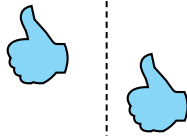
3)




4)



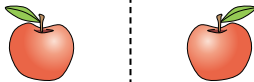
5)



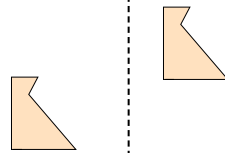
6)




7)



8)



9)



10)



11)



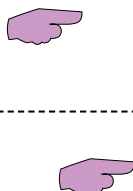
12)



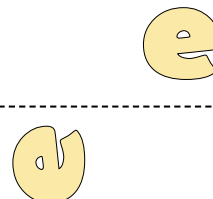
13)



14)



15)



Risposte

1. inversione

2. traslazione

3. rotazione

4. inversione

5. traslazione

6. rotazione

7. inversione

8. traslazione

9. rotazione

10. inversione

11. traslazione

12. rotazione


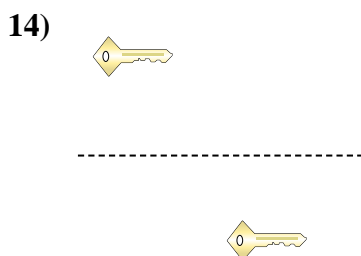
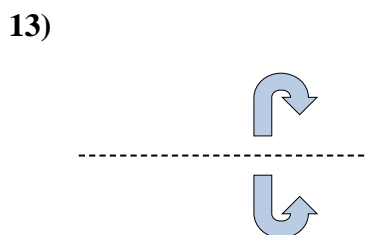
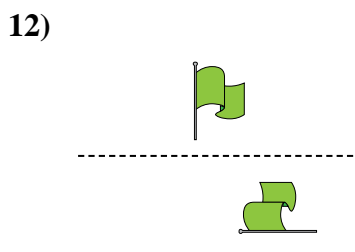
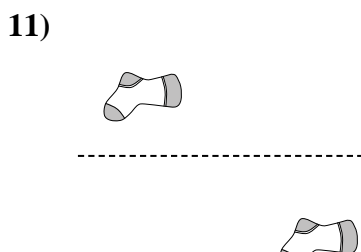
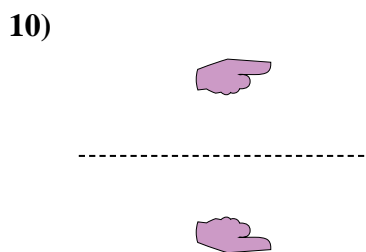
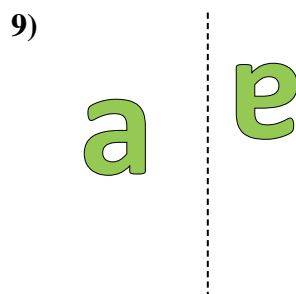
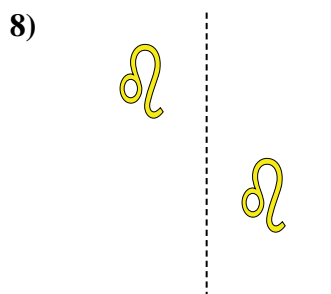
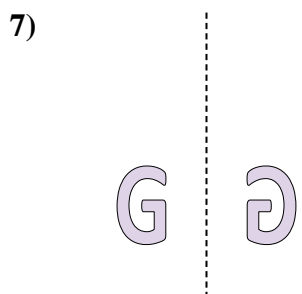
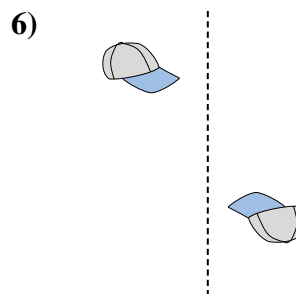
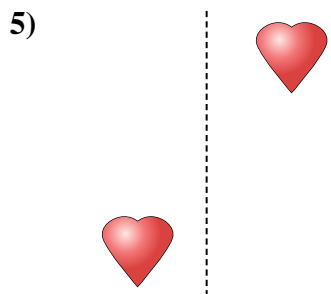
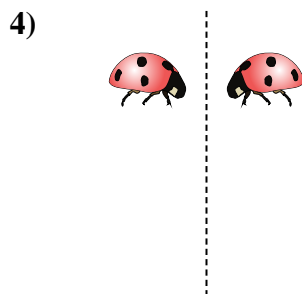
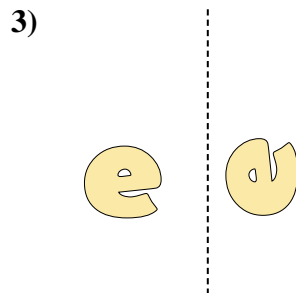
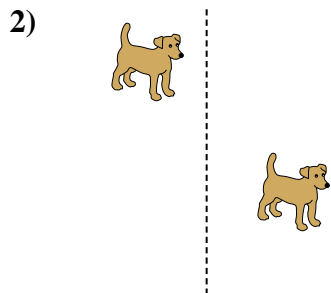
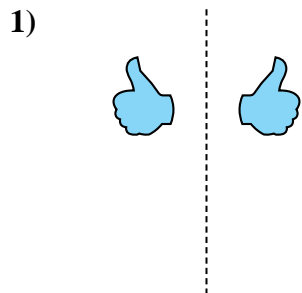
13. inversione

14. traslazione

15. rotazione



Indica se la forma è stata traslata (traslazione), ruotata (rotazione) o specchiata (inversione).


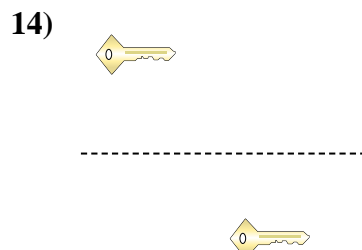
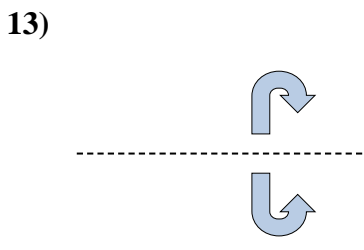
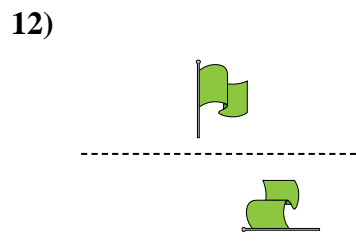
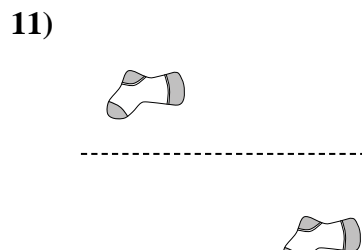
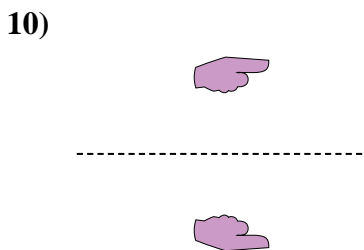
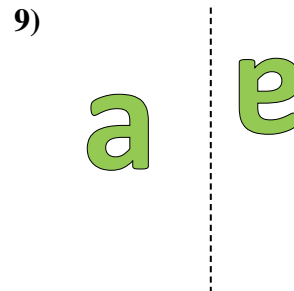
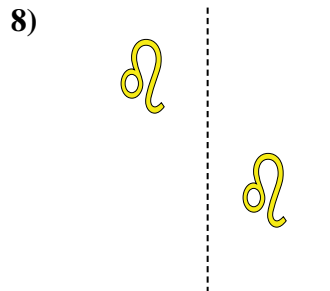
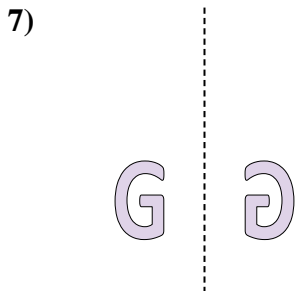
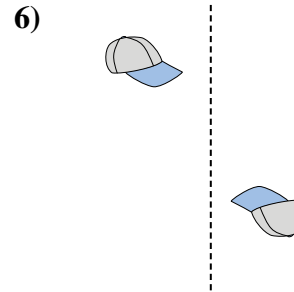
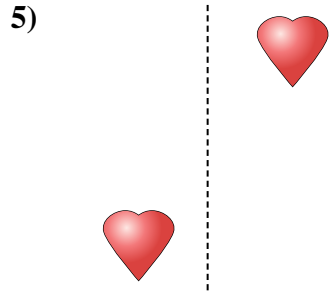
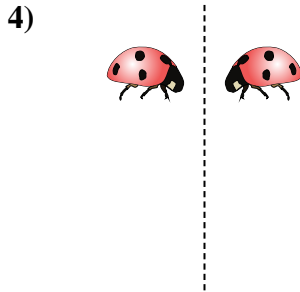
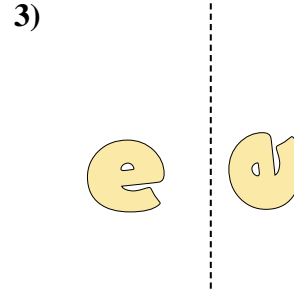
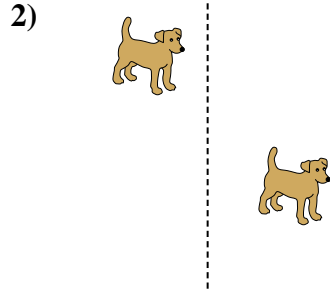
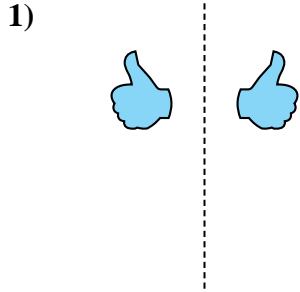


**Risposte**

1. \_\_\_\_\_
2. \_\_\_\_\_
3. \_\_\_\_\_
4. \_\_\_\_\_
5. \_\_\_\_\_
6. \_\_\_\_\_
7. \_\_\_\_\_
8. \_\_\_\_\_
9. \_\_\_\_\_
10. \_\_\_\_\_
11. \_\_\_\_\_
12. \_\_\_\_\_
13. \_\_\_\_\_
14. \_\_\_\_\_
15. \_\_\_\_\_



Indica se la forma è stata traslata (traslazione), ruotata (rotazione) o specchiata (inversione).



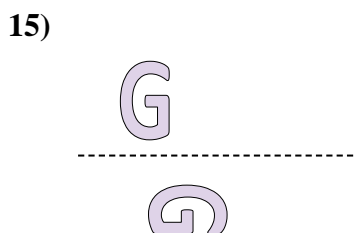
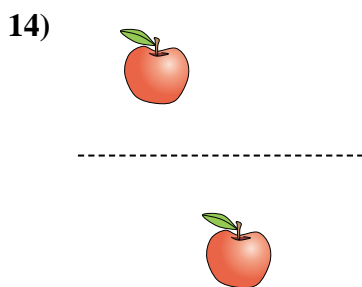
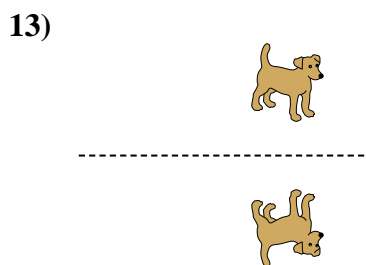
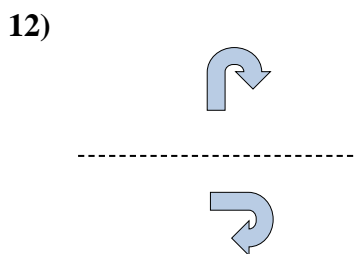
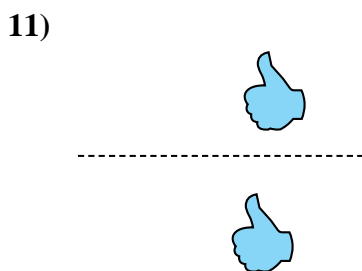
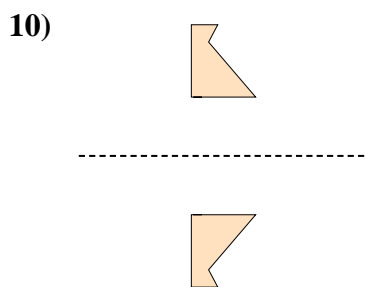

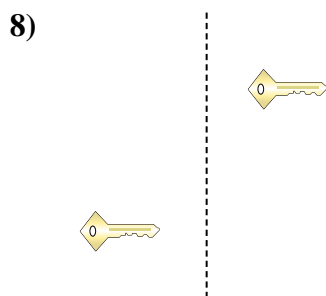
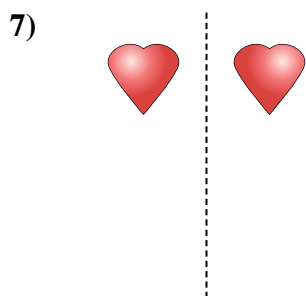
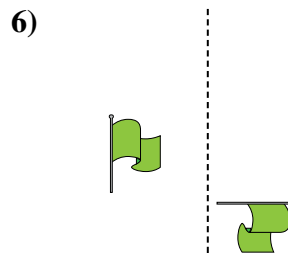
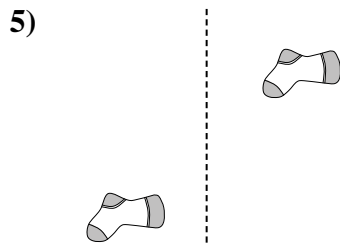
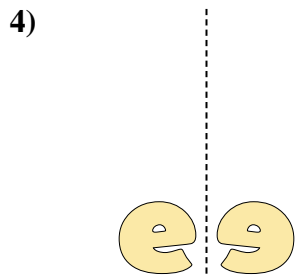
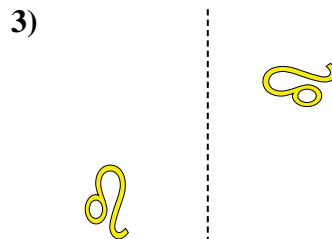
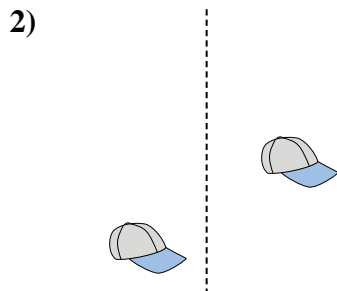
Risposte

1. inversione
2. traslazione
3. rotazione
4. inversione
5. traslazione
6. rotazione
7. inversione
8. traslazione
9. rotazione
10. inversione
11. traslazione
12. rotazione
13. inversione
14. traslazione
15. rotazione





Indica se la forma è stata traslata (traslazione), ruotata (rotazione) o specchiata (inversione).

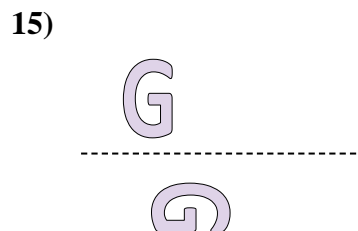
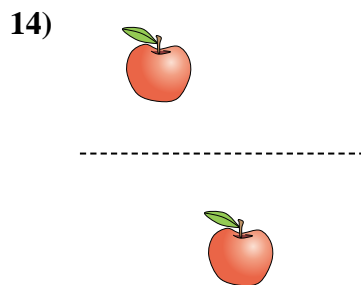
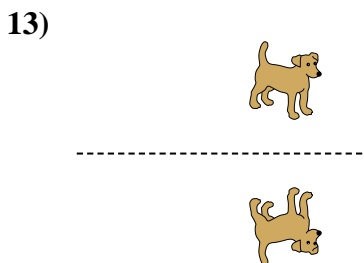
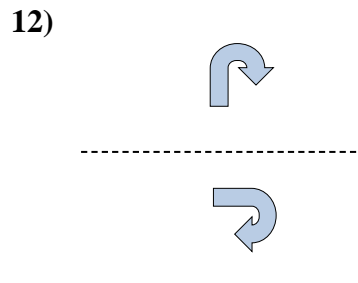
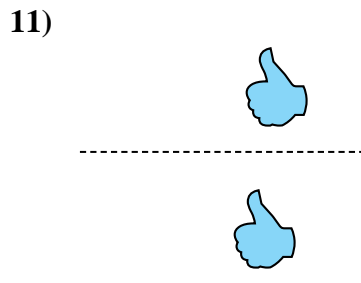
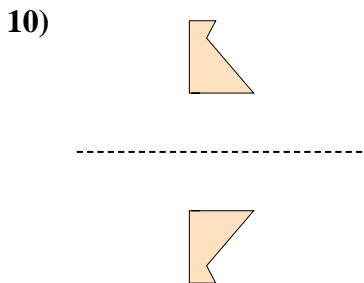

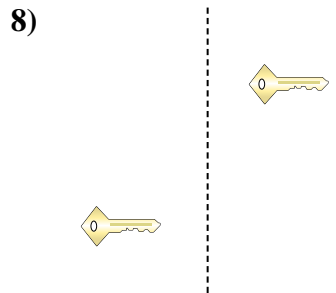
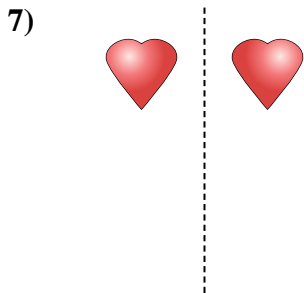
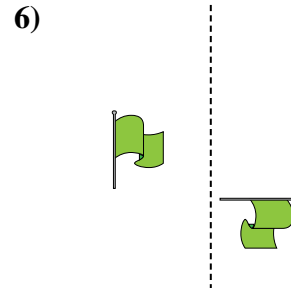
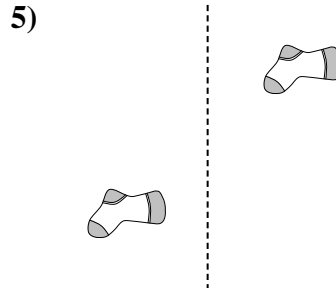
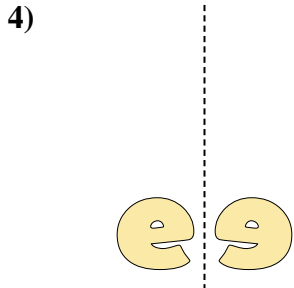

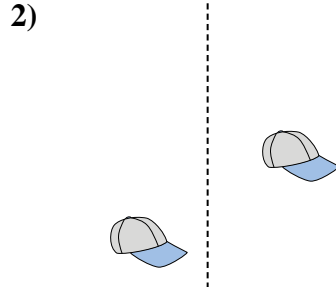


**Risposte**

1. \_\_\_\_\_
2. \_\_\_\_\_
3. \_\_\_\_\_
4. \_\_\_\_\_
5. \_\_\_\_\_
6. \_\_\_\_\_
7. \_\_\_\_\_
8. \_\_\_\_\_
9. \_\_\_\_\_
10. \_\_\_\_\_
11. \_\_\_\_\_
12. \_\_\_\_\_
13. \_\_\_\_\_
14. \_\_\_\_\_
15. \_\_\_\_\_



Indica se la forma è stata traslata (traslazione), ruotata (rotazione) o specchiata (inversione).



Risposte

1. inversione
2. traslazione
3. rotazione
4. inversione
5. traslazione
6. rotazione
7. inversione
8. traslazione
9. rotazione
10. inversione
11. traslazione
12. rotazione
13. inversione
14. traslazione
15. rotazione

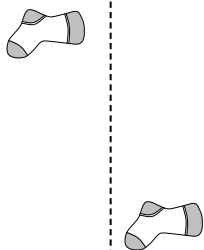


Indica se la forma è stata traslata (traslazione), ruotata (rotazione) o specchiata (inversione).

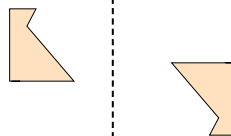
1)



2)



3)




1. \_\_\_\_\_

2. \_\_\_\_\_

3. \_\_\_\_\_

4. \_\_\_\_\_

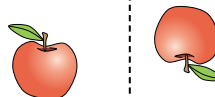
4)



5)



6)




5. \_\_\_\_\_

6. \_\_\_\_\_

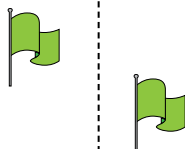
7. \_\_\_\_\_

8. \_\_\_\_\_

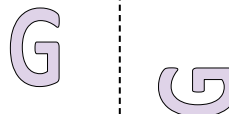
7)



8)



9)



9. \_\_\_\_\_

10. \_\_\_\_\_

11. \_\_\_\_\_

12. \_\_\_\_\_

10)



11)



12)



13. \_\_\_\_\_

14. \_\_\_\_\_

15. \_\_\_\_\_

13)



14)

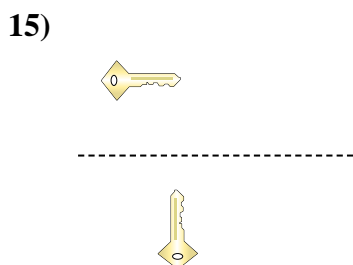
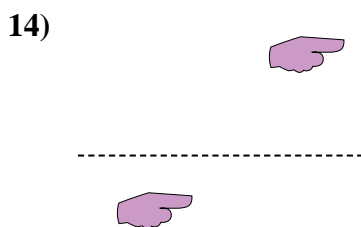
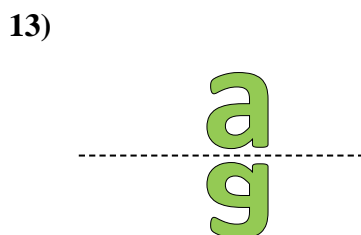
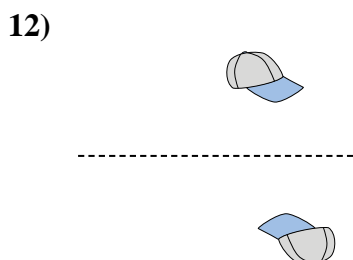

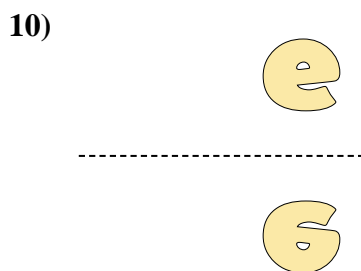
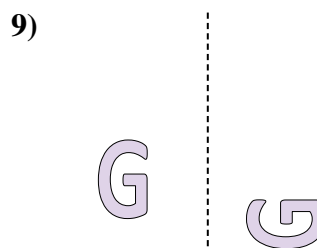
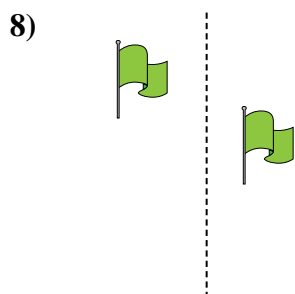
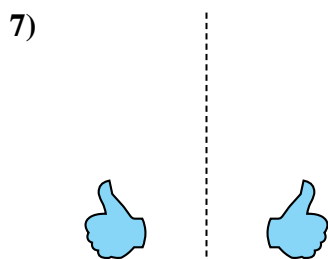
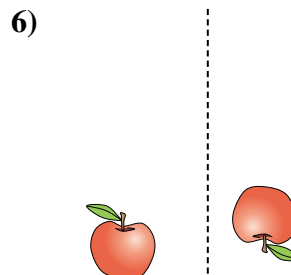
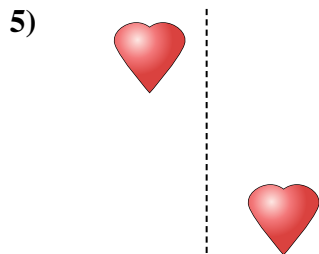
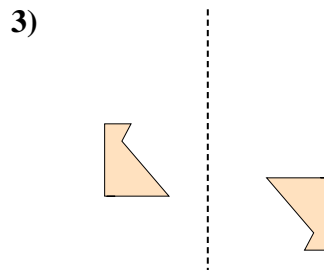
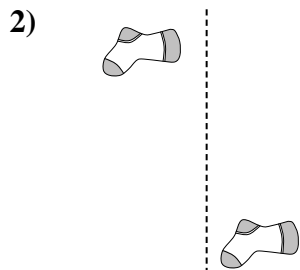



15)





Indica se la forma è stata traslata (traslazione), ruotata (rotazione) o specchiata (inversione).



Risposte

1. inversione
2. traslazione
3. rotazione
4. inversione
5. traslazione
6. rotazione
7. inversione
8. traslazione
9. rotazione
10. inversione
11. traslazione
12. rotazione
13. inversione
14. traslazione
15. rotazione