


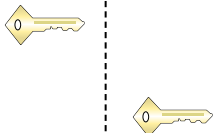


Indica se la forma è stata traslata (traslazione), ruotata (rotazione) o specchiata (inversione).

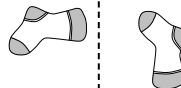
1)



2)



3)



1. \_\_\_\_\_

2. \_\_\_\_\_

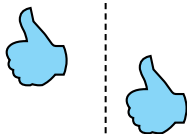
3. \_\_\_\_\_

4. \_\_\_\_\_


4)



5)



6)




5. \_\_\_\_\_

6. \_\_\_\_\_

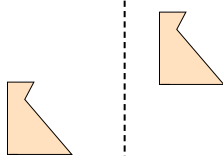
7. \_\_\_\_\_

8. \_\_\_\_\_

7)



8)



9)



9. \_\_\_\_\_

10. \_\_\_\_\_

11. \_\_\_\_\_

12. \_\_\_\_\_

10)



11)



12)



13. \_\_\_\_\_

14. \_\_\_\_\_

15. \_\_\_\_\_



13)



14)



15)



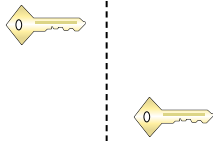


Indica se la forma è stata traslata (traslazione), ruotata (rotazione) o specchiata (inversione).

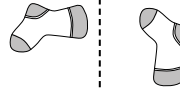
1)



2)



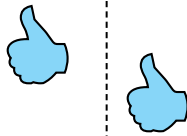
3)




4)



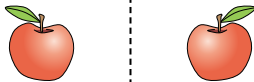
5)



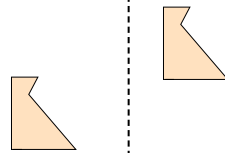
6)



7)



8)



9)



10)



11)



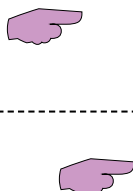
12)



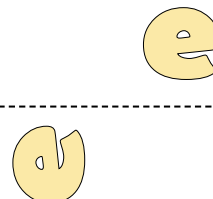
13)



14)



15)



Risposte

1. inversione
2. traslazione
3. rotazione
4. inversione
5. traslazione
6. rotazione
7. inversione
8. traslazione
9. rotazione
10. inversione
11. traslazione
12. rotazione
13. inversione
14. traslazione
15. rotazione