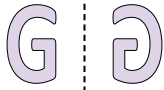




Indica se la forma è stata traslata (traslazione), ruotata (rotazione) o specchiata (inversione).

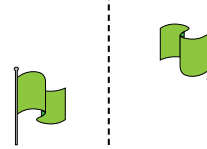
1)



2)




3)



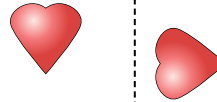
4)




5)



6)



7)



8)



9)



10)



11)



12)



13)



14)



15)



Risposte

1. _____

2. _____

3. _____

4. _____

5. _____

6. _____

7. _____

8. _____

9. _____

10. _____

11. _____

12. _____




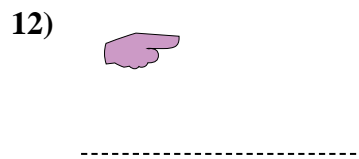
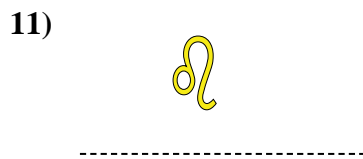
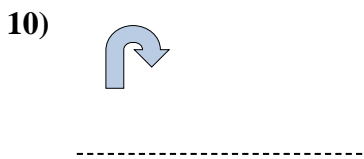
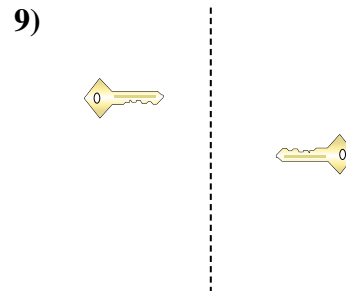
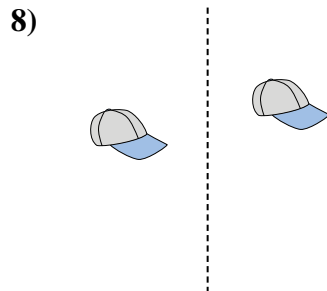
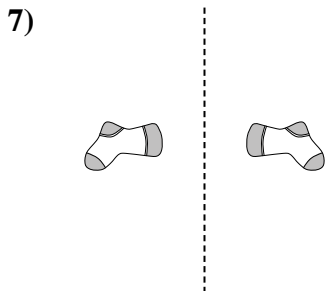
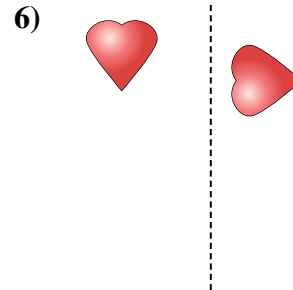
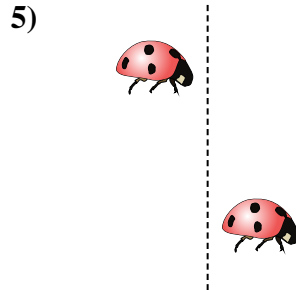
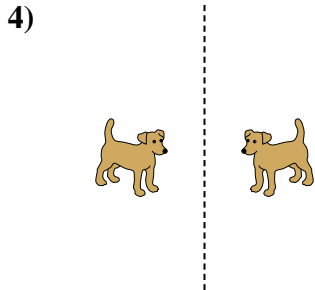
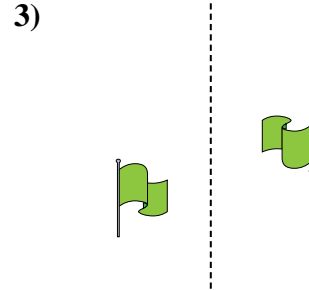
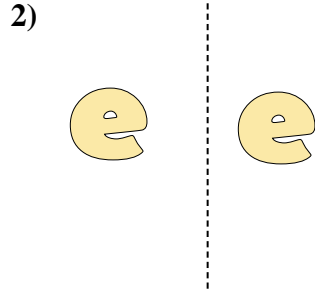
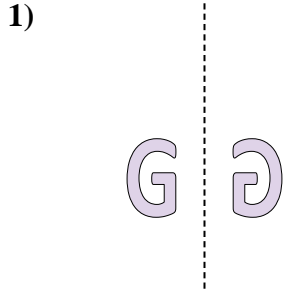
13. _____

14. _____

15. _____



Indica se la forma è stata traslata (traslazione), ruotata (rotazione) o specchiata (inversione).



Risposte

1. inversione

2. traslazione

3. rotazione

4. inversione

5. traslazione

6. rotazione

7. inversione

8. traslazione

9. rotazione

10. inversione

11. traslazione

12. rotazione

13. inversione

14. traslazione

15. rotazione