




Indica se la forma è stata traslata (traslazione), ruotata (rotazione) o specchiata (inversione).

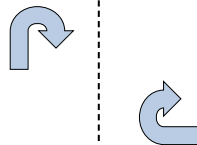
1)



2)



3)




4)



5)



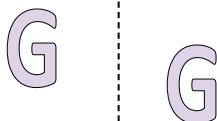
6)



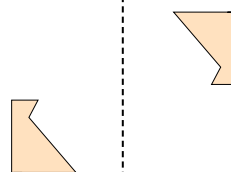
7)



8)



9)



10)



11)



12)



13)



14)



15)



Risposte

1. _____

2. _____

3. _____

4. _____

5. _____

6. _____

7. _____

8. _____

9. _____

10. _____

11. _____

12. _____

13. _____


14. _____

15. _____



Indica se la forma è stata traslata (traslazione), ruotata (rotazione) o specchiata (inversione).

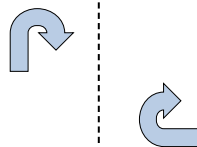
1)



2)



3)




4)




5)



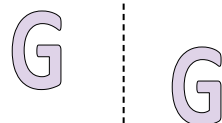
6)



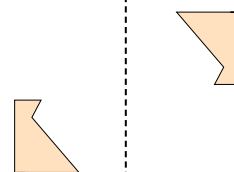
7)



8)



9)



10)



11)



12)



13)



14)



15)



Risposte

1. **inversione**

2. **traslazione**

3. **rotazione**

4. **inversione**

5. **traslazione**

6. **rotazione**

7. **inversione**

8. **traslazione**

9. **rotazione**

10. **inversione**

11. **traslazione**

12. **rotazione**

13. **inversione**

14. **traslazione**

15. **rotazione**