

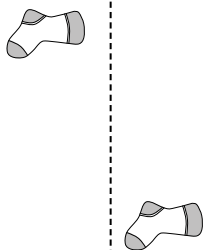


Indica se la forma è stata traslata (traslazione), ruotata (rotazione) o specchiata (inversione).

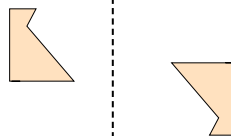
1)



2)



3)




1. \_\_\_\_\_

2. \_\_\_\_\_

3. \_\_\_\_\_

4. \_\_\_\_\_

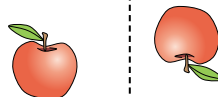
4)



5)



6)




5. \_\_\_\_\_

6. \_\_\_\_\_

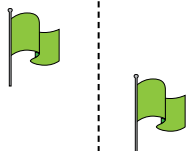
7. \_\_\_\_\_

8. \_\_\_\_\_

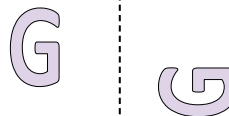
7)



8)



9)



9. \_\_\_\_\_

10. \_\_\_\_\_

11. \_\_\_\_\_

12. \_\_\_\_\_

10)



11)



12)



13. \_\_\_\_\_

14. \_\_\_\_\_

15. \_\_\_\_\_



13)



14)



15)



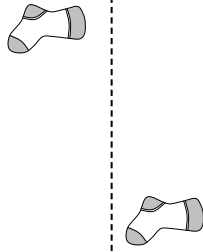


Indica se la forma è stata traslata (traslazione), ruotata (rotazione) o specchiata (inversione).

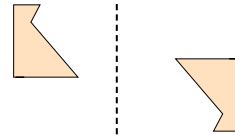
1)



2)



3)



1. inversione

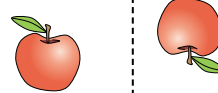
4)



5)



6)



2. traslazione

3. rotazione

4. inversione

5. traslazione

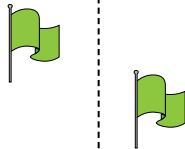
6. rotazione

7. inversione

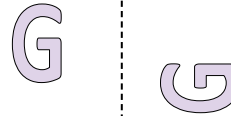
7)



8)



9)



8. traslazione

9. rotazione

10. inversione

11. traslazione

12. rotazione

10)



11)



12)



13. inversione

14. traslazione

15. rotazione

13)



14)



15)

