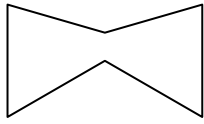




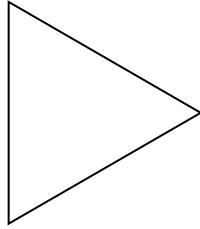
Determina se le forme rappresentate sono regolari o irregolari.

Risposte

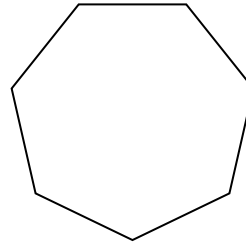
1)



2)



3)



1. _____

2. _____

3. _____

4. _____

5. _____

6. _____

7. _____

8. _____

9. _____

10. _____

11. _____


12. _____

13. _____

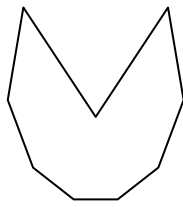
14. _____

15. _____

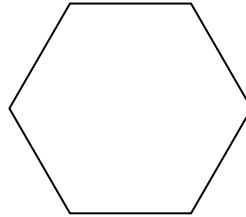
4)



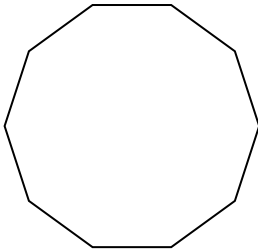
5)



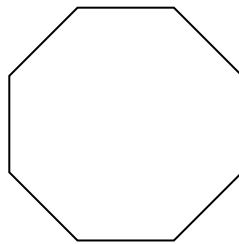
6)




7)




8)



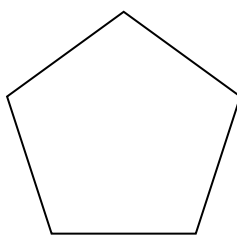
9)




10)




11)



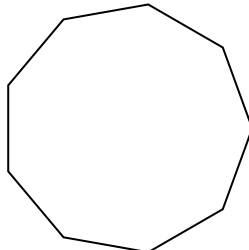
12)



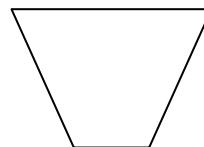
13)



14)



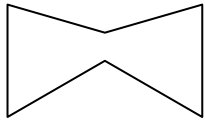
15)



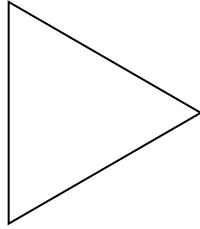


Determina se le forme rappresentate sono regolari o irregolari.

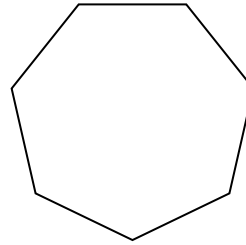
1)



2)



3)



Risposte

1. irregolari

2. regolari

3. regolari

4. irregolari

5. irregolari

6. regolari

7. regolari

8. regolari

9. irregolari

10. irregolari

11. regolari


12. irregolari

13. irregolari

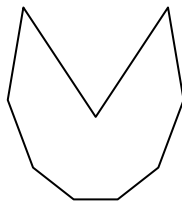
14. regolari

15. irregolari

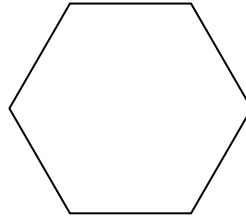
4)



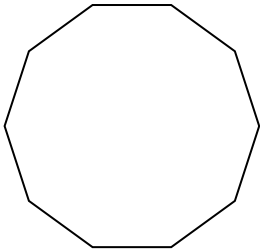
5)



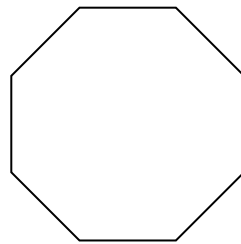
6)




7)




8)



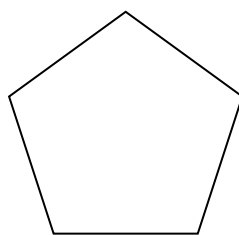
9)




10)




11)



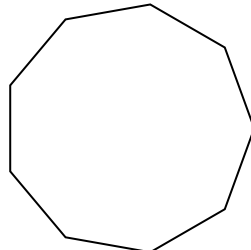
12)



13)



14)



15)

