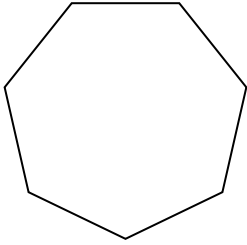





Determina se le forme rappresentate sono regolari o irregolari.

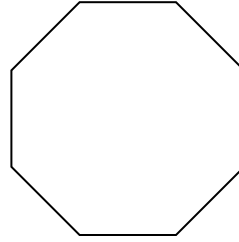
1)



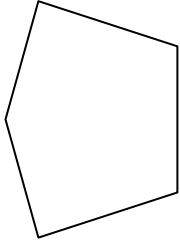
2)



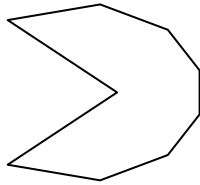
3)



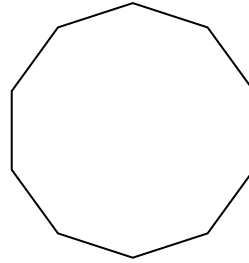
4)




5)



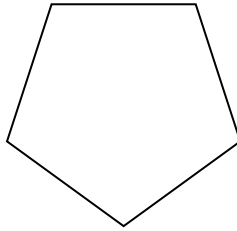
6)



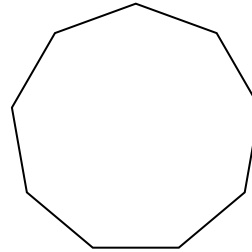
7)




8)



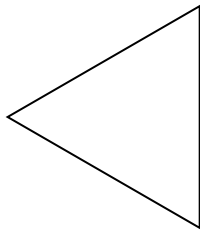
9)



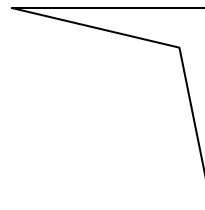
10)




11)



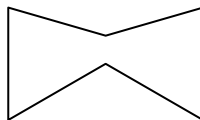
12)



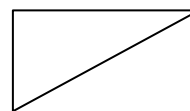
13)



14)



15)



Risposte

1. \_\_\_\_\_

2. \_\_\_\_\_

3. \_\_\_\_\_

4. \_\_\_\_\_

5. \_\_\_\_\_

6. \_\_\_\_\_

7. \_\_\_\_\_

8. \_\_\_\_\_

9. \_\_\_\_\_

10. \_\_\_\_\_

11. \_\_\_\_\_

12. \_\_\_\_\_

13. \_\_\_\_\_

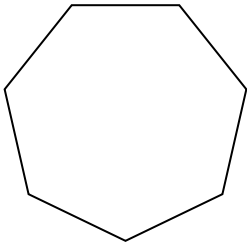
14. \_\_\_\_\_

15. \_\_\_\_\_




Determina se le forme rappresentate sono regolari o irregolari.

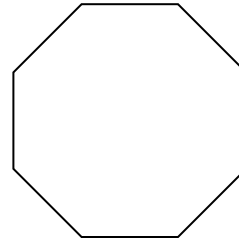
1)



2)



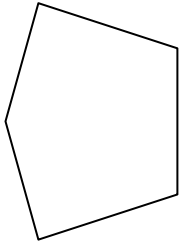
3)



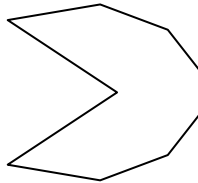
Risposte

1. regolari

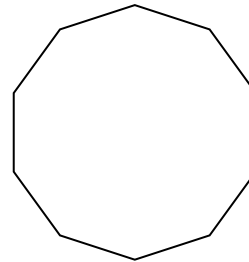
4)



5)



6)



2. regolari

3. regolari


4. irregolari

5. irregolari

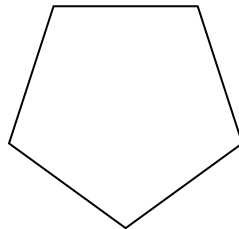
6. regolari

7. irregolari

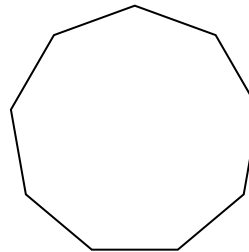
7)



8)



9)




8. regolari

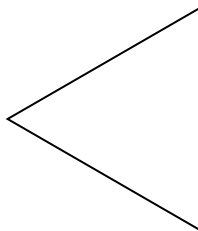
9. regolari

10. irregolari

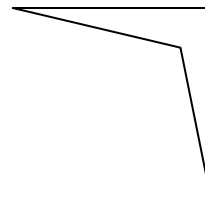
10)



11)



12)




12. irregolari

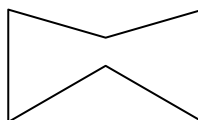
13. irregolari

14. irregolari

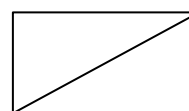
13)



14)



15)

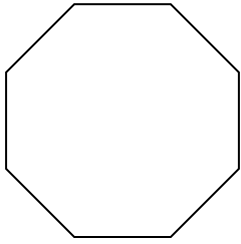


15. irregolari

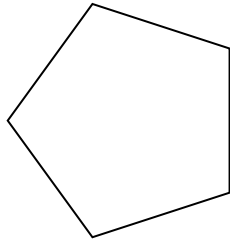


Determina se le forme rappresentate sono regolari o irregolari.

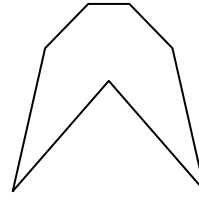
1)




2)



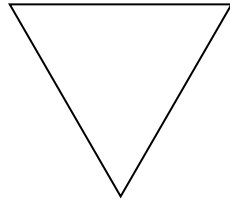
3)




4)




5)



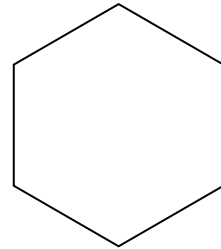
6)



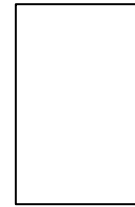
7)



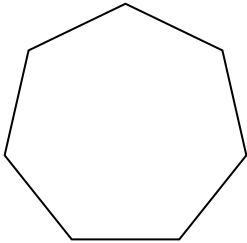
8)



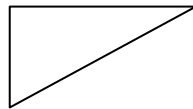
9)



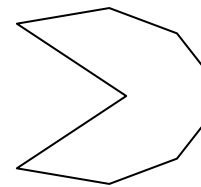
10)



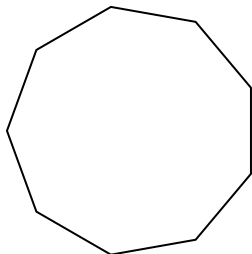
11)



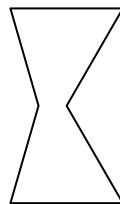
12)



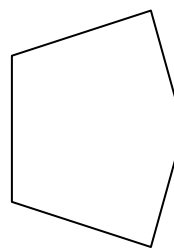
13)



14)



15)



Risposte

1. \_\_\_\_\_

2. \_\_\_\_\_

3. \_\_\_\_\_

4. \_\_\_\_\_

5. \_\_\_\_\_

6. \_\_\_\_\_

7. \_\_\_\_\_

8. \_\_\_\_\_

9. \_\_\_\_\_

10. \_\_\_\_\_

11. \_\_\_\_\_

12. \_\_\_\_\_

13. \_\_\_\_\_

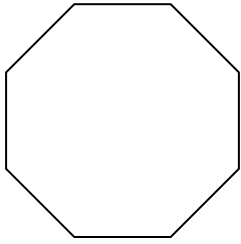
14. \_\_\_\_\_

15. \_\_\_\_\_

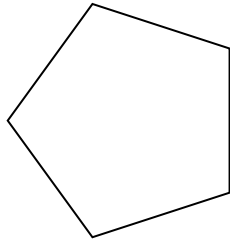


Determina se le forme rappresentate sono regolari o irregolari.

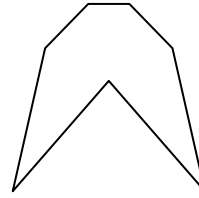
1)




2)



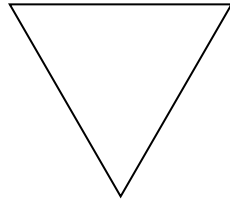
3)




4)




5)



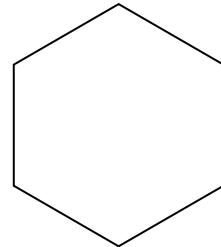
6)



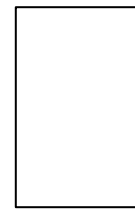
7)



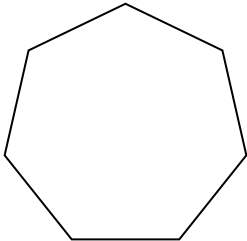
8)



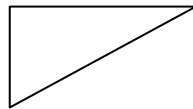
9)



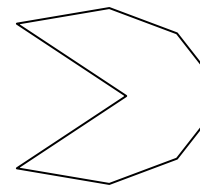
10)



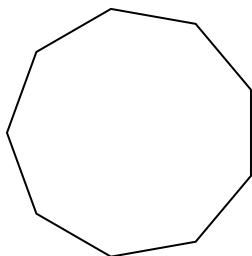
11)



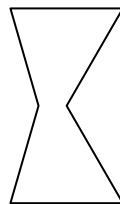
12)



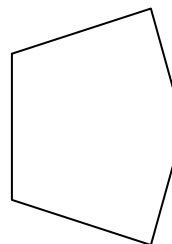
13)



14)



15)



**Risposte**

1. regolari

2. regolari

3. irregolari

4. irregolari

5. regolari

6. regolari

7. irregolari

8. regolari

9. irregolari

10. regolari

11. irregolari

12. irregolari

13. regolari

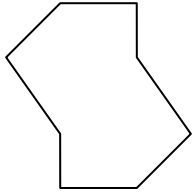
14. irregolari

15. irregolari

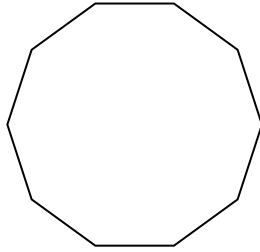


Determina se le forme rappresentate sono regolari o irregolari.

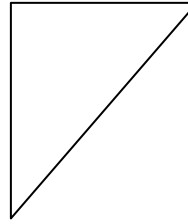
1)



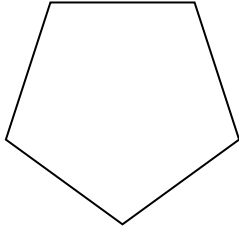
2)




3)



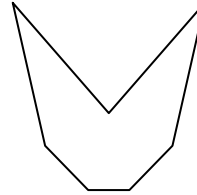
4)



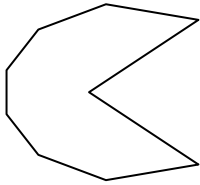
5)



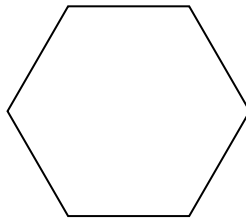
6)



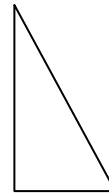
7)



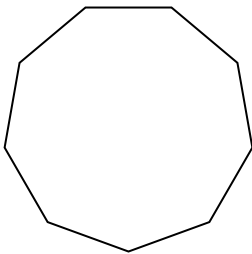
8)




9)




10)



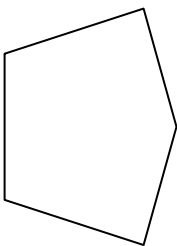
11)



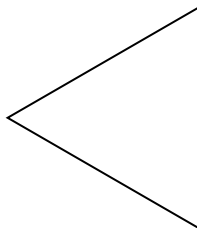
12)



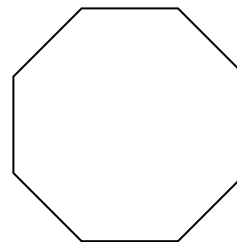
13)



14)



15)



Risposte

1. \_\_\_\_\_

2. \_\_\_\_\_

3. \_\_\_\_\_

4. \_\_\_\_\_

5. \_\_\_\_\_

6. \_\_\_\_\_

7. \_\_\_\_\_

8. \_\_\_\_\_

9. \_\_\_\_\_

10. \_\_\_\_\_

11. \_\_\_\_\_

12. \_\_\_\_\_

13. \_\_\_\_\_

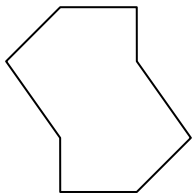
14. \_\_\_\_\_

15. \_\_\_\_\_

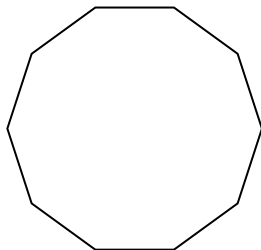


Determina se le forme rappresentate sono regolari o irregolari.

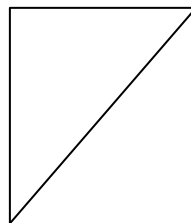
1)



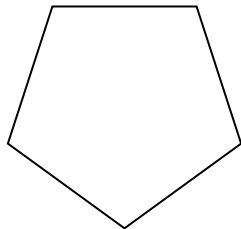
2)




3)



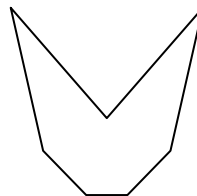
4)



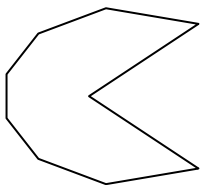
5)



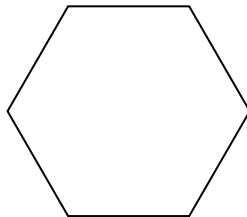
6)



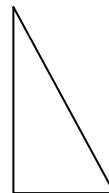
7)



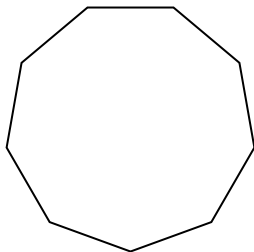
8)




9)




10)



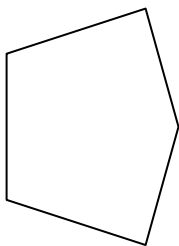
11)



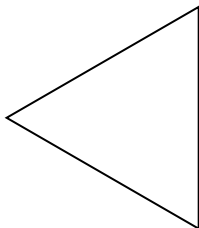
12)



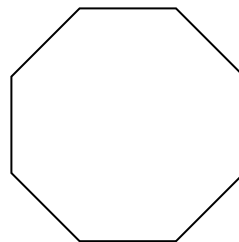
13)



14)



15)



Risposte

1. irregolari

2. regolari

3. irregolari

4. regolari

5. irregolari

6. irregolari

7. irregolari

8. regolari

9. irregolari

10. regolari

11. irregolari

12. regolari

13. irregolari

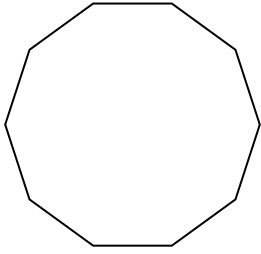
14. regolari

15. regolari

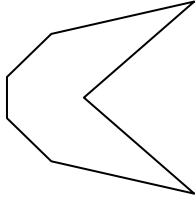


Determina se le forme rappresentate sono regolari o irregolari.


1)




2)




3)



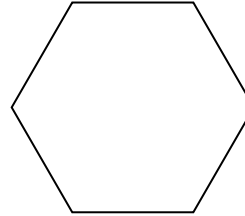
4)




5)



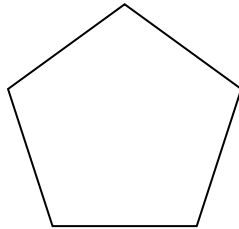
6)



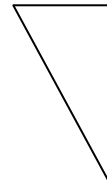
7)




8)



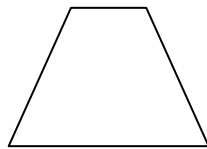
9)



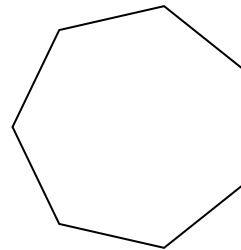
10)



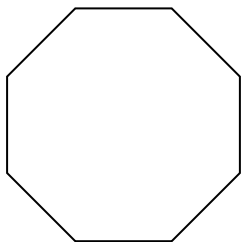
11)



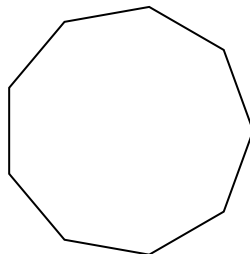
12)



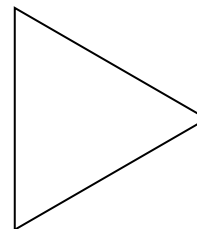
13)



14)



15)



**Risposte**

1. \_\_\_\_\_

2. \_\_\_\_\_

3. \_\_\_\_\_

4. \_\_\_\_\_

5. \_\_\_\_\_

6. \_\_\_\_\_

7. \_\_\_\_\_

8. \_\_\_\_\_

9. \_\_\_\_\_

10. \_\_\_\_\_

11. \_\_\_\_\_

12. \_\_\_\_\_

13. \_\_\_\_\_

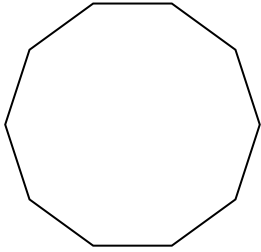
14. \_\_\_\_\_

15. \_\_\_\_\_

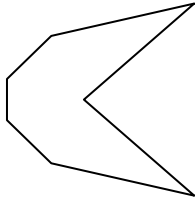


Determina se le forme rappresentate sono regolari o irregolari.


1)




2)




3)



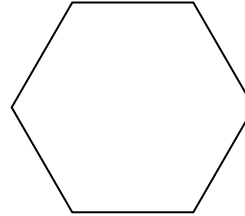
4)




5)



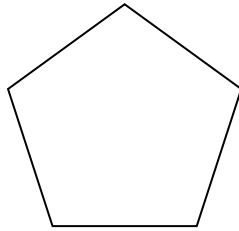
6)



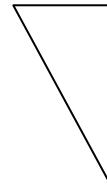
7)




8)



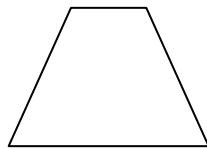
9)



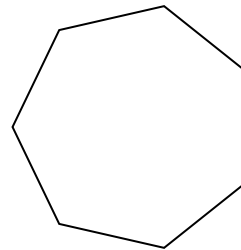
10)



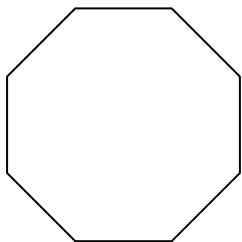
11)



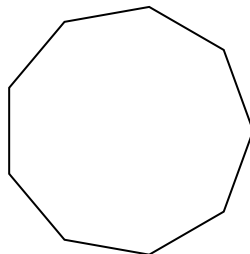
12)



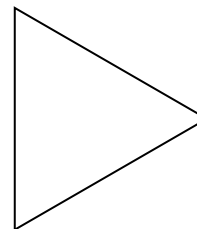
13)



14)



15)



**Risposte**

1. regolari

2. irregolari

3. irregolari

4. regolari

5. irregolari

6. regolari

7. irregolari

8. regolari

9. irregolari

10. irregolari

11. irregolari

12. regolari

13. regolari

14. regolari

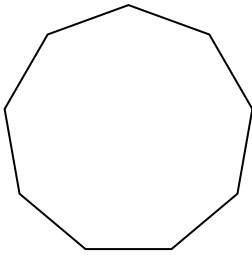
15. regolari



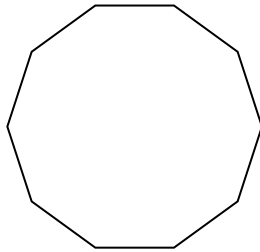


Determina se le forme rappresentate sono regolari o irregolari.


1)



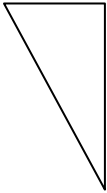
2)




3)



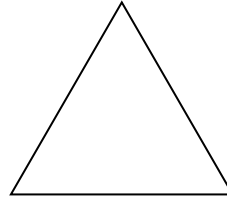
4)



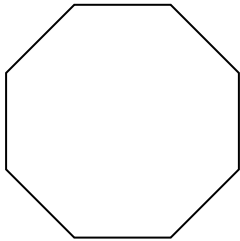
5)




6)



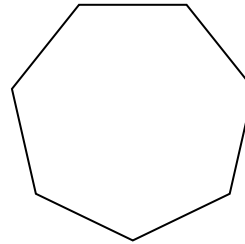
7)



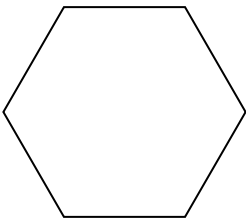
8)



9)



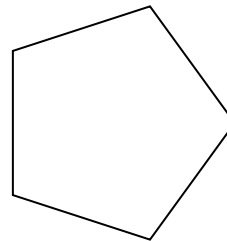
10)




11)




12)



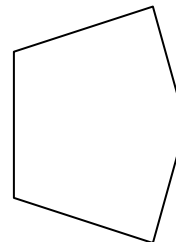
13)



14)



15)



Risposte

1. \_\_\_\_\_

2. \_\_\_\_\_

3. \_\_\_\_\_

4. \_\_\_\_\_

5. \_\_\_\_\_

6. \_\_\_\_\_

7. \_\_\_\_\_

8. \_\_\_\_\_

9. \_\_\_\_\_

10. \_\_\_\_\_

11. \_\_\_\_\_

12. \_\_\_\_\_

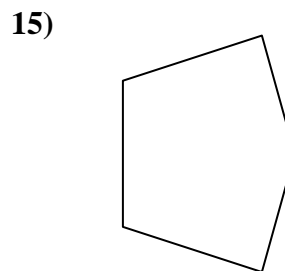

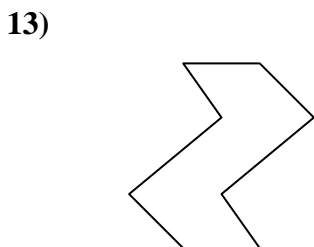
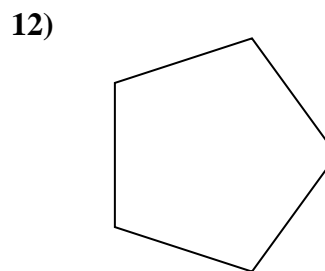
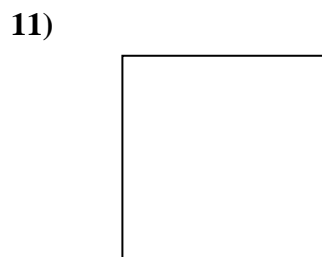
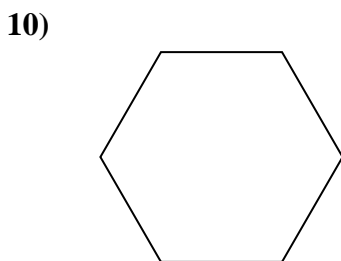
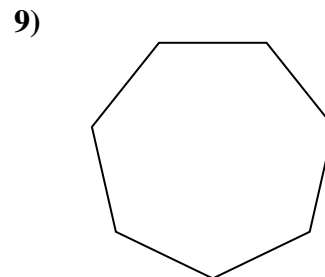

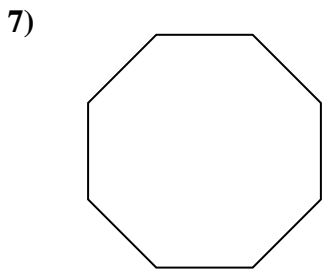
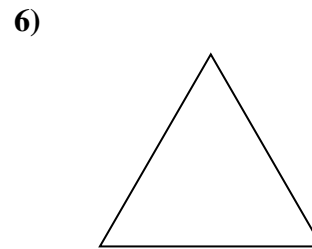
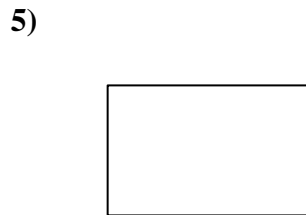
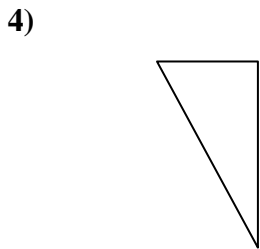

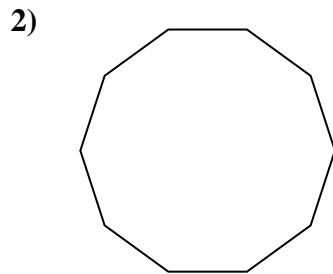
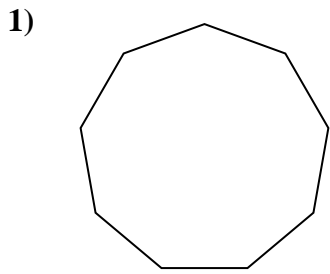
13. \_\_\_\_\_

14. \_\_\_\_\_

15. \_\_\_\_\_



Determina se le forme rappresentate sono regolari o irregolari.



Risposte

1. regolari

2. regolari

3. irregolari

4. irregolari

5. irregolari

6. regolari

7. regolari

8. irregolari

9. regolari

10. regolari

11. regolari

12. regolari

13. irregolari

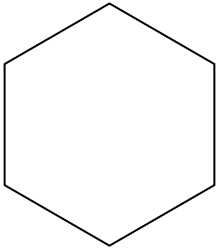
14. irregolari

15. irregolari




Determina se le forme rappresentate sono regolari o irregolari.

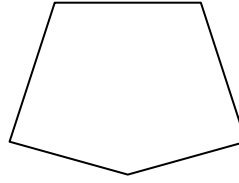
1)



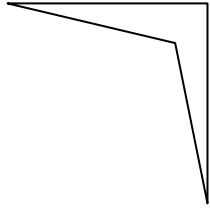
2)



3)




4)



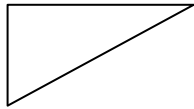
5)



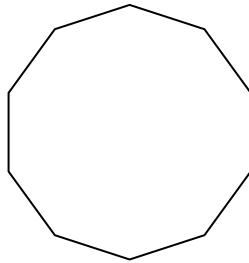
6)



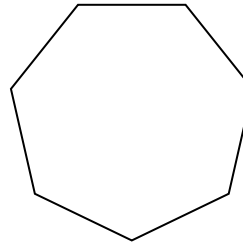
7)



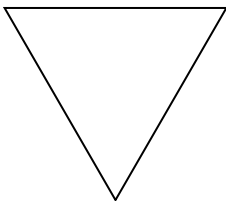
8)



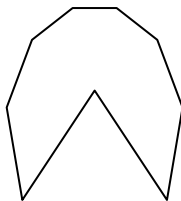
9)



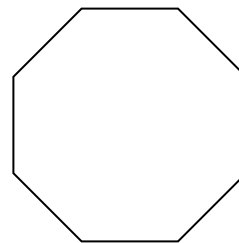
10)




11)



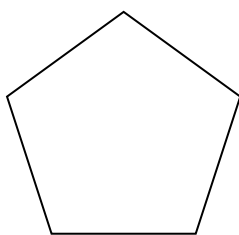
12)



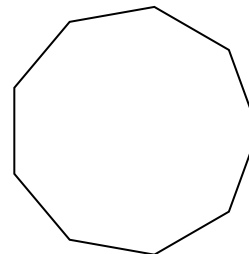
13)



14)



15)



Risposte

1. \_\_\_\_\_

2. \_\_\_\_\_

3. \_\_\_\_\_

4. \_\_\_\_\_

5. \_\_\_\_\_

6. \_\_\_\_\_

7. \_\_\_\_\_

8. \_\_\_\_\_

9. \_\_\_\_\_

10. \_\_\_\_\_

11. \_\_\_\_\_

12. \_\_\_\_\_

13. \_\_\_\_\_

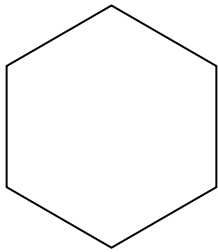
14. \_\_\_\_\_

15. \_\_\_\_\_




Determina se le forme rappresentate sono regolari o irregolari.

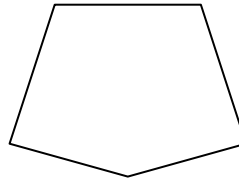
1)



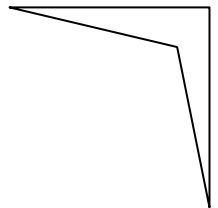
2)




3)



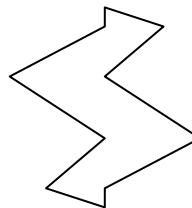
4)



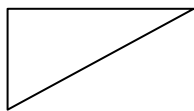
5)



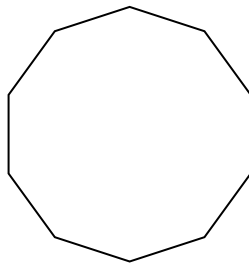
6)



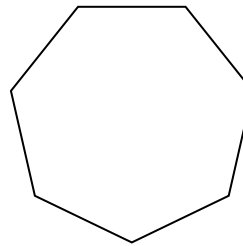
7)



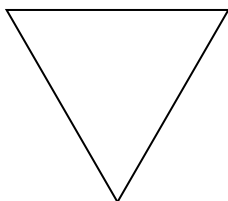
8)



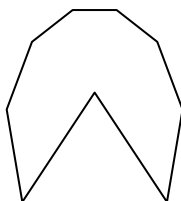
9)



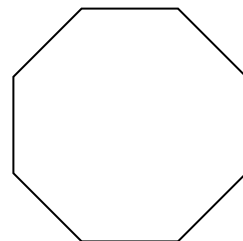
10)




11)



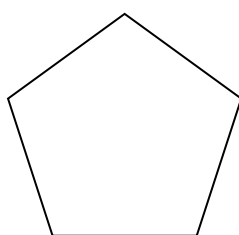
12)



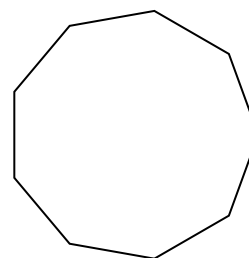
13)



14)



15)



Risposte

1. regolari

2. irregolari

3. irregolari

4. irregolari

5. regolari

6. irregolari

7. irregolari

8. regolari

9. regolari

10. regolari

11. irregolari

12. regolari

13. irregolari

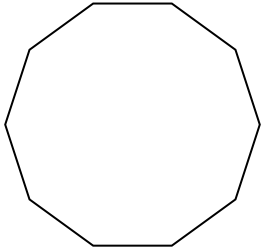
14. regolari

15. regolari

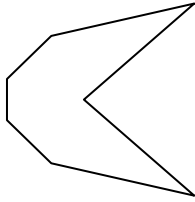


Determina se le forme rappresentate sono regolari o irregolari.

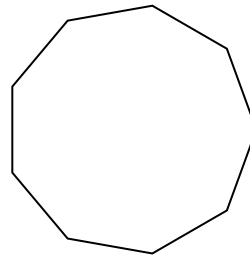
1)




2)



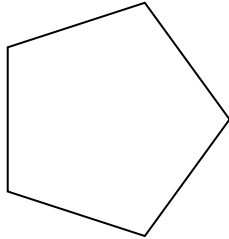
3)



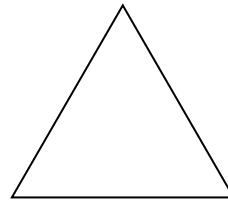
4)




5)




6)



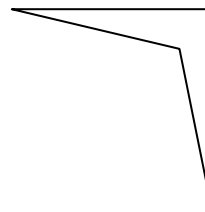
7)



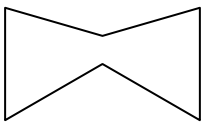
8)



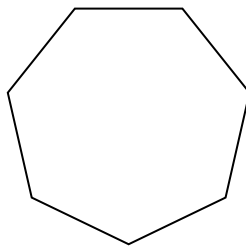
9)




10)




11)



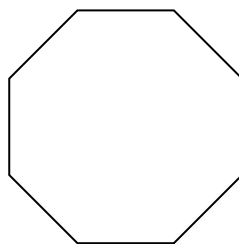
12)



13)



14)



15)



Risposte

1. \_\_\_\_\_

2. \_\_\_\_\_

3. \_\_\_\_\_

4. \_\_\_\_\_

5. \_\_\_\_\_

6. \_\_\_\_\_

7. \_\_\_\_\_

8. \_\_\_\_\_

9. \_\_\_\_\_

10. \_\_\_\_\_

11. \_\_\_\_\_

12. \_\_\_\_\_

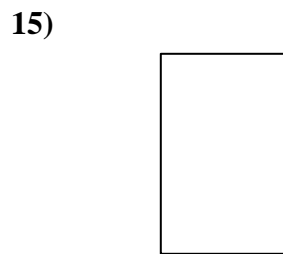
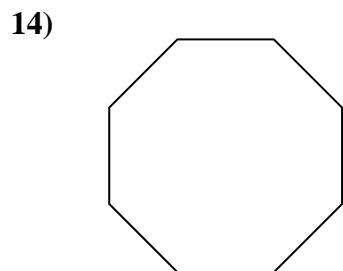
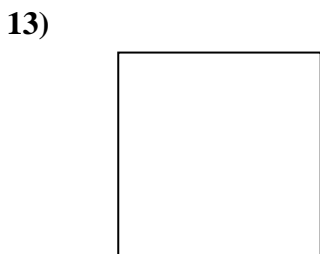
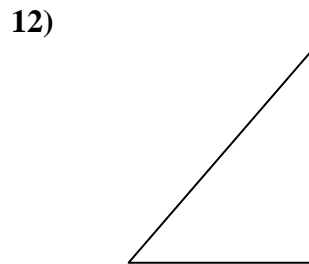
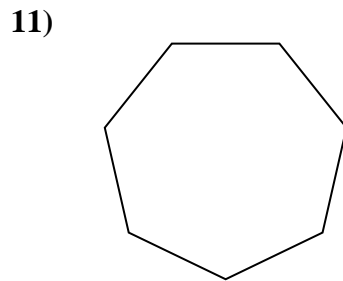
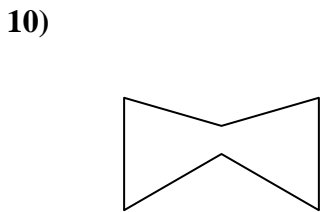
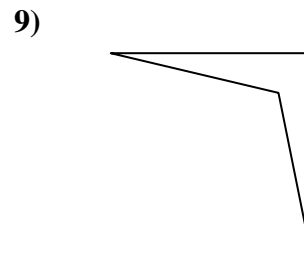

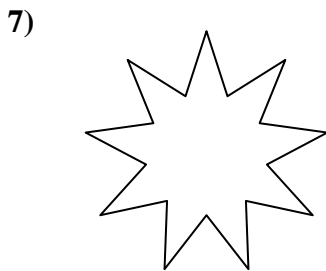
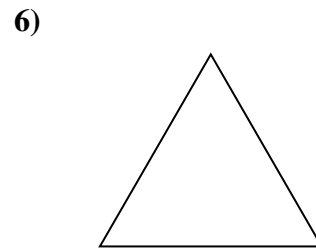
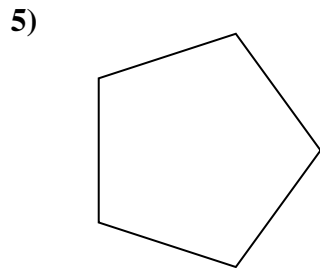

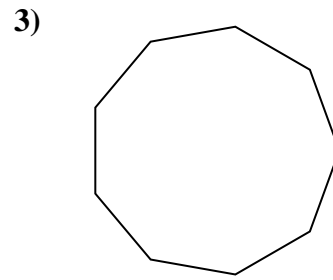
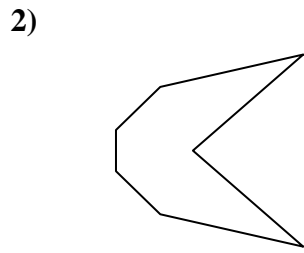
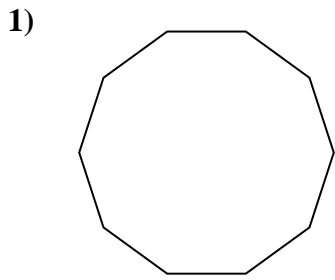
13. \_\_\_\_\_

14. \_\_\_\_\_

15. \_\_\_\_\_



Determina se le forme rappresentate sono regolari o irregolari.



Risposte

1. regolari

2. irregolari

3. regolari

4. irregolari

5. regolari

6. regolari

7. irregolari

8. irregolari

9. irregolari

10. irregolari

11. regolari

12. irregolari

13. regolari

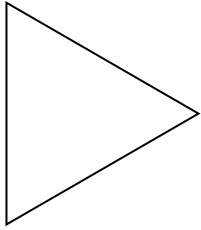
14. regolari

15. irregolari




Determina se le forme rappresentate sono regolari o irregolari.


1)



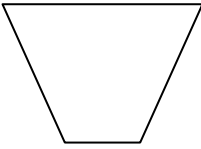
2)




3)




4)



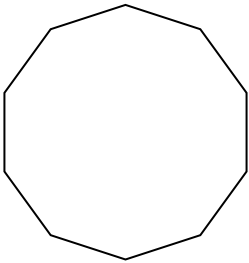
5)



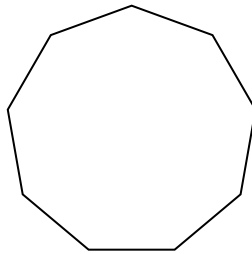
6)



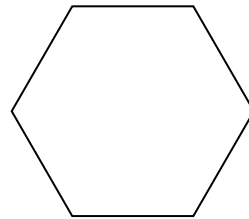
7)



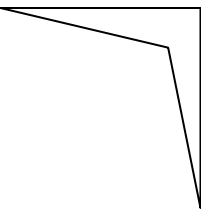
8)



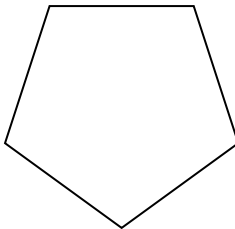
9)




10)




11)



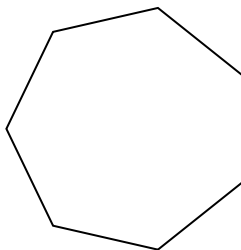
12)



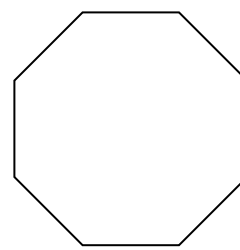
13)



14)



15)



**Risposte**

1. \_\_\_\_\_

2. \_\_\_\_\_

3. \_\_\_\_\_

4. \_\_\_\_\_

5. \_\_\_\_\_

6. \_\_\_\_\_

7. \_\_\_\_\_

8. \_\_\_\_\_

9. \_\_\_\_\_

10. \_\_\_\_\_

11. \_\_\_\_\_

12. \_\_\_\_\_

13. \_\_\_\_\_

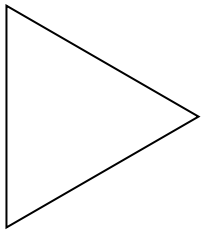
14. \_\_\_\_\_

15. \_\_\_\_\_




Determina se le forme rappresentate sono regolari o irregolari.


1)



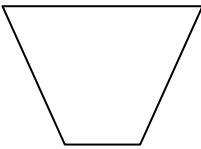
2)




3)




4)



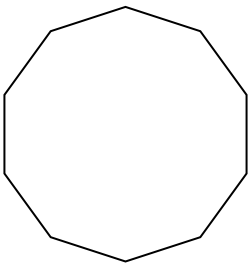
5)



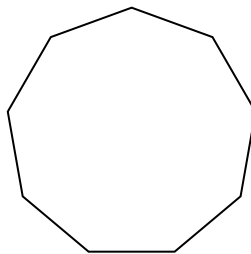
6)



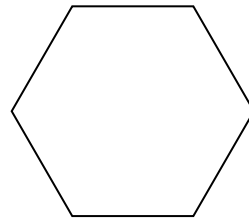
7)



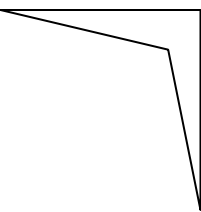
8)



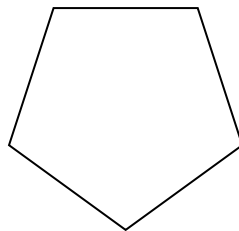
9)




10)




11)



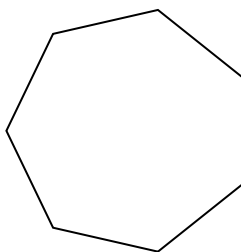
12)



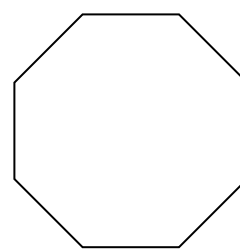
13)



14)



15)



Risposte

1. regolari

2. irregolari

3. irregolari

4. irregolari

5. irregolari

6. irregolari

7. regolari

8. regolari

9. regolari

10. irregolari

11. regolari

12. regolari

13. irregolari

14. regolari

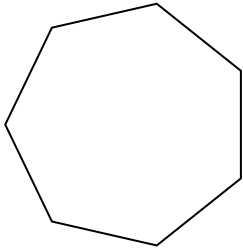
15. regolari



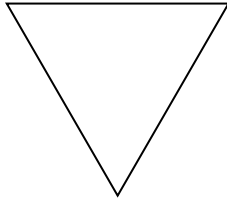


Determina se le forme rappresentate sono regolari o irregolari.

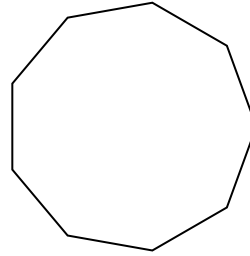
1)




2)



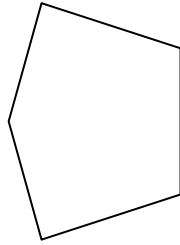
3)




4)



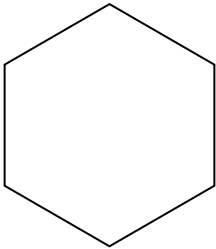
5)




6)



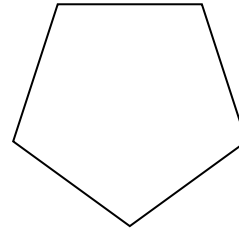
7)



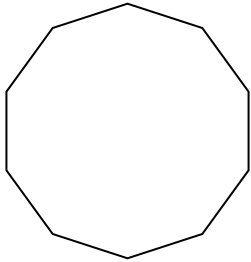
8)



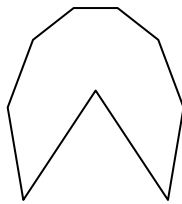
9)



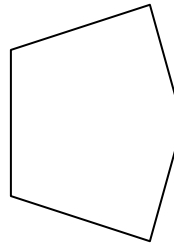
10)




11)



12)




13)



14)



15)



**Risposte**

1. \_\_\_\_\_

2. \_\_\_\_\_

3. \_\_\_\_\_

4. \_\_\_\_\_

5. \_\_\_\_\_

6. \_\_\_\_\_

7. \_\_\_\_\_

8. \_\_\_\_\_

9. \_\_\_\_\_

10. \_\_\_\_\_

11. \_\_\_\_\_

12. \_\_\_\_\_

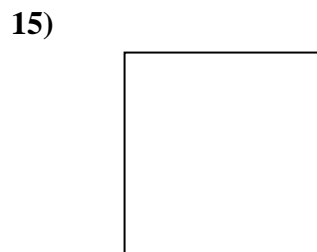
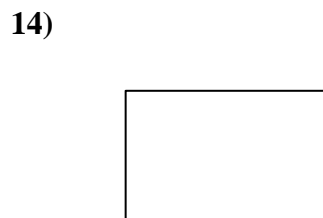
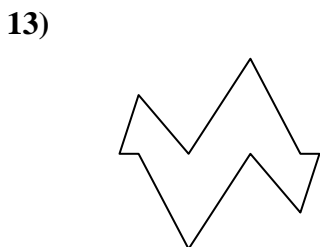
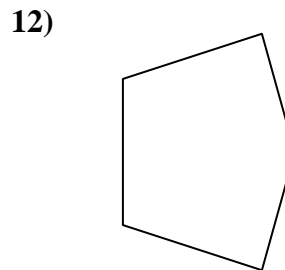
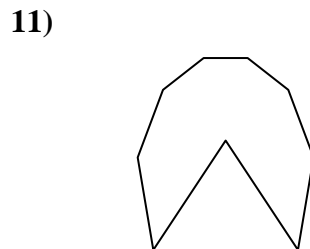
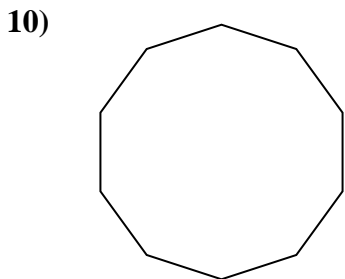
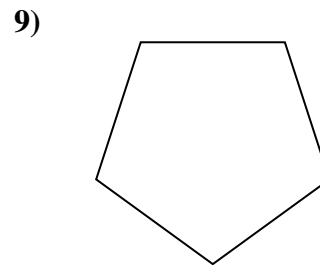
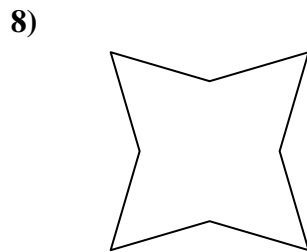
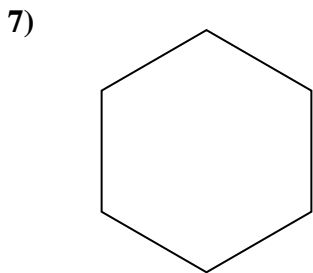

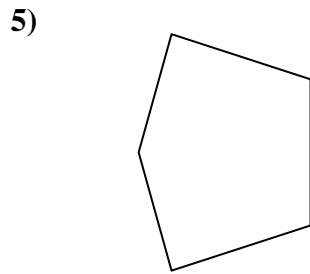

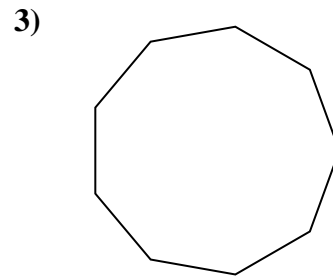
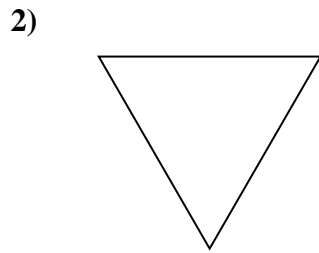
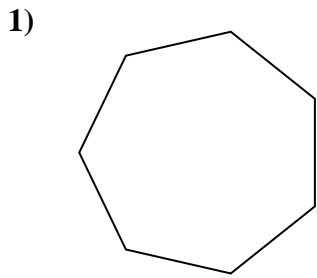
13. \_\_\_\_\_

14. \_\_\_\_\_

15. \_\_\_\_\_



Determina se le forme rappresentate sono regolari o irregolari.



Risposte

1. regolari

2. regolari

3. regolari

4. irregolari

5. irregolari

6. irregolari

7. regolari

8. irregolari

9. regolari

10. regolari

11. irregolari

12. irregolari

13. irregolari

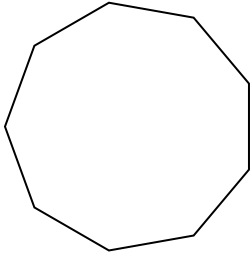
14. irregolari

15. regolari




Determina se le forme rappresentate sono regolari o irregolari.

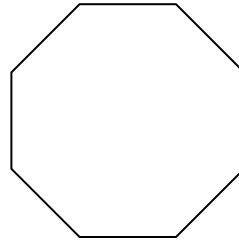
1)



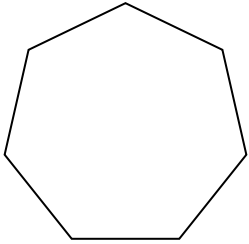
2)



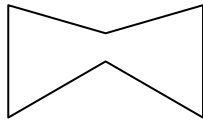
3)



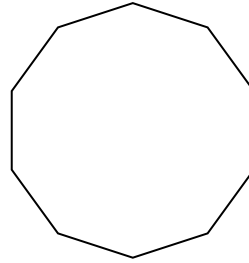
4)



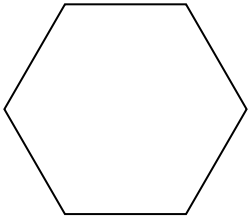
5)



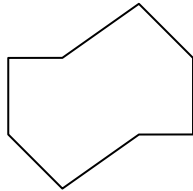
6)



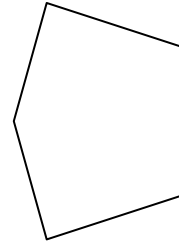
7)



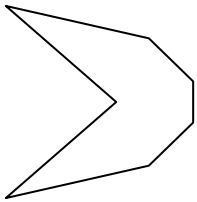
8)




9)



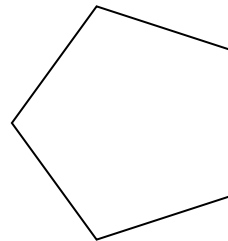
10)




11)




12)



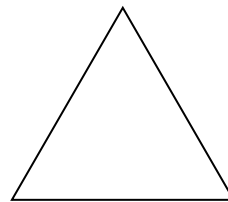
13)



14)



15)



**Risposte**

1. \_\_\_\_\_

2. \_\_\_\_\_

3. \_\_\_\_\_

4. \_\_\_\_\_

5. \_\_\_\_\_

6. \_\_\_\_\_

7. \_\_\_\_\_

8. \_\_\_\_\_

9. \_\_\_\_\_

10. \_\_\_\_\_

11. \_\_\_\_\_

12. \_\_\_\_\_

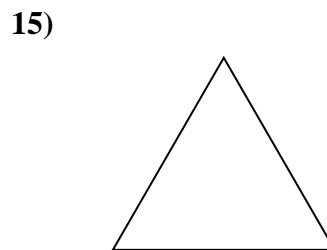
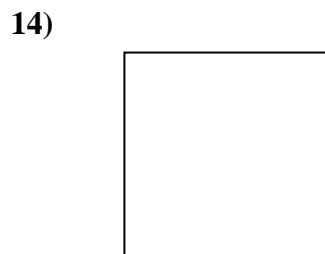
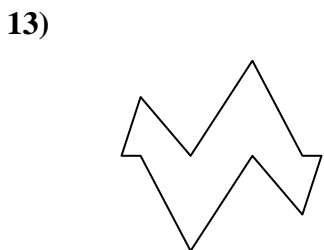
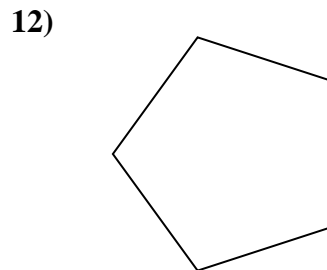
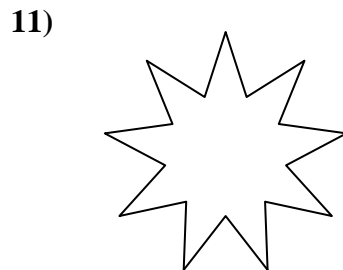
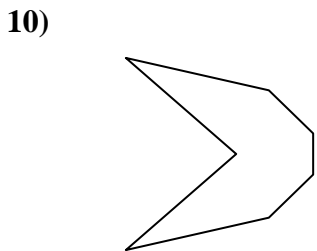
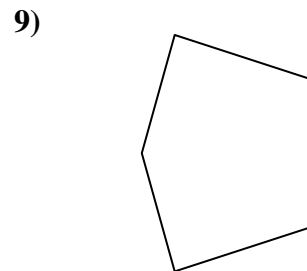
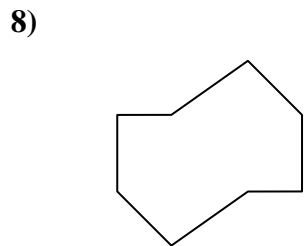
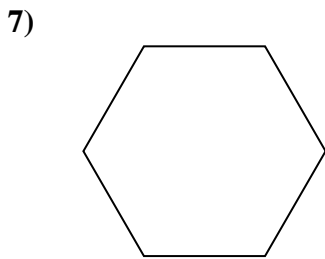
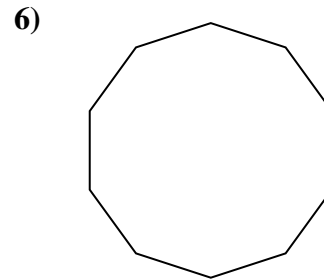
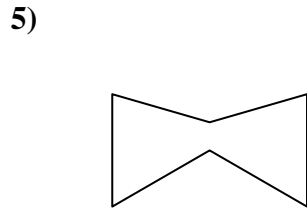
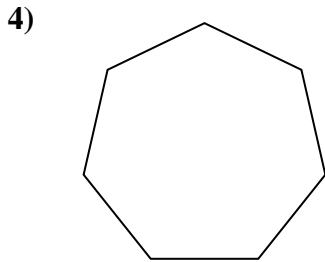
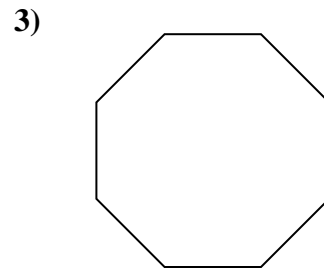
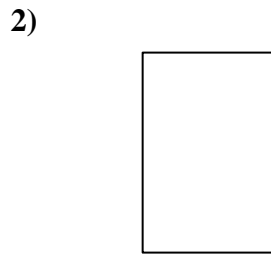
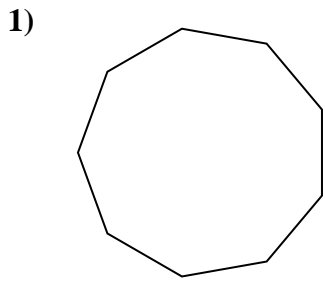
13. \_\_\_\_\_

14. \_\_\_\_\_

15. \_\_\_\_\_



Determina se le forme rappresentate sono regolari o irregolari.



Risposte

1. regolari

2. irregolari

3. regolari

4. regolari

5. irregolari

6. regolari

7. regolari

8. irregolari

9. irregolari

10. irregolari

11. irregolari

12. regolari

13. irregolari

14. regolari

15. regolari