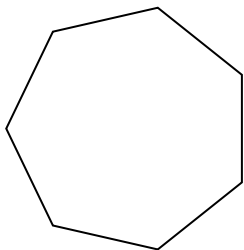


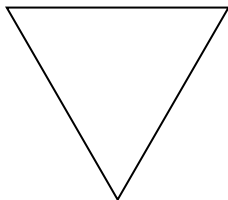


Determina se le forme rappresentate sono regolari o irregolari.

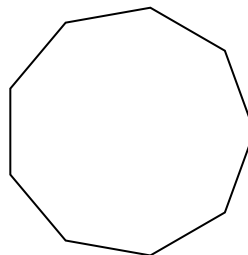
1)




2)



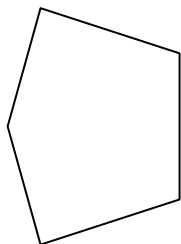
3)




4)



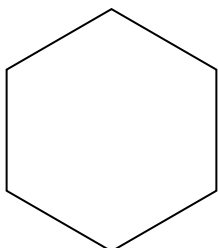
5)




6)



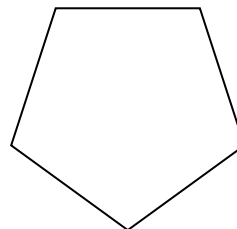
7)



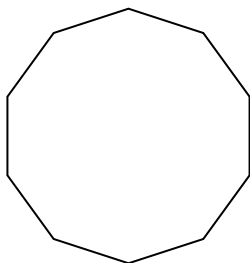
8)



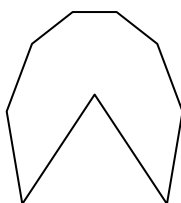
9)



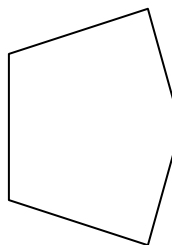
10)




11)



12)




13)



14)



15)



**Risposte**

1. \_\_\_\_\_

2. \_\_\_\_\_

3. \_\_\_\_\_

4. \_\_\_\_\_

5. \_\_\_\_\_

6. \_\_\_\_\_

7. \_\_\_\_\_

8. \_\_\_\_\_

9. \_\_\_\_\_

10. \_\_\_\_\_

11. \_\_\_\_\_

12. \_\_\_\_\_

13. \_\_\_\_\_

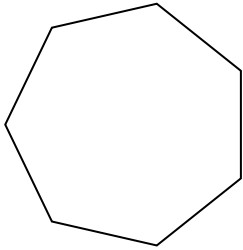
14. \_\_\_\_\_

15. \_\_\_\_\_

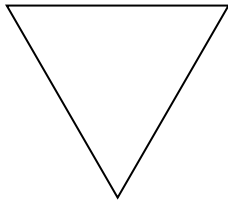


Determina se le forme rappresentate sono regolari o irregolari.

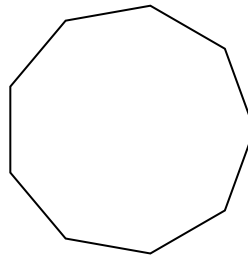
1)




2)



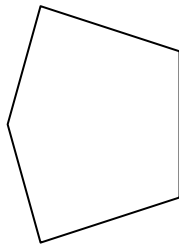
3)




4)



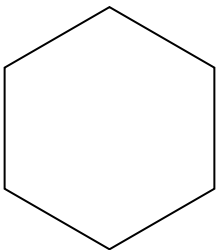
5)




6)



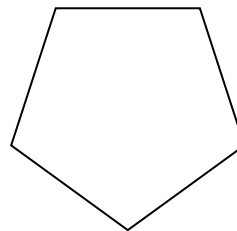
7)



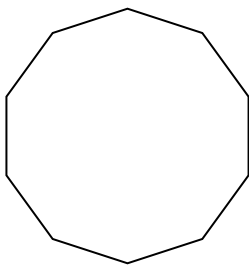
8)



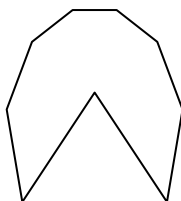
9)



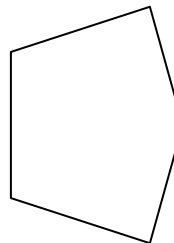
10)




11)



12)




13)



14)



15)



Risposte

1. regolari

2. regolari

3. regolari

4. irregolari

5. irregolari

6. irregolari

7. regolari

8. irregolari

9. regolari

10. regolari

11. irregolari

12. irregolari

13. irregolari

14. irregolari

15. regolari