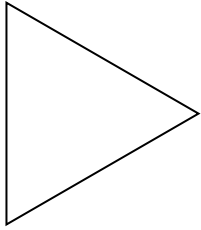





Determina se le forme rappresentate sono regolari o irregolari.


1)



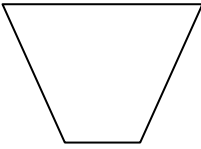
2)




3)




4)



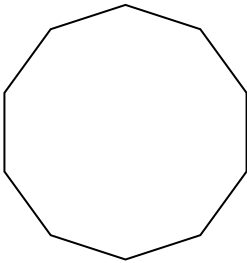
5)



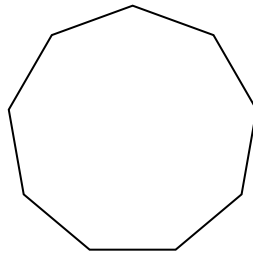
6)



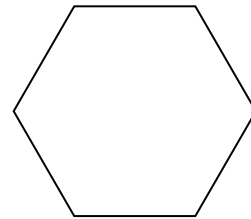
7)



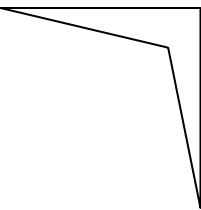
8)



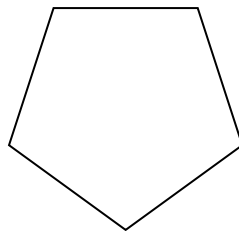
9)




10)




11)



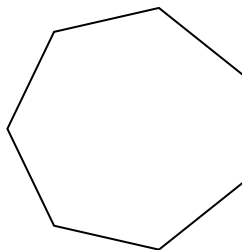
12)



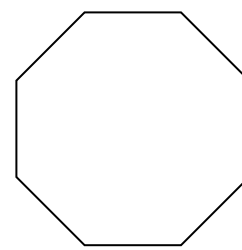
13)



14)



15)



Risposte

1. \_\_\_\_\_

2. \_\_\_\_\_

3. \_\_\_\_\_

4. \_\_\_\_\_

5. \_\_\_\_\_

6. \_\_\_\_\_

7. \_\_\_\_\_

8. \_\_\_\_\_

9. \_\_\_\_\_

10. \_\_\_\_\_

11. \_\_\_\_\_

12. \_\_\_\_\_

13. \_\_\_\_\_

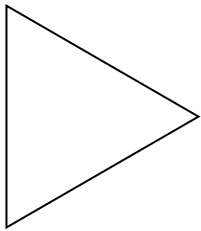
14. \_\_\_\_\_

15. \_\_\_\_\_




Determina se le forme rappresentate sono regolari o irregolari.


1)



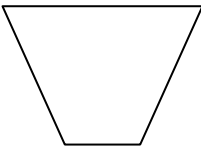
2)




3)




4)



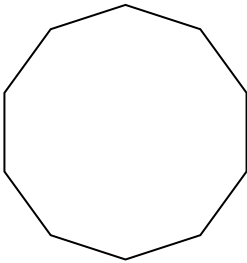
5)



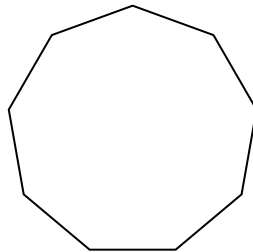
6)



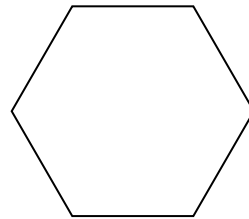
7)



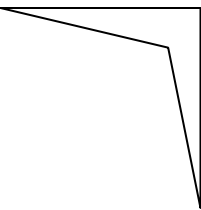
8)



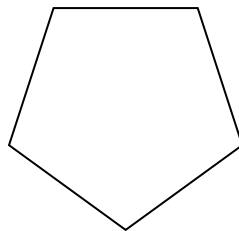
9)




10)




11)



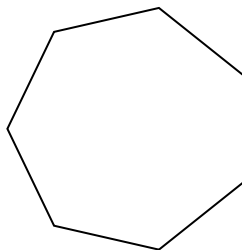
12)



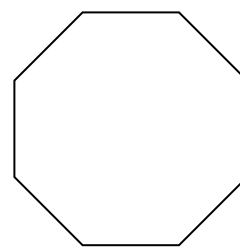
13)



14)



15)



**Risposte**

1. regolari

2. irregolari

3. irregolari

4. irregolari

5. irregolari

6. irregolari

7. regolari

8. regolari

9. regolari

10. irregolari

11. regolari

12. regolari

13. irregolari

14. regolari

15. regolari