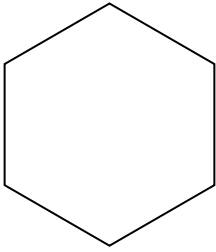





Determina se le forme rappresentate sono regolari o irregolari.

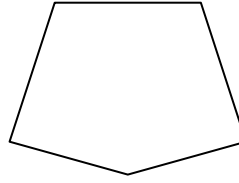
1)



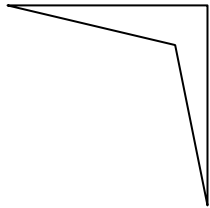
2)




3)



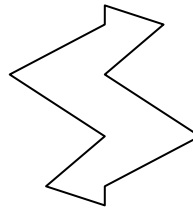
4)



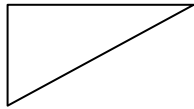
5)



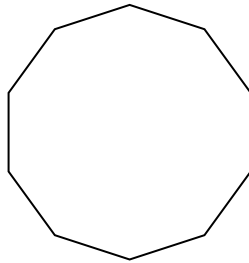
6)



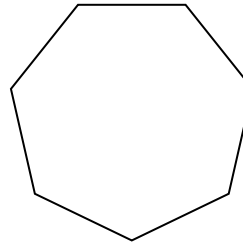
7)



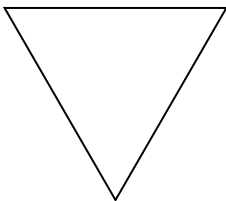
8)



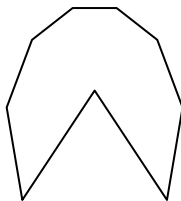
9)



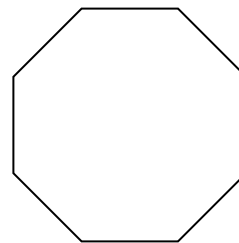
10)




11)



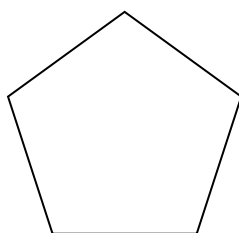
12)



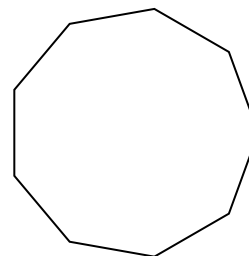
13)



14)



15)



**Risposte**

1. \_\_\_\_\_

2. \_\_\_\_\_

3. \_\_\_\_\_

4. \_\_\_\_\_

5. \_\_\_\_\_

6. \_\_\_\_\_

7. \_\_\_\_\_

8. \_\_\_\_\_

9. \_\_\_\_\_

10. \_\_\_\_\_

11. \_\_\_\_\_

12. \_\_\_\_\_

13. \_\_\_\_\_

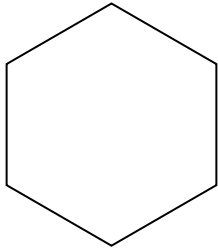
14. \_\_\_\_\_

15. \_\_\_\_\_




Determina se le forme rappresentate sono regolari o irregolari.

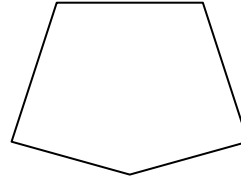
1)



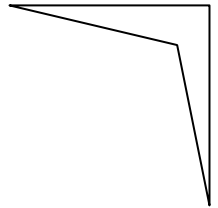
2)




3)



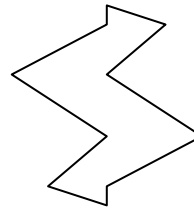
4)



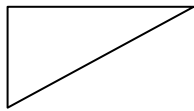
5)



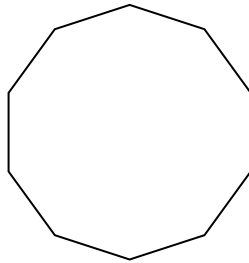
6)



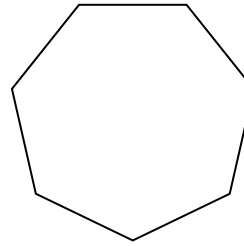
7)



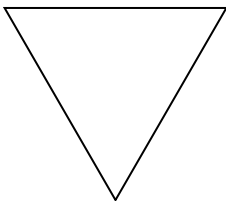
8)



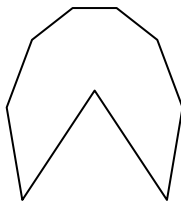
9)



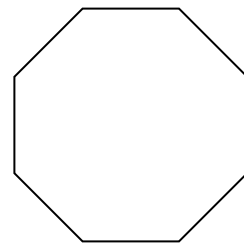
10)




11)



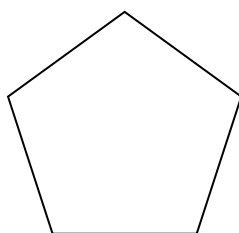
12)



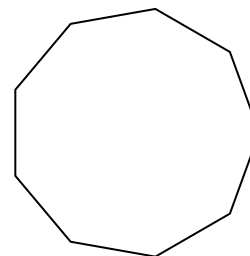
13)



14)



15)



Risposte

1. regolari

2. irregolari

3. irregolari

4. irregolari

5. regolari

6. irregolari

7. irregolari

8. regolari

9. regolari

10. regolari

11. irregolari

12. regolari

13. irregolari

14. regolari

15. regolari