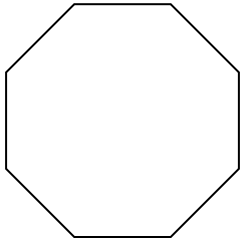


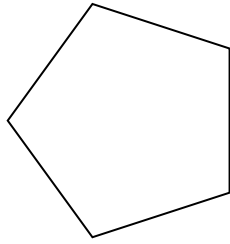


Determina se le forme rappresentate sono regolari o irregolari.

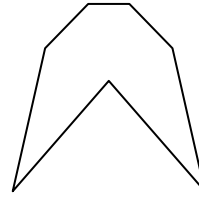
1)




2)



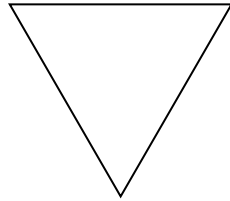
3)




4)




5)



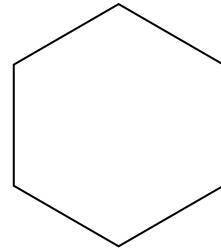
6)



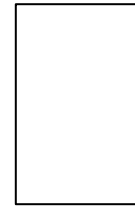
7)



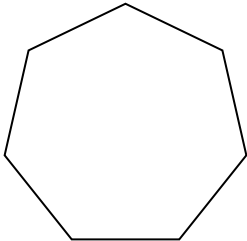
8)



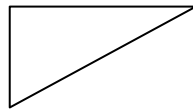
9)



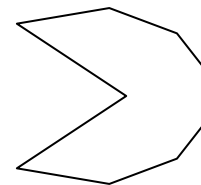
10)



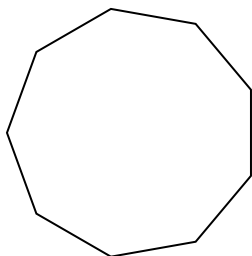
11)



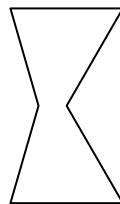
12)



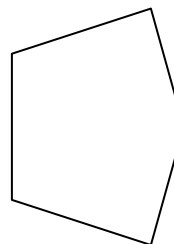
13)



14)



15)



Risposte

1. _____

2. _____

3. _____

4. _____

5. _____

6. _____

7. _____

8. _____

9. _____

10. _____

11. _____

12. _____

13. _____

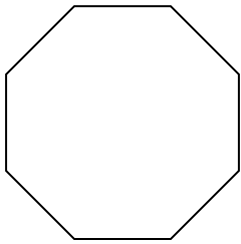
14. _____

15. _____

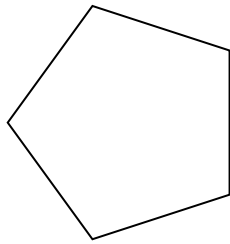


Determina se le forme rappresentate sono regolari o irregolari.

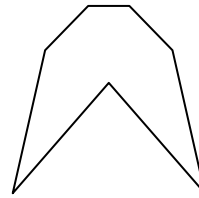
1)




2)



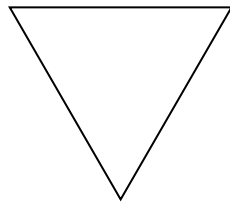
3)




4)




5)



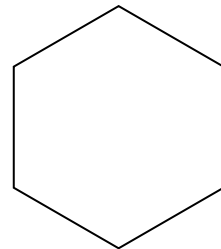
6)




7)



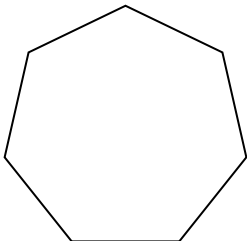
8)



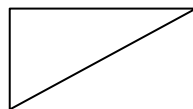
9)



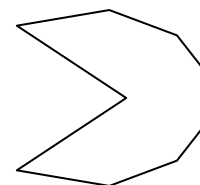
10)



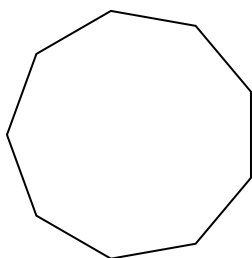
11)



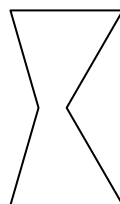
12)



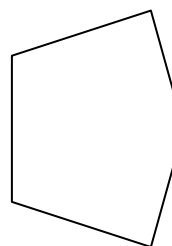
13)



14)



15)



Risposte

1. regolari

2. regolari

3. irregolari

4. irregolari

5. regolari

6. regolari

7. irregolari

8. regolari

9. irregolari

10. regolari

11. irregolari

12. irregolari

13. regolari

14. irregolari

15. irregolari