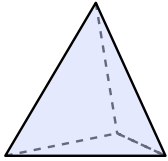




Determina quale scelta descrive CORREETTAMENTE la forma mostrata.

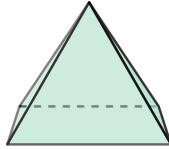
**Risposte**

1)



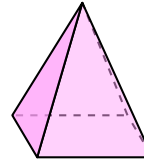
- A. Prisma Triangolare
- B. Cubo
- C. Piramide Triangolare
- D. Sfera

2)



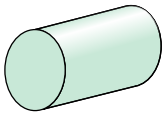
- A. Piramide Triangolare
- B. Prisma Rettangolare
- C. Prisma Triangolare
- D. Piramide Rettangolare

3)



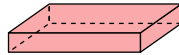
- A. Cubo
- B. Piramide Rettangolare
- C. Cono
- D. Prisma Triangolare

4)



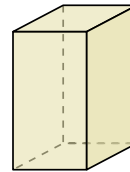
- A. Cubo
- B. Cono
- C. Prisma Triangolare
- D. Cilindro

5)



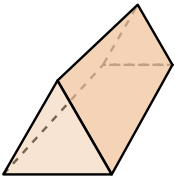
- A. Piramide Rettangolare
- B. Cilindro
- C. Cubo
- D. Prisma Rettangolare

6)



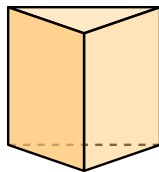
- A. Piramide Triangolare
- B. Piramide Rettangolare
- C. Prisma Rettangolare
- D. Cono

7)



- A. Prisma Rettangolare
- B. Piramide Triangolare
- C. Cilindro
- D. Prisma Triangolare

8)




- A. Cono
- B. Sfera
- C. Cubo
- D. Prisma Triangolare

9)



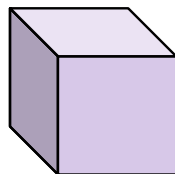
- A. Prisma Triangolare
- B. Cubo
- C. Cono
- D. Cilindro

10)



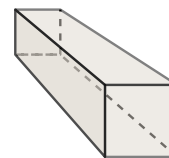
- A. Piramide Triangolare
- B. Cono
- C. Sfera
- D. Piramide Rettangolare

11)



- A. Cubo
- B. Cilindro
- C. Sfera
- D. Prisma Triangolare

12)



- A. Prisma Rettangolare
- B. Cubo
- C. Cilindro
- D. Piramide Rettangolare

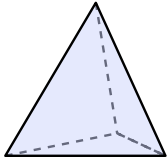
- 1. \_\_\_\_\_
- 2. \_\_\_\_\_
- 3. \_\_\_\_\_
- 4. \_\_\_\_\_
- 5. \_\_\_\_\_
- 6. \_\_\_\_\_
- 7. \_\_\_\_\_
- 8. \_\_\_\_\_
- 9. \_\_\_\_\_
- 10. \_\_\_\_\_
- 11. \_\_\_\_\_
- 12. \_\_\_\_\_



Determina quale scelta descrive **CORREETTAMENTE** la forma mostrata.

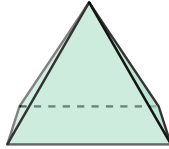
**Risposte**

1)



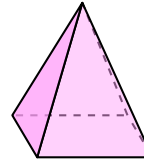
- A. Prisma Triangolare
- B. Cubo
- C. Piramide Triangolare
- D. Sfera

2)



- A. Piramide Triangolare
- B. Prisma Rettangolare
- C. Prisma Triangolare
- D. Piramide Rettangolare

3)



- A. Cubo
- B. Piramide Rettangolare
- C. Cono
- D. Prisma Triangolare

1.   **C**  

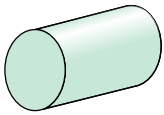
2.   **D**  

3.   **B**  

4.   **D**  

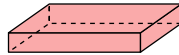
5.   **D**  

4)



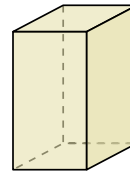
- A. Cubo
- B. Cono
- C. Prisma Triangolare
- D. Cilindro

5)



- A. Piramide Rettangolare
- B. Cilindro
- C. Cubo
- D. Prisma Rettangolare

6)



- A. Piramide Triangolare
- B. Piramide Rettangolare
- C. Prisma Rettangolare
- D. Cono

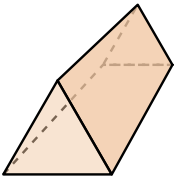
6.   **C**  

7.   **D**  

8.   **D**  

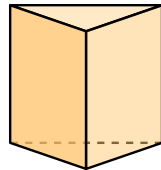
9.   **D**  

7)



- A. Prisma Rettangolare
- B. Piramide Triangolare
- C. Cilindro
- D. Prisma Triangolare

8)



- A. Cono
- B. Sfera
- C. Cubo
- D. Prisma Triangolare

9)




- A. Prisma Triangolare
- B. Cubo
- C. Cono
- D. Cilindro

10.   **C**  

11.   **A**  

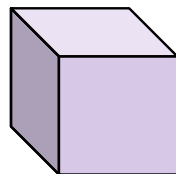
12.   **A**  

10)



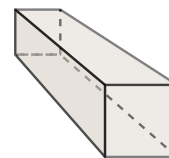
- A. Piramide Triangolare
- B. Cono
- C. Sfera
- D. Piramide Rettangolare

11)



- A. Cubo
- B. Cilindro
- C. Sfera
- D. Prisma Triangolare

12)



- A. Prisma Rettangolare
- B. Cubo
- C. Cilindro
- D. Piramide Rettangolare