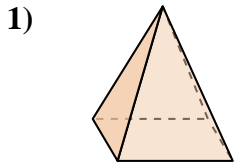


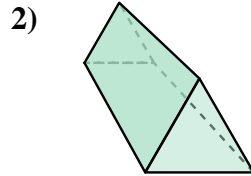


Determina quale scelta descrive CORREETTAMENTE la forma mostrata.

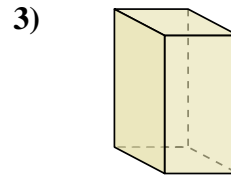
Risposte



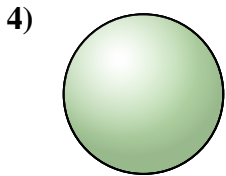
- A. Sfera
- B. Cilindro
- C. Cubo
- D. Piramide Rettangolare



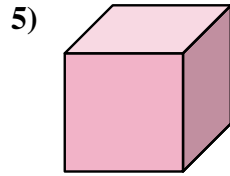
- A. Cono
- B. Prisma Triangolare
- C. Sfera
- D. Cubo



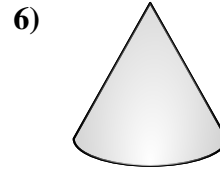
- A. Cilindro
- B. Prisma Triangolare
- C. Piramide Rettangolare
- D. Prisma Rettangolare



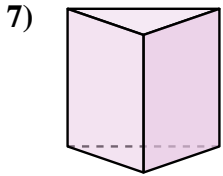
- A. Prisma Rettangolare
- B. Cilindro
- C. Sfera
- D. Cubo



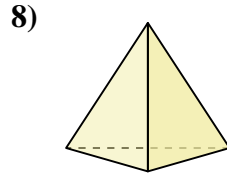
- A. Prisma Triangolare
- B. Cubo
- C. Sfera
- D. Piramide Triangolare



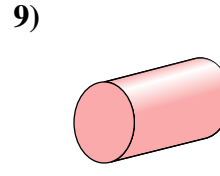
- A. Cono
- B. Cubo
- C. Cilindro
- D. Prisma Rettangolare



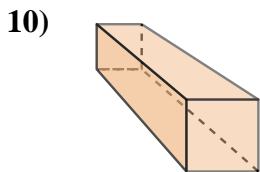
- A. Cilindro
- B. Prisma Triangolare
- C. Piramide Rettangolare
- D. Piramide Triangolare



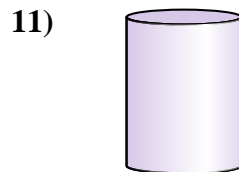
- A. Piramide Triangolare
- B. Cilindro
- C. Piramide Rettangolare
- D. Prisma Triangolare



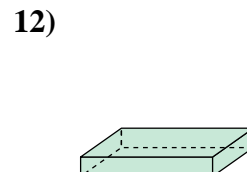
- A. Piramide Triangolare
- B. Cono
- C. Sfera
- D. Cilindro



- A. Cilindro
- B. Cono
- C. Prisma Triangolare
- D. Prisma Rettangolare



- A. Cilindro
- B. Sfera
- C. Piramide Rettangolare
- D. Cubo



- A. Cubo
- B. Piramide Rettangolare
- C. Piramide Triangolare
- D. Prisma Rettangolare

1. _____

2. _____

3. _____

4. _____

5. _____

6. _____

7. _____

8. _____

9. _____

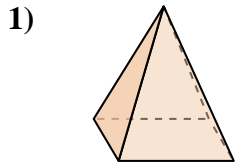
10. _____

11. _____

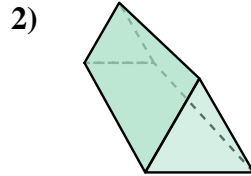
12. _____



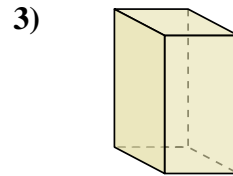
Determina quale scelta descrive **CORREETTAMENTE** la forma mostrata.



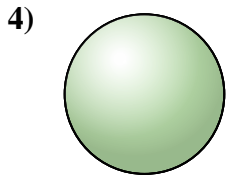
- A. Sfera
- B. Cilindro
- C. Cubo
- D. Piramide Rettangolare



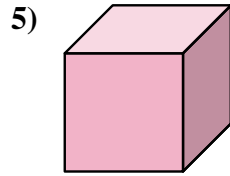
- A. Cono
- B. Prisma Triangolare
- C. Sfera
- D. Cubo



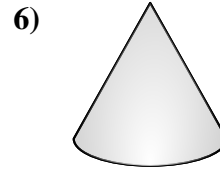
- A. Cilindro
- B. Prisma Triangolare
- C. Piramide Rettangolare
- D. Prisma Rettangolare



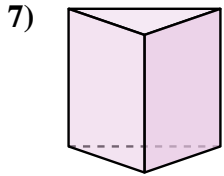
- A. Prisma Rettangolare
- B. Cilindro
- C. Sfera
- D. Cubo



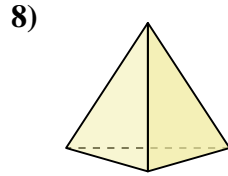
- A. Prisma Triangolare
- B. Cubo
- C. Sfera
- D. Piramide Triangolare



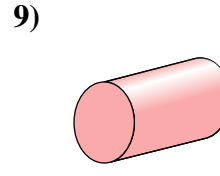
- A. Cono
- B. Cubo
- C. Cilindro
- D. Prisma Rettangolare



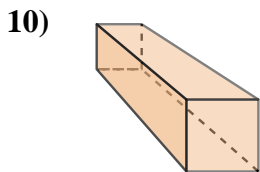
- A. Cilindro
- B. Prisma Triangolare
- C. Piramide Rettangolare
- D. Piramide Triangolare



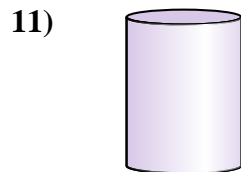
- A. Piramide Triangolare
- B. Cilindro
- C. Piramide Rettangolare
- D. Prisma Triangolare



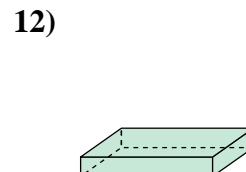
- A. Piramide Triangolare
- B. Cono
- C. Sfera
- D. Cilindro



- A. Cilindro
- B. Cono
- C. Prisma Triangolare
- D. Prisma Rettangolare



- A. Cilindro
- B. Sfera
- C. Piramide Rettangolare
- D. Cubo



- A. Cubo
- B. Piramide Rettangolare
- C. Piramide Triangolare
- D. Prisma Rettangolare

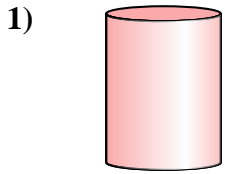
Risposte

- 1. **D**
- 2. **B**
- 3. **D**
- 4. **C**
- 5. **B**
- 6. **A**
- 7. **B**
- 8. **A**
- 9. **D**
- 10. **D**
- 11. **A**
- 12. **D**

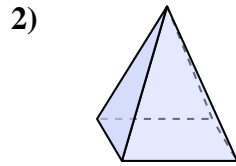


Determina quale scelta descrive CORREETTAMENTE la forma mostrata.

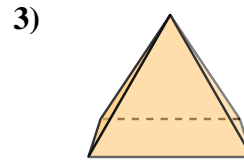
Risposte



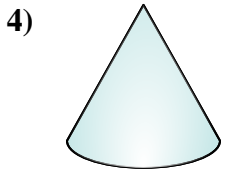
- A. Cono
- B. Cilindro
- C. Cubo
- D. Piramide Triangolare



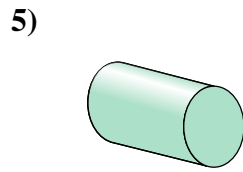
- A. Sfera
- B. Piramide Rettangolare
- C. Prisma Rettangolare
- D. Cilindro



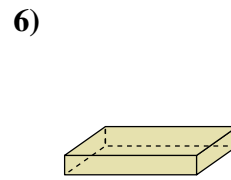
- A. Piramide Rettangolare
- B. Prisma Triangolare
- C. Cubo
- D. Sfera



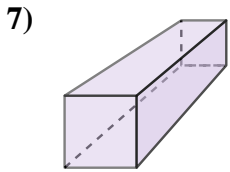
- A. Cono
- B. Sfera
- C. Piramide Triangolare
- D. Cilindro



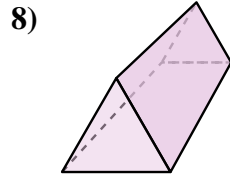
- A. Cono
- B. Cilindro
- C. Prisma Rettangolare
- D. Sfera



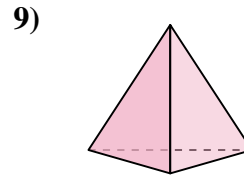
- A. Prisma Triangolare
- B. Cilindro
- C. Prisma Rettangolare
- D. Cono



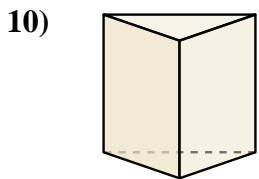
- A. Prisma Rettangolare
- B. Piramide Triangolare
- C. Piramide Rettangolare
- D. Sfera



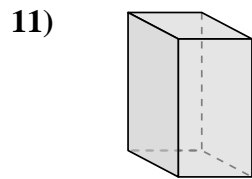
- A. Prisma Triangolare
- B. Cilindro
- C. Sfera
- D. Piramide Rettangolare



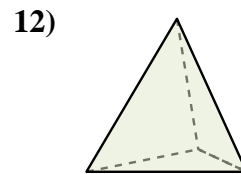
- A. Prisma Triangolare
- B. Cubo
- C. Piramide Triangolare
- D. Sfera



- A. Piramide Triangolare
- B. Sfera
- C. Piramide Rettangolare
- D. Prisma Triangolare



- A. Sfera
- B. Cubo
- C. Prisma Rettangolare
- D. Piramide Triangolare



- A. Piramide Triangolare
- B. Cono
- C. Sfera
- D. Cilindro

1. _____

2. _____

3. _____

4. _____

5. _____

6. _____

7. _____

8. _____

9. _____

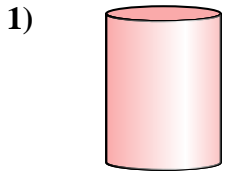
10. _____

11. _____

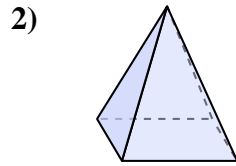
12. _____



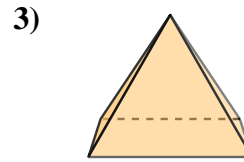
Determina quale scelta descrive CORREETTAMENTE la forma mostrata.



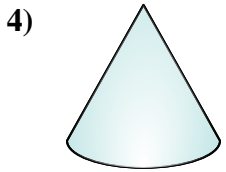
- A. Cono
- B. Cilindro
- C. Cubo
- D. Piramide Triangolare



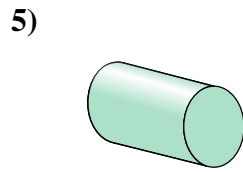
- A. Sfera
- B. Piramide Rettangolare
- C. Prisma Rettangolare
- D. Cilindro



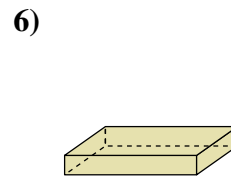
- A. Piramide Rettangolare
- B. Prisma Triangolare
- C. Cubo
- D. Sfera



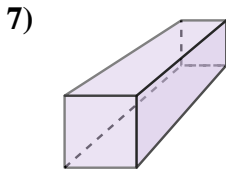
- A. Cono
- B. Sfera
- C. Piramide Triangolare
- D. Cilindro



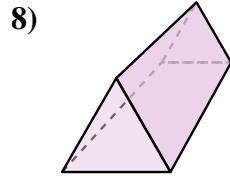
- A. Cono
- B. Cilindro
- C. Prisma Rettangolare
- D. Sfera



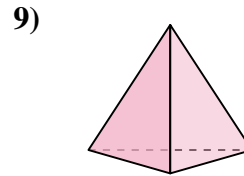
- A. Prisma Triangolare
- B. Cilindro
- C. Prisma Rettangolare
- D. Cono



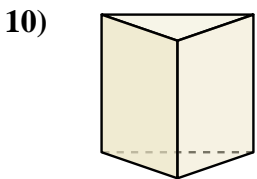
- A. Prisma Rettangolare
- B. Piramide Triangolare
- C. Piramide Rettangolare
- D. Sfera



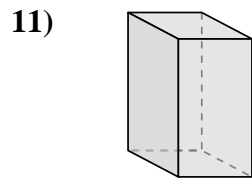
- A. Prisma Triangolare
- B. Cilindro
- C. Sfera
- D. Piramide Rettangolare



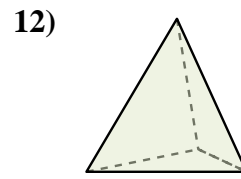
- A. Prisma Triangolare
- B. Cubo
- C. Piramide Triangolare
- D. Sfera



- A. Piramide Triangolare
- B. Sfera
- C. Piramide Rettangolare
- D. Prisma Triangolare



- A. Sfera
- B. Cubo
- C. Prisma Rettangolare
- D. Piramide Triangolare



- A. Piramide Triangolare
- B. Cono
- C. Sfera
- D. Cilindro

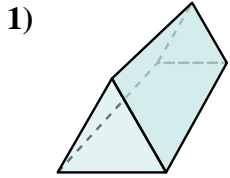
Risposte

- 1. **B**
- 2. **B**
- 3. **A**
- 4. **A**
- 5. **B**
- 6. **C**
- 7. **A**
- 8. **A**
- 9. **C**
- 10. **D**
- 11. **C**
- 12. **A**

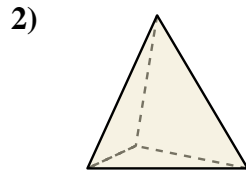


Determina quale scelta descrive CORREETTAMENTE la forma mostrata.

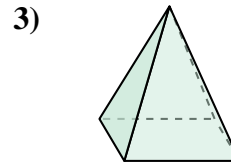
Risposte



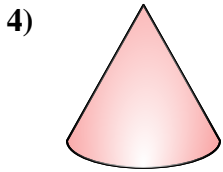
- A. Prisma Triangolare
- B. Cubo
- C. Piramide Triangolare
- D. Piramide Rettangolare



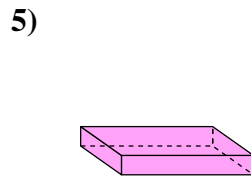
- A. Prisma Triangolare
- B. Piramide Rettangolare
- C. Piramide Triangolare
- D. Sfera



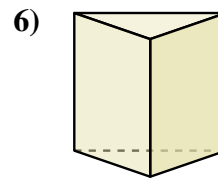
- A. Cono
- B. Cilindro
- C. Piramide Rettangolare
- D. Prisma Rettangolare



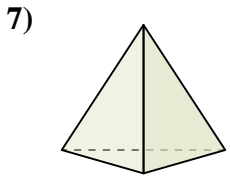
- A. Cilindro
- B. Prisma Rettangolare
- C. Cono
- D. Sfera



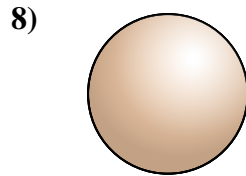
- A. Prisma Rettangolare
- B. Cubo
- C. Piramide Triangolare
- D. Cilindro



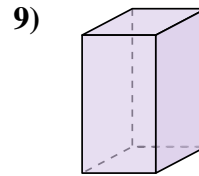
- A. Piramide Rettangolare
- B. Piramide Triangolare
- C. Prisma Triangolare
- D. Sfera



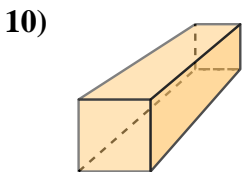
- A. Sfera
- B. Piramide Triangolare
- C. Prisma Triangolare
- D. Prisma Rettangolare



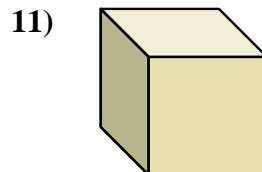
- A. Cubo
- B. Sfera
- C. Prisma Rettangolare
- D. Cono



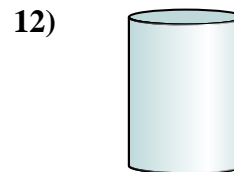
- A. Cono
- B. Piramide Triangolare
- C. Prisma Triangolare
- D. Prisma Rettangolare



- A. Prisma Rettangolare
- B. Cubo
- C. Prisma Triangolare
- D. Piramide Rettangolare



- A. Prisma Triangolare
- B. Cilindro
- C. Sfera
- D. Cubo



- A. Cilindro
- B. Prisma Triangolare
- C. Sfera
- D. Piramide Triangolare

1. _____

2. _____

3. _____

4. _____

5. _____

6. _____

7. _____

8. _____

9. _____

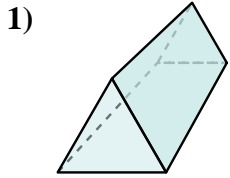
10. _____

11. _____

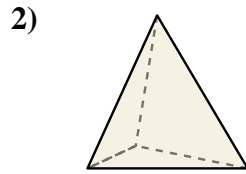
12. _____



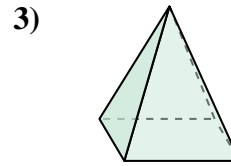
Determina quale scelta descrive **CORRETTAMENTE** la forma mostrata.



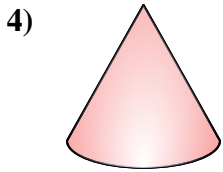
- A. Prisma Triangolare
- B. Cubo
- C. Piramide Triangolare
- D. Piramide Rettangolare



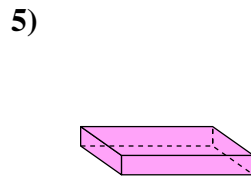
- A. Prisma Triangolare
- B. Piramide Rettangolare
- C. Piramide Triangolare
- D. Sfera



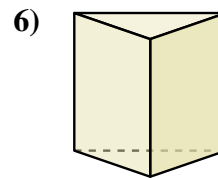
- A. Cono
- B. Cilindro
- C. Piramide Rettangolare
- D. Prisma Rettangolare



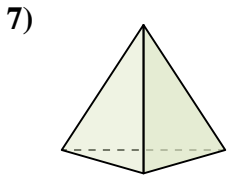
- A. Cilindro
- B. Prisma Rettangolare
- C. Cono
- D. Sfera



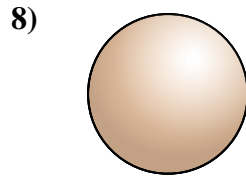
- A. Prisma Rettangolare
- B. Cubo
- C. Piramide Triangolare
- D. Cilindro



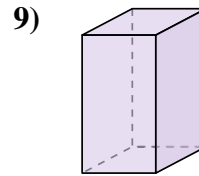
- A. Piramide Rettangolare
- B. Piramide Triangolare
- C. Prisma Triangolare
- D. Sfera



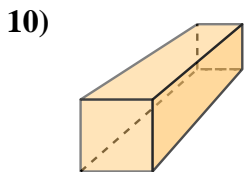
- A. Sfera
- B. Piramide Triangolare
- C. Prisma Triangolare
- D. Prisma Rettangolare



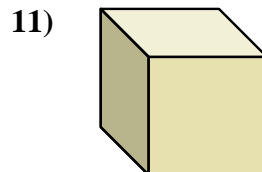
- A. Cubo
- B. Sfera
- C. Prisma Rettangolare
- D. Cono



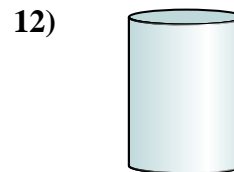
- A. Cono
- B. Piramide Triangolare
- C. Prisma Triangolare
- D. Prisma Rettangolare



- A. Prisma Rettangolare
- B. Cubo
- C. Prisma Triangolare
- D. Piramide Rettangolare



- A. Prisma Triangolare
- B. Cilindro
- C. Sfera
- D. Cubo



- A. Cilindro
- B. Prisma Triangolare
- C. Sfera
- D. Piramide Triangolare

Risposte

1. **A**

2. **C**

3. **C**

4. **C**

5. **A**

6. **C**

7. **B**

8. **B**

9. **D**

10. **A**

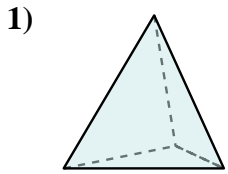
11. **D**

12. **A**

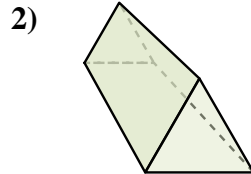


Determina quale scelta descrive CORREETTAMENTE la forma mostrata.

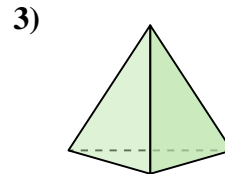
Risposte



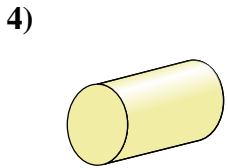
- A. Prisma Rettangolare
- B. Sfera
- C. Piramide Triangolare
- D. Cilindro



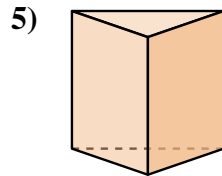
- A. Piramide Triangolare
- B. Cono
- C. Sfera
- D. Prisma Triangolare



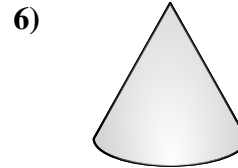
- A. Cubo
- B. Piramide Triangolare
- C. Prisma Rettangolare
- D. Cilindro



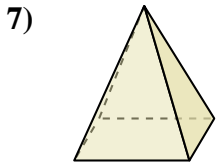
- A. Prisma Triangolare
- B. Piramide Triangolare
- C. Piramide Rettangolare
- D. Cilindro



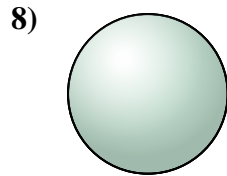
- A. Cono
- B. Piramide Rettangolare
- C. Cilindro
- D. Prisma Triangolare



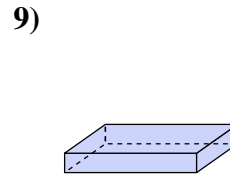
- A. Piramide Triangolare
- B. Cono
- C. Cubo
- D. Prisma Triangolare



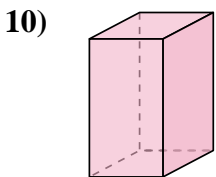
- A. Sfera
- B. Piramide Rettangolare
- C. Cubo
- D. Cono



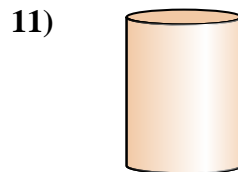
- A. Prisma Rettangolare
- B. Sfera
- C. Piramide Rettangolare
- D. Piramide Triangolare



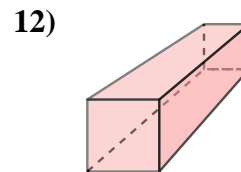
- A. Cubo
- B. Prisma Rettangolare
- C. Piramide Rettangolare
- D. Sfera



- A. Cubo
- B. Prisma Rettangolare
- C. Cilindro
- D. Prisma Triangolare



- A. Piramide Triangolare
- B. Prisma Triangolare
- C. Cilindro
- D. Piramide Rettangolare



- A. Prisma Rettangolare
- B. Cono
- C. Piramide Rettangolare
- D. Cubo

1. _____

2. _____

3. _____

4. _____

5. _____

6. _____

7. _____

8. _____

9. _____

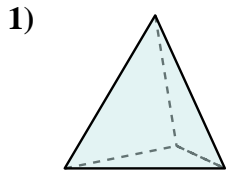
10. _____

11. _____

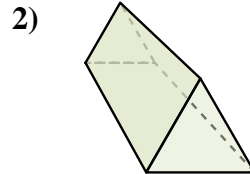
12. _____



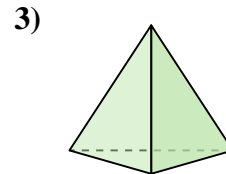
Determina quale scelta descrive **CORREETTAMENTE** la forma mostrata.



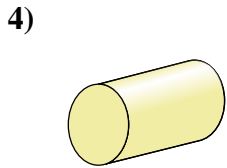
- A. Prisma Rettangolare
- B. Sfera
- C. Piramide Triangolare
- D. Cilindro



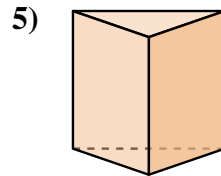
- A. Piramide Triangolare
- B. Cono
- C. Sfera
- D. Prisma Triangolare



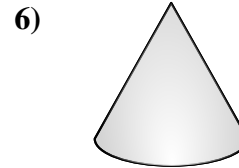
- A. Cubo
- B. Piramide Triangolare
- C. Prisma Rettangolare
- D. Cilindro



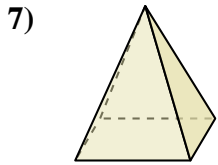
- A. Prisma Triangolare
- B. Piramide Triangolare
- C. Piramide Rettangolare
- D. Cilindro



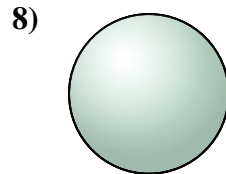
- A. Cono
- B. Piramide Rettangolare
- C. Cilindro
- D. Prisma Triangolare



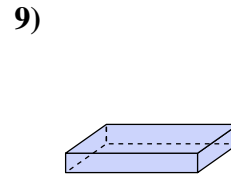
- A. Piramide Triangolare
- B. Cono
- C. Cubo
- D. Prisma Triangolare



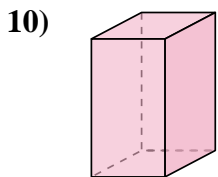
- A. Sfera
- B. Piramide Rettangolare
- C. Cubo
- D. Cono



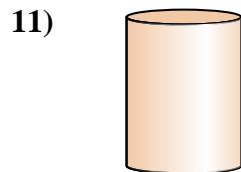
- A. Prisma Rettangolare
- B. Sfera
- C. Piramide Rettangolare
- D. Piramide Triangolare



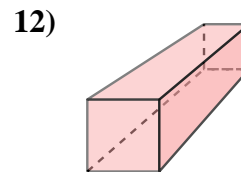
- A. Cubo
- B. Prisma Rettangolare
- C. Piramide Rettangolare
- D. Sfera



- A. Cubo
- B. Prisma Rettangolare
- C. Cilindro
- D. Prisma Triangolare



- A. Piramide Triangolare
- B. Prisma Triangolare
- C. Cilindro
- D. Piramide Rettangolare



- A. Prisma Rettangolare
- B. Cono
- C. Piramide Rettangolare
- D. Cubo

Risposte

1. **C**

2. **D**

3. **B**

4. **D**

5. **D**

6. **B**

7. **B**

8. **B**

9. **B**

10. **B**

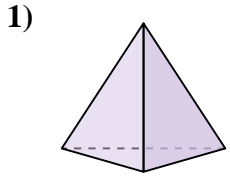
11. **C**

12. **A**

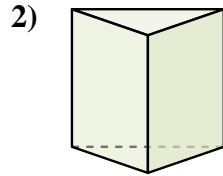


Determina quale scelta descrive CORRETTAMENTE la forma mostrata.

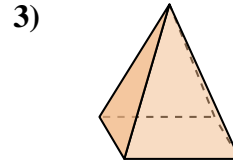
Risposte



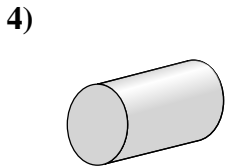
- A. Cubo
- B. Sfera
- C. Prisma Rettangolare
- D. Piramide Triangolare



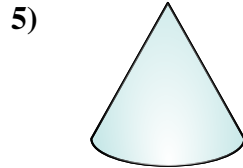
- A. Prisma Triangolare
- B. Prisma Rettangolare
- C. Sfera
- D. Piramide Triangolare



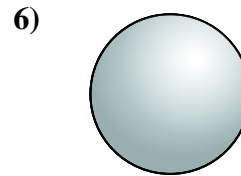
- A. Sfera
- B. Piramide Triangolare
- C. Piramide Rettangolare
- D. Cilindro



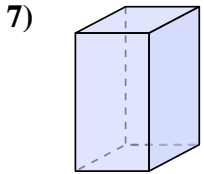
- A. Piramide Triangolare
- B. Sfera
- C. Cilindro
- D. Cono



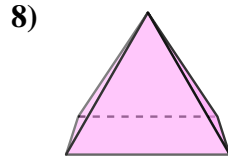
- A. Cono
- B. Prisma Rettangolare
- C. Piramide Triangolare
- D. Cubo



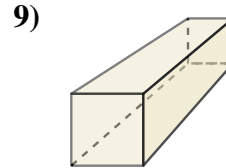
- A. Cono
- B. Cilindro
- C. Sfera
- D. Prisma Rettangolare



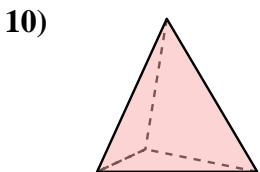
- A. Piramide Rettangolare
- B. Prisma Triangolare
- C. Cono
- D. Prisma Rettangolare



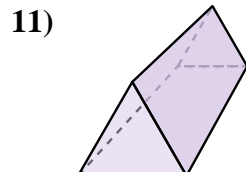
- A. Cubo
- B. Prisma Triangolare
- C. Piramide Rettangolare
- D. Prisma Rettangolare



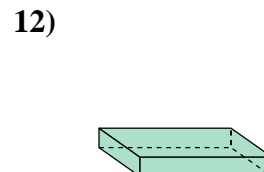
- A. Piramide Triangolare
- B. Prisma Rettangolare
- C. Sfera
- D. Piramide Rettangolare



- A. Piramide Triangolare
- B. Cilindro
- C. Sfera
- D. Cono



- A. Sfera
- B. Piramide Rettangolare
- C. Prisma Triangolare
- D. Prisma Rettangolare



- A. Cono
- B. Prisma Rettangolare
- C. Sfera
- D. Cilindro

1. _____

2. _____

3. _____

4. _____

5. _____

6. _____

7. _____

8. _____

9. _____

10. _____

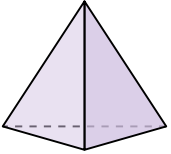
11. _____

12. _____



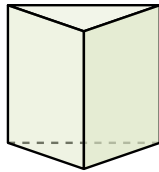
Determina quale scelta descrive **CORRETTAMENTE** la forma mostrata.

1)



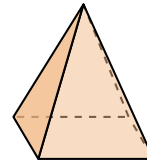
- A. Cubo
- B. Sfera
- C. Prisma Rettangolare
- D. Piramide Triangolare

2)



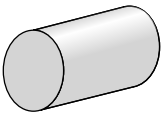
- A. Prisma Triangolare
- B. Prisma Rettangolare
- C. Sfera
- D. Piramide Triangolare

3)



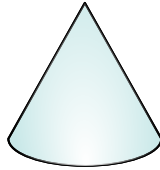
- A. Sfera
- B. Piramide Triangolare
- C. Piramide Rettangolare
- D. Cilindro

4)




- A. Piramide Triangolare
- B. Sfera
- C. Cilindro
- D. Cono

5)



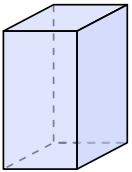
- A. Cono
- B. Prisma Rettangolare
- C. Piramide Triangolare
- D. Cubo

6)



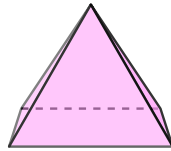
- A. Cono
- B. Cilindro
- C. Sfera
- D. Prisma Rettangolare

7)



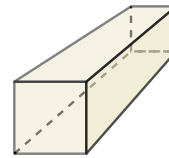
- A. Piramide Rettangolare
- B. Prisma Triangolare
- C. Cono
- D. Prisma Rettangolare

8)



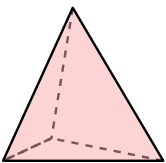
- A. Cubo
- B. Prisma Triangolare
- C. Piramide Rettangolare
- D. Prisma Rettangolare

9)



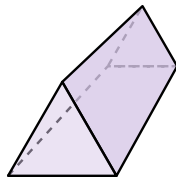
- A. Piramide Triangolare
- B. Prisma Rettangolare
- C. Sfera
- D. Piramide Rettangolare

10)



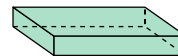
- A. Piramide Triangolare
- B. Cilindro
- C. Sfera
- D. Cono

11)



- A. Sfera
- B. Piramide Rettangolare
- C. Prisma Triangolare
- D. Prisma Rettangolare

12)



- A. Cono
- B. Prisma Rettangolare
- C. Sfera
- D. Cilindro

Risposte

1. **D**

2. **A**

3. **C**

4. **C**

5. **A**

6. **C**

7. **D**

8. **C**

9. **B**

10. **A**

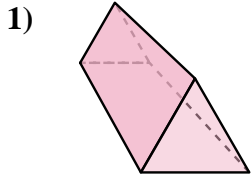
11. **C**

12. **B**

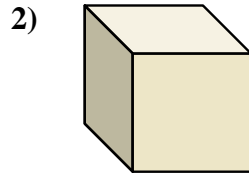


Determina quale scelta descrive CORREETTAMENTE la forma mostrata.

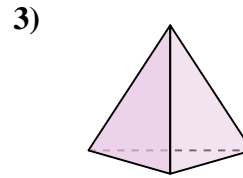
Risposte



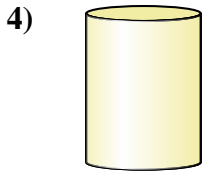
- A. Cono
- B. Prisma Triangolare
- C. Cilindro
- D. Sfera



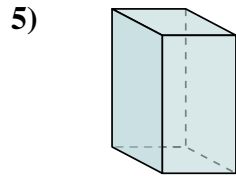
- A. Prisma Rettangolare
- B. Cubo
- C. Piramide Rettangolare
- D. Cilindro



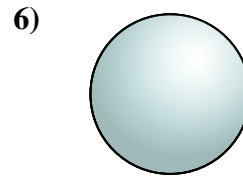
- A. Prisma Triangolare
- B. Piramide Triangolare
- C. Cilindro
- D. Prisma Rettangolare



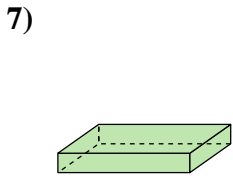
- A. Cubo
- B. Piramide Triangolare
- C. Prisma Rettangolare
- D. Cilindro



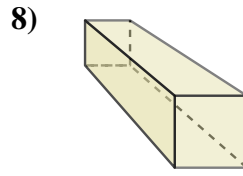
- A. Prisma Rettangolare
- B. Sfera
- C. Prisma Triangolare
- D. Piramide Rettangolare



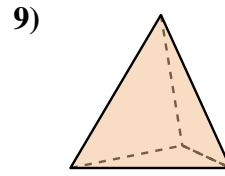
- A. Sfera
- B. Piramide Triangolare
- C. Cono
- D. Piramide Rettangolare



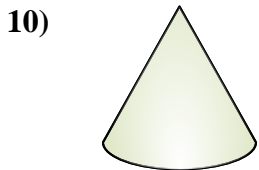
- A. Prisma Rettangolare
- B. Piramide Rettangolare
- C. Piramide Triangolare
- D. Prisma Triangolare



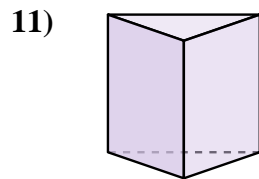
- A. Prisma Triangolare
- B. Sfera
- C. Prisma Rettangolare
- D. Cubo



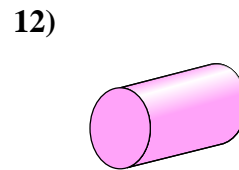
- A. Cubo
- B. Sfera
- C. Cilindro
- D. Piramide Triangolare



- A. Sfera
- B. Cilindro
- C. Piramide Rettangolare
- D. Cono



- A. Piramide Triangolare
- B. Cono
- C. Cilindro
- D. Prisma Triangolare



- A. Piramide Triangolare
- B. Cubo
- C. Prisma Triangolare
- D. Cilindro

1. _____

2. _____

3. _____

4. _____

5. _____

6. _____

7. _____

8. _____

9. _____

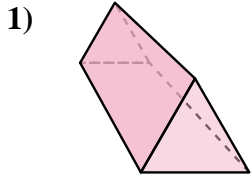
10. _____

11. _____

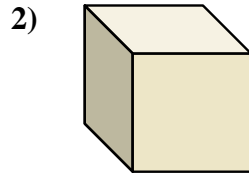
12. _____



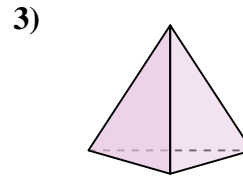
Determina quale scelta descrive **CORRETTAMENTE** la forma mostrata.



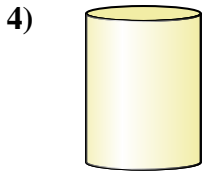
- A. Cono
- B. Prisma Triangolare
- C. Cilindro
- D. Sfera



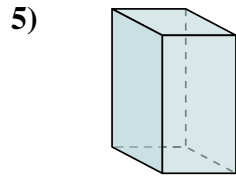
- A. Prisma Rettangolare
- B. Cubo
- C. Piramide Rettangolare
- D. Cilindro



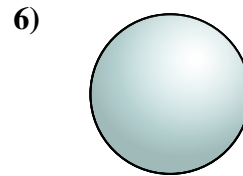
- A. Prisma Triangolare
- B. Piramide Triangolare
- C. Cilindro
- D. Prisma Rettangolare



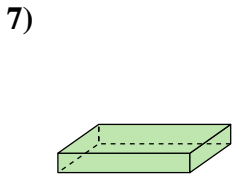
- A. Cubo
- B. Piramide Triangolare
- C. Prisma Rettangolare
- D. Cilindro



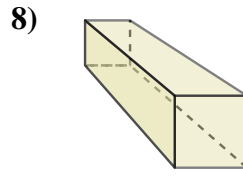
- A. Prisma Rettangolare
- B. Sfera
- C. Prisma Triangolare
- D. Piramide Rettangolare



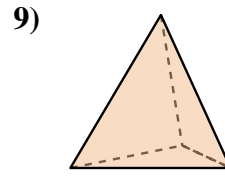
- A. Sfera
- B. Piramide Triangolare
- C. Cono
- D. Piramide Rettangolare



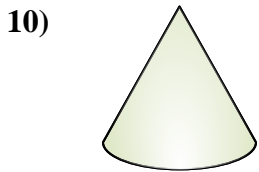
- A. Prisma Rettangolare
- B. Piramide Rettangolare
- C. Piramide Triangolare
- D. Prisma Triangolare



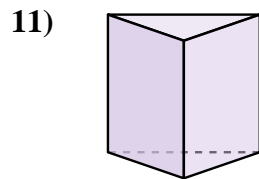
- A. Prisma Triangolare
- B. Sfera
- C. Prisma Rettangolare
- D. Cubo



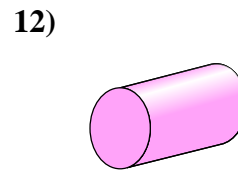
- A. Cubo
- B. Sfera
- C. Cilindro
- D. Piramide Triangolare



- A. Sfera
- B. Cilindro
- C. Piramide Rettangolare
- D. Cono



- A. Piramide Triangolare
- B. Cono
- C. Cilindro
- D. Prisma Triangolare



- A. Piramide Triangolare
- B. Cubo
- C. Prisma Triangolare
- D. Cilindro

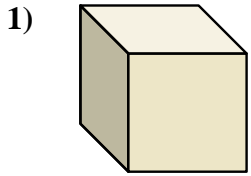
Risposte

- 1. **B**
- 2. **B**
- 3. **B**
- 4. **D**
- 5. **A**
- 6. **A**
- 7. **A**
- 8. **C**
- 9. **D**
- 10. **D**
- 11. **D**
- 12. **D**

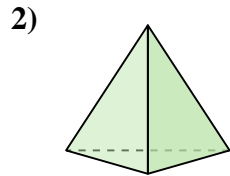


Determina quale scelta descrive CORREETTAMENTE la forma mostrata.

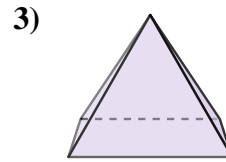
Risposte



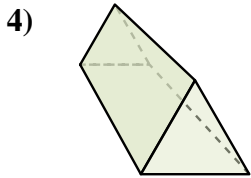
- A. Sfera
- B. Piramide Rettangolare
- C. Cubo
- D. Cilindro



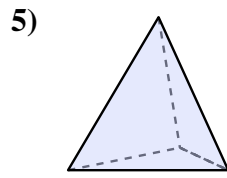
- A. Piramide Triangolare
- B. Cono
- C. Sfera
- D. Cilindro



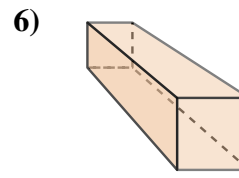
- A. Prisma Triangolare
- B. Piramide Triangolare
- C. Piramide Rettangolare
- D. Cilindro




- A. Prisma Rettangolare
- B. Prisma Triangolare
- C. Piramide Rettangolare
- D. Cilindro



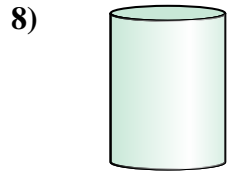
- A. Prisma Rettangolare
- B. Cubo
- C. Cilindro
- D. Piramide Triangolare



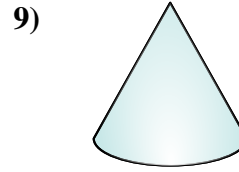
- A. Piramide Rettangolare
- B. Cilindro
- C. Prisma Rettangolare
- D. Cubo



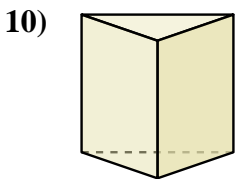
- A. Cono
- B. Cilindro
- C. Piramide Triangolare
- D. Prisma Rettangolare



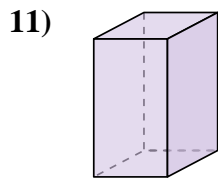
- A. Cilindro
- B. Piramide Rettangolare
- C. Prisma Rettangolare
- D. Cubo



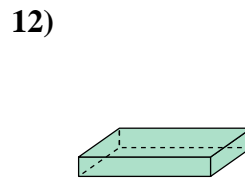
- A. Cono
- B. Piramide Triangolare
- C. Cubo
- D. Piramide Rettangolare



- A. Prisma Rettangolare
- B. Prisma Triangolare
- C. Cono
- D. Piramide Triangolare



- A. Prisma Triangolare
- B. Cono
- C. Sfera
- D. Prisma Rettangolare



- A. Piramide Rettangolare
- B. Piramide Triangolare
- C. Prisma Triangolare
- D. Prisma Rettangolare

1. _____

2. _____

3. _____

4. _____

5. _____

6. _____

7. _____

8. _____

9. _____

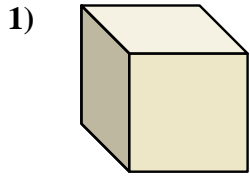
10. _____

11. _____

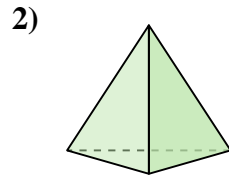
12. _____



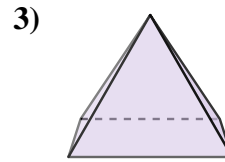
Determina quale scelta descrive **CORRETTAMENTE** la forma mostrata.



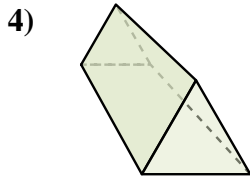
- A. Sfera
- B. Piramide Rettangolare
- C. Cubo
- D. Cilindro



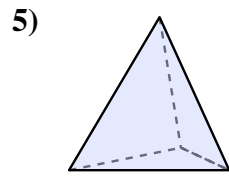
- A. Piramide Triangolare
- B. Cono
- C. Sfera
- D. Cilindro



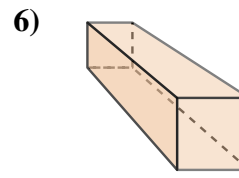
- A. Prisma Triangolare
- B. Piramide Triangolare
- C. Piramide Rettangolare
- D. Cilindro



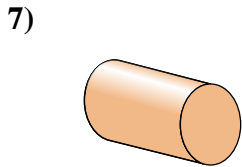
- A. Prisma Rettangolare
- B. Prisma Triangolare
- C. Piramide Rettangolare
- D. Cilindro



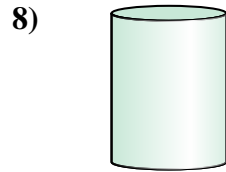
- A. Prisma Rettangolare
- B. Cubo
- C. Cilindro
- D. Piramide Triangolare



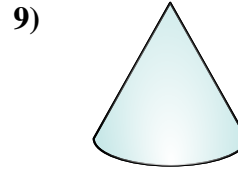
- A. Piramide Rettangolare
- B. Cilindro
- C. Prisma Rettangolare
- D. Cubo



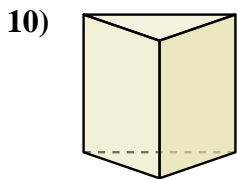
- A. Cono
- B. Cilindro
- C. Piramide Triangolare
- D. Prisma Rettangolare



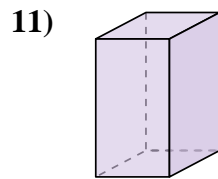
- A. Cilindro
- B. Piramide Rettangolare
- C. Prisma Rettangolare
- D. Cubo



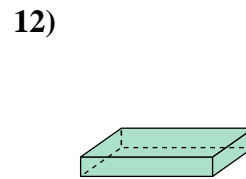
- A. Cono
- B. Piramide Triangolare
- C. Cubo
- D. Piramide Rettangolare



- A. Prisma Rettangolare
- B. Prisma Triangolare
- C. Cono
- D. Piramide Triangolare



- A. Prisma Triangolare
- B. Cono
- C. Sfera
- D. Prisma Rettangolare



- A. Piramide Rettangolare
- B. Piramide Triangolare
- C. Prisma Triangolare
- D. Prisma Rettangolare

Risposte

1. **C**

2. **A**

3. **C**

4. **B**

5. **D**

6. **C**

7. **B**

8. **A**

9. **A**

10. **B**

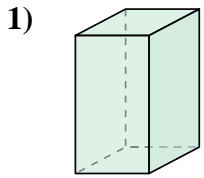
11. **D**

12. **D**

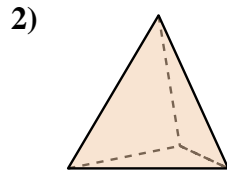


Determina quale scelta descrive CORREETTAMENTE la forma mostrata.

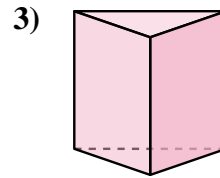
Risposte



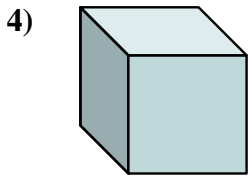
- A. Cono
- B. Prisma Rettangolare
- C. Piramide Rettangolare
- D. Piramide Triangolare



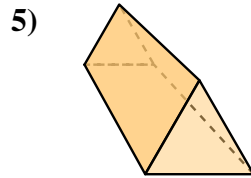
- A. Sfera
- B. Cubo
- C. Prisma Rettangolare
- D. Piramide Triangolare



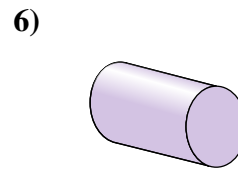
- A. Cubo
- B. Sfera
- C. Cono
- D. Prisma Triangolare



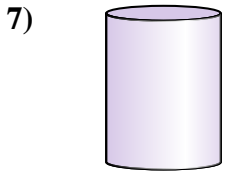
- A. Prisma Triangolare
- B. Sfera
- C. Cubo
- D. Piramide Triangolare



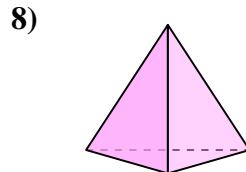
- A. Sfera
- B. Prisma Triangolare
- C. Cubo
- D. Piramide Rettangolare



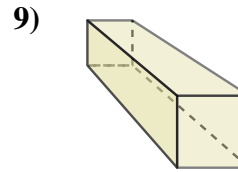
- A. Piramide Rettangolare
- B. Cubo
- C. Piramide Triangolare
- D. Cilindro



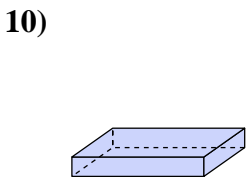
- A. Piramide Rettangolare
- B. Cilindro
- C. Piramide Triangolare
- D. Sfera



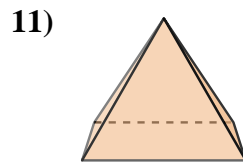
- A. Cilindro
- B. Cono
- C. Piramide Triangolare
- D. Cubo



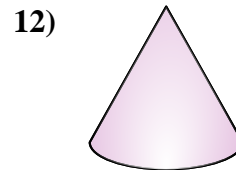
- A. Sfera
- B. Prisma Rettangolare
- C. Cilindro
- D. Cubo



- A. Prisma Rettangolare
- B. Cubo
- C. Piramide Triangolare
- D. Sfera



- A. Piramide Rettangolare
- B. Sfera
- C. Cono
- D. Prisma Rettangolare



- A. Piramide Rettangolare
- B. Cono
- C. Piramide Triangolare
- D. Cilindro

1. _____

2. _____

3. _____

4. _____

5. _____

6. _____

7. _____

8. _____

9. _____

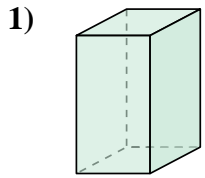
10. _____

11. _____

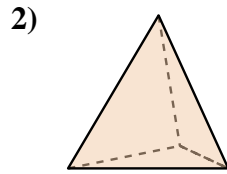
12. _____



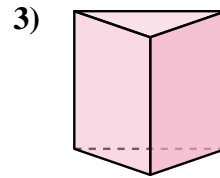
Determina quale scelta descrive CORREETTAMENTE la forma mostrata.



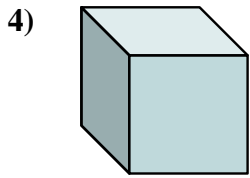
- A. Cono
- B. Prisma Rettangolare
- C. Piramide Rettangolare
- D. Piramide Triangolare



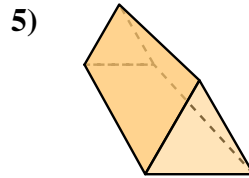
- A. Sfera
- B. Cubo
- C. Prisma Rettangolare
- D. Piramide Triangolare



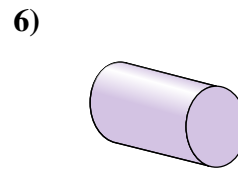
- A. Cubo
- B. Sfera
- C. Cono
- D. Prisma Triangolare



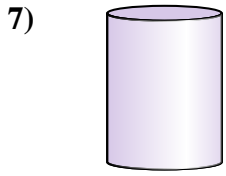
- A. Prisma Triangolare
- B. Sfera
- C. Cubo
- D. Piramide Triangolare



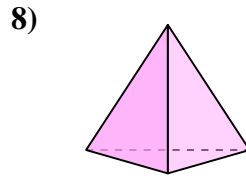
- A. Sfera
- B. Prisma Triangolare
- C. Cubo
- D. Piramide Rettangolare



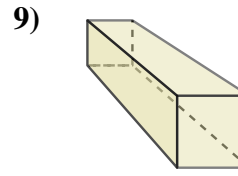
- A. Piramide Rettangolare
- B. Cubo
- C. Piramide Triangolare
- D. Cilindro



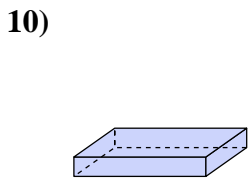
- A. Piramide Rettangolare
- B. Cilindro
- C. Piramide Triangolare
- D. Sfera



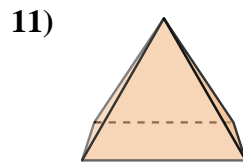
- A. Cilindro
- B. Cono
- C. Piramide Triangolare
- D. Cubo



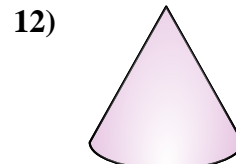
- A. Sfera
- B. Prisma Rettangolare
- C. Cilindro
- D. Cubo



- A. Prisma Rettangolare
- B. Cubo
- C. Piramide Triangolare
- D. Sfera



- A. Piramide Rettangolare
- B. Sfera
- C. Cono
- D. Prisma Rettangolare



- A. Piramide Rettangolare
- B. Cono
- C. Piramide Triangolare
- D. Cilindro

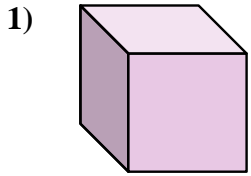
Risposte

- 1. **B**
- 2. **D**
- 3. **D**
- 4. **C**
- 5. **B**
- 6. **D**
- 7. **B**
- 8. **C**
- 9. **B**
- 10. **A**
- 11. **A**
- 12. **B**

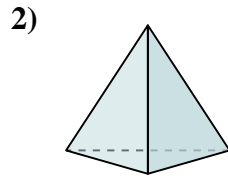


Determina quale scelta descrive CORREETTAMENTE la forma mostrata.

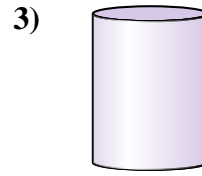
Risposte



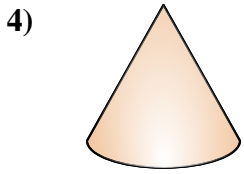
- A. Cubo
- B. Piramide Rettangolare
- C. Piramide Triangolare
- D. Prisma Triangolare



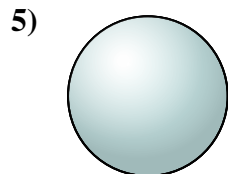
- A. Sfera
- B. Piramide Triangolare
- C. Piramide Rettangolare
- D. Cilindro



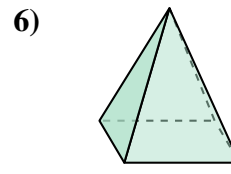
- A. Cilindro
- B. Piramide Rettangolare
- C. Piramide Triangolare
- D. Prisma Rettangolare



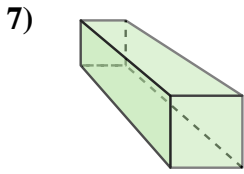
- A. Piramide Triangolare
- B. Cono
- C. Prisma Rettangolare
- D. Piramide Rettangolare



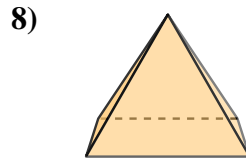
- A. Piramide Triangolare
- B. Piramide Rettangolare
- C. Prisma Rettangolare
- D. Sfera



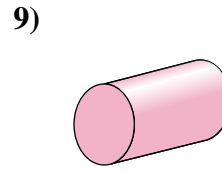
- A. Cubo
- B. Cilindro
- C. Piramide Rettangolare
- D. Prisma Triangolare



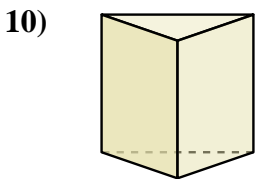
- A. Prisma Rettangolare
- B. Cubo
- C. Piramide Rettangolare
- D. Cilindro



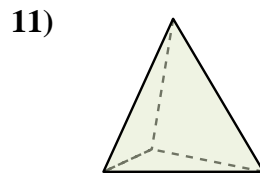
- A. Cubo
- B. Piramide Triangolare
- C. Prisma Triangolare
- D. Piramide Rettangolare



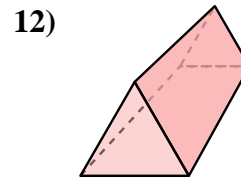
- A. Sfera
- B. Cono
- C. Cilindro
- D. Cubo



- A. Piramide Rettangolare
- B. Prisma Rettangolare
- C. Prisma Triangolare
- D. Piramide Triangolare



- A. Piramide Rettangolare
- B. Prisma Triangolare
- C. Piramide Triangolare
- D. Cilindro



- A. Prisma Triangolare
- B. Prisma Rettangolare
- C. Cubo
- D. Cono

1. _____

2. _____

3. _____

4. _____

5. _____

6. _____

7. _____

8. _____

9. _____

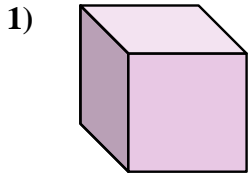
10. _____

11. _____

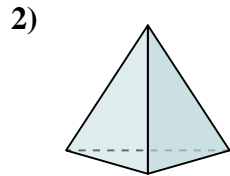
12. _____



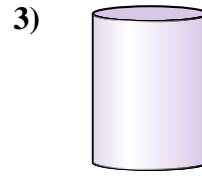
Determina quale scelta descrive **CORREETTAMENTE** la forma mostrata.



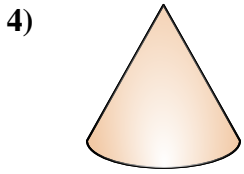
- A. Cubo
- B. Piramide Rettangolare
- C. Piramide Triangolare
- D. Prisma Triangolare



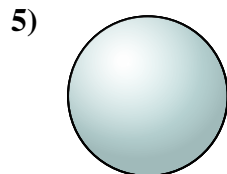
- A. Sfera
- B. Piramide Triangolare
- C. Piramide Rettangolare
- D. Cilindro



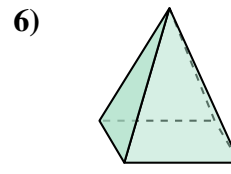
- A. Cilindro
- B. Piramide Rettangolare
- C. Piramide Triangolare
- D. Prisma Rettangolare



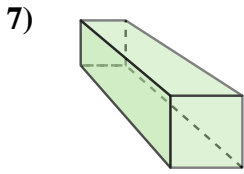
- A. Piramide Triangolare
- B. Cono
- C. Prisma Rettangolare
- D. Piramide Rettangolare



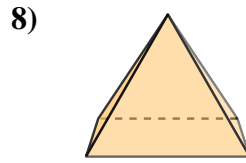
- A. Piramide Triangolare
- B. Piramide Rettangolare
- C. Prisma Rettangolare
- D. Sfera



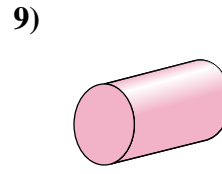
- A. Cubo
- B. Cilindro
- C. Piramide Rettangolare
- D. Prisma Triangolare



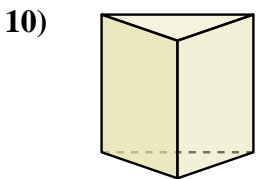
- A. Prisma Rettangolare
- B. Cubo
- C. Piramide Rettangolare
- D. Cilindro



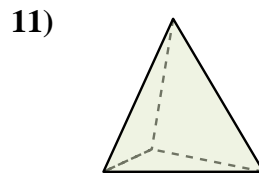
- A. Cubo
- B. Piramide Triangolare
- C. Prisma Triangolare
- D. Piramide Rettangolare



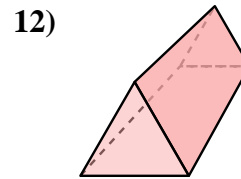
- A. Sfera
- B. Cono
- C. Cilindro
- D. Cubo



- A. Piramide Rettangolare
- B. Prisma Rettangolare
- C. Prisma Triangolare
- D. Piramide Triangolare



- A. Piramide Rettangolare
- B. Prisma Triangolare
- C. Piramide Triangolare
- D. Cilindro



- A. Prisma Triangolare
- B. Prisma Rettangolare
- C. Cubo
- D. Cono

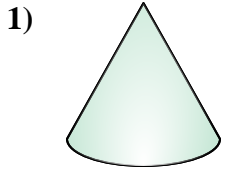
Risposte

- 1. **A**
- 2. **B**
- 3. **A**
- 4. **B**
- 5. **D**
- 6. **C**
- 7. **A**
- 8. **D**
- 9. **C**
- 10. **C**
- 11. **C**
- 12. **A**

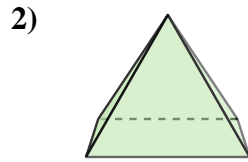


Determina quale scelta descrive CORREETTAMENTE la forma mostrata.

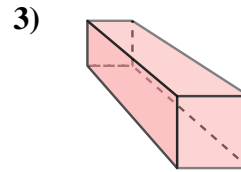
Risposte



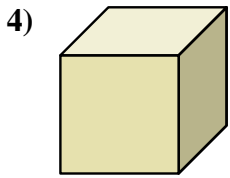
- A. Piramide Triangolare
- B. Cono
- C. Prisma Triangolare
- D. Cubo



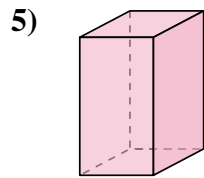
- A. Prisma Triangolare
- B. Piramide Triangolare
- C. Piramide Rettangolare
- D. Cono



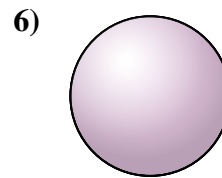
- A. Cilindro
- B. Prisma Rettangolare
- C. Cono
- D. Piramide Rettangolare



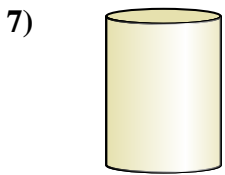
- A. Cono
- B. Cubo
- C. Cilindro
- D. Prisma Triangolare



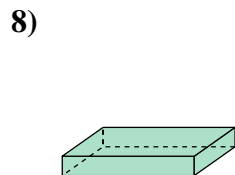
- A. Cilindro
- B. Cono
- C. Piramide Rettangolare
- D. Prisma Rettangolare



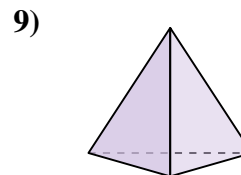
- A. Sfera
- B. Piramide Rettangolare
- C. Piramide Triangolare
- D. Prisma Triangolare



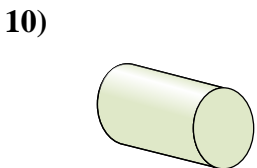
- A. Cilindro
- B. Piramide Rettangolare
- C. Prisma Rettangolare
- D. Cubo



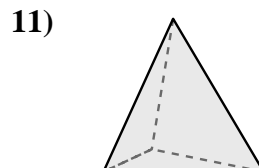
- A. Prisma Triangolare
- B. Piramide Triangolare
- C. Cilindro
- D. Prisma Rettangolare



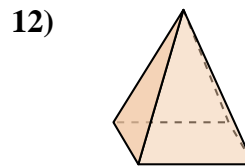
- A. Piramide Triangolare
- B. Piramide Rettangolare
- C. Cilindro
- D. Prisma Rettangolare



- A. Cilindro
- B. Cono
- C. Cubo
- D. Sfera



- A. Prisma Triangolare
- B. Piramide Rettangolare
- C. Piramide Triangolare
- D. Sfera



- A. Piramide Rettangolare
- B. Cono
- C. Prisma Rettangolare
- D. Sfera

1. _____

2. _____

3. _____

4. _____

5. _____

6. _____

7. _____

8. _____

9. _____

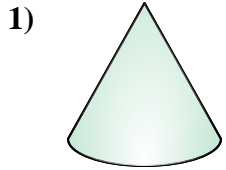
10. _____

11. _____

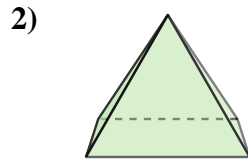
12. _____



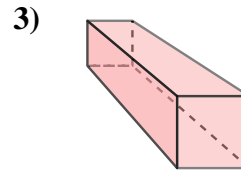
Determina quale scelta descrive CORREETTAMENTE la forma mostrata.



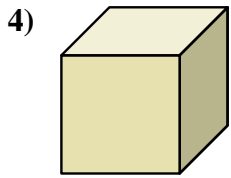
- A. Piramide Triangolare
- B. Cono
- C. Prisma Triangolare
- D. Cubo



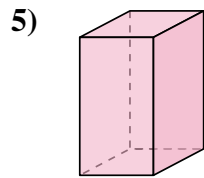
- A. Prisma Triangolare
- B. Piramide Triangolare
- C. Piramide Rettangolare
- D. Cono



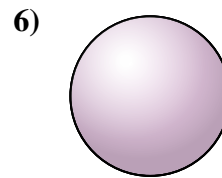
- A. Cilindro
- B. Prisma Rettangolare
- C. Cono
- D. Piramide Rettangolare



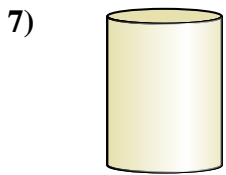
- A. Cono
- B. Cubo
- C. Cilindro
- D. Prisma Triangolare



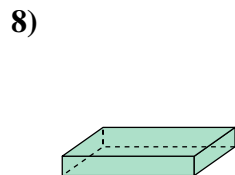
- A. Cilindro
- B. Cono
- C. Piramide Rettangolare
- D. Prisma Rettangolare



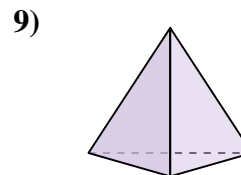
- A. Sfera
- B. Piramide Rettangolare
- C. Piramide Triangolare
- D. Prisma Triangolare



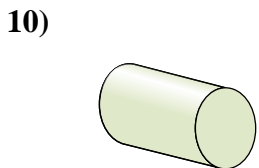
- A. Cilindro
- B. Piramide Rettangolare
- C. Prisma Rettangolare
- D. Cubo



- A. Prisma Triangolare
- B. Piramide Triangolare
- C. Cilindro
- D. Prisma Rettangolare



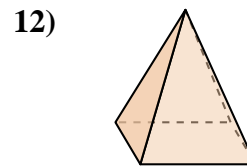
- A. Piramide Triangolare
- B. Piramide Rettangolare
- C. Cilindro
- D. Prisma Rettangolare



- A. Cilindro
- B. Cono
- C. Cubo
- D. Sfera



- A. Prisma Triangolare
- B. Piramide Rettangolare
- C. Piramide Triangolare
- D. Sfera



- A. Piramide Rettangolare
- B. Cono
- C. Prisma Rettangolare
- D. Sfera

Risposte

- 1. **B**
- 2. **C**
- 3. **B**
- 4. **B**
- 5. **D**
- 6. **A**
- 7. **A**
- 8. **D**
- 9. **A**
- 10. **A**
- 11. **C**
- 12. **A**