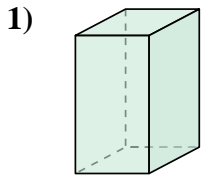


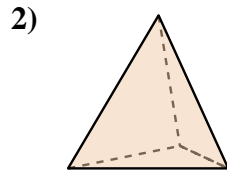


Determina quale scelta descrive CORREETTAMENTE la forma mostrata.

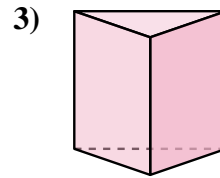
**Risposte**



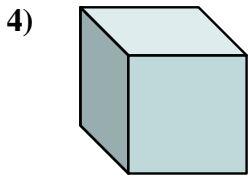
- A. Cono
- B. Prisma Rettangolare
- C. Piramide Rettangolare
- D. Piramide Triangolare



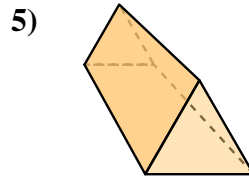
- A. Sfera
- B. Cubo
- C. Prisma Rettangolare
- D. Piramide Triangolare



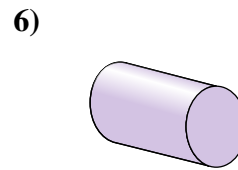
- A. Cubo
- B. Sfera
- C. Cono
- D. Prisma Triangolare



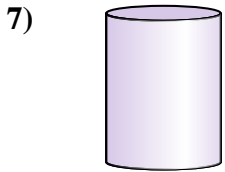
- A. Prisma Triangolare
- B. Sfera
- C. Cubo
- D. Piramide Triangolare



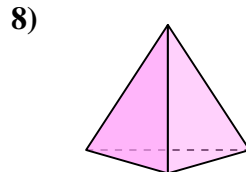
- A. Sfera
- B. Prisma Triangolare
- C. Cubo
- D. Piramide Rettangolare



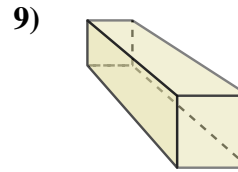
- A. Piramide Rettangolare
- B. Cubo
- C. Piramide Triangolare
- D. Cilindro



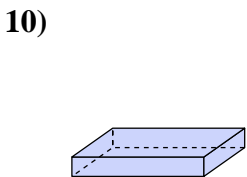
- A. Piramide Rettangolare
- B. Cilindro
- C. Piramide Triangolare
- D. Sfera



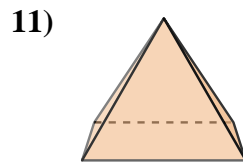
- A. Cilindro
- B. Cono
- C. Piramide Triangolare
- D. Cubo



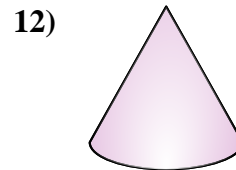
- A. Sfera
- B. Prisma Rettangolare
- C. Cilindro
- D. Cubo



- A. Prisma Rettangolare
- B. Cubo
- C. Piramide Triangolare
- D. Sfera



- A. Piramide Rettangolare
- B. Sfera
- C. Cono
- D. Prisma Rettangolare



- A. Piramide Rettangolare
- B. Cono
- C. Piramide Triangolare
- D. Cilindro

1. \_\_\_\_\_

2. \_\_\_\_\_

3. \_\_\_\_\_

4. \_\_\_\_\_

5. \_\_\_\_\_

6. \_\_\_\_\_

7. \_\_\_\_\_

8. \_\_\_\_\_

9. \_\_\_\_\_

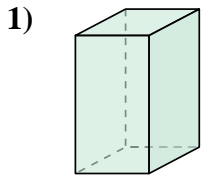
10. \_\_\_\_\_

11. \_\_\_\_\_

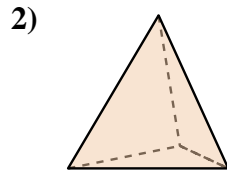
12. \_\_\_\_\_



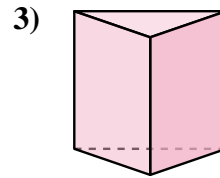
Determina quale scelta descrive **CORRETTAMENTE** la forma mostrata.



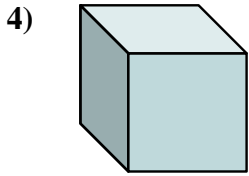
- A. Cono
- B. Prisma Rettangolare
- C. Piramide Rettangolare
- D. Piramide Triangolare



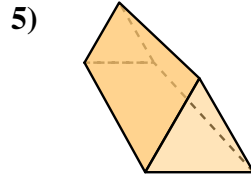
- A. Sfera
- B. Cubo
- C. Prisma Rettangolare
- D. Piramide Triangolare



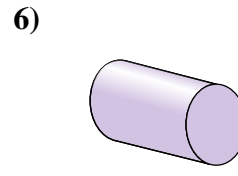
- A. Cubo
- B. Sfera
- C. Cono
- D. Prisma Triangolare



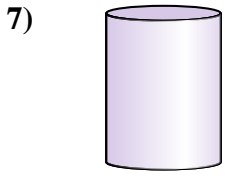
- A. Prisma Triangolare
- B. Sfera
- C. Cubo
- D. Piramide Triangolare



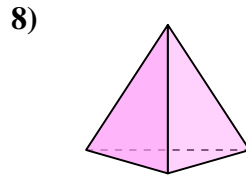
- A. Sfera
- B. Prisma Triangolare
- C. Cubo
- D. Piramide Rettangolare



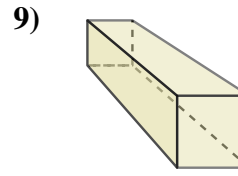
- A. Piramide Rettangolare
- B. Cubo
- C. Piramide Triangolare
- D. Cilindro



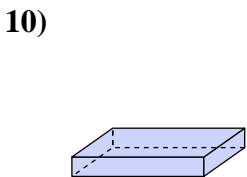
- A. Piramide Rettangolare
- B. Cilindro
- C. Piramide Triangolare
- D. Sfera



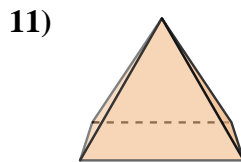
- A. Cilindro
- B. Cono
- C. Piramide Triangolare
- D. Cubo



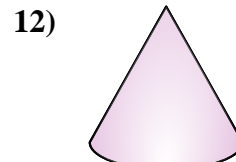
- A. Sfera
- B. Prisma Rettangolare
- C. Cilindro
- D. Cubo



- A. Prisma Rettangolare
- B. Cubo
- C. Piramide Triangolare
- D. Sfera



- A. Piramide Rettangolare
- B. Sfera
- C. Cono
- D. Prisma Rettangolare



- A. Piramide Rettangolare
- B. Cono
- C. Piramide Triangolare
- D. Cilindro

**Risposte**

1. **B**

2. **D**

3. **D**

4. **C**

5. **B**

6. **D**

7. **B**

8. **C**

9. **B**

10. **A**

11. **A**

12. **B**