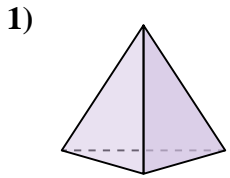


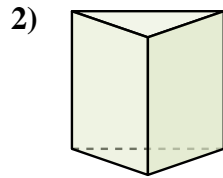


Determina quale scelta descrive CORRETTAMENTE la forma mostrata.

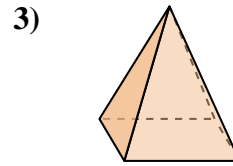
Risposte



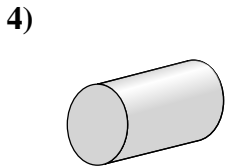
- A. Cubo
- B. Sfera
- C. Prisma Rettangolare
- D. Piramide Triangolare



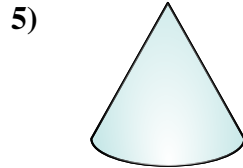
- A. Prisma Triangolare
- B. Prisma Rettangolare
- C. Sfera
- D. Piramide Triangolare



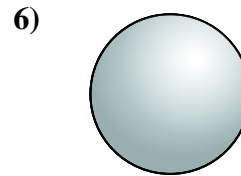
- A. Sfera
- B. Piramide Triangolare
- C. Piramide Rettangolare
- D. Cilindro



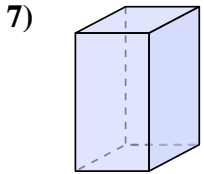
- A. Piramide Triangolare
- B. Sfera
- C. Cilindro
- D. Cono



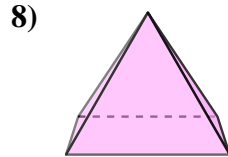
- A. Cono
- B. Prisma Rettangolare
- C. Piramide Triangolare
- D. Cubo



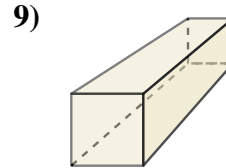
- A. Cono
- B. Cilindro
- C. Sfera
- D. Prisma Rettangolare



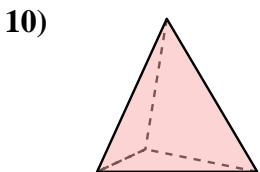
- A. Piramide Rettangolare
- B. Prisma Triangolare
- C. Cono
- D. Prisma Rettangolare



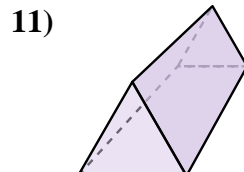
- A. Cubo
- B. Prisma Triangolare
- C. Piramide Rettangolare
- D. Prisma Rettangolare



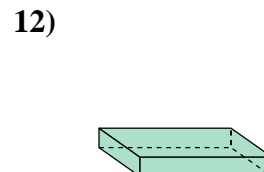
- A. Piramide Triangolare
- B. Prisma Rettangolare
- C. Sfera
- D. Piramide Rettangolare



- A. Piramide Triangolare
- B. Cilindro
- C. Sfera
- D. Cono



- A. Sfera
- B. Piramide Rettangolare
- C. Prisma Triangolare
- D. Prisma Rettangolare



- A. Cono
- B. Prisma Rettangolare
- C. Sfera
- D. Cilindro

1. _____

2. _____

3. _____

4. _____

5. _____

6. _____

7. _____

8. _____

9. _____

10. _____

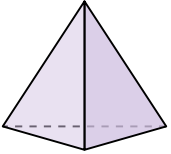
11. _____

12. _____



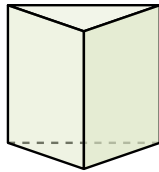
Determina quale scelta descrive **CORRETTAMENTE** la forma mostrata.

1)



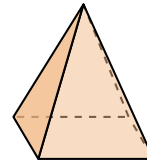
- A. Cubo
- B. Sfera
- C. Prisma Rettangolare
- D. Piramide Triangolare

2)



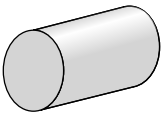
- A. Prisma Triangolare
- B. Prisma Rettangolare
- C. Sfera
- D. Piramide Triangolare

3)



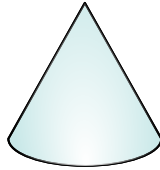
- A. Sfera
- B. Piramide Triangolare
- C. Piramide Rettangolare
- D. Cilindro

4)




- A. Piramide Triangolare
- B. Sfera
- C. Cilindro
- D. Cono

5)



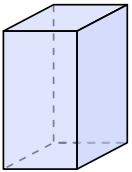
- A. Cono
- B. Prisma Rettangolare
- C. Piramide Triangolare
- D. Cubo

6)



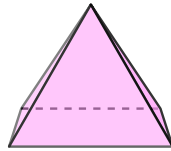
- A. Cono
- B. Cilindro
- C. Sfera
- D. Prisma Rettangolare

7)



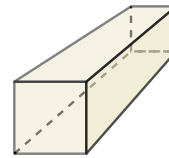
- A. Piramide Rettangolare
- B. Prisma Triangolare
- C. Cono
- D. Prisma Rettangolare

8)



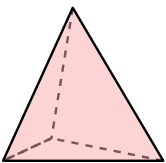
- A. Cubo
- B. Prisma Triangolare
- C. Piramide Rettangolare
- D. Prisma Rettangolare

9)



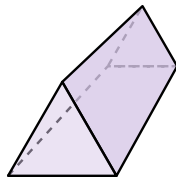
- A. Piramide Triangolare
- B. Prisma Rettangolare
- C. Sfera
- D. Piramide Rettangolare

10)



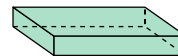
- A. Piramide Triangolare
- B. Cilindro
- C. Sfera
- D. Cono

11)



- A. Sfera
- B. Piramide Rettangolare
- C. Prisma Triangolare
- D. Prisma Rettangolare

12)



- A. Cono
- B. Prisma Rettangolare
- C. Sfera
- D. Cilindro

Risposte

1. **D**

2. **A**

3. **C**

4. **C**

5. **A**

6. **C**

7. **D**

8. **C**

9. **B**

10. **A**

11. **C**

12. **B**