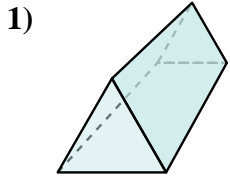


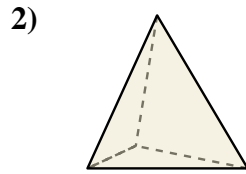


Determina quale scelta descrive CORREETTAMENTE la forma mostrata.

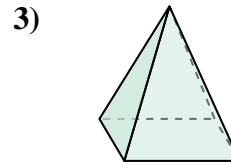
Risposte



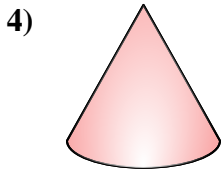
- A. Prisma Triangolare
- B. Cubo
- C. Piramide Triangolare
- D. Piramide Rettangolare



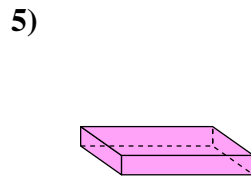
- A. Prisma Triangolare
- B. Piramide Rettangolare
- C. Piramide Triangolare
- D. Sfera



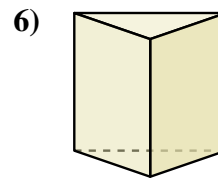
- A. Cono
- B. Cilindro
- C. Piramide Rettangolare
- D. Prisma Rettangolare



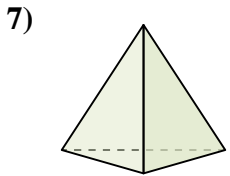
- A. Cilindro
- B. Prisma Rettangolare
- C. Cono
- D. Sfera



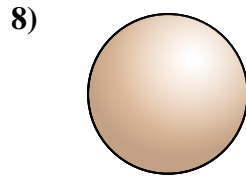
- A. Prisma Rettangolare
- B. Cubo
- C. Piramide Triangolare
- D. Cilindro



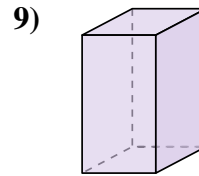
- A. Piramide Rettangolare
- B. Piramide Triangolare
- C. Prisma Triangolare
- D. Sfera



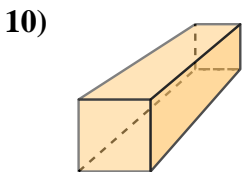
- A. Sfera
- B. Piramide Triangolare
- C. Prisma Triangolare
- D. Prisma Rettangolare



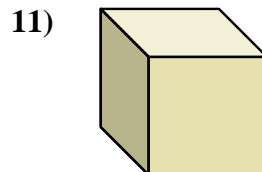
- A. Cubo
- B. Sfera
- C. Prisma Rettangolare
- D. Cono



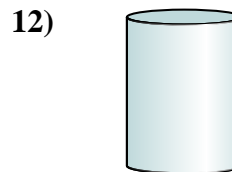
- A. Cono
- B. Piramide Triangolare
- C. Prisma Triangolare
- D. Prisma Rettangolare



- A. Prisma Rettangolare
- B. Cubo
- C. Prisma Triangolare
- D. Piramide Rettangolare



- A. Prisma Triangolare
- B. Cilindro
- C. Sfera
- D. Cubo



- A. Cilindro
- B. Prisma Triangolare
- C. Sfera
- D. Piramide Triangolare

1. _____

2. _____

3. _____

4. _____

5. _____

6. _____

7. _____

8. _____

9. _____

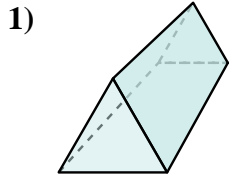
10. _____

11. _____

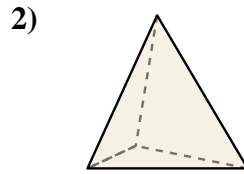
12. _____



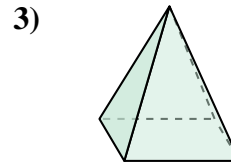
Determina quale scelta descrive **CORREETTAMENTE** la forma mostrata.



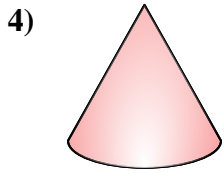
- A. Prisma Triangolare
- B. Cubo
- C. Piramide Triangolare
- D. Piramide Rettangolare



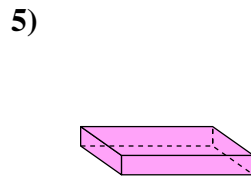
- A. Prisma Triangolare
- B. Piramide Rettangolare
- C. Piramide Triangolare
- D. Sfera



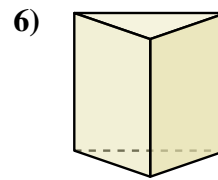
- A. Cono
- B. Cilindro
- C. Piramide Rettangolare
- D. Prisma Rettangolare



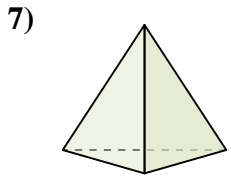
- A. Cilindro
- B. Prisma Rettangolare
- C. Cono
- D. Sfera



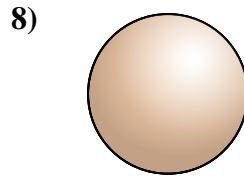
- A. Prisma Rettangolare
- B. Cubo
- C. Piramide Triangolare
- D. Cilindro



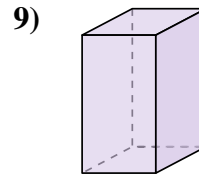
- A. Piramide Rettangolare
- B. Piramide Triangolare
- C. Prisma Triangolare
- D. Sfera



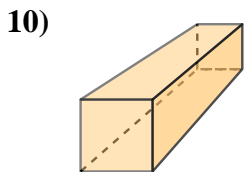
- A. Sfera
- B. Piramide Triangolare
- C. Prisma Triangolare
- D. Prisma Rettangolare



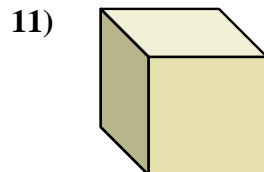
- A. Cubo
- B. Sfera
- C. Prisma Rettangolare
- D. Cono



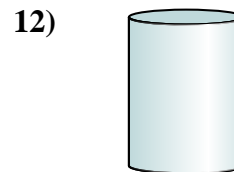
- A. Cono
- B. Piramide Triangolare
- C. Prisma Triangolare
- D. Prisma Rettangolare



- A. Prisma Rettangolare
- B. Cubo
- C. Prisma Triangolare
- D. Piramide Rettangolare



- A. Prisma Triangolare
- B. Cilindro
- C. Sfera
- D. Cubo



- A. Cilindro
- B. Prisma Triangolare
- C. Sfera
- D. Piramide Triangolare

Risposte

1. **A**

2. **C**

3. **C**

4. **C**

5. **A**

6. **C**

7. **B**

8. **B**

9. **D**

10. **A**

11. **D**

12. **A**