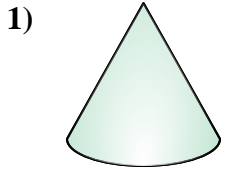


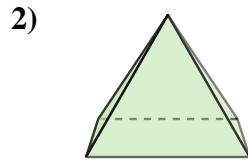


Determina quale scelta descrive CORREETTAMENTE la forma mostrata.

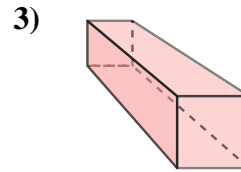
**Risposte**



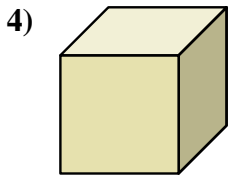
- A. Piramide Triangolare
- B. Cono
- C. Prisma Triangolare
- D. Cubo



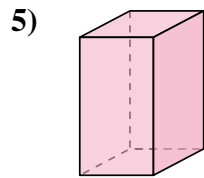
- A. Prisma Triangolare
- B. Piramide Triangolare
- C. Piramide Rettangolare
- D. Cono



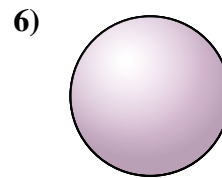
- A. Cilindro
- B. Prisma Rettangolare
- C. Cono
- D. Piramide Rettangolare



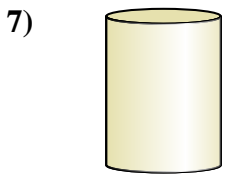
- A. Cono
- B. Cubo
- C. Cilindro
- D. Prisma Triangolare



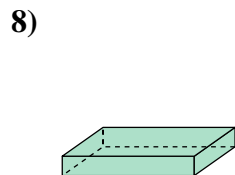
- A. Cilindro
- B. Cono
- C. Piramide Rettangolare
- D. Prisma Rettangolare



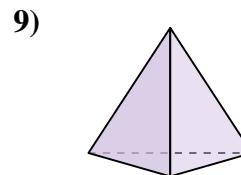
- A. Sfera
- B. Piramide Rettangolare
- C. Piramide Triangolare
- D. Prisma Triangolare



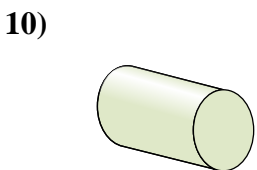
- A. Cilindro
- B. Piramide Rettangolare
- C. Prisma Rettangolare
- D. Cubo



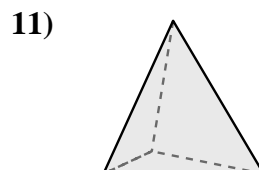
- A. Prisma Triangolare
- B. Piramide Triangolare
- C. Cilindro
- D. Prisma Rettangolare



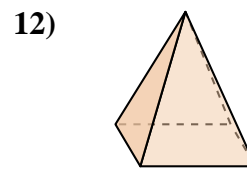
- A. Piramide Triangolare
- B. Piramide Rettangolare
- C. Cilindro
- D. Prisma Rettangolare



- A. Cilindro
- B. Cono
- C. Cubo
- D. Sfera



- A. Prisma Triangolare
- B. Piramide Rettangolare
- C. Piramide Triangolare
- D. Sfera



- A. Piramide Rettangolare
- B. Cono
- C. Prisma Rettangolare
- D. Sfera

1. \_\_\_\_\_

2. \_\_\_\_\_

3. \_\_\_\_\_

4. \_\_\_\_\_

5. \_\_\_\_\_

6. \_\_\_\_\_

7. \_\_\_\_\_

8. \_\_\_\_\_

9. \_\_\_\_\_

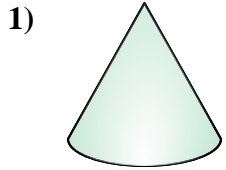
10. \_\_\_\_\_

11. \_\_\_\_\_

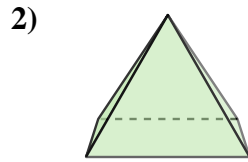
12. \_\_\_\_\_



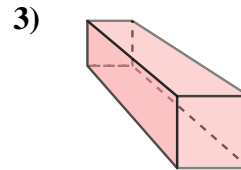
Determina quale scelta descrive CORRETTAMENTE la forma mostrata.



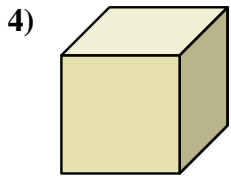
- A. Piramide Triangolare
- B. Cono
- C. Prisma Triangolare
- D. Cubo



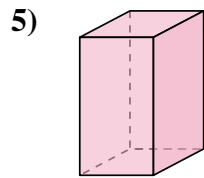
- A. Prisma Triangolare
- B. Piramide Triangolare
- C. Piramide Rettangolare
- D. Cono



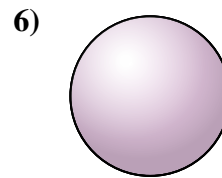
- A. Cilindro
- B. Prisma Rettangolare
- C. Cono
- D. Piramide Rettangolare



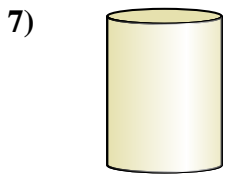
- A. Cono
- B. Cubo
- C. Cilindro
- D. Prisma Triangolare



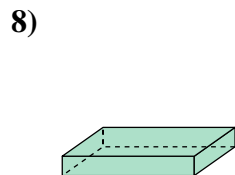
- A. Cilindro
- B. Cono
- C. Piramide Rettangolare
- D. Prisma Rettangolare



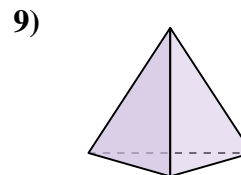
- A. Sfera
- B. Piramide Rettangolare
- C. Piramide Triangolare
- D. Prisma Triangolare



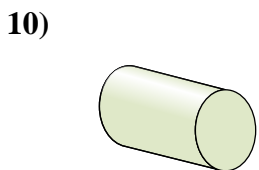
- A. Cilindro
- B. Piramide Rettangolare
- C. Prisma Rettangolare
- D. Cubo



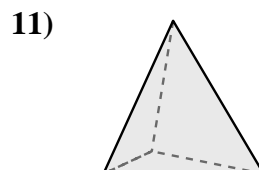
- A. Prisma Triangolare
- B. Piramide Triangolare
- C. Cilindro
- D. Prisma Rettangolare



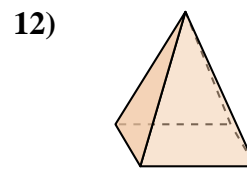
- A. Piramide Triangolare
- B. Piramide Rettangolare
- C. Cilindro
- D. Prisma Rettangolare



- A. Cilindro
- B. Cono
- C. Cubo
- D. Sfera



- A. Prisma Triangolare
- B. Piramide Rettangolare
- C. Piramide Triangolare
- D. Sfera



- A. Piramide Rettangolare
- B. Cono
- C. Prisma Rettangolare
- D. Sfera

**Risposte**

- 1.     **B**
- 2.     **C**
- 3.     **B**
- 4.     **B**
- 5.     **D**
- 6.     **A**
- 7.     **A**
- 8.     **D**
- 9.     **A**
- 10.     **A**
- 11.     **C**
- 12.     **A**