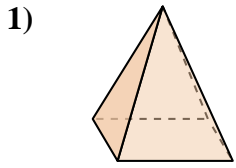


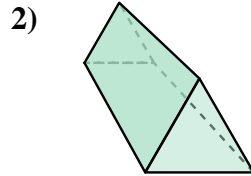


Determina quale scelta descrive CORREETTAMENTE la forma mostrata.

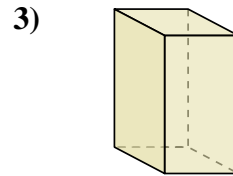
Risposte



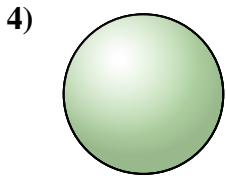
- A. Sfera
- B. Cilindro
- C. Cubo
- D. Piramide Rettangolare



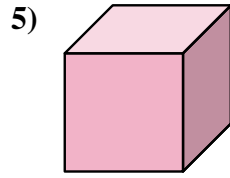
- A. Cono
- B. Prisma Triangolare
- C. Sfera
- D. Cubo



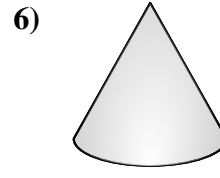
- A. Cilindro
- B. Prisma Triangolare
- C. Piramide Rettangolare
- D. Prisma Rettangolare



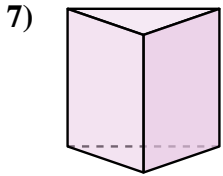
- A. Prisma Rettangolare
- B. Cilindro
- C. Sfera
- D. Cubo



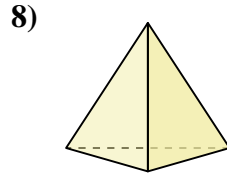
- A. Prisma Triangolare
- B. Cubo
- C. Sfera
- D. Piramide Triangolare



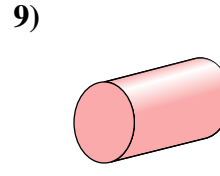
- A. Cono
- B. Cubo
- C. Cilindro
- D. Prisma Rettangolare



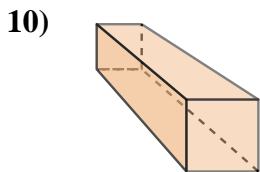
- A. Cilindro
- B. Prisma Triangolare
- C. Piramide Rettangolare
- D. Piramide Triangolare



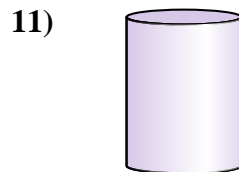
- A. Piramide Triangolare
- B. Cilindro
- C. Piramide Rettangolare
- D. Prisma Triangolare



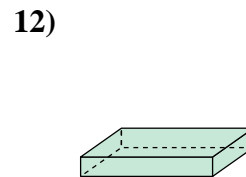
- A. Piramide Triangolare
- B. Cono
- C. Sfera
- D. Cilindro



- A. Cilindro
- B. Cono
- C. Prisma Triangolare
- D. Prisma Rettangolare



- A. Cilindro
- B. Sfera
- C. Piramide Rettangolare
- D. Cubo



- A. Cubo
- B. Piramide Rettangolare
- C. Piramide Triangolare
- D. Prisma Rettangolare

1. _____

2. _____

3. _____

4. _____

5. _____

6. _____

7. _____

8. _____

9. _____

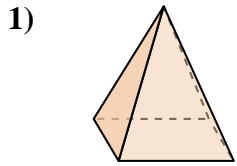
10. _____

11. _____

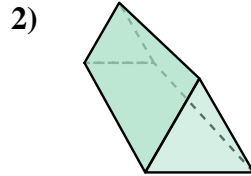
12. _____



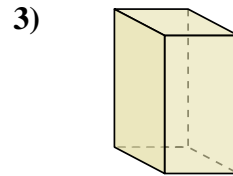
Determina quale scelta descrive CORREETTAMENTE la forma mostrata.



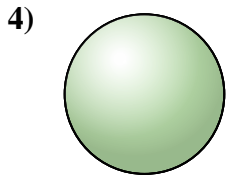
- A. Sfera
- B. Cilindro
- C. Cubo
- D. Piramide Rettangolare



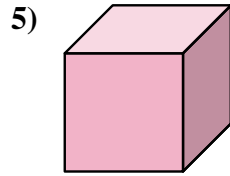
- A. Cono
- B. Prisma Triangolare
- C. Sfera
- D. Cubo



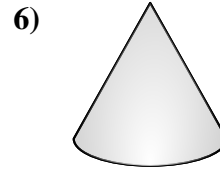
- A. Cilindro
- B. Prisma Triangolare
- C. Piramide Rettangolare
- D. Prisma Rettangolare



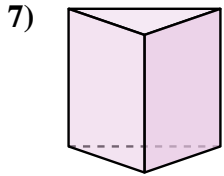
- A. Prisma Rettangolare
- B. Cilindro
- C. Sfera
- D. Cubo



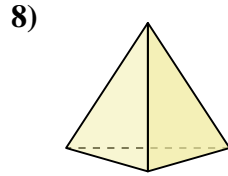
- A. Prisma Triangolare
- B. Cubo
- C. Sfera
- D. Piramide Triangolare



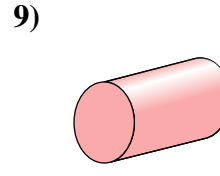
- A. Cono
- B. Cubo
- C. Cilindro
- D. Prisma Rettangolare



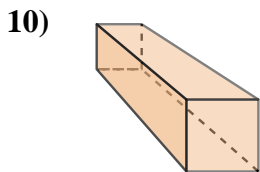
- A. Cilindro
- B. Prisma Triangolare
- C. Piramide Rettangolare
- D. Piramide Triangolare



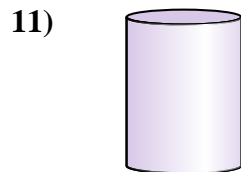
- A. Piramide Triangolare
- B. Cilindro
- C. Piramide Rettangolare
- D. Prisma Triangolare



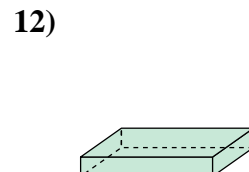
- A. Piramide Triangolare
- B. Cono
- C. Sfera
- D. Cilindro



- A. Cilindro
- B. Cono
- C. Prisma Triangolare
- D. Prisma Rettangolare



- A. Cilindro
- B. Sfera
- C. Piramide Rettangolare
- D. Cubo



- A. Cubo
- B. Piramide Rettangolare
- C. Piramide Triangolare
- D. Prisma Rettangolare

Risposte

- 1. **D**
- 2. **B**
- 3. **D**
- 4. **C**
- 5. **B**
- 6. **A**
- 7. **B**
- 8. **A**
- 9. **D**
- 10. **D**
- 11. **A**
- 12. **D**