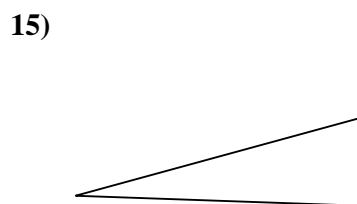
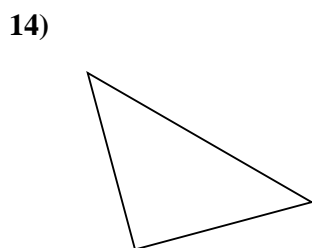
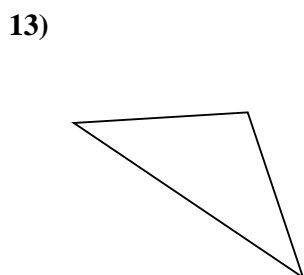
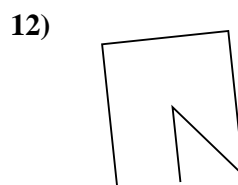
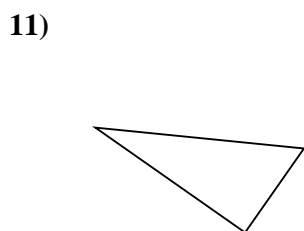
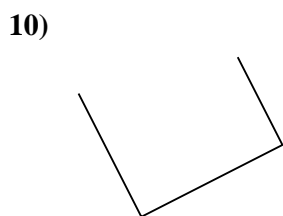
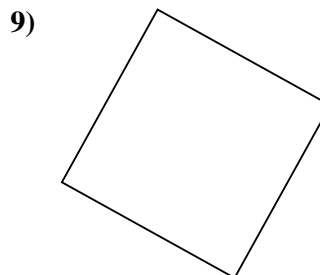
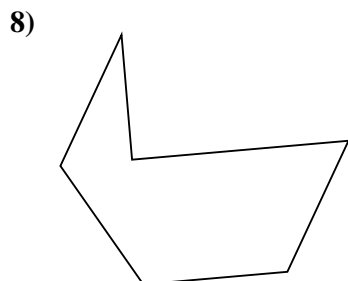
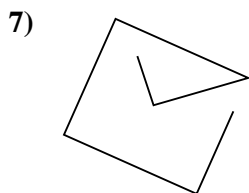
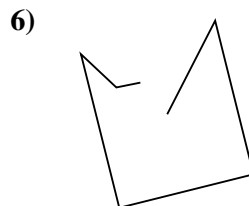
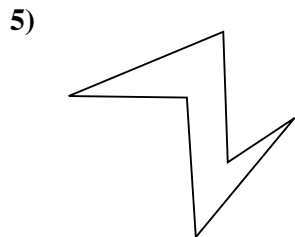
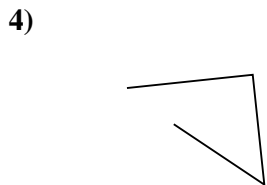
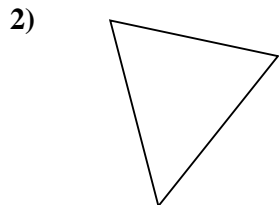
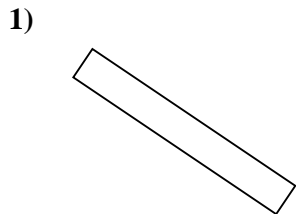




Determina se le figure rappresentate sono "Triangolo", "Quadrato", "Rettangolo", "Esagono" o "Altro".

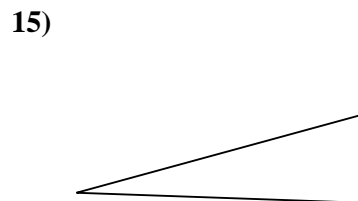
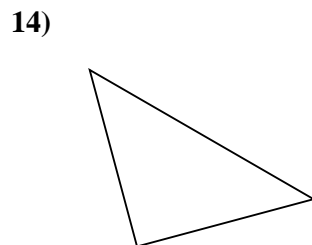
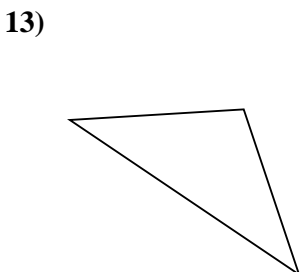
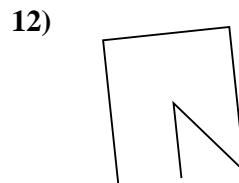
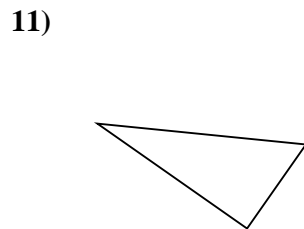
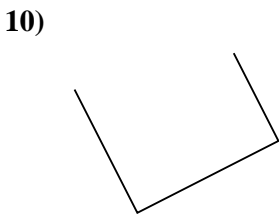
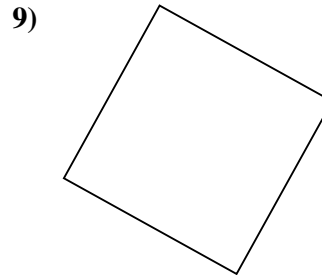
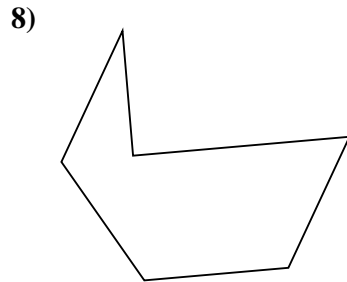
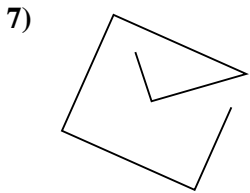
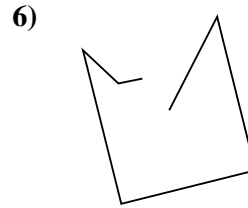
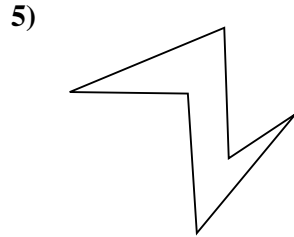
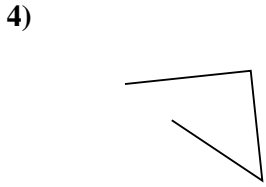
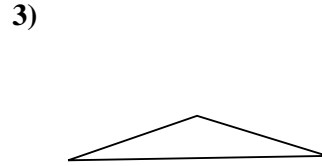
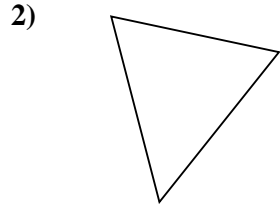
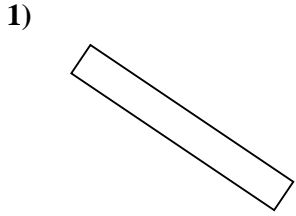


Risposte

- 1. _____
- 2. _____
- 3. _____
- 4. _____
- 5. _____
- 6. _____
- 7. _____
- 8. _____
- 9. _____
- 10. _____
- 11. _____
- 12. _____
- 13. _____
- 14. _____
- 15. _____



Determina se le figure rappresentate sono "Triangolo", "Quadrato", "Rettangolo", "Esagono" o "Altro".



Risposte

1. Rettangolo

2. Triangolo

3. Triangolo

4. Altro

5. Esagono

6. Altro

7. Altro

8. Esagono

9. Quadrato

10. Altro

11. Triangolo

12. Altro

13. Triangolo

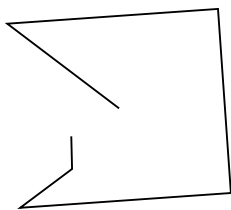
14. Triangolo

15. Triangolo




Determina se le figure rappresentate sono "Triangolo", "Quadrato", "Rettangolo", "Esagono" o "Altro".

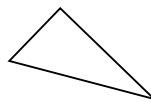
1)



2)



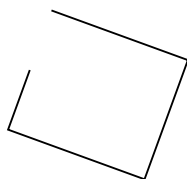
3)



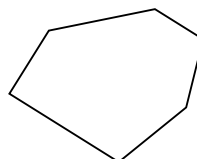
4)



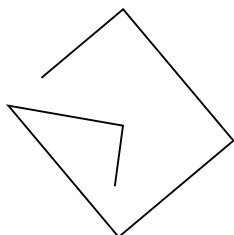
5)



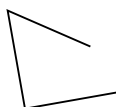
6)



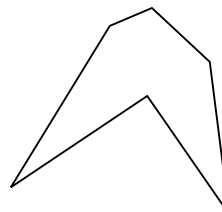
7)



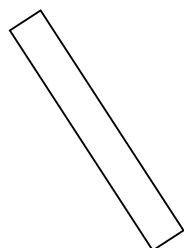
8)



9)



10)



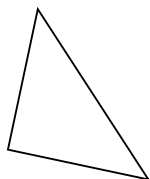
11)



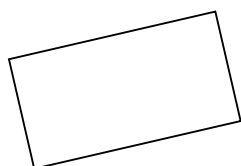
12)



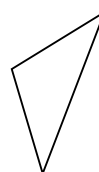
13)



14)



15)



Risposte

1. _____

2. _____

3. _____

4. _____

5. _____

6. _____

7. _____

8. _____

9. _____

10. _____

11. _____

12. _____

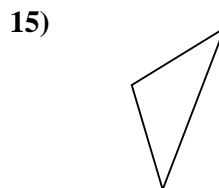

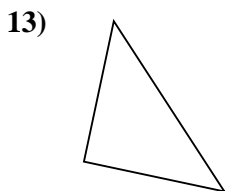
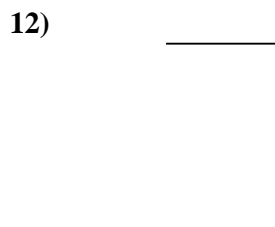
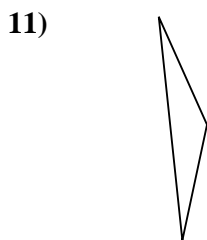
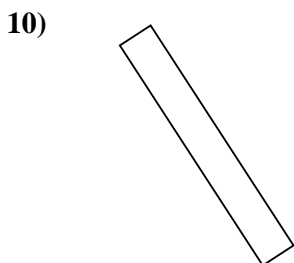
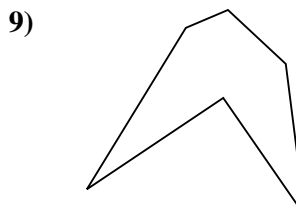
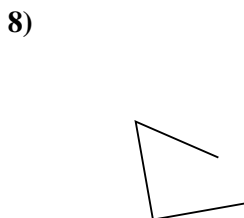
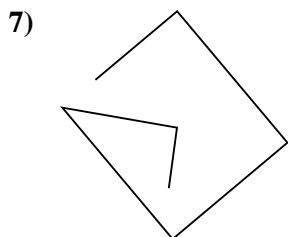
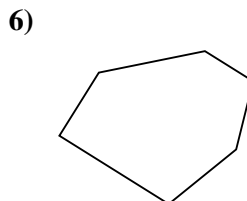
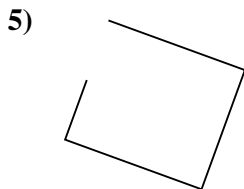
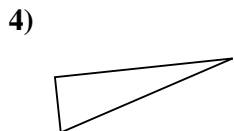
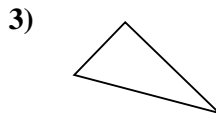
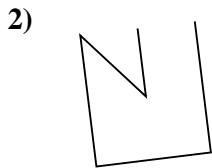
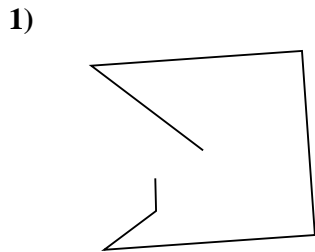
13. _____

14. _____

15. _____



Determina se le figure rappresentate sono "Triangolo", "Quadrato", "Rettangolo", "Esagono" o "Altro".



Risposte

1. Altro

2. Altro

3. Triangolo

4. Triangolo

5. Altro

6. Esagono

7. Altro

8. Altro

9. Esagono

10. Rettangolo

11. Triangolo

12. Altro

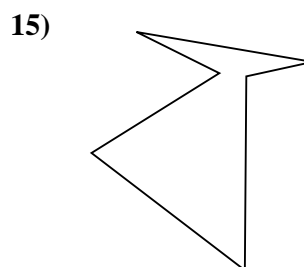
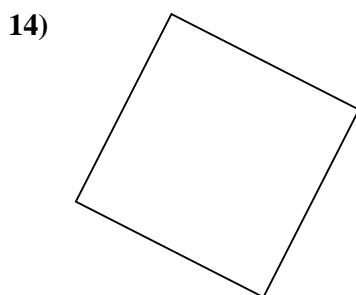
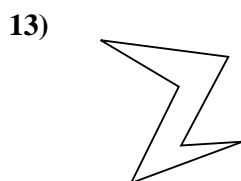
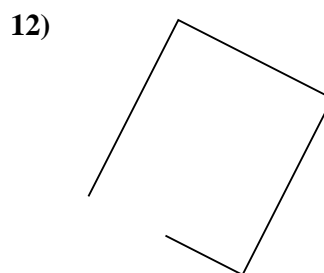
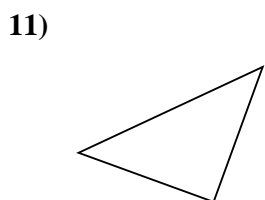
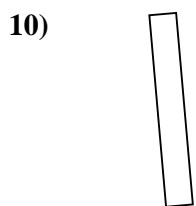
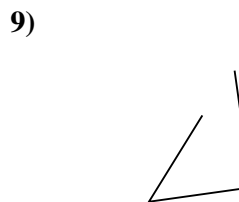
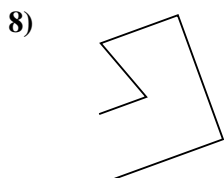
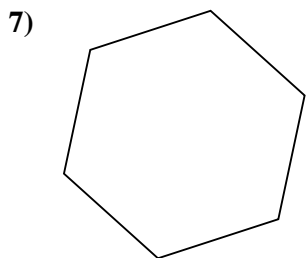
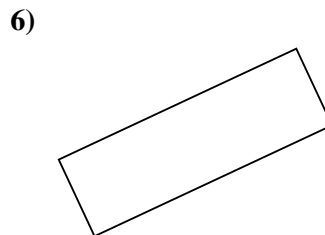
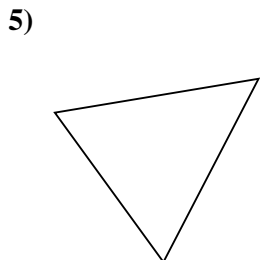
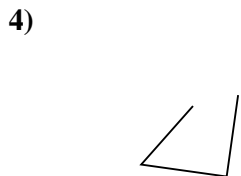
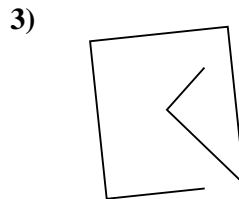
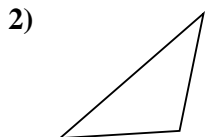
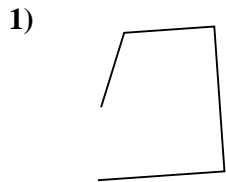
13. Triangolo

14. Rettangolo

15. Triangolo



Determina se le figure rappresentate sono "Triangolo", "Quadrato", "Rettangolo", "Esagono" o "Altro".



Risposte

1. _____

2. _____

3. _____

4. _____

5. _____

6. _____

7. _____

8. _____

9. _____

10. _____

11. _____

12. _____

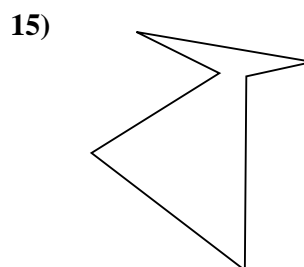
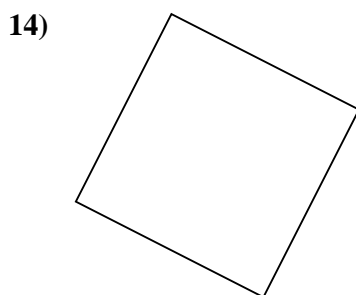
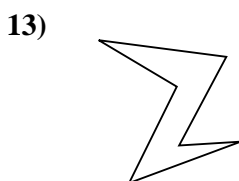
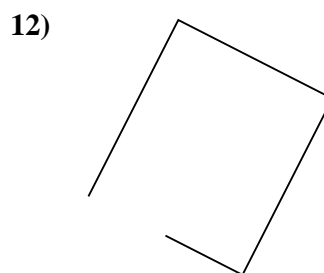
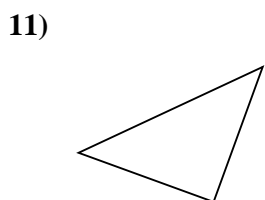
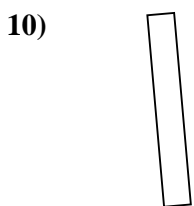
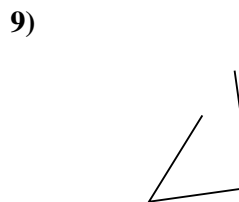
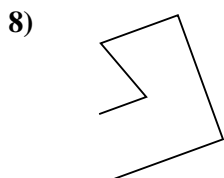
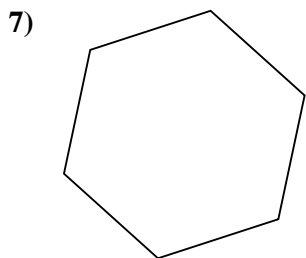
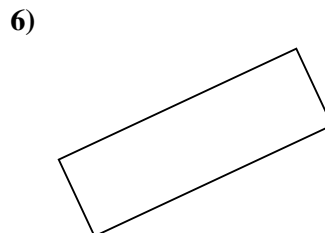
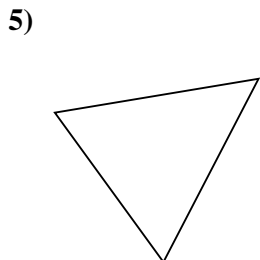
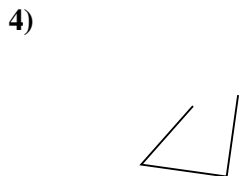
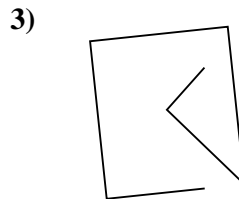
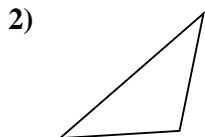
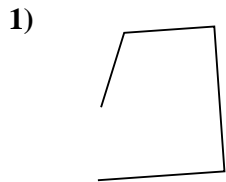
13. _____

14. _____

15. _____



Determina se le figure rappresentate sono "Triangolo", "Quadrato", "Rettangolo", "Esagono" o "Altro".



Risposte

1. Altro

2. Triangolo

3. Altro

4. Altro

5. Triangolo

6. Rettangolo

7. Esagono

8. Altro

9. Altro

10. Rettangolo

11. Triangolo

12. Altro

13. Esagono

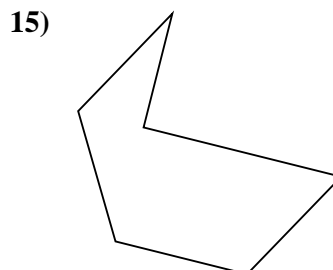
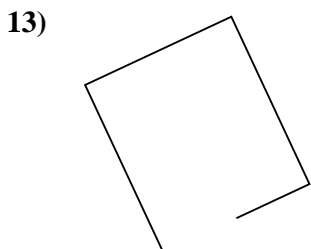
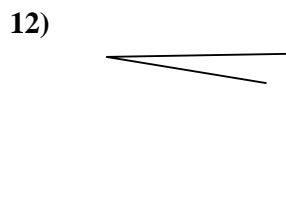
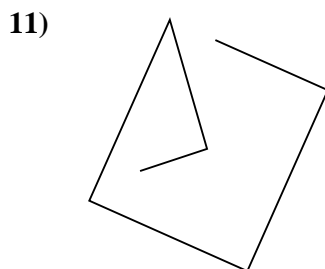
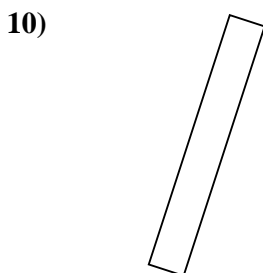
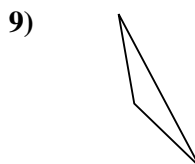

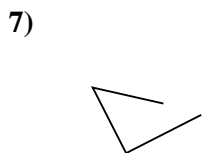
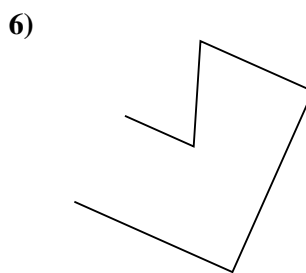

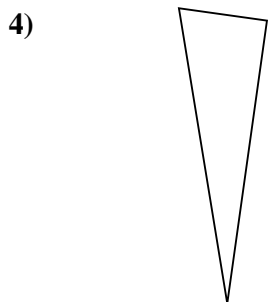
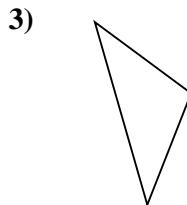
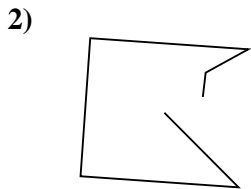
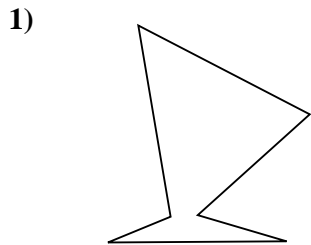
14. Quadrato

15. Esagono



Determina se le figure rappresentate sono "Triangolo", "Quadrato", "Rettangolo", "Esagono" o "Altro".

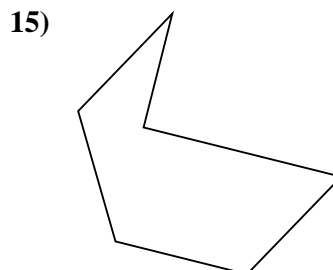

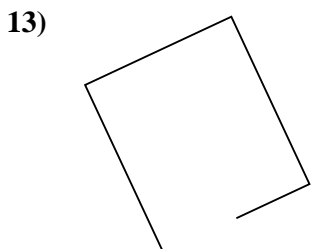
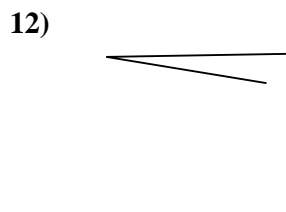
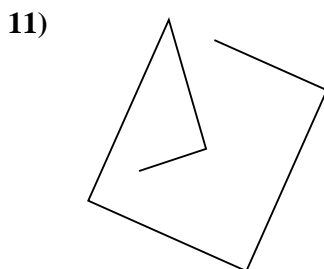
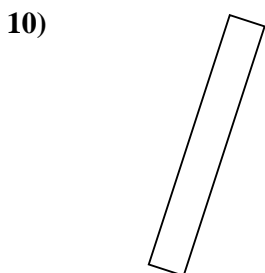
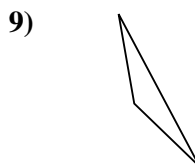

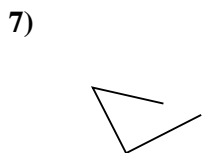
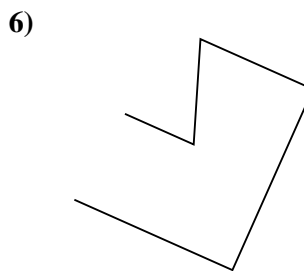
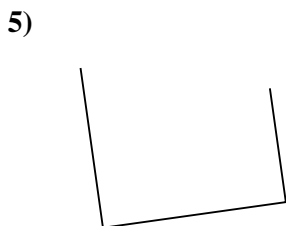
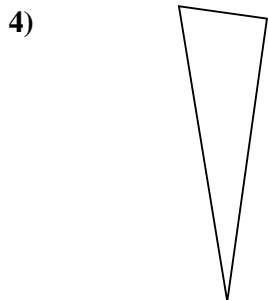
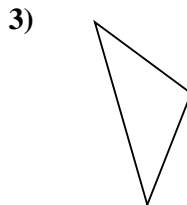
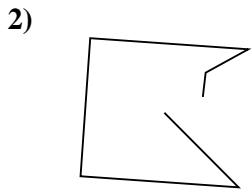
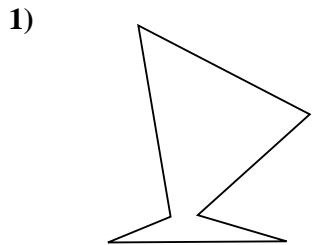
Risposte



- 1. _____
- 2. _____
- 3. _____
- 4. _____
- 5. _____
- 6. _____
- 7. _____
- 8. _____
- 9. _____
- 10. _____
- 11. _____
- 12. _____
- 13. _____
- 14. _____
- 15. _____



Determina se le figure rappresentate sono "Triangolo", "Quadrato", "Rettangolo", "Esagono" o "Altro".



Risposte

1. Esagono

2. Altro

3. Triangolo

4. Triangolo

5. Altro

6. Altro

7. Altro

8. Altro

9. Triangolo

10. Rettangolo

11. Altro

12. Altro

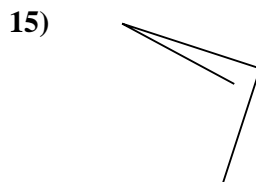
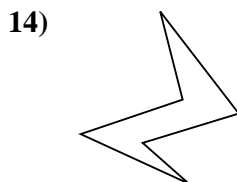
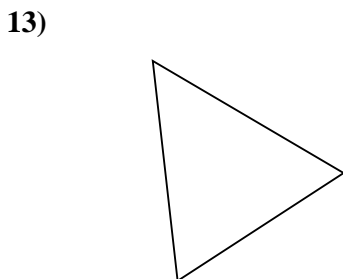
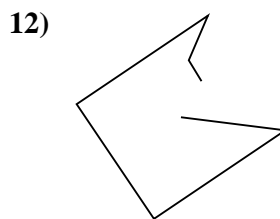
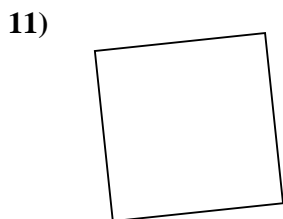
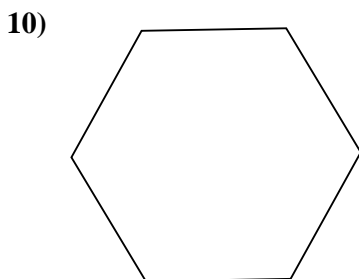
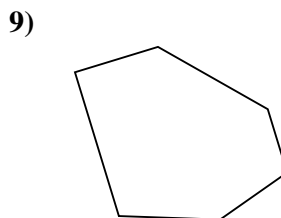
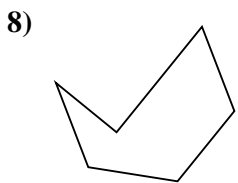
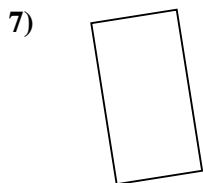

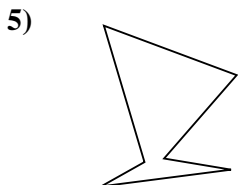
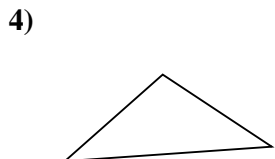
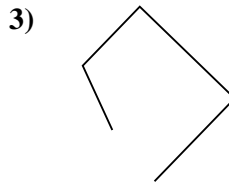
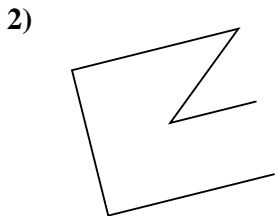
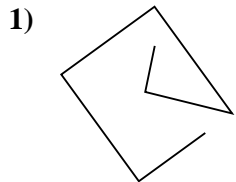
13. Altro

14. Rettangolo

15. Esagono



Determina se le figure rappresentate sono "Triangolo", "Quadrato", " Rettangolo", "Esagono" o "Altro".



Risposte

1. _____

2. _____

3. _____

4. _____

5. _____

6. _____

7. _____

8. _____

9. _____

10. _____

11. _____

12. _____

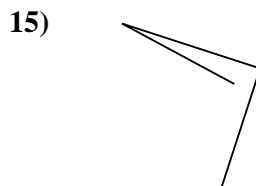
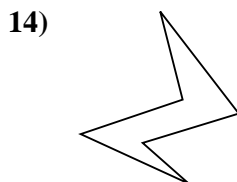
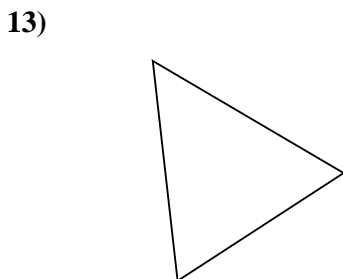
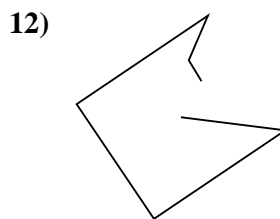
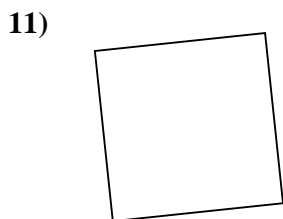
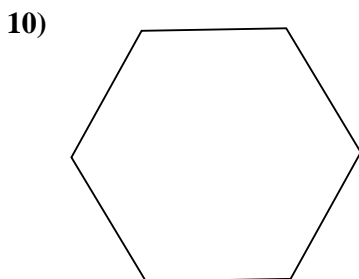
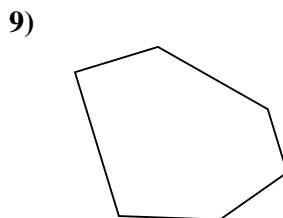
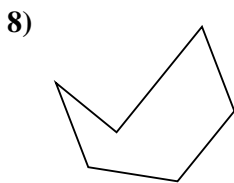
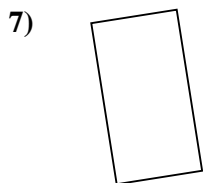

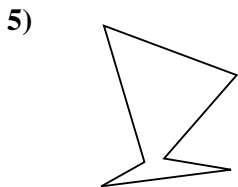
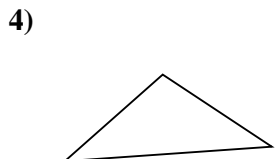
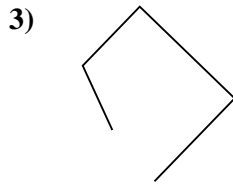
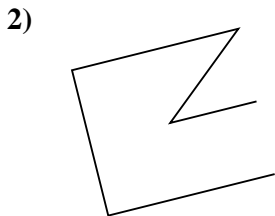
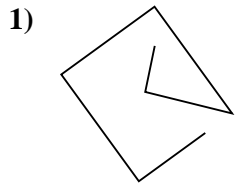
13. _____

14. _____

15. _____



Determina se le figure rappresentate sono "Triangolo", "Quadrato", "Rettangolo", "Esagono" o "Altro".



Risposte

1. Altro

2. Altro

3. Altro

4. Triangolo

5. Esagono

6. Altro

7. Rettangolo

8. Esagono

9. Esagono

10. Esagono

11. Quadrato

12. Altro

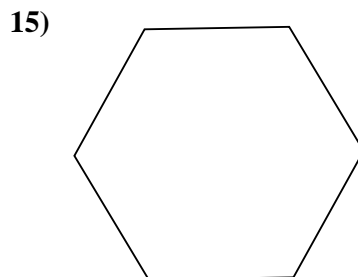
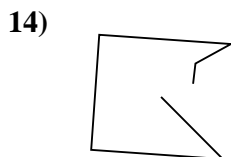
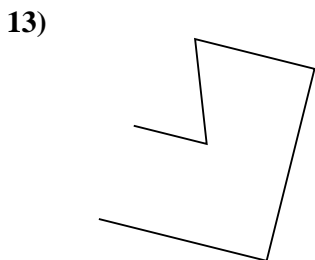
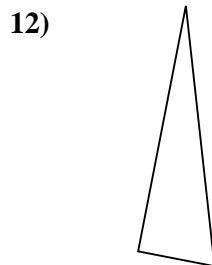
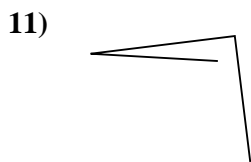
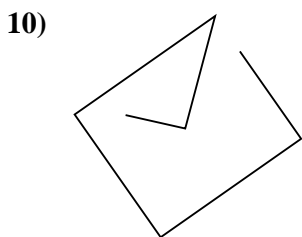
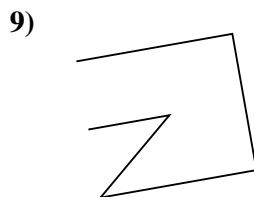
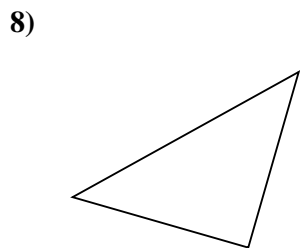
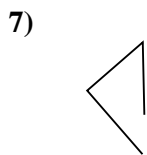

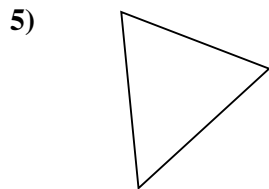
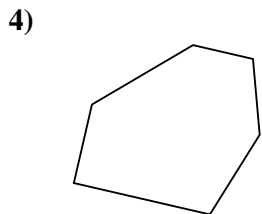
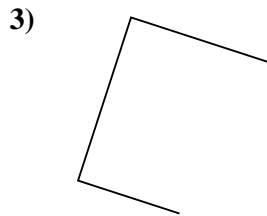
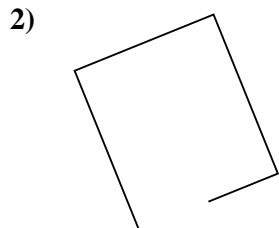
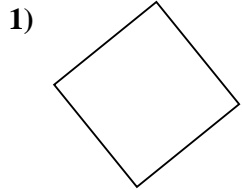
13. Triangolo

14. Esagono

15. Altro



Determina se le figure rappresentate sono "Triangolo", "Quadrato", "Rettangolo", "Esagono" o "Altro".



Risposte

1. _____

2. _____

3. _____

4. _____

5. _____

6. _____

7. _____

8. _____

9. _____

10. _____

11. _____

12. _____

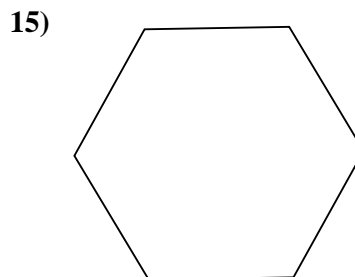
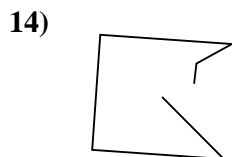
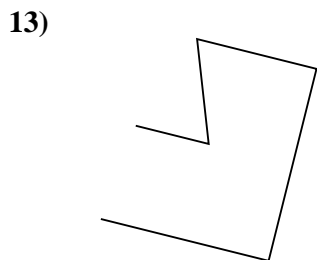
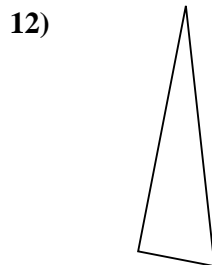
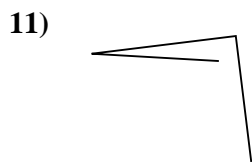
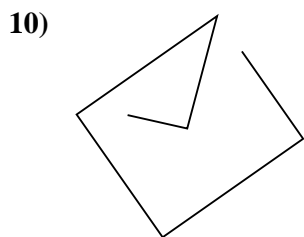
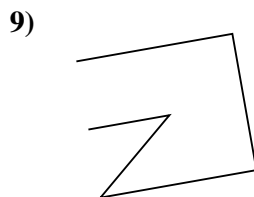
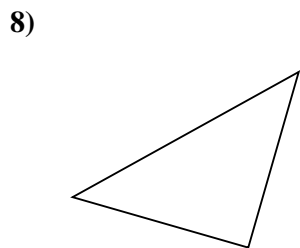
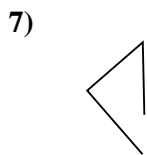

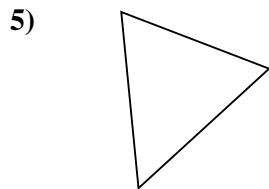
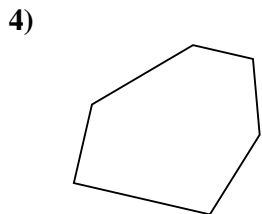
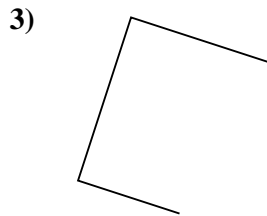
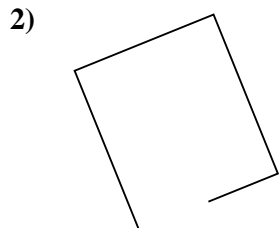
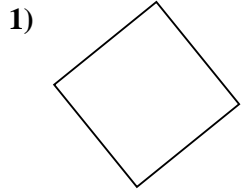
13. _____

14. _____

15. _____



Determina se le figure rappresentate sono "Triangolo", "Quadrato", "Rettangolo", "Esagono" o "Altro".



Risposte

1. Quadrato

2. Altro

3. Altro

4. Esagono

5. Triangolo

6. Triangolo

7. Altro

8. Triangolo

9. Altro

10. Altro

11. Altro

12. Triangolo

13. Altro

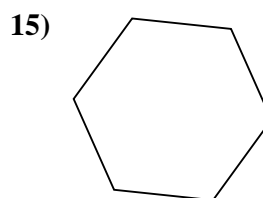
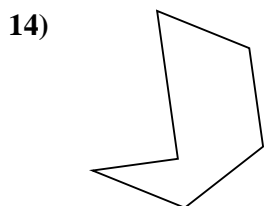
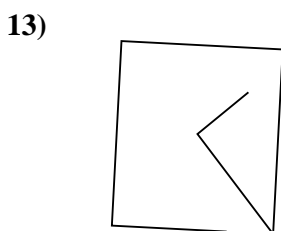
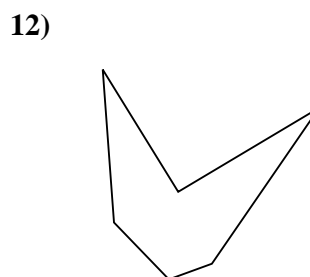
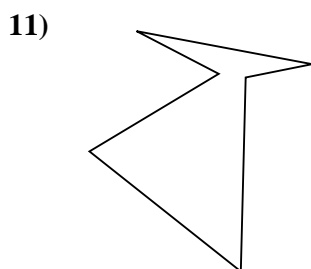
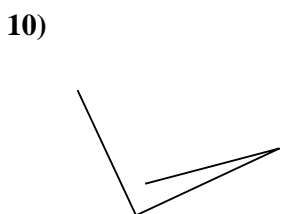
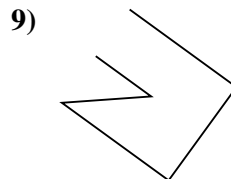
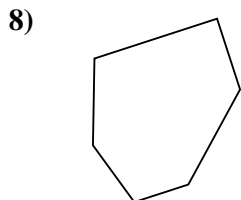

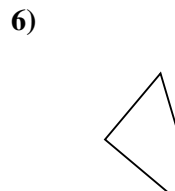

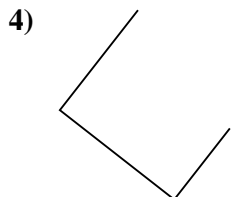
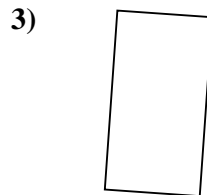
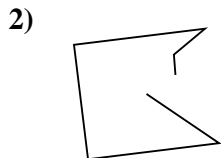
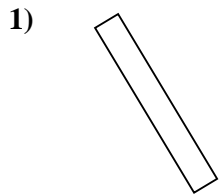
14. Altro

15. Esagono



Determina se le figure rappresentate sono "Triangolo", "Quadrato", "Rettangolo", "Esagono" o "Altro".

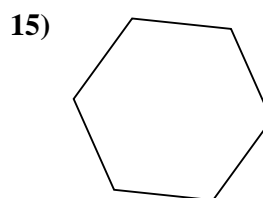
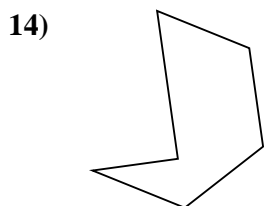
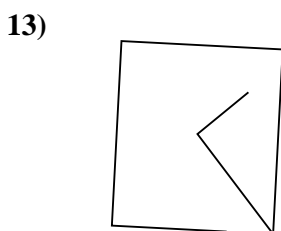
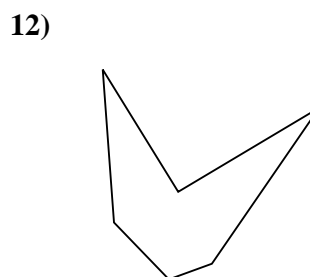
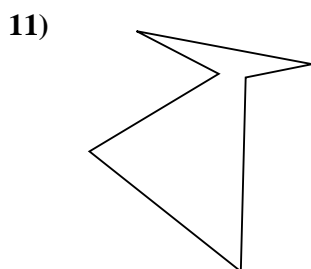
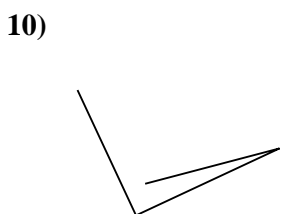
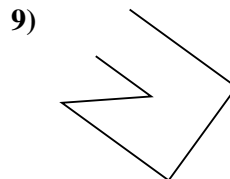
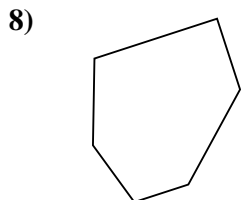

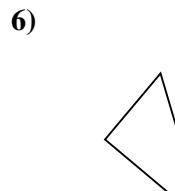

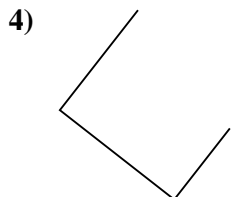
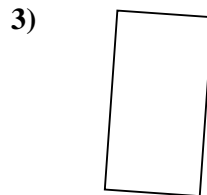
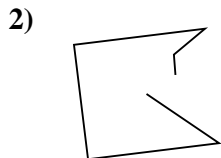
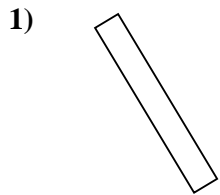
Risposte



- 1. _____
- 2. _____
- 3. _____
- 4. _____
- 5. _____
- 6. _____
- 7. _____
- 8. _____
- 9. _____
- 10. _____
- 11. _____
- 12. _____
- 13. _____
- 14. _____
- 15. _____



Determina se le figure rappresentate sono "Triangolo", "Quadrato", "Rettangolo", "Esagono" o "Altro".



Risposte

1. Rettangolo

2. Altro

3. Rettangolo

4. Altro

5. Rettangolo

6. Altro

7. Esagono

8. Esagono

9. Altro

10. Altro

11. Esagono

12. Esagono

13. Altro

14. Esagono

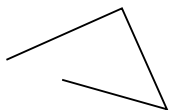
15. Esagono



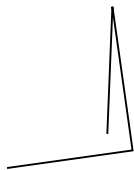
Determina se le figure rappresentate sono "Triangolo", "Quadrato", "Rettangolo", "Esagono" o "Altro".

Risposte


1)



2)



3)



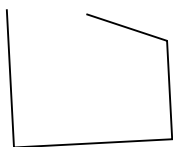
1. _____

2. _____

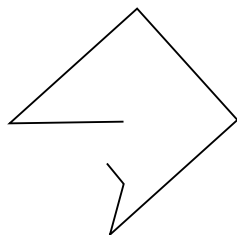
3. _____

4. _____

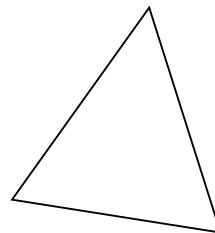
4)



5)



6)



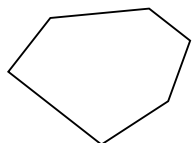
5. _____

6. _____

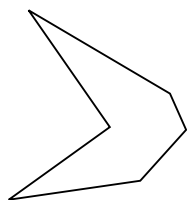
7. _____

8. _____

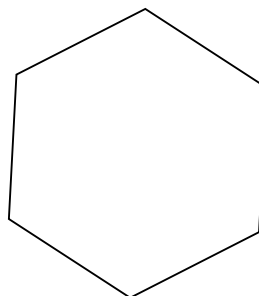
7)



8)



9)



9. _____

10. _____

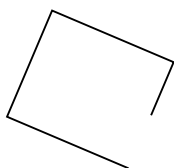
11. _____

12. _____

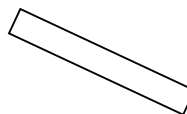
10)



11)



12)

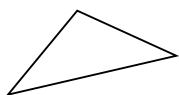


13. _____

14. _____

15. _____

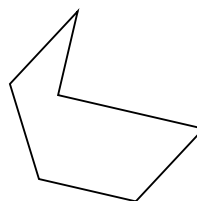
13)



14)

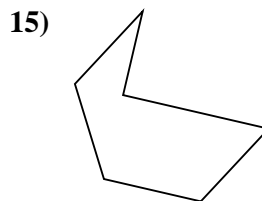
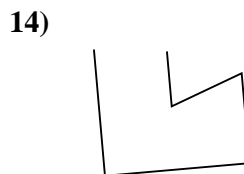
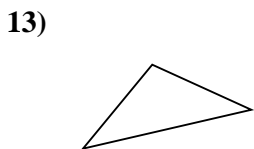
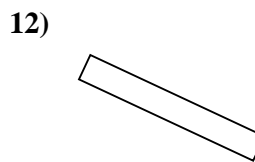
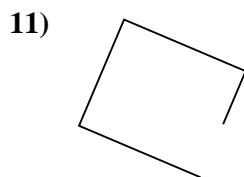
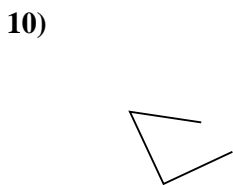
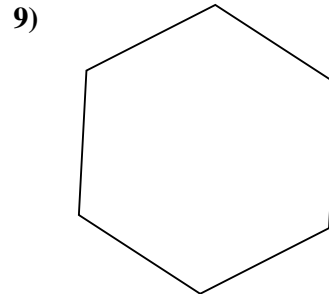
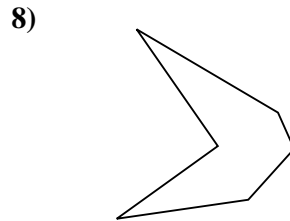
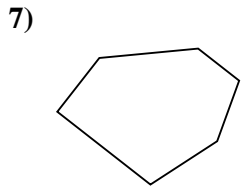
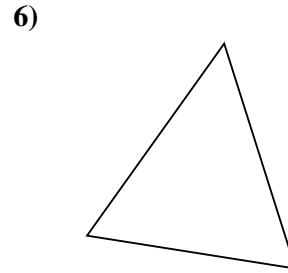
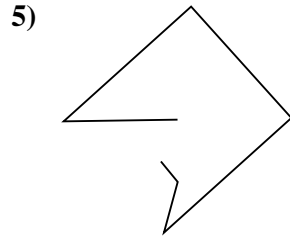
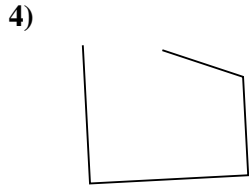
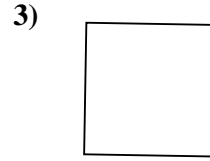
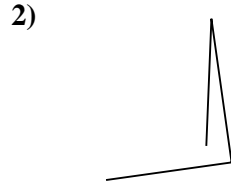
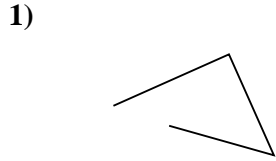


15)





Determina se le figure rappresentate sono "Triangolo", "Quadrato", "Rettangolo", "Esagono" o "Altro".



Risposte

1. Altro

2. Altro

3. Quadrato

4. Altro

5. Altro

6. Triangolo

7. Esagono

8. Esagono

9. Esagono

10. Altro

11. Altro

12. Rettangolo

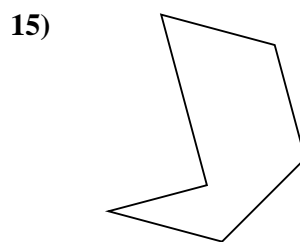
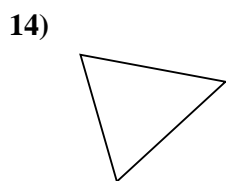
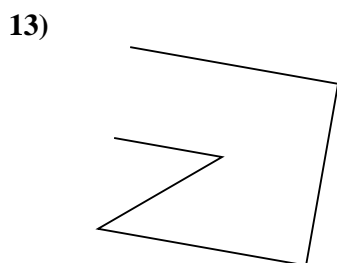
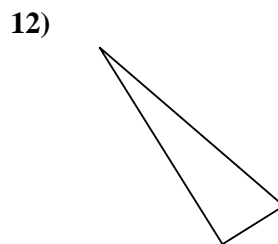
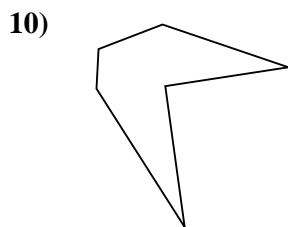
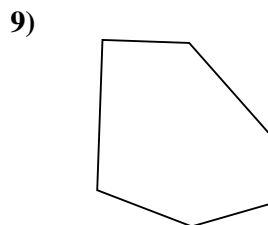
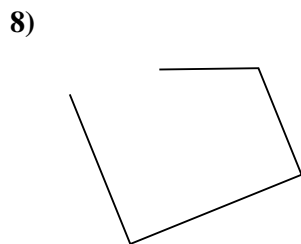

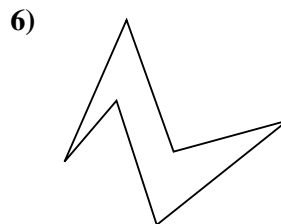
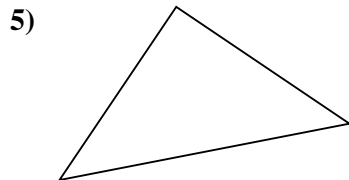
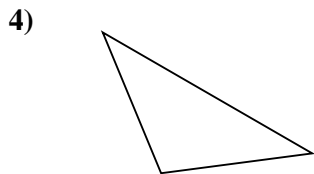
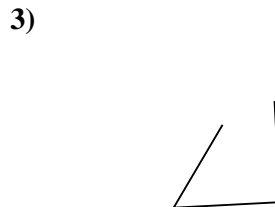
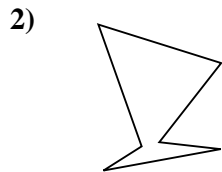
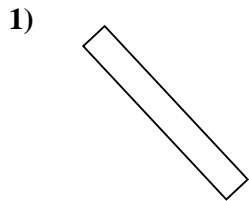
13. Triangolo

14. Altro

15. Esagono



Determina se le figure rappresentate sono "Triangolo", "Quadrato", "Rettangolo", "Esagono" o "Altro".

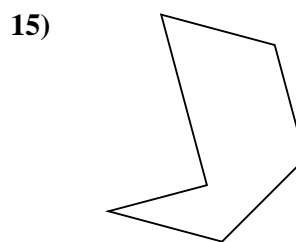
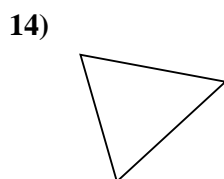
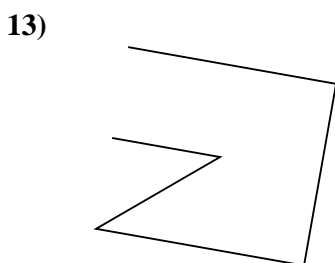
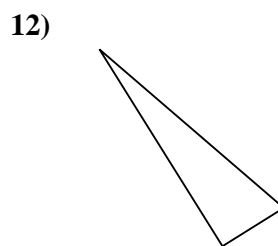
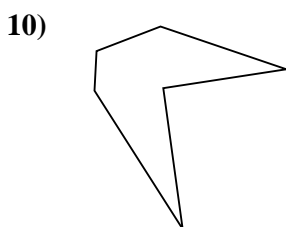
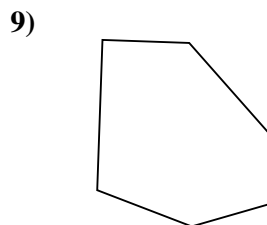
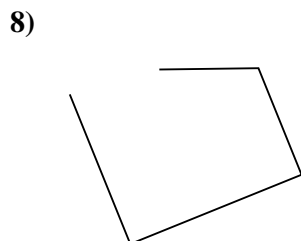

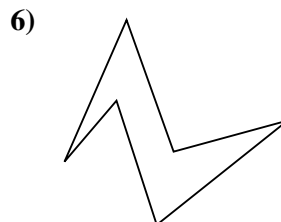
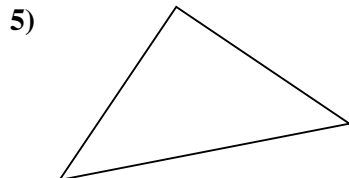
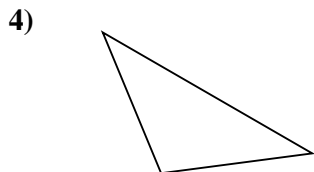
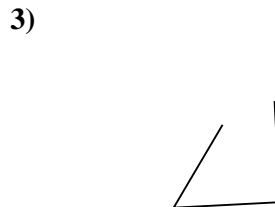
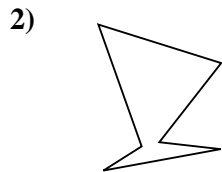
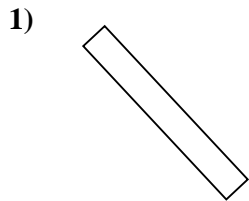


Risposte

- 1. _____
- 2. _____
- 3. _____
- 4. _____
- 5. _____
- 6. _____
- 7. _____
- 8. _____
- 9. _____
- 10. _____
- 11. _____
- 12. _____
- 13. _____
- 14. _____
- 15. _____



Determina se le figure rappresentate sono "Triangolo", "Quadrato", "Rettangolo", "Esagono" o "Altro".



Risposte

1. **Rettangolo**

2. **Esagono**

3. **Altro**

4. **Triangolo**

5. **Triangolo**

6. **Esagono**

7. **Rettangolo**

8. **Altro**

9. **Esagono**

10. **Esagono**

11. **Altro**

12. **Triangolo**

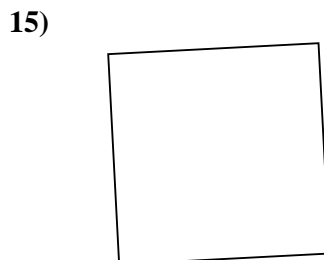
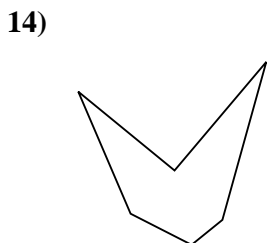
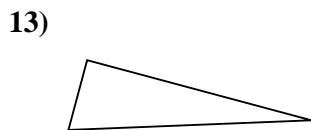
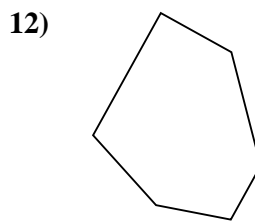
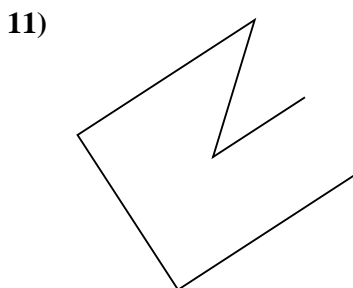
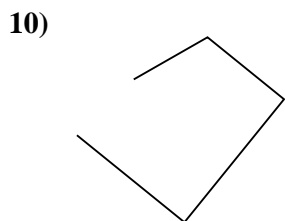
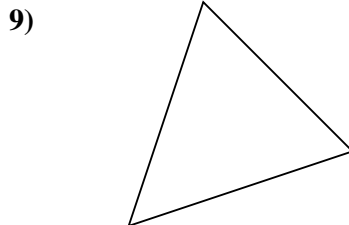

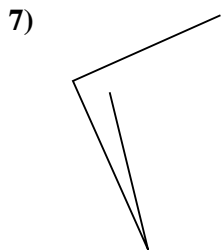
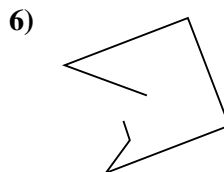
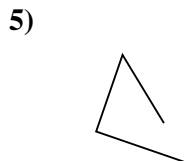
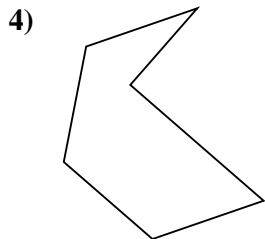
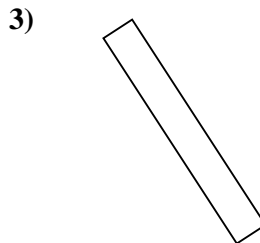
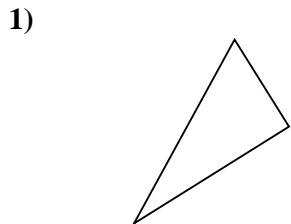
13. **Altro**

14. **Triangolo**

15. **Esagono**



Determina se le figure rappresentate sono "Triangolo", "Quadrato", "Rettangolo", "Esagono" o "Altro".



Risposte

1. _____

2. _____

3. _____

4. _____

5. _____

6. _____

7. _____

8. _____

9. _____

10. _____

11. _____

12. _____

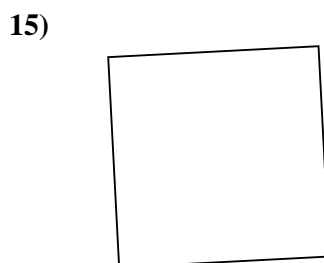
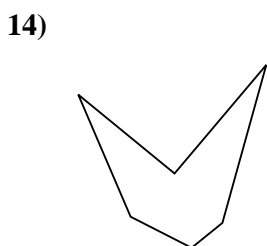
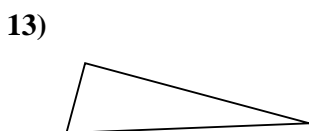
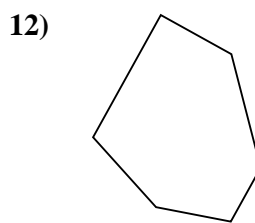
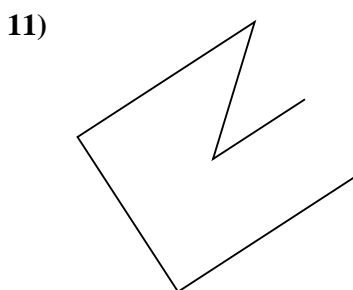
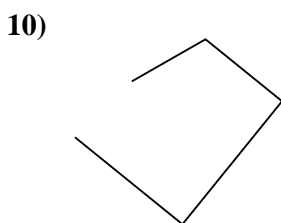
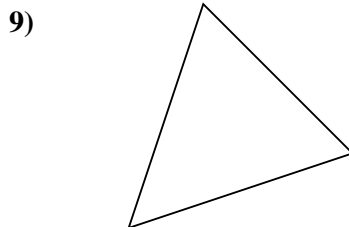

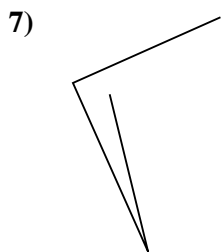
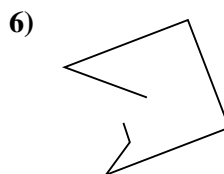
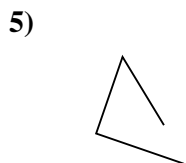
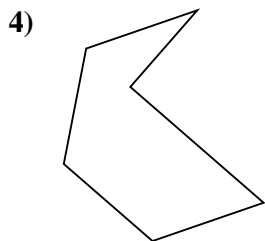
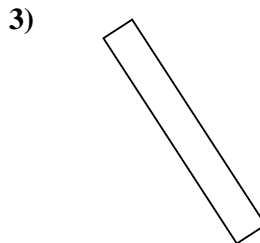
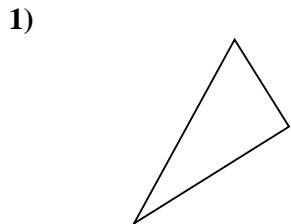
13. _____

14. _____

15. _____



Determina se le figure rappresentate sono "Triangolo", "Quadrato", "Rettangolo", "Esagono" o "Altro".



Risposte

1. Triangolo

2. Altro

3. Rettangolo

4. Esagono

5. Altro

6. Altro

7. Altro

8. Rettangolo

9. Triangolo

10. Altro

11. Altro

12. Esagono

13. Triangolo

14. Esagono

15. Quadrato

