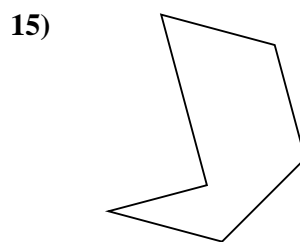
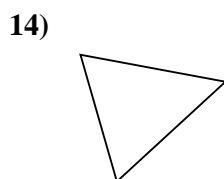
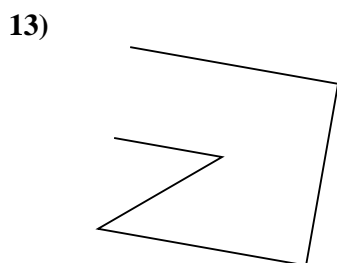
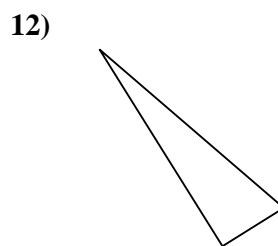
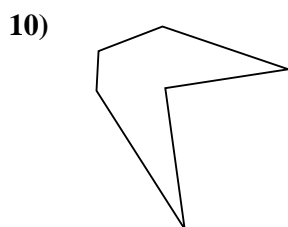
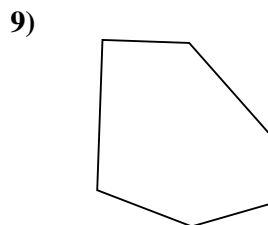
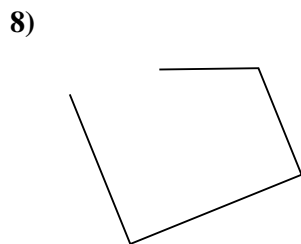

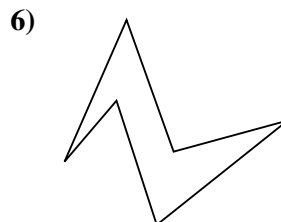
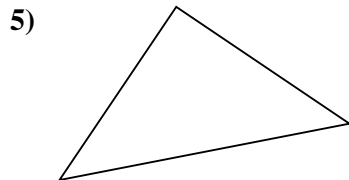
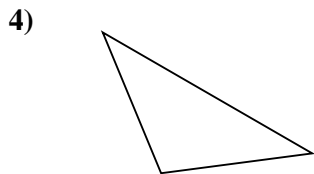
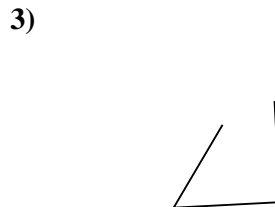
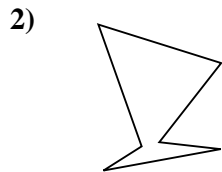
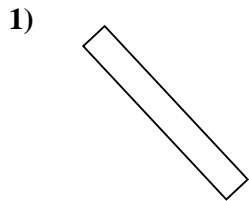




Determina se le figure rappresentate sono "Triangolo", "Quadrato", "Rettangolo", "Esagono" o "Altro".



Risposte

1. _____

2. _____

3. _____

4. _____

5. _____

6. _____

7. _____

8. _____

9. _____

10. _____

11. _____

12. _____

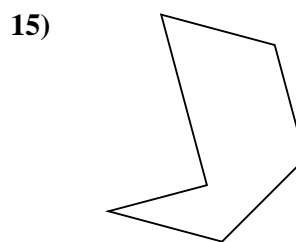
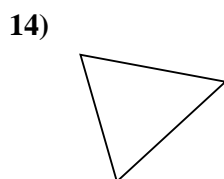
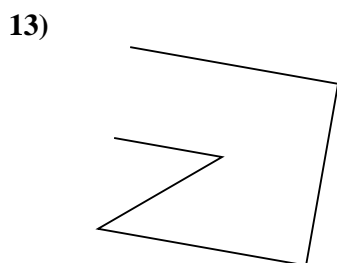
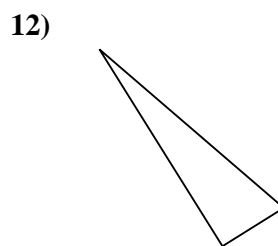
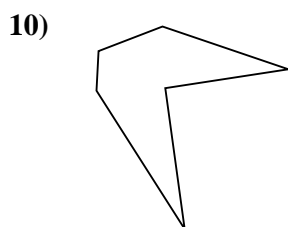
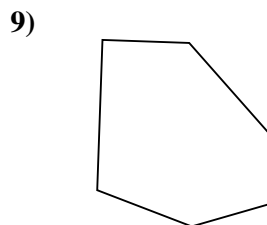
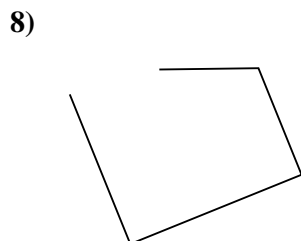

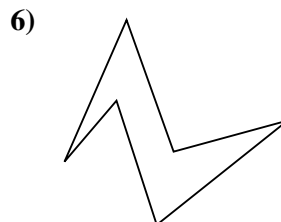
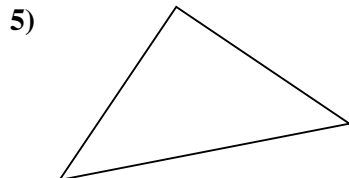
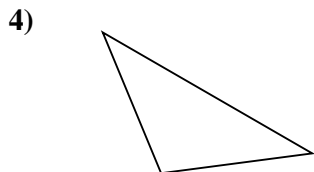
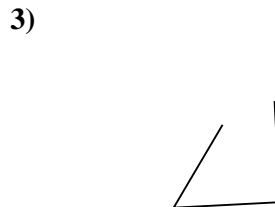
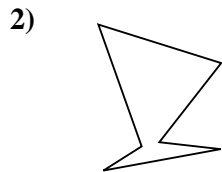
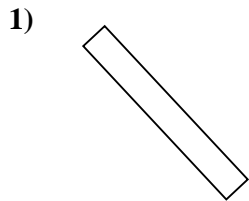
13. _____

14. _____

15. _____



Determina se le figure rappresentate sono "Triangolo", "Quadrato", "Rettangolo", "Esagono" o "Altro".



Risposte

1. **Rettangolo**

2. **Esagono**

3. **Altro**

4. **Triangolo**

5. **Triangolo**

6. **Esagono**

7. **Rettangolo**

8. **Altro**

9. **Esagono**

10. **Esagono**

11. **Altro**

12. **Triangolo**

13. **Altro**

14. **Triangolo**

15. **Esagono**