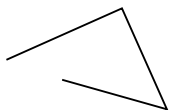




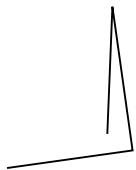
Determina se le figure rappresentate sono "Triangolo", "Quadrato", "Rettangolo", "Esagono" o "Altro".

Risposte


1)



2)



3)



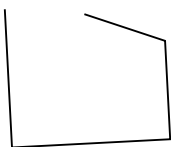
1. _____

2. _____

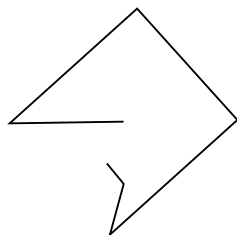
3. _____

4. _____

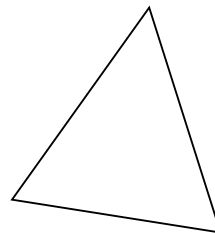
4)



5)



6)



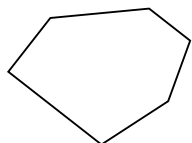
5. _____

6. _____

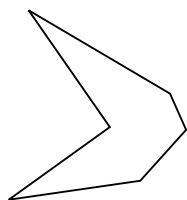
7. _____

8. _____

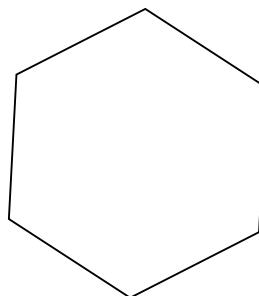
7)



8)



9)



9. _____

10. _____

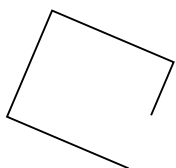
11. _____

12. _____

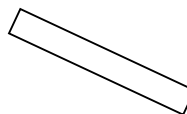
10)



11)



12)

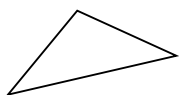


13. _____

14. _____

15. _____

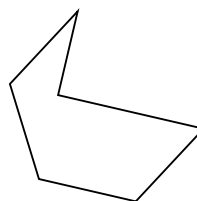
13)



14)

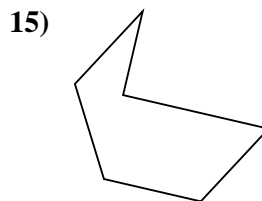
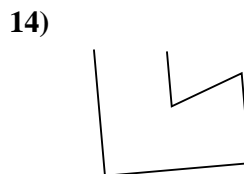
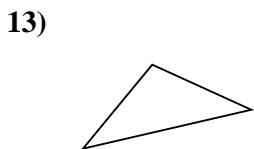
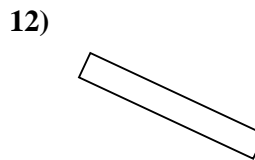
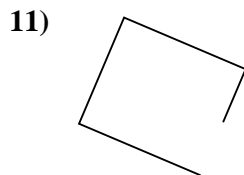
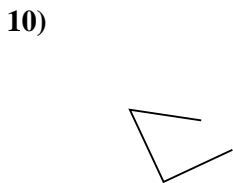
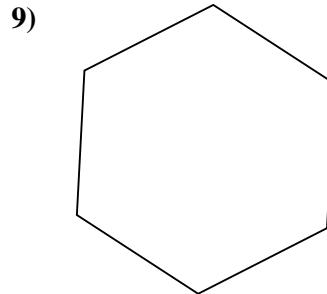
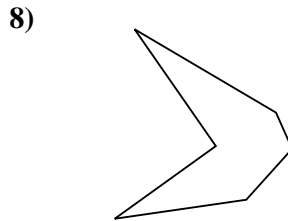
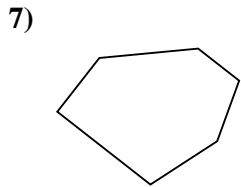
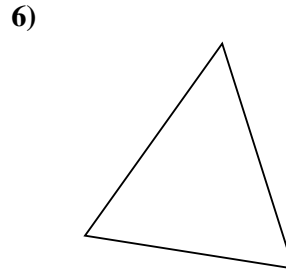
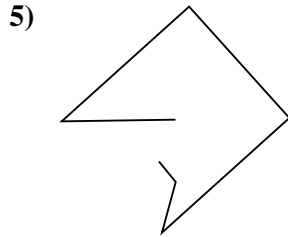
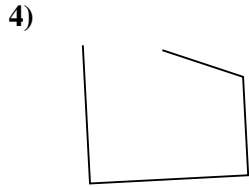
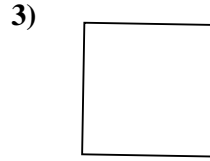
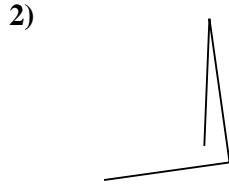
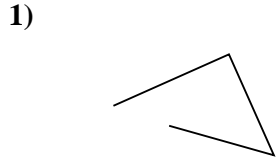


15)





Determina se le figure rappresentate sono "Triangolo", "Quadrato", "Rettangolo", "Esagono" o "Altro".



Risposte

1. Altro

2. Altro

3. Quadrato

4. Altro

5. Altro

6. Triangolo

7. Esagono

8. Esagono

9. Esagono

10. Altro

11. Altro

12. Rettangolo

13. Triangolo

14. Altro

15. Esagono