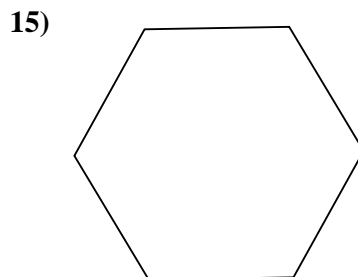
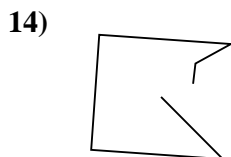
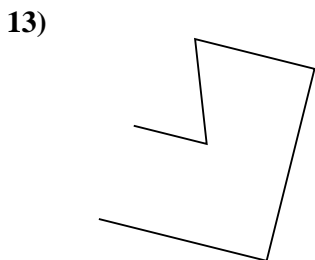
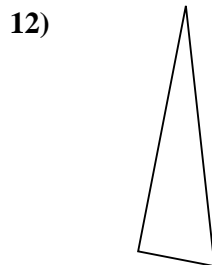
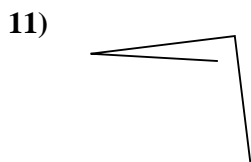
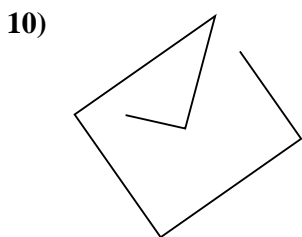
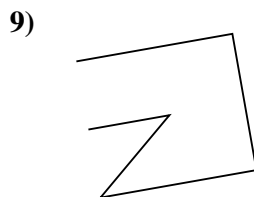
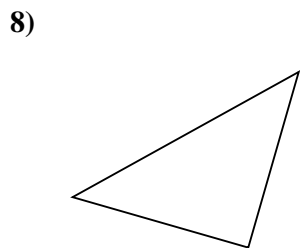
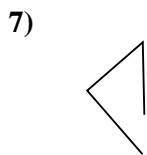

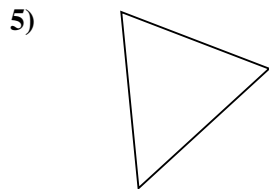
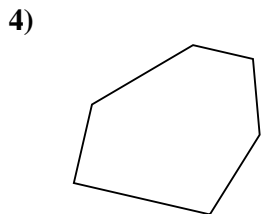
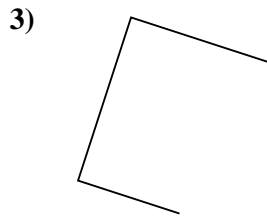
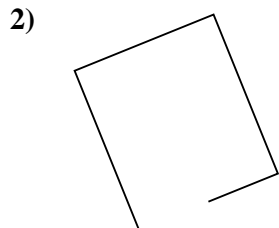
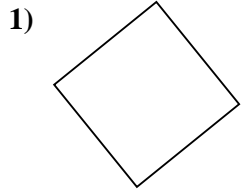




Determina se le figure rappresentate sono "Triangolo", "Quadrato", "Rettangolo", "Esagono" o "Altro".



Risposte

1. _____

2. _____

3. _____

4. _____

5. _____

6. _____

7. _____

8. _____

9. _____

10. _____

11. _____

12. _____

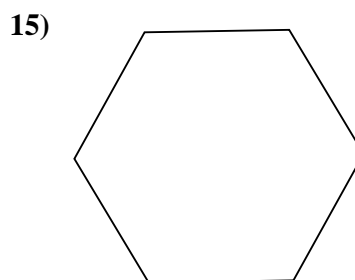
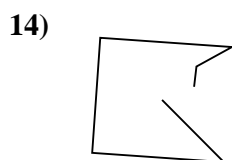
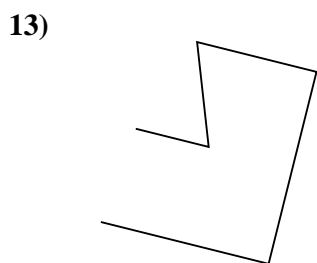
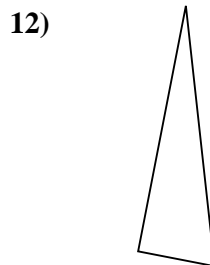
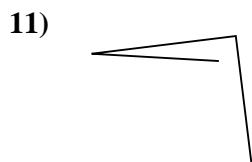
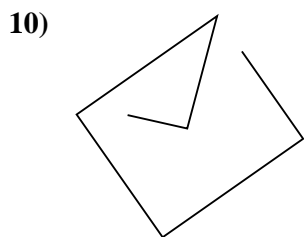
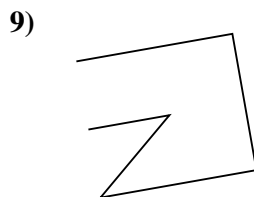
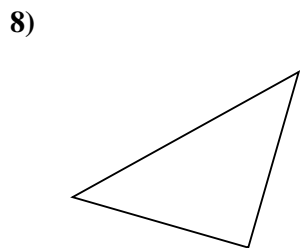
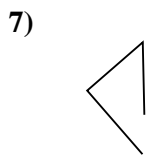

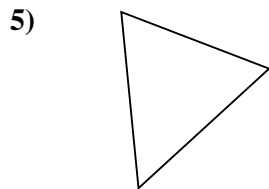
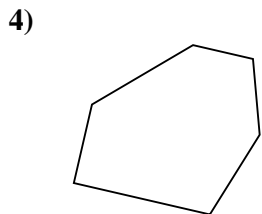
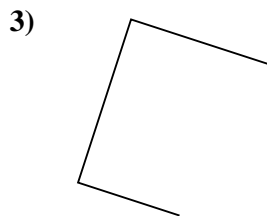
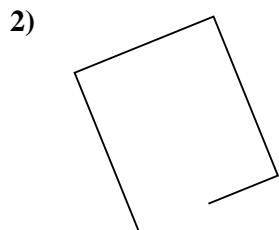
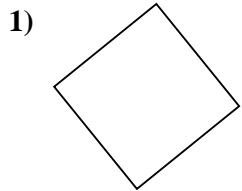
13. _____

14. _____

15. _____



Determina se le figure rappresentate sono "Triangolo", "Quadrato", "Rettangolo", "Esagono" o "Altro".



Risposte

1. Quadrato

2. Altro

3. Altro

4. Esagono

5. Triangolo

6. Triangolo

7. Altro

8. Triangolo

9. Altro

10. Altro

11. Altro

12. Triangolo

13. Altro

14. Altro

15. Esagono