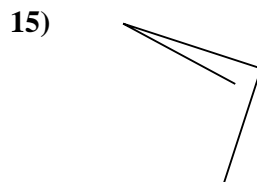
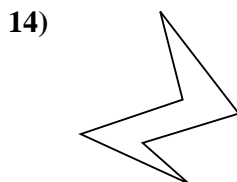
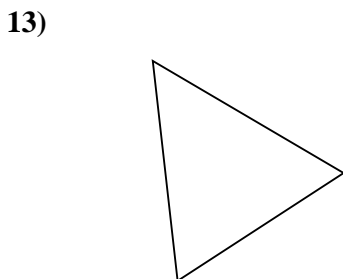
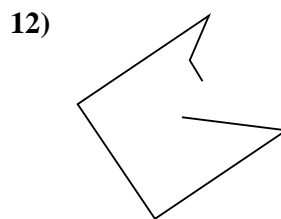
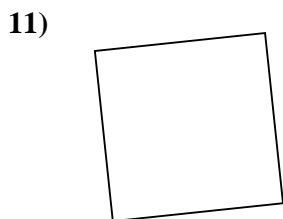
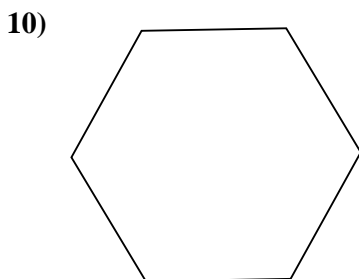
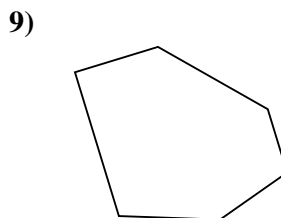
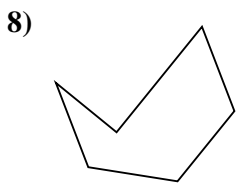
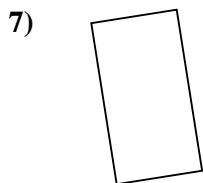

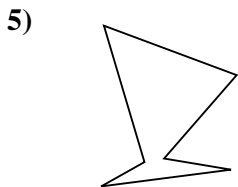
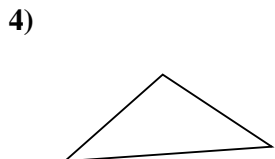
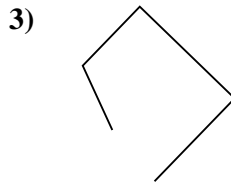
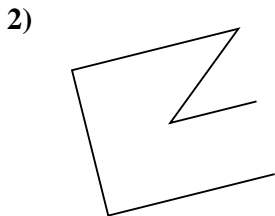
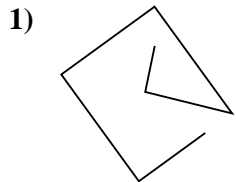




Determina se le figure rappresentate sono "Triangolo", "Quadrato", " Rettangolo", "Esagono" o "Altro".



Risposte

1. \_\_\_\_\_

2. \_\_\_\_\_

3. \_\_\_\_\_

4. \_\_\_\_\_

5. \_\_\_\_\_

6. \_\_\_\_\_

7. \_\_\_\_\_

8. \_\_\_\_\_

9. \_\_\_\_\_

10. \_\_\_\_\_

11. \_\_\_\_\_

12. \_\_\_\_\_

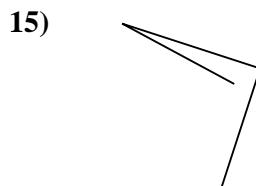
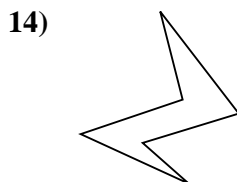
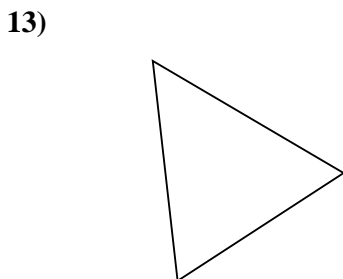
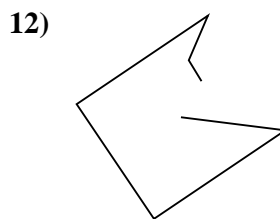
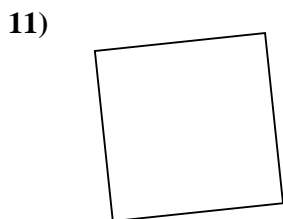
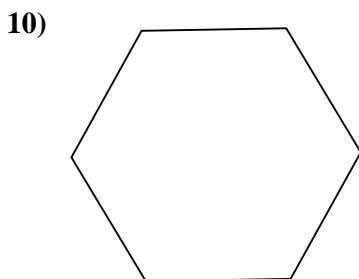
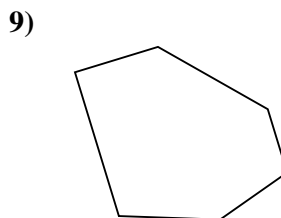
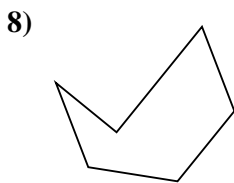
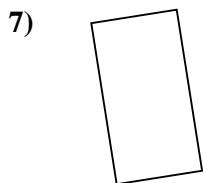

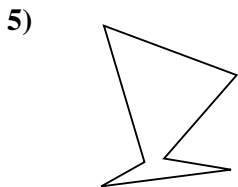
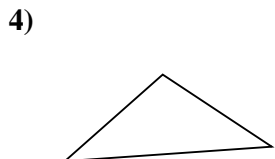
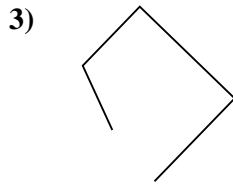
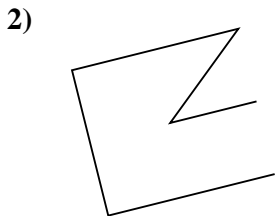
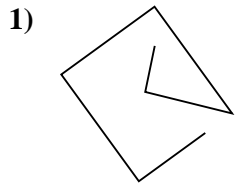
13. \_\_\_\_\_

14. \_\_\_\_\_

15. \_\_\_\_\_



Determina se le figure rappresentate sono "Triangolo", "Quadrato", "Rettangolo", "Esagono" o "Altro".



Risposte

1. Altro

2. Altro

3. Altro

4. Triangolo

5. Esagono

6. Altro

7. Rettangolo

8. Esagono

9. Esagono

10. Esagono

11. Quadrato

12. Altro

13. Triangolo

14. Esagono

15. Altro