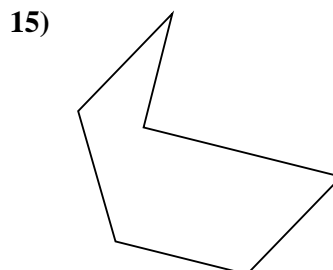

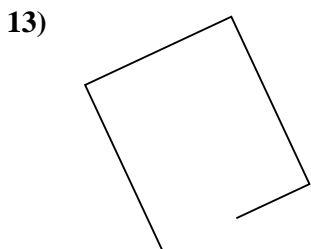
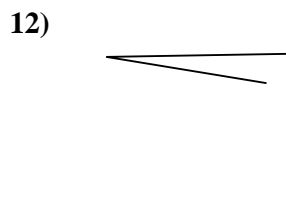
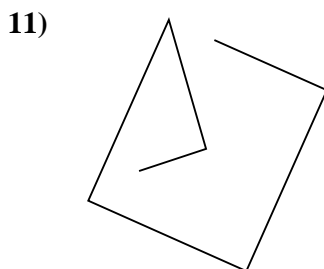
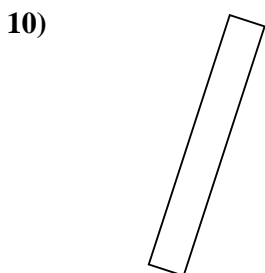
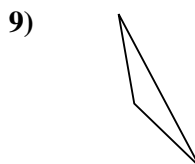

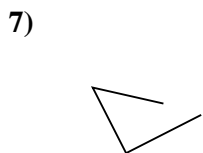
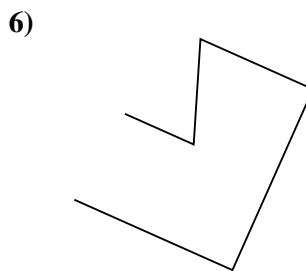
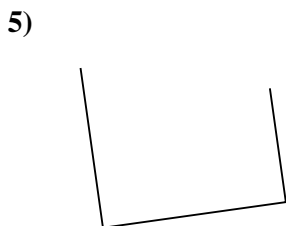
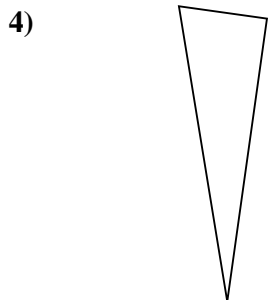
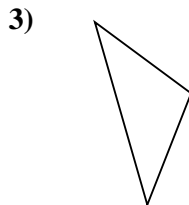
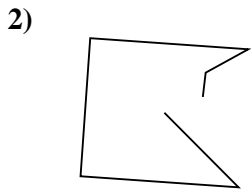
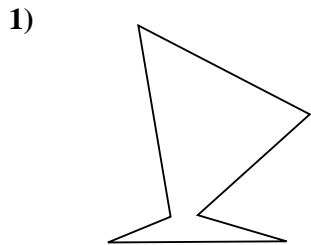




Determina se le figure rappresentate sono "Triangolo", "Quadrato", "Rettangolo", "Esagono" o "Altro".

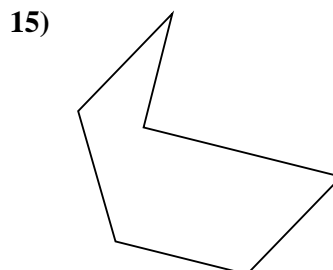
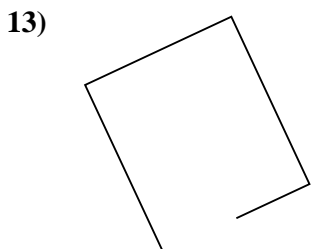
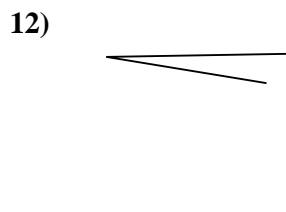
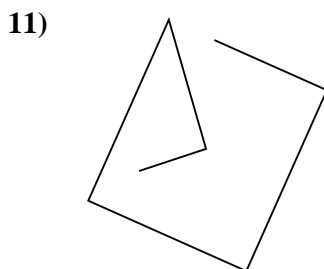
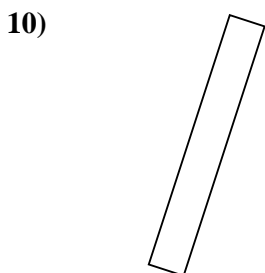
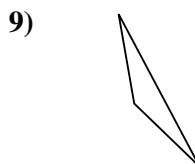
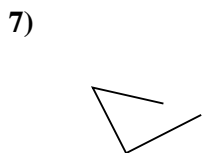
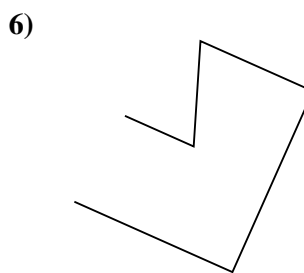

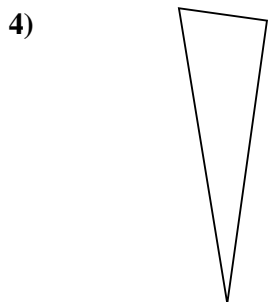
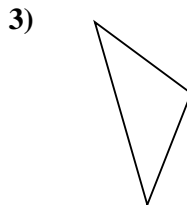
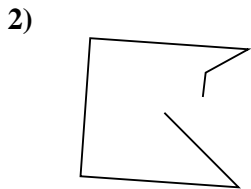
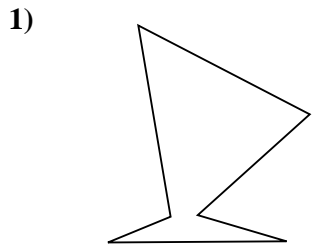


Risposte

- 1. _____
- 2. _____
- 3. _____
- 4. _____
- 5. _____
- 6. _____
- 7. _____
- 8. _____
- 9. _____
- 10. _____
- 11. _____
- 12. _____
- 13. _____
- 14. _____
- 15. _____



Determina se le figure rappresentate sono "Triangolo", "Quadrato", "Rettangolo", "Esagono" o "Altro".



Risposte

1. Esagono

2. Altro

3. Triangolo

4. Triangolo

5. Altro

6. Altro

7. Altro

8. Altro

9. Triangolo

10. Rettangolo

11. Altro

12. Altro

13. Altro

14. Rettangolo

15. Esagono